




Match each equation to the answer and write the answer.

Answers

Ex)  $\frac{1}{4} + \frac{1}{4} + \frac{1}{4}$



Ex.          **N**

1)  $\frac{1}{8} + \frac{1}{8} + \frac{1}{8} + \frac{1}{8} + \frac{1}{8} + \frac{1}{8} + \frac{1}{8}$



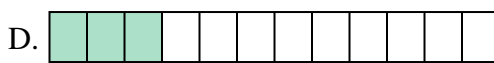
1. \_\_\_\_\_

2)  $\frac{1}{10} + \frac{1}{10} + \frac{1}{10}$




2. \_\_\_\_\_

3)  $\frac{1}{6} + \frac{1}{6} + \frac{1}{6} + \frac{1}{6}$




3. \_\_\_\_\_

4)  $\frac{1}{10} + \frac{1}{10} + \frac{1}{10} + \frac{1}{10} + \frac{1}{10} + \frac{1}{10} + \frac{1}{10}$




5. \_\_\_\_\_

5)  $\frac{1}{8} + \frac{1}{8} + \frac{1}{8}$




6. \_\_\_\_\_

6)  $\frac{1}{12} + \frac{1}{12} + \frac{1}{12} + \frac{1}{12} + \frac{1}{12} + \frac{1}{12}$



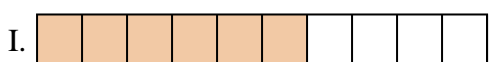
7. \_\_\_\_\_

7)  $\frac{1}{5} + \frac{1}{5} + \frac{1}{5}$




8. \_\_\_\_\_

8)  $\frac{1}{3} + \frac{1}{3}$



9. \_\_\_\_\_

9)  $\frac{1}{5} + \frac{1}{5} + \frac{1}{5} + \frac{1}{5}$




10. \_\_\_\_\_

10)  $\frac{1}{12} + \frac{1}{12} + \frac{1}{12}$



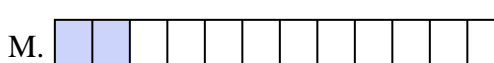
11. \_\_\_\_\_

11)  $\frac{1}{10} + \frac{1}{10} + \frac{1}{10} + \frac{1}{10} + \frac{1}{10} + \frac{1}{10}$



12. \_\_\_\_\_

12)  $\frac{1}{12} + \frac{1}{12}$



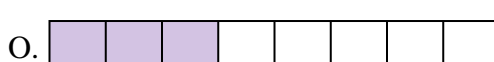
13. \_\_\_\_\_

13)  $\frac{1}{10} + \frac{1}{10}$



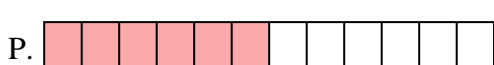
14. \_\_\_\_\_

14)  $\frac{1}{6} + \frac{1}{6} + \frac{1}{6}$



15. \_\_\_\_\_

15)  $\frac{1}{8} + \frac{1}{8} + \frac{1}{8} + \frac{1}{8} + \frac{1}{8} + \frac{1}{8}$






Match each equation to the answer and write the answer.

Answers

Ex)  $\frac{1}{4} + \frac{1}{4} + \frac{1}{4}$



Ex.     **N**    

1)  $\frac{1}{8} + \frac{1}{8} + \frac{1}{8} + \frac{1}{8} + \frac{1}{8} + \frac{1}{8} + \frac{1}{8}$



1.     **J**    

2)  $\frac{1}{10} + \frac{1}{10} + \frac{1}{10}$



2.     **G**    

3)  $\frac{1}{6} + \frac{1}{6} + \frac{1}{6} + \frac{1}{6}$




3.     **E**    

4)  $\frac{1}{10} + \frac{1}{10} + \frac{1}{10} + \frac{1}{10} + \frac{1}{10} + \frac{1}{10} + \frac{1}{10}$



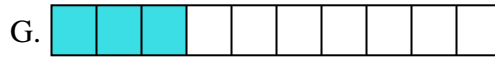
5.     **O**    

5)  $\frac{1}{8} + \frac{1}{8} + \frac{1}{8}$



6.     **P**    

6)  $\frac{1}{12} + \frac{1}{12} + \frac{1}{12} + \frac{1}{12} + \frac{1}{12} + \frac{1}{12}$



7.     **H**    

7)  $\frac{1}{5} + \frac{1}{5} + \frac{1}{5}$



8.     **C**    

8)  $\frac{1}{3} + \frac{1}{3}$



9.     **F**    

9)  $\frac{1}{5} + \frac{1}{5} + \frac{1}{5} + \frac{1}{5}$



10.     **D**    

10)  $\frac{1}{12} + \frac{1}{12} + \frac{1}{12}$



11.     **I**    

11)  $\frac{1}{10} + \frac{1}{10} + \frac{1}{10} + \frac{1}{10} + \frac{1}{10} + \frac{1}{10}$



12.     **M**    

12)  $\frac{1}{12} + \frac{1}{12}$




13.     **B**    

13)  $\frac{1}{10} + \frac{1}{10}$



14.     **L**    

14)  $\frac{1}{6} + \frac{1}{6} + \frac{1}{6}$



15.     **A**    

15)  $\frac{1}{8} + \frac{1}{8} + \frac{1}{8} + \frac{1}{8} + \frac{1}{8} + \frac{1}{8}$

