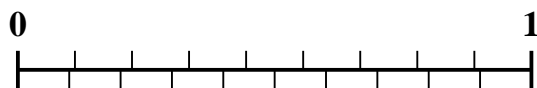


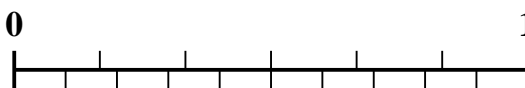


Use the number line to solve each problem.

1) Which amount is larger,  $\frac{2}{9}$  or 0.34?



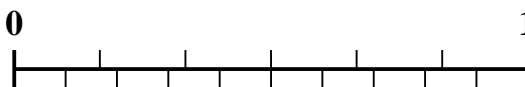
2) Which amount is larger,  $\frac{3}{6}$  or 0.68?



3) Which amount is larger,  $\frac{6}{7}$  or 0.72?



4) Which amount is larger,  $\frac{4}{6}$  or 0.47?



5) Which amount is larger,  $\frac{3}{7}$  or 0.54?



6) Which amount is larger,  $\frac{1}{3}$  or 0.51?



7) Which amount is larger,  $\frac{5}{7}$  or 0.54?



8) Which amount is larger,  $\frac{3}{4}$  or 0.89?



9) Which amount is larger,  $\frac{4}{5}$  or 0.6?



10) Which amount is larger,  $\frac{1}{2}$  or 0.34?



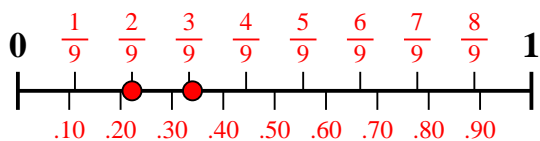
**Answers**

1. \_\_\_\_\_
2. \_\_\_\_\_
3. \_\_\_\_\_
4. \_\_\_\_\_
5. \_\_\_\_\_
6. \_\_\_\_\_
7. \_\_\_\_\_
8. \_\_\_\_\_
9. \_\_\_\_\_
10. \_\_\_\_\_

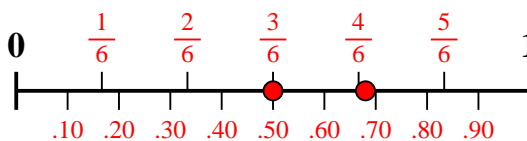


Use the number line to solve each problem.

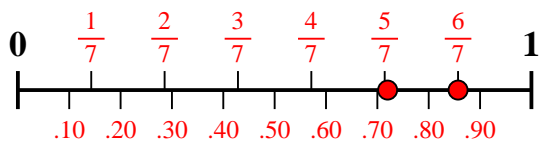
1) Which amount is larger,  $\frac{2}{9}$  or 0.34?



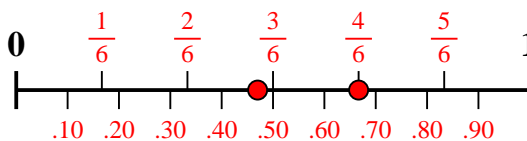
2) Which amount is larger,  $\frac{3}{6}$  or 0.68?



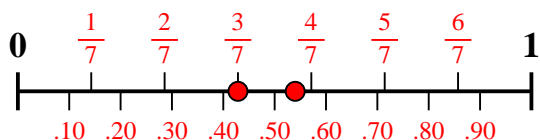
3) Which amount is larger,  $\frac{6}{7}$  or 0.72?



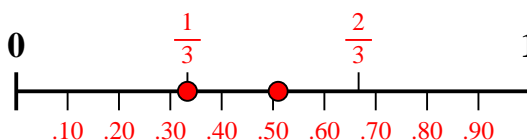
4) Which amount is larger,  $\frac{4}{6}$  or 0.47?



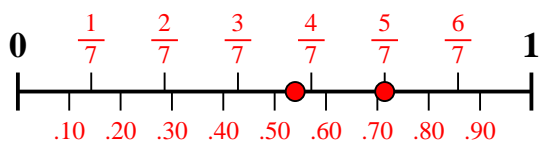
5) Which amount is larger,  $\frac{3}{7}$  or 0.54?



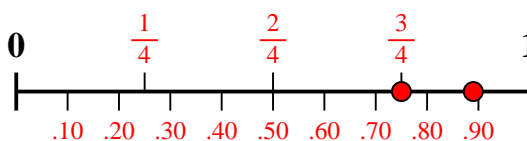
6) Which amount is larger,  $\frac{1}{3}$  or 0.51?



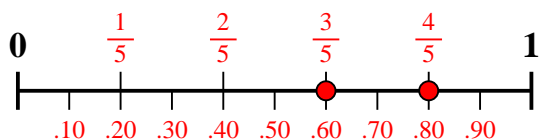
7) Which amount is larger,  $\frac{5}{7}$  or 0.54?



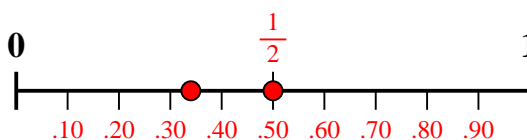
8) Which amount is larger,  $\frac{3}{4}$  or 0.89?



9) Which amount is larger,  $\frac{4}{5}$  or 0.6?



10) Which amount is larger,  $\frac{1}{2}$  or 0.34?



Answers

1. **0.34**

2. **0.68**

3.  $\frac{6}{7}$

4.  $\frac{4}{6}$

5. **0.54**

6. **0.51**

7.  $\frac{5}{7}$

8. **0.89**

9.  $\frac{4}{5}$

10.  $\frac{1}{2}$