

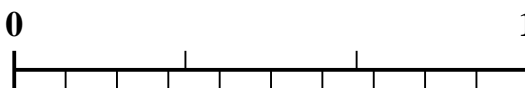


Use the number line to solve each problem.


1) Which amount is larger,  $\frac{2}{9}$  or 0.36?



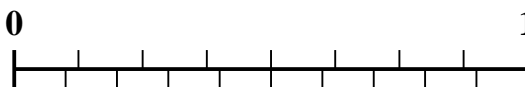
2) Which amount is larger,  $\frac{1}{3}$  or 0.43?




3) Which amount is larger,  $\frac{1}{5}$  or 0.35?



4) Which amount is larger,  $\frac{2}{8}$  or 0.36?




5) Which amount is larger,  $\frac{4}{6}$  or 0.57?



6) Which amount is larger,  $\frac{3}{9}$  or 0.15?



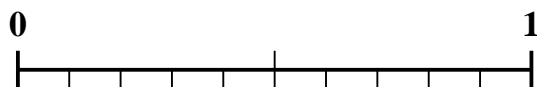
7) Which amount is larger,  $\frac{3}{8}$  or 0.49?



8) Which amount is larger,  $\frac{3}{5}$  or 0.71?



9) Which amount is larger,  $\frac{1}{2}$  or 0.64?



10) Which amount is larger,  $\frac{6}{9}$  or 0.52?



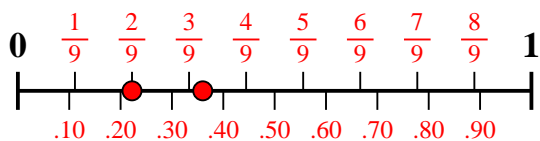
Answers

1. \_\_\_\_\_
2. \_\_\_\_\_
3. \_\_\_\_\_
4. \_\_\_\_\_
5. \_\_\_\_\_
6. \_\_\_\_\_
7. \_\_\_\_\_
8. \_\_\_\_\_
9. \_\_\_\_\_
10. \_\_\_\_\_

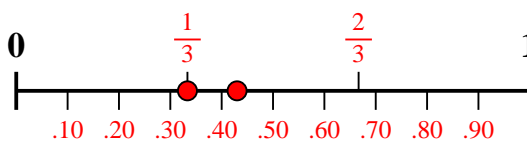


Use the number line to solve each problem.

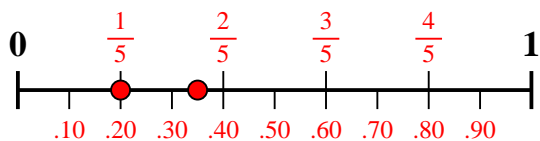
1) Which amount is larger,  $\frac{2}{9}$  or 0.36?



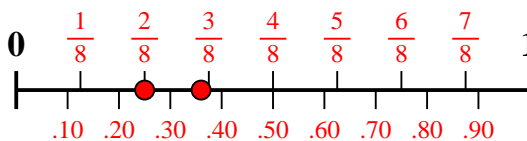
2) Which amount is larger,  $\frac{1}{3}$  or 0.43?



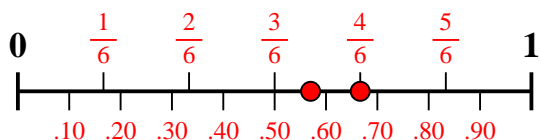
3) Which amount is larger,  $\frac{1}{5}$  or 0.35?



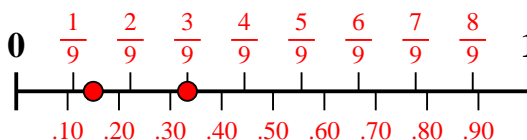
4) Which amount is larger,  $\frac{2}{8}$  or 0.36?



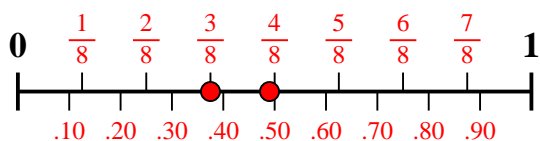
5) Which amount is larger,  $\frac{4}{6}$  or 0.57?



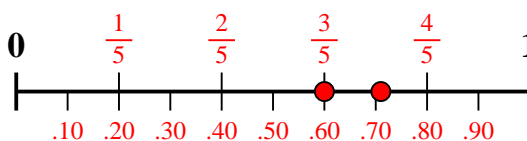
6) Which amount is larger,  $\frac{3}{9}$  or 0.15?



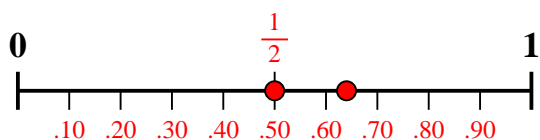
7) Which amount is larger,  $\frac{3}{8}$  or 0.49?



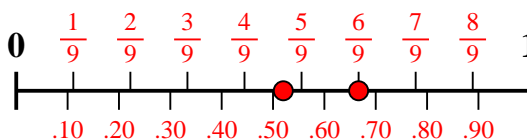
8) Which amount is larger,  $\frac{3}{5}$  or 0.71?



9) Which amount is larger,  $\frac{1}{2}$  or 0.64?



10) Which amount is larger,  $\frac{6}{9}$  or 0.52?



Answers

1. **0.36**

2. **0.43**

3. **0.35**

4. **0.36**

5.  **$\frac{4}{6}$**

6.  **$\frac{3}{9}$**

7. **0.49**

8. **0.71**

9. **0.64**

10.  **$\frac{6}{9}$**