


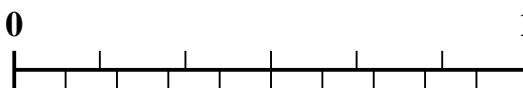


Use the number line to solve each problem.

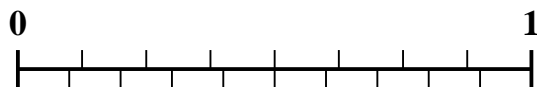
1) Which amount is larger,  $\frac{2}{3}$  or 0.82?



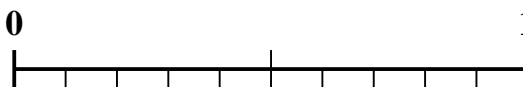
2) Which amount is larger,  $\frac{4}{6}$  or 0.54?



3) Which amount is larger,  $\frac{6}{8}$  or 0.62?



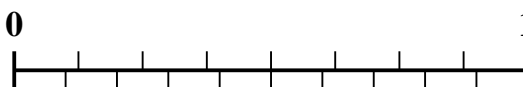
4) Which amount is larger,  $\frac{1}{2}$  or 0.68?



5) Which amount is larger,  $\frac{1}{9}$  or 0.26?



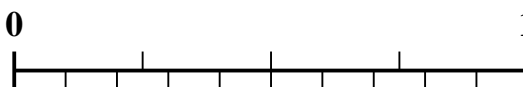
6) Which amount is larger,  $\frac{3}{8}$  or 0.52?



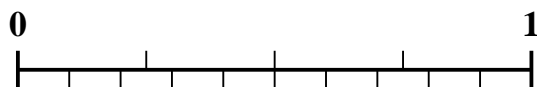
7) Which amount is larger,  $\frac{2}{5}$  or 0.56?



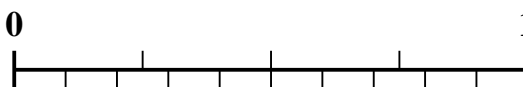
8) Which amount is larger,  $\frac{3}{4}$  or 0.86?



9) Which amount is larger,  $\frac{1}{4}$  or 0.14?



10) Which amount is larger,  $\frac{2}{4}$  or 0.68?



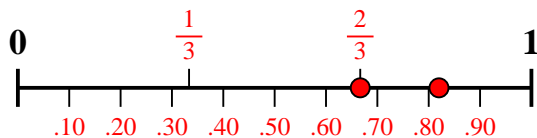
Answers

1. \_\_\_\_\_
2. \_\_\_\_\_
3. \_\_\_\_\_
4. \_\_\_\_\_
5. \_\_\_\_\_
6. \_\_\_\_\_
7. \_\_\_\_\_
8. \_\_\_\_\_
9. \_\_\_\_\_
10. \_\_\_\_\_

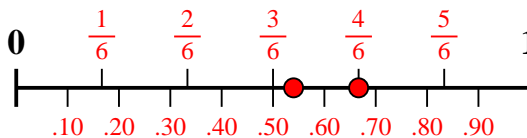


Use the number line to solve each problem.

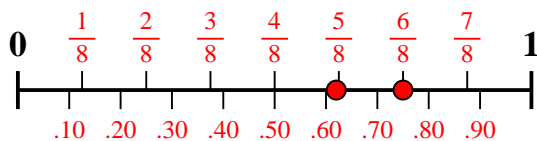
1) Which amount is larger,  $\frac{2}{3}$  or 0.82?



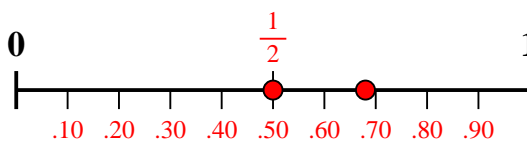
2) Which amount is larger,  $\frac{4}{6}$  or 0.54?



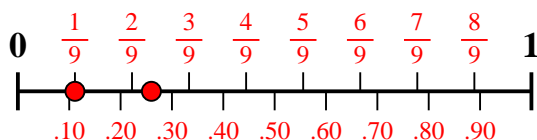
3) Which amount is larger,  $\frac{6}{8}$  or 0.62?



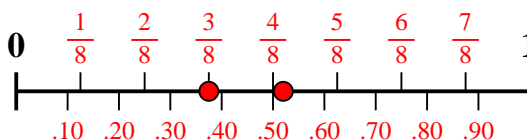
4) Which amount is larger,  $\frac{1}{2}$  or 0.68?



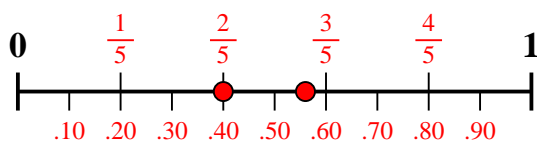
5) Which amount is larger,  $\frac{1}{9}$  or 0.26?



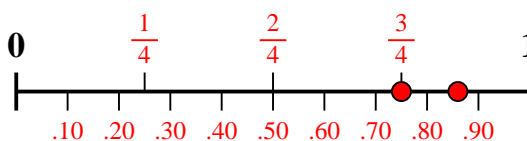
6) Which amount is larger,  $\frac{3}{8}$  or 0.52?



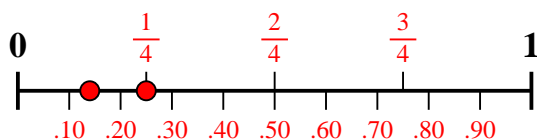
7) Which amount is larger,  $\frac{2}{5}$  or 0.56?



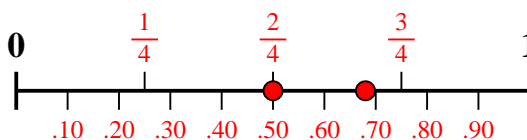
8) Which amount is larger,  $\frac{3}{4}$  or 0.86?



9) Which amount is larger,  $\frac{1}{4}$  or 0.14?



10) Which amount is larger,  $\frac{2}{4}$  or 0.68?



**Answers**

1. 0.82
2.  $\frac{4}{6}$
3.  $\frac{6}{8}$
4. 0.68
5. 0.26
6. 0.52
7. 0.56
8. 0.86
9.  $\frac{1}{4}$
10. 0.68