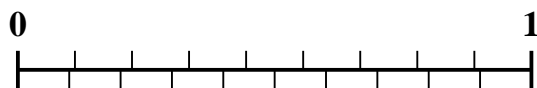


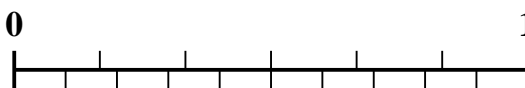


Use the number line to solve each problem.

1) Which amount is larger, $\frac{2}{9}$ or 0.34?



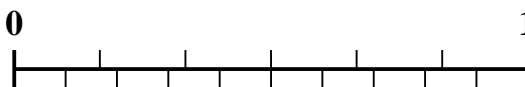
2) Which amount is larger, $\frac{3}{6}$ or 0.68?



3) Which amount is larger, $\frac{6}{7}$ or 0.72?



4) Which amount is larger, $\frac{4}{6}$ or 0.47?



5) Which amount is larger, $\frac{3}{7}$ or 0.54?



6) Which amount is larger, $\frac{1}{3}$ or 0.51?



7) Which amount is larger, $\frac{5}{7}$ or 0.54?



8) Which amount is larger, $\frac{3}{4}$ or 0.89?



9) Which amount is larger, $\frac{4}{5}$ or 0.6?



10) Which amount is larger, $\frac{1}{2}$ or 0.34?



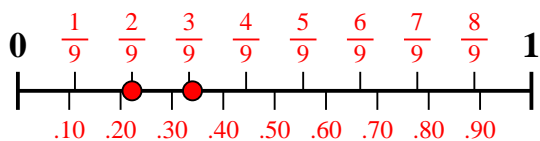
Answers

1. _____
2. _____
3. _____
4. _____
5. _____
6. _____
7. _____
8. _____
9. _____
10. _____

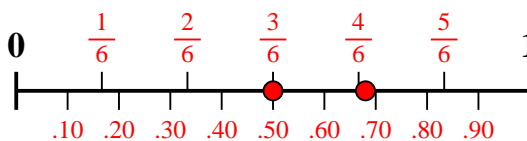


Use the number line to solve each problem.

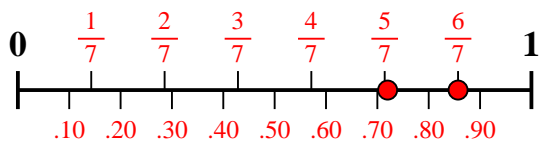
1) Which amount is larger, $\frac{2}{9}$ or 0.34?



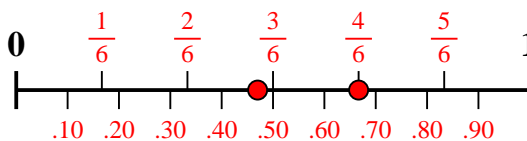
2) Which amount is larger, $\frac{3}{6}$ or 0.68?



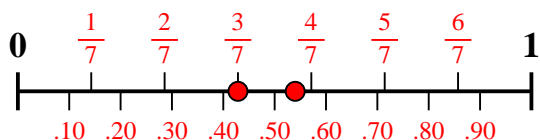
3) Which amount is larger, $\frac{6}{7}$ or 0.72?



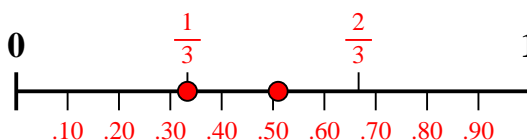
4) Which amount is larger, $\frac{4}{6}$ or 0.47?



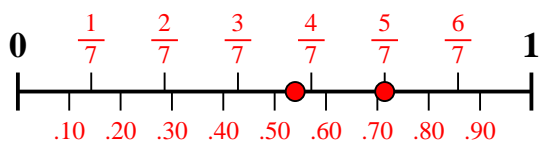
5) Which amount is larger, $\frac{3}{7}$ or 0.54?



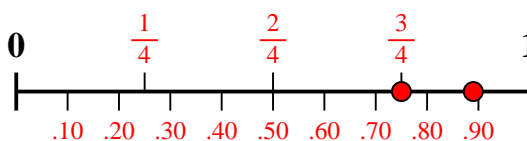
6) Which amount is larger, $\frac{1}{3}$ or 0.51?



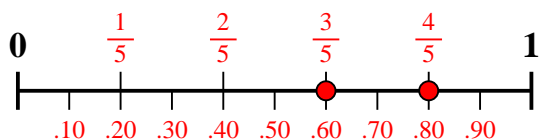
7) Which amount is larger, $\frac{5}{7}$ or 0.54?



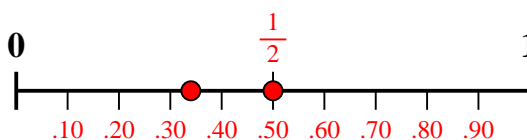
8) Which amount is larger, $\frac{3}{4}$ or 0.89?



9) Which amount is larger, $\frac{4}{5}$ or 0.6?



10) Which amount is larger, $\frac{1}{2}$ or 0.34?



Answers

1. **0.34**

2. **0.68**

3. $\frac{6}{7}$

4. $\frac{4}{6}$

5. **0.54**

6. **0.51**

7. $\frac{5}{7}$

8. **0.89**

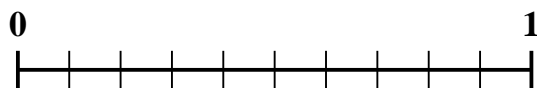
9. $\frac{4}{5}$

10. $\frac{1}{2}$



Use the number line to solve each problem.

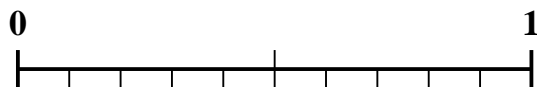
1) Which amount is larger, $\frac{4}{10}$ or 0.52?



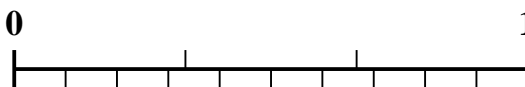
2) Which amount is larger, $\frac{1}{4}$ or 0.39?




3) Which amount is larger, $\frac{1}{2}$ or 0.64?



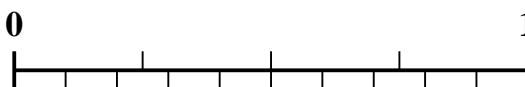
4) Which amount is larger, $\frac{2}{3}$ or 0.55?



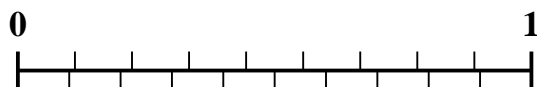
5) Which amount is larger, $\frac{4}{6}$ or 0.85?



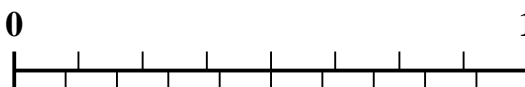
6) Which amount is larger, $\frac{2}{4}$ or 0.38?



7) Which amount is larger, $\frac{8}{9}$ or 0.76?



8) Which amount is larger, $\frac{6}{8}$ or 0.6?



9) Which amount is larger, $\frac{5}{7}$ or 0.54?



10) Which amount is larger, $\frac{6}{7}$ or 0.69?



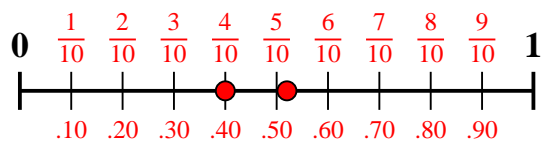
Answers

1. _____
2. _____
3. _____
4. _____
5. _____
6. _____
7. _____
8. _____
9. _____
10. _____

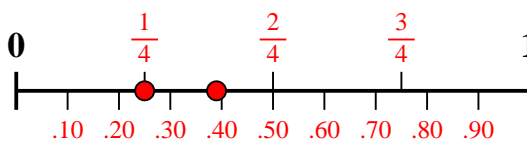


Use the number line to solve each problem.

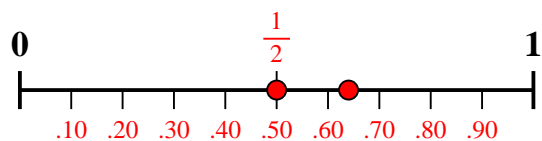
1) Which amount is larger, $\frac{4}{10}$ or 0.52?



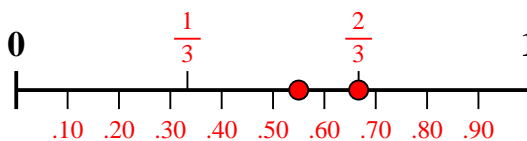
2) Which amount is larger, $\frac{1}{4}$ or 0.39?



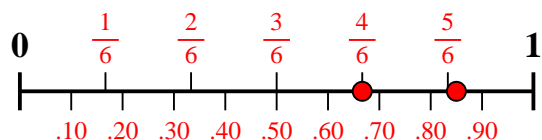
3) Which amount is larger, $\frac{1}{2}$ or 0.64?



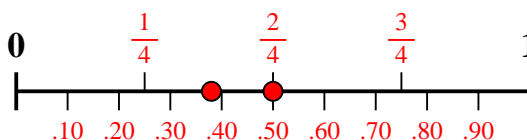
4) Which amount is larger, $\frac{2}{3}$ or 0.55?



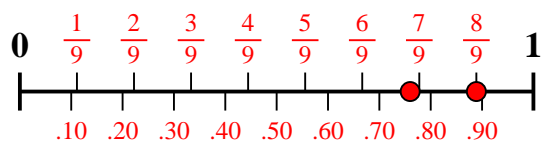
5) Which amount is larger, $\frac{4}{6}$ or 0.85?



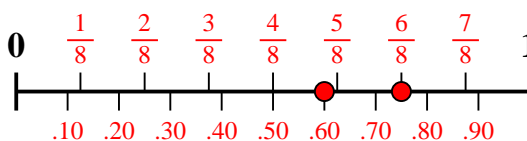
6) Which amount is larger, $\frac{2}{4}$ or 0.38?



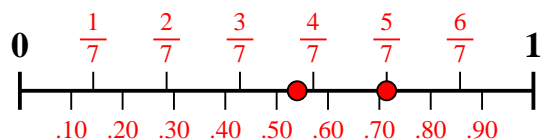
7) Which amount is larger, $\frac{8}{9}$ or 0.76?



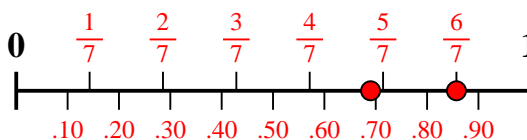
8) Which amount is larger, $\frac{6}{8}$ or 0.6?



9) Which amount is larger, $\frac{5}{7}$ or 0.54?



10) Which amount is larger, $\frac{6}{7}$ or 0.69?



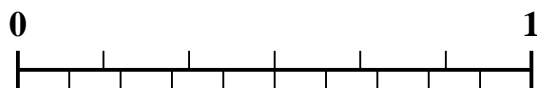
Answers

1. **0.52**
2. **0.39**
3. **0.64**
4. **$\frac{2}{3}$**
5. **0.85**
6. **$\frac{2}{4}$**
7. **$\frac{8}{9}$**
8. **$\frac{6}{8}$**
9. **$\frac{5}{7}$**
10. **$\frac{6}{7}$**

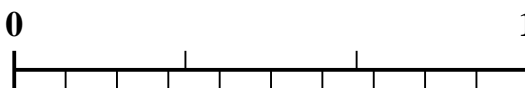


Use the number line to solve each problem.


1) Which amount is larger, $\frac{2}{6}$ or 0.15?



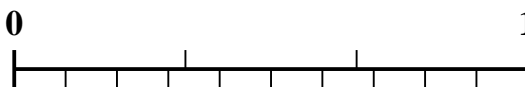
2) Which amount is larger, $\frac{1}{3}$ or 0.52?



3) Which amount is larger, $\frac{3}{5}$ or 0.48?



4) Which amount is larger, $\frac{2}{3}$ or 0.87?



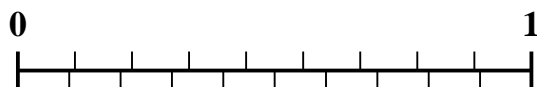
5) Which amount is larger, $\frac{5}{7}$ or 0.57?



6) Which amount is larger, $\frac{4}{7}$ or 0.75?



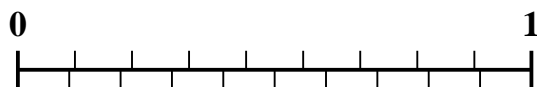
7) Which amount is larger, $\frac{3}{9}$ or 0.15?



8) Which amount is larger, $\frac{3}{4}$ or 0.9?



9) Which amount is larger, $\frac{7}{9}$ or 0.89?



10) Which amount is larger, $\frac{3}{10}$ or 0.15?



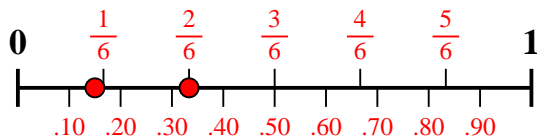
Answers

1. _____
2. _____
3. _____
4. _____
5. _____
6. _____
7. _____
8. _____
9. _____
10. _____

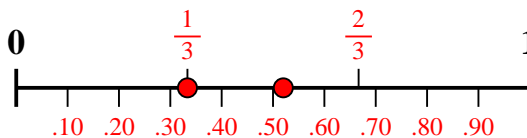


Use the number line to solve each problem.

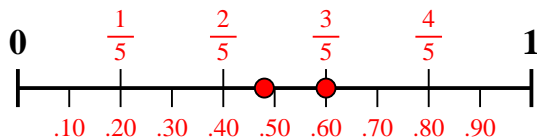
1) Which amount is larger, $\frac{2}{6}$ or 0.15?



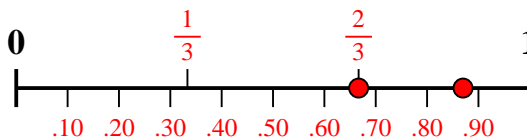
2) Which amount is larger, $\frac{1}{3}$ or 0.52?



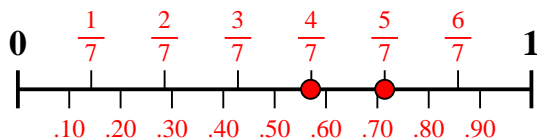
3) Which amount is larger, $\frac{3}{5}$ or 0.48?



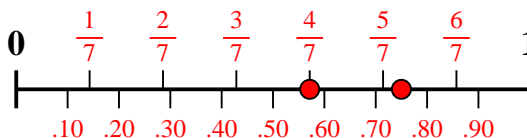
4) Which amount is larger, $\frac{2}{3}$ or 0.87?



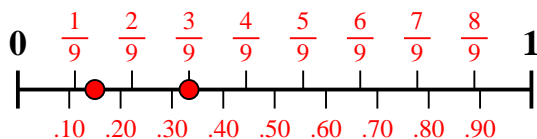
5) Which amount is larger, $\frac{5}{7}$ or 0.57?



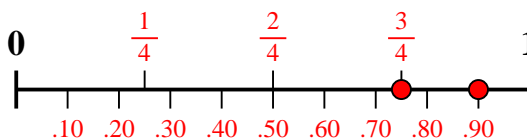
6) Which amount is larger, $\frac{4}{7}$ or 0.75?



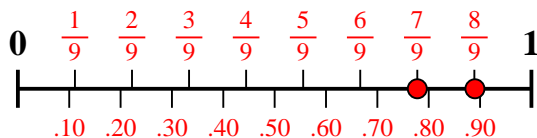
7) Which amount is larger, $\frac{3}{9}$ or 0.15?



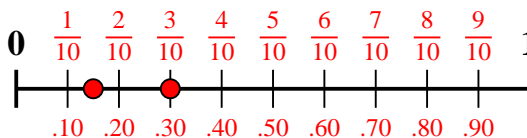
8) Which amount is larger, $\frac{3}{4}$ or 0.9?



9) Which amount is larger, $\frac{7}{9}$ or 0.89?



10) Which amount is larger, $\frac{3}{10}$ or 0.15?



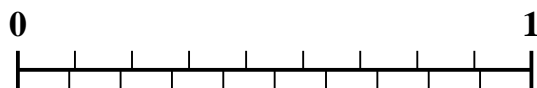
Answers

1. $\frac{2}{6}$
2. **0.52**
3. $\frac{3}{5}$
4. **0.87**
5. $\frac{5}{7}$
6. **0.75**
7. $\frac{3}{9}$
8. **0.9**
9. **0.89**
10. $\frac{3}{10}$

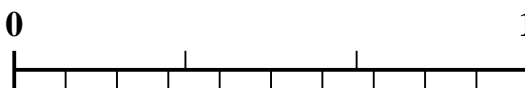


Use the number line to solve each problem.


1) Which amount is larger, $\frac{2}{9}$ or 0.36?



2) Which amount is larger, $\frac{1}{3}$ or 0.43?




3) Which amount is larger, $\frac{1}{5}$ or 0.35?



4) Which amount is larger, $\frac{2}{8}$ or 0.36?




5) Which amount is larger, $\frac{4}{6}$ or 0.57?



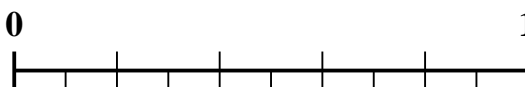
6) Which amount is larger, $\frac{3}{9}$ or 0.15?



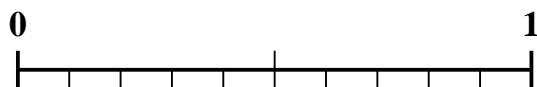
7) Which amount is larger, $\frac{3}{8}$ or 0.49?



8) Which amount is larger, $\frac{3}{5}$ or 0.71?



9) Which amount is larger, $\frac{1}{2}$ or 0.64?



10) Which amount is larger, $\frac{6}{9}$ or 0.52?



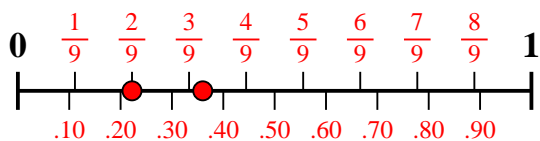
Answers

1. _____
2. _____
3. _____
4. _____
5. _____
6. _____
7. _____
8. _____
9. _____
10. _____

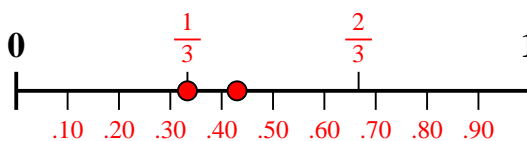


Use the number line to solve each problem.

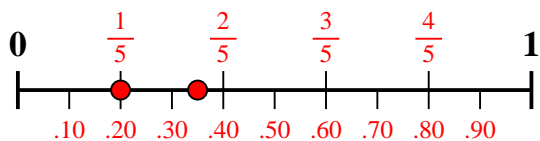
1) Which amount is larger, $\frac{2}{9}$ or 0.36?



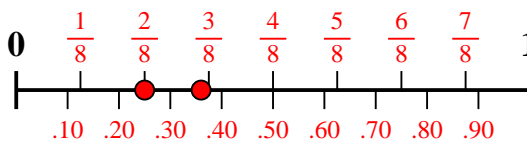
2) Which amount is larger, $\frac{1}{3}$ or 0.43?



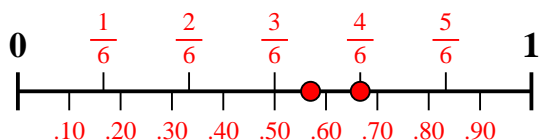
3) Which amount is larger, $\frac{1}{5}$ or 0.35?



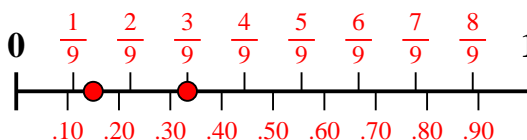
4) Which amount is larger, $\frac{2}{8}$ or 0.36?



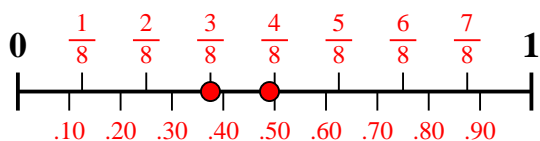
5) Which amount is larger, $\frac{4}{6}$ or 0.57?



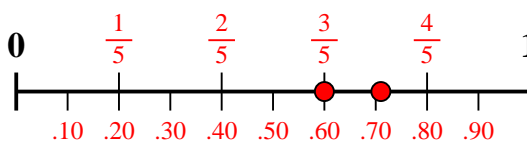
6) Which amount is larger, $\frac{3}{9}$ or 0.15?



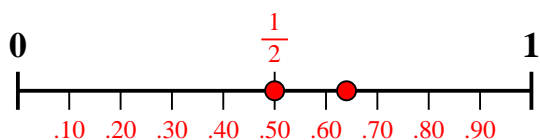
7) Which amount is larger, $\frac{3}{8}$ or 0.49?



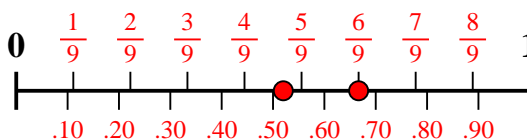
8) Which amount is larger, $\frac{3}{5}$ or 0.71?



9) Which amount is larger, $\frac{1}{2}$ or 0.64?



10) Which amount is larger, $\frac{6}{9}$ or 0.52?



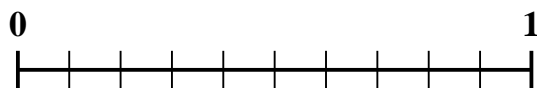
Answers

1. 0.36
2. 0.43
3. 0.35
4. 0.36
5. $\frac{4}{6}$
6. $\frac{3}{9}$
7. 0.49
8. 0.71
9. 0.64
10. $\frac{6}{9}$



Use the number line to solve each problem.

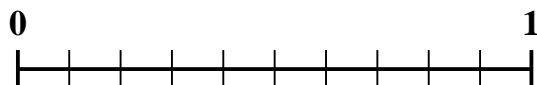
1) Which amount is larger, $\frac{6}{10}$ or 0.47?



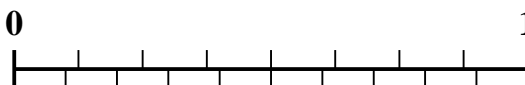
2) Which amount is larger, $\frac{3}{4}$ or 0.89?




3) Which amount is larger, $\frac{5}{10}$ or 0.6?



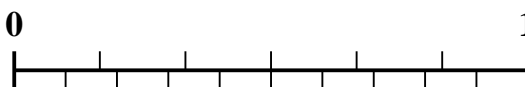
4) Which amount is larger, $\frac{7}{8}$ or 0.78?



5) Which amount is larger, $\frac{1}{3}$ or 0.19?



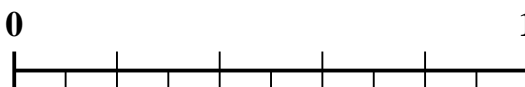
6) Which amount is larger, $\frac{2}{6}$ or 0.44?



7) Which amount is larger, $\frac{3}{5}$ or 0.43?



8) Which amount is larger, $\frac{2}{5}$ or 0.56?



9) Which amount is larger, $\frac{4}{5}$ or 0.69?



10) Which amount is larger, $\frac{1}{2}$ or 0.6?



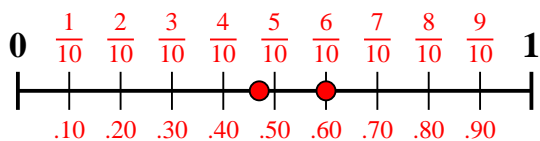
Answers

1. _____
2. _____
3. _____
4. _____
5. _____
6. _____
7. _____
8. _____
9. _____
10. _____

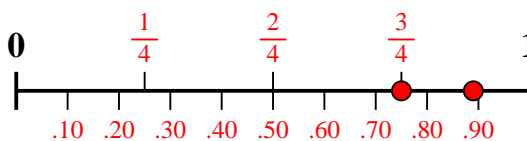


Use the number line to solve each problem.

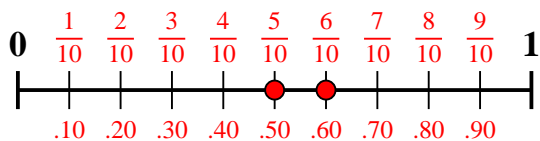
1) Which amount is larger, $\frac{6}{10}$ or 0.47?



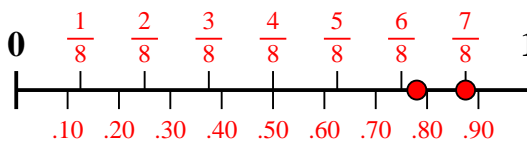
2) Which amount is larger, $\frac{3}{4}$ or 0.89?



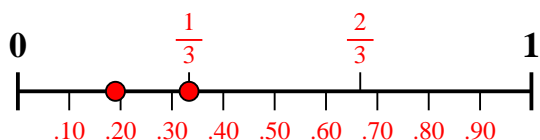
3) Which amount is larger, $\frac{5}{10}$ or 0.6?



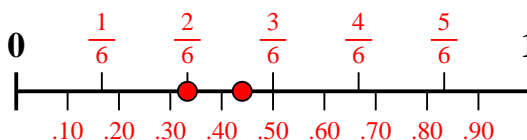
4) Which amount is larger, $\frac{7}{8}$ or 0.78?



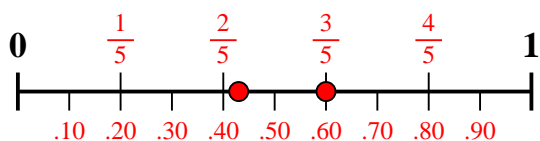
5) Which amount is larger, $\frac{1}{3}$ or 0.19?



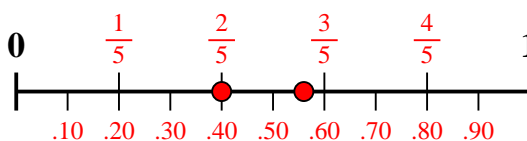
6) Which amount is larger, $\frac{2}{6}$ or 0.44?



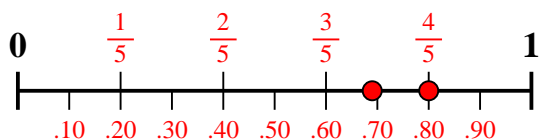
7) Which amount is larger, $\frac{3}{5}$ or 0.43?



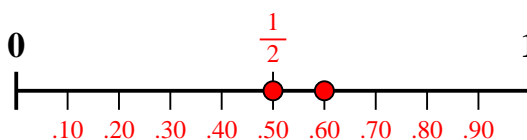
8) Which amount is larger, $\frac{2}{5}$ or 0.56?



9) Which amount is larger, $\frac{4}{5}$ or 0.69?



10) Which amount is larger, $\frac{1}{2}$ or 0.6?



Answers

1. $\frac{6}{10}$
2. **0.89**
3. **0.6**
4. $\frac{7}{8}$
5. $\frac{1}{3}$
6. **0.44**
7. $\frac{3}{5}$
8. **0.56**
9. $\frac{4}{5}$
10. **0.6**



Use the number line to solve each problem.

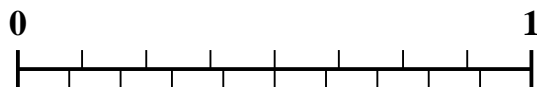
1) Which amount is larger, $\frac{5}{7}$ or 0.6?



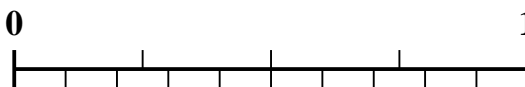
2) Which amount is larger, $\frac{3}{7}$ or 0.24?




3) Which amount is larger, $\frac{4}{8}$ or 0.4?




4) Which amount is larger, $\frac{1}{4}$ or 0.4?



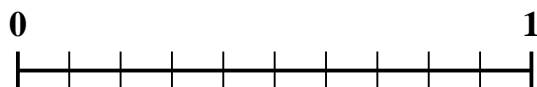
5) Which amount is larger, $\frac{1}{3}$ or 0.49?



6) Which amount is larger, $\frac{2}{3}$ or 0.79?



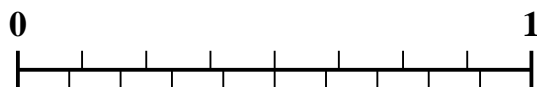
7) Which amount is larger, $\frac{6}{10}$ or 0.42?



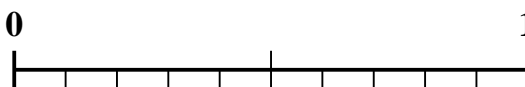
8) Which amount is larger, $\frac{3}{4}$ or 0.9?



9) Which amount is larger, $\frac{7}{8}$ or 0.75?



10) Which amount is larger, $\frac{1}{2}$ or 0.33?



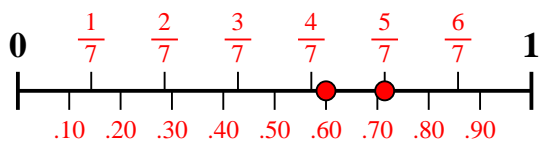
Answers

1. _____
2. _____
3. _____
4. _____
5. _____
6. _____
7. _____
8. _____
9. _____
10. _____

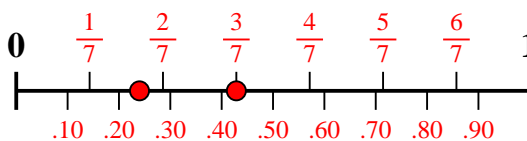


Use the number line to solve each problem.

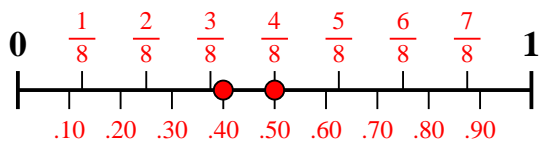
1) Which amount is larger, $\frac{5}{7}$ or 0.6?



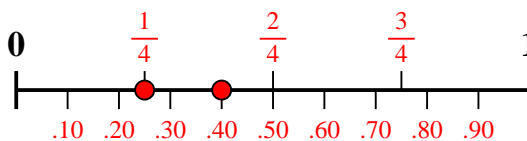
2) Which amount is larger, $\frac{3}{7}$ or 0.24?



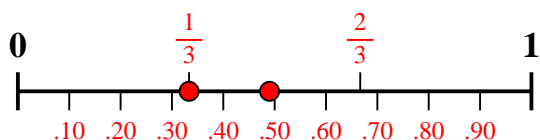
3) Which amount is larger, $\frac{4}{8}$ or 0.4?



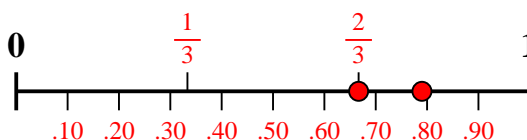
4) Which amount is larger, $\frac{1}{4}$ or 0.4?



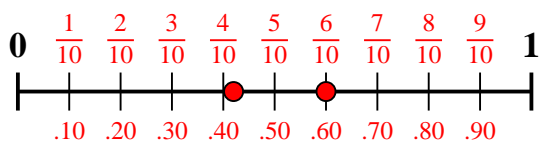
5) Which amount is larger, $\frac{1}{3}$ or 0.49?



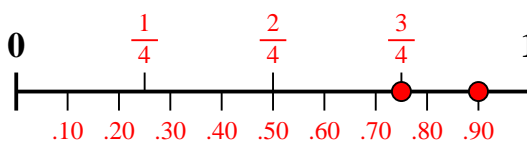
6) Which amount is larger, $\frac{2}{3}$ or 0.79?



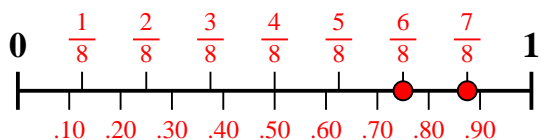
7) Which amount is larger, $\frac{6}{10}$ or 0.42?



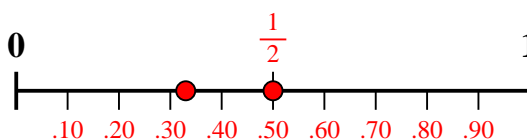
8) Which amount is larger, $\frac{3}{4}$ or 0.9?



9) Which amount is larger, $\frac{7}{8}$ or 0.75?



10) Which amount is larger, $\frac{1}{2}$ or 0.33?



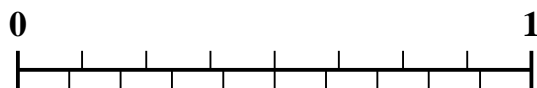
Answers

1. $\frac{5}{7}$
2. $\frac{3}{7}$
3. $\frac{4}{8}$
4. **0.4**
5. **0.49**
6. **0.79**
7. $\frac{6}{10}$
8. **0.9**
9. $\frac{7}{8}$
10. $\frac{1}{2}$

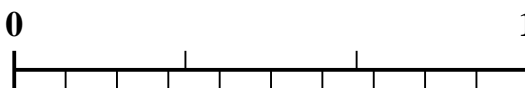


Use the number line to solve each problem.


1) Which amount is larger, $\frac{4}{8}$ or 0.35?



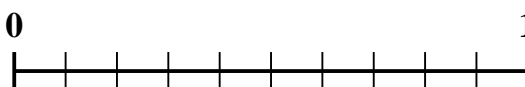
2) Which amount is larger, $\frac{1}{3}$ or 0.18?




3) Which amount is larger, $\frac{2}{5}$ or 0.56?



4) Which amount is larger, $\frac{7}{10}$ or 0.53?



5) Which amount is larger, $\frac{1}{2}$ or 0.64?



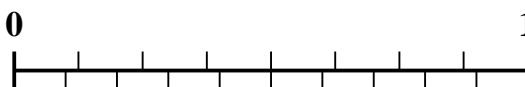
6) Which amount is larger, $\frac{6}{9}$ or 0.57?




7) Which amount is larger, $\frac{3}{7}$ or 0.24?



8) Which amount is larger, $\frac{3}{8}$ or 0.24?



9) Which amount is larger, $\frac{2}{3}$ or 0.85?



10) Which amount is larger, $\frac{2}{9}$ or 0.11?



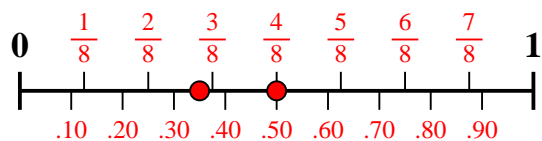
Answers

1. _____
2. _____
3. _____
4. _____
5. _____
6. _____
7. _____
8. _____
9. _____
10. _____

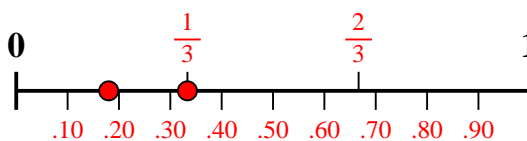


Use the number line to solve each problem.

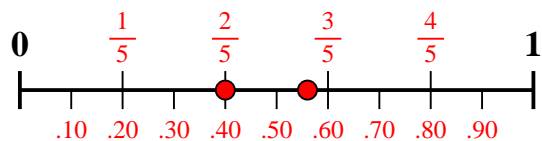
1) Which amount is larger, $\frac{4}{8}$ or 0.35?



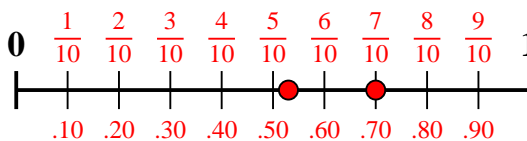
2) Which amount is larger, $\frac{1}{3}$ or 0.18?



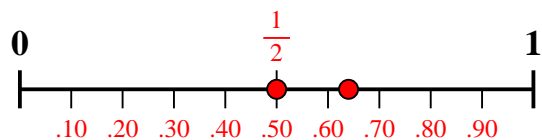
3) Which amount is larger, $\frac{2}{5}$ or 0.56?



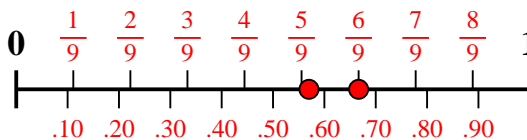
4) Which amount is larger, $\frac{7}{10}$ or 0.53?



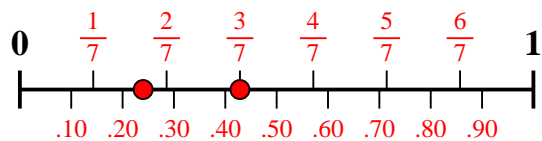
5) Which amount is larger, $\frac{1}{2}$ or 0.64?



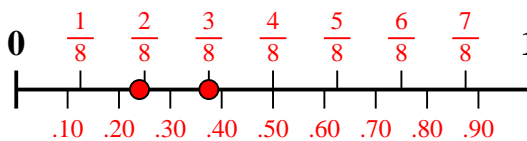
6) Which amount is larger, $\frac{6}{9}$ or 0.57?



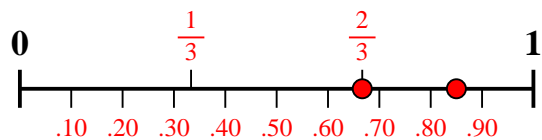
7) Which amount is larger, $\frac{3}{7}$ or 0.24?



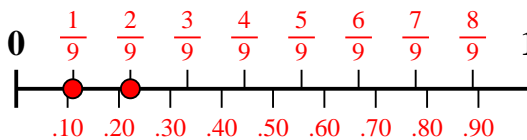
8) Which amount is larger, $\frac{3}{8}$ or 0.24?



9) Which amount is larger, $\frac{2}{3}$ or 0.85?



10) Which amount is larger, $\frac{2}{9}$ or 0.11?



Answers

1. $\frac{4}{8}$
2. $\frac{1}{3}$
3. **0.56**
4. $\frac{7}{10}$
5. **0.64**
6. $\frac{6}{9}$
7. $\frac{3}{7}$
8. $\frac{3}{8}$
9. **0.85**
10. $\frac{2}{9}$

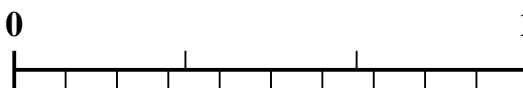


Use the number line to solve each problem.

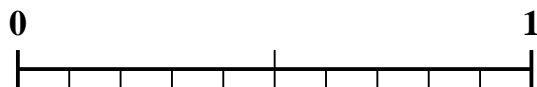
1) Which amount is larger, $\frac{3}{7}$ or 0.23?



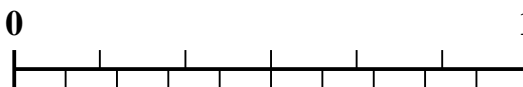
2) Which amount is larger, $\frac{2}{3}$ or 0.82?



3) Which amount is larger, $\frac{1}{2}$ or 0.61?



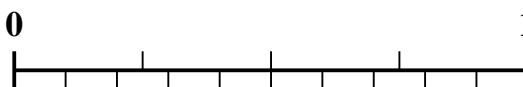
4) Which amount is larger, $\frac{4}{6}$ or 0.77?




5) Which amount is larger, $\frac{6}{7}$ or 0.73?




6) Which amount is larger, $\frac{2}{4}$ or 0.6?



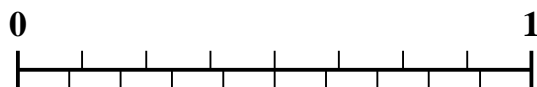
7) Which amount is larger, $\frac{3}{4}$ or 0.88?



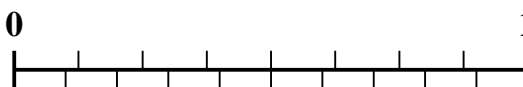
8) Which amount is larger, $\frac{3}{10}$ or 0.14?



9) Which amount is larger, $\frac{3}{8}$ or 0.19?



10) Which amount is larger, $\frac{5}{8}$ or 0.83?



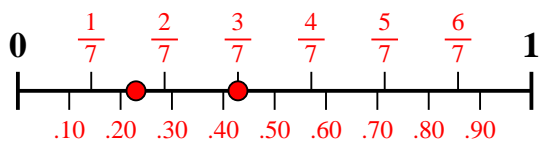
Answers

1. _____
2. _____
3. _____
4. _____
5. _____
6. _____
7. _____
8. _____
9. _____
10. _____

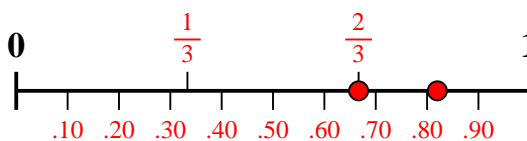


Use the number line to solve each problem.

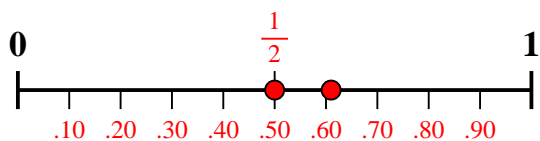
1) Which amount is larger, $\frac{3}{7}$ or 0.23?



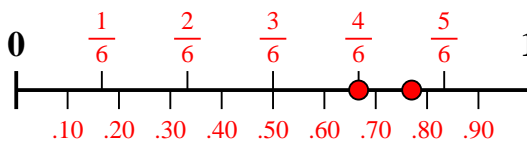
2) Which amount is larger, $\frac{2}{3}$ or 0.82?



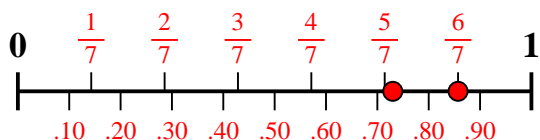
3) Which amount is larger, $\frac{1}{2}$ or 0.61?



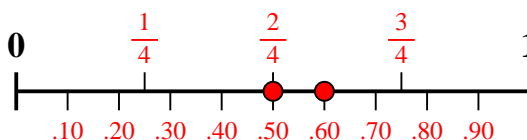
4) Which amount is larger, $\frac{4}{6}$ or 0.77?



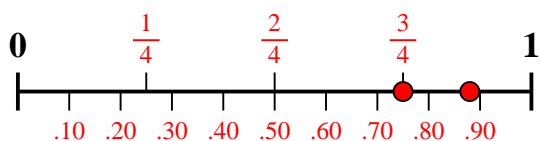
5) Which amount is larger, $\frac{6}{7}$ or 0.73?



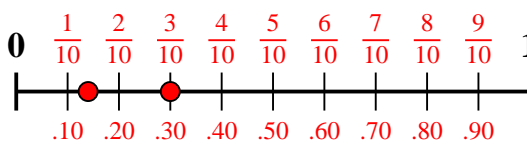
6) Which amount is larger, $\frac{2}{4}$ or 0.6?



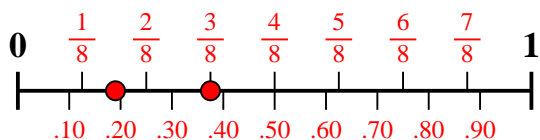
7) Which amount is larger, $\frac{3}{4}$ or 0.88?



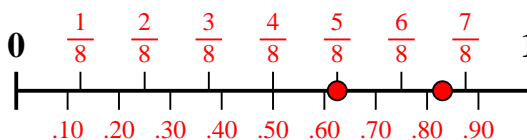
8) Which amount is larger, $\frac{3}{10}$ or 0.14?



9) Which amount is larger, $\frac{3}{8}$ or 0.19?



10) Which amount is larger, $\frac{5}{8}$ or 0.83?




Answers

1. $\frac{3}{7}$
2. **0.82**
3. **0.61**
4. **0.77**
5. $\frac{6}{7}$
6. **0.6**
7. **0.88**
8. $\frac{3}{10}$
9. $\frac{3}{8}$
10. **0.83**

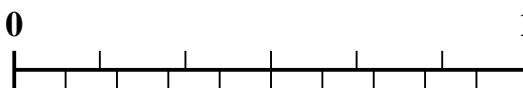


Use the number line to solve each problem.

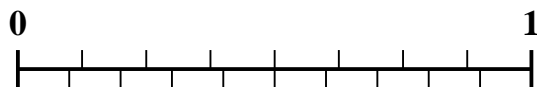
1) Which amount is larger, $\frac{2}{3}$ or 0.82?



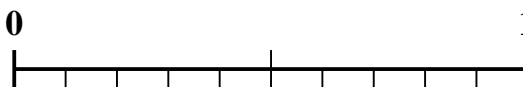
2) Which amount is larger, $\frac{4}{6}$ or 0.54?



3) Which amount is larger, $\frac{6}{8}$ or 0.62?



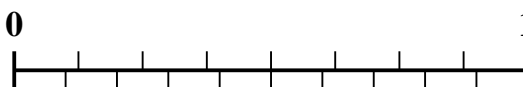
4) Which amount is larger, $\frac{1}{2}$ or 0.68?



5) Which amount is larger, $\frac{1}{9}$ or 0.26?



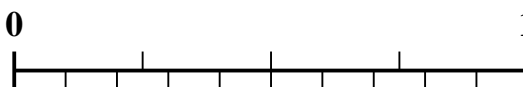
6) Which amount is larger, $\frac{3}{8}$ or 0.52?



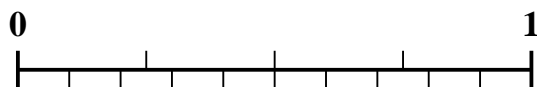
7) Which amount is larger, $\frac{2}{5}$ or 0.56?



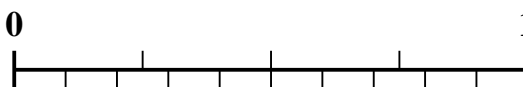
8) Which amount is larger, $\frac{3}{4}$ or 0.86?



9) Which amount is larger, $\frac{1}{4}$ or 0.14?



10) Which amount is larger, $\frac{2}{4}$ or 0.68?



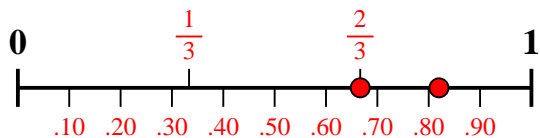
Answers

1. _____
2. _____
3. _____
4. _____
5. _____
6. _____
7. _____
8. _____
9. _____
10. _____

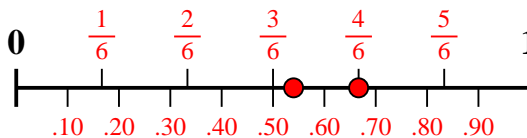


Use the number line to solve each problem.

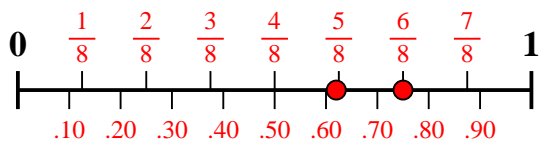
1) Which amount is larger, $\frac{2}{3}$ or 0.82?



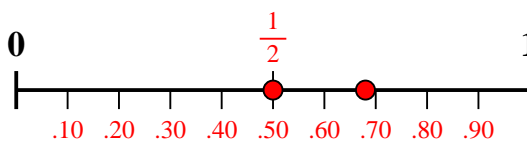
2) Which amount is larger, $\frac{4}{6}$ or 0.54?



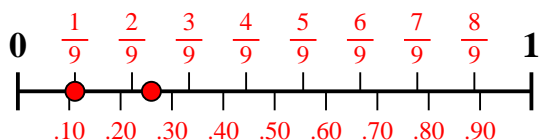
3) Which amount is larger, $\frac{6}{8}$ or 0.62?



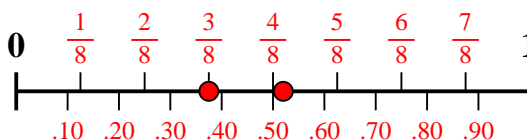
4) Which amount is larger, $\frac{1}{2}$ or 0.68?



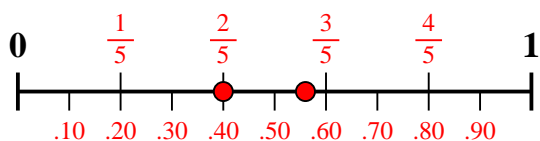
5) Which amount is larger, $\frac{1}{9}$ or 0.26?



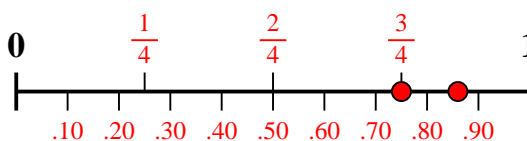
6) Which amount is larger, $\frac{3}{8}$ or 0.52?



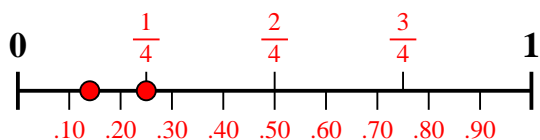
7) Which amount is larger, $\frac{2}{5}$ or 0.56?



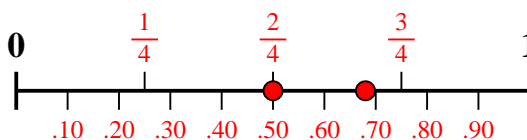
8) Which amount is larger, $\frac{3}{4}$ or 0.86?



9) Which amount is larger, $\frac{1}{4}$ or 0.14?



10) Which amount is larger, $\frac{2}{4}$ or 0.68?



Answers

1. 0.82
2. $\frac{4}{6}$
3. $\frac{6}{8}$
4. 0.68
5. 0.26
6. 0.52
7. 0.56
8. 0.86
9. $\frac{1}{4}$
10. 0.68



Use the number line to solve each problem.


1) Which amount is larger, $\frac{4}{10}$ or 0.58?



2) Which amount is larger, $\frac{2}{6}$ or 0.52?



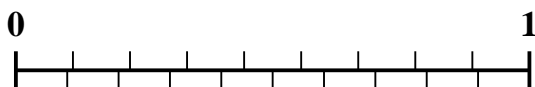
3) Which amount is larger, $\frac{4}{5}$ or 0.65?




4) Which amount is larger, $\frac{6}{7}$ or 0.66?



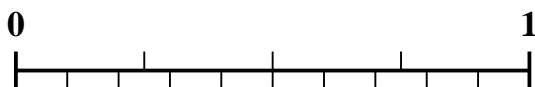
5) Which amount is larger, $\frac{6}{9}$ or 0.77?



6) Which amount is larger, $\frac{2}{3}$ or 0.8?



7) Which amount is larger, $\frac{2}{4}$ or 0.69?



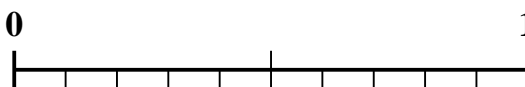
8) Which amount is larger, $\frac{1}{4}$ or 0.35?



9) Which amount is larger, $\frac{6}{10}$ or 0.7?



10) Which amount is larger, $\frac{1}{2}$ or 0.32?



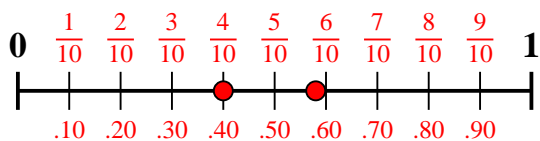
Answers

1. _____
2. _____
3. _____
4. _____
5. _____
6. _____
7. _____
8. _____
9. _____
10. _____

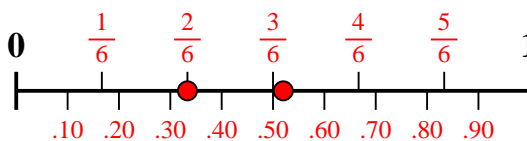


Use the number line to solve each problem.

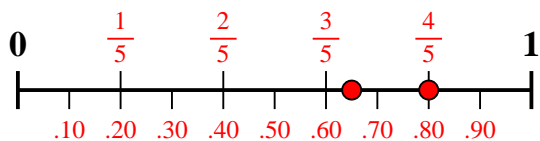
1) Which amount is larger, $\frac{4}{10}$ or 0.58?



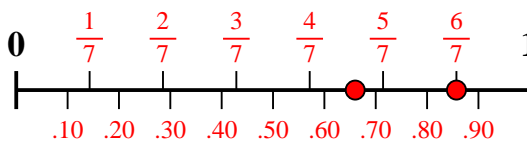
2) Which amount is larger, $\frac{2}{6}$ or 0.52?



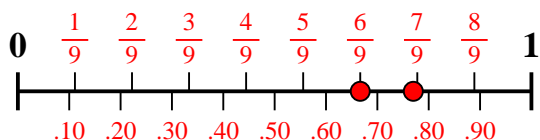
3) Which amount is larger, $\frac{4}{5}$ or 0.65?



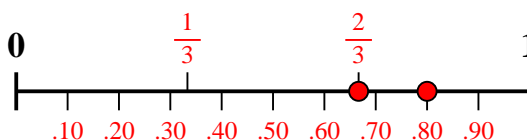
4) Which amount is larger, $\frac{6}{7}$ or 0.66?



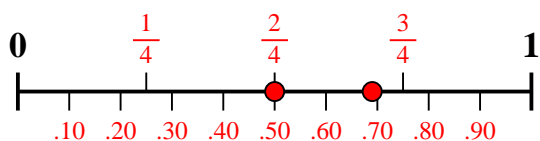
5) Which amount is larger, $\frac{6}{9}$ or 0.77?



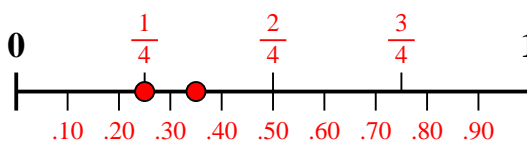
6) Which amount is larger, $\frac{2}{3}$ or 0.8?



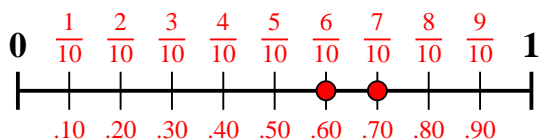
7) Which amount is larger, $\frac{2}{4}$ or 0.69?



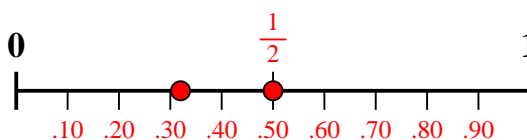
8) Which amount is larger, $\frac{1}{4}$ or 0.35?



9) Which amount is larger, $\frac{6}{10}$ or 0.7?



10) Which amount is larger, $\frac{1}{2}$ or 0.32?



Answers

1. 0.58
2. 0.52
3. $\frac{4}{5}$
4. $\frac{6}{7}$
5. 0.77
6. 0.8
7. 0.69
8. 0.35
9. 0.7
10. $\frac{1}{2}$