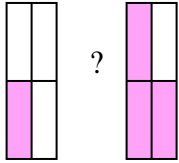


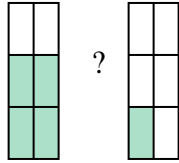


Compare the size of the fractions using $<$, $>$ or $=$.

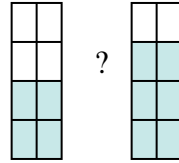
Ex)



1)



2)



Answers

Ex. $\frac{1}{4}$ $<$ $\frac{3}{4}$

1. _____

2. _____

3. _____

4. _____

5. _____

6. _____

7. _____

8. _____

9. _____

10. _____

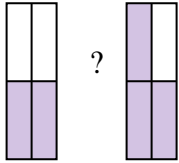
11. _____

12. _____

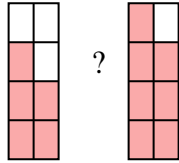
13. _____

14. _____

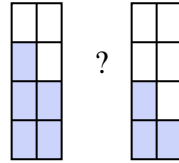
3)



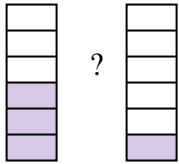
4)



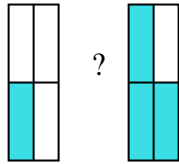
5)



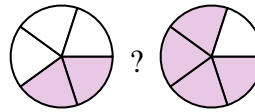
6)



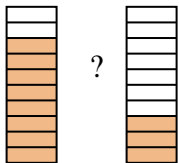
7)



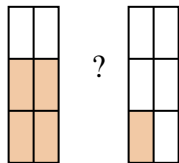
8)



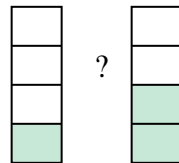
9)



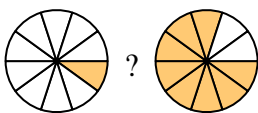
10)



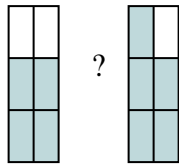
11)



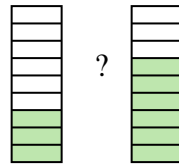
12)



13)



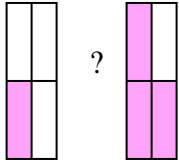
14)



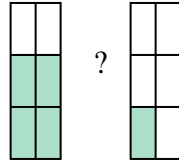


Compare the size of the fractions using $<$, $>$ or $=$.

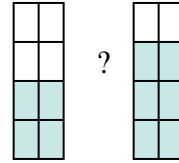
Ex)



1)



2)



Answers

Ex. $\frac{1}{4} < \frac{3}{4}$

1. $\frac{4}{6} > \frac{1}{6}$

2. $\frac{4}{8} < \frac{6}{8}$

3. $\frac{2}{4} < \frac{3}{4}$

4. $\frac{5}{8} < \frac{7}{8}$

5. $\frac{5}{8} > \frac{3}{8}$

6. $\frac{3}{6} > \frac{1}{6}$

7. $\frac{1}{4} < \frac{3}{4}$

8. $\frac{2}{5} < \frac{4}{5}$

9. $\frac{8}{10} > \frac{3}{10}$

10. $\frac{4}{6} > \frac{1}{6}$

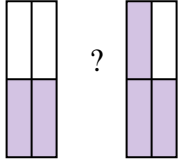
11. $\frac{1}{4} < \frac{2}{4}$

12. $\frac{1}{10} < \frac{8}{10}$

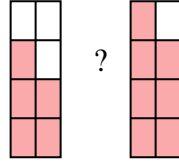
13. $\frac{4}{6} < \frac{5}{6}$

14. $\frac{3}{9} < \frac{6}{9}$

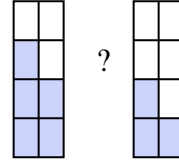
3)



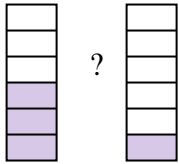
4)



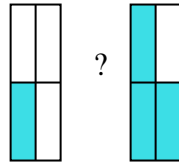
5)



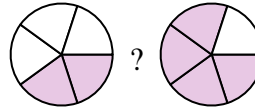
6)



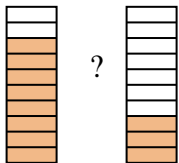
7)



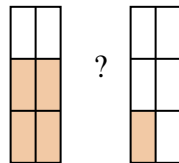
8)



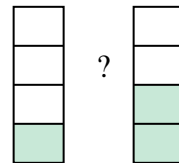
9)



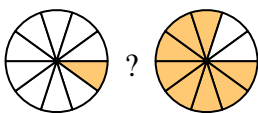
10)



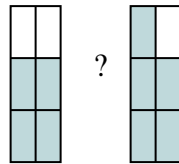
11)



12)



13)



14)

