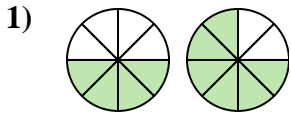


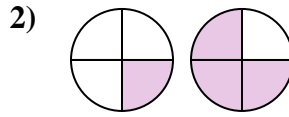


Determine which letter best compares the fractions shown.

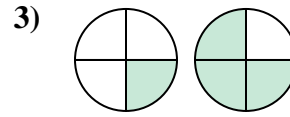
Answers



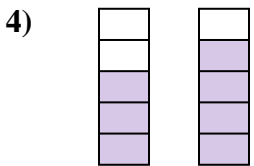
- A. $\frac{4}{4} < \frac{6}{2}$
- B. $\frac{4}{8} > \frac{6}{8}$
- C. $\frac{4}{4} < \frac{2}{6}$
- D. $\frac{4}{8} < \frac{6}{8}$



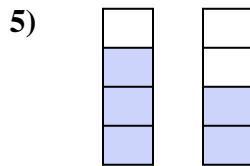
- A. $\frac{4}{1} > \frac{4}{3}$
- B. $\frac{3}{1} > \frac{1}{3}$
- C. $\frac{1}{3} < \frac{3}{1}$
- D. $\frac{1}{4} < \frac{3}{4}$



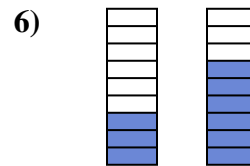
- A. $\frac{1}{4} < \frac{3}{4}$
- B. $\frac{1}{3} < \frac{3}{1}$
- C. $\frac{3}{1} > \frac{1}{3}$
- D. $\frac{1}{3} > \frac{3}{1}$



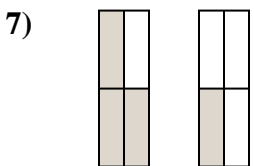
- A. $\frac{5}{3} > \frac{5}{4}$
- B. $\frac{3}{5} < \frac{4}{5}$
- C. $\frac{3}{2} < \frac{4}{1}$
- D. $\frac{3}{2} > \frac{4}{1}$



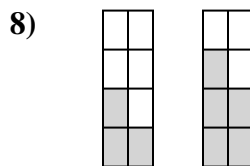
- A. $\frac{1}{3} < \frac{2}{2}$
- B. $\frac{3}{1} > \frac{2}{2}$
- C. $\frac{3}{4} < \frac{2}{4}$
- D. $\frac{3}{4} > \frac{2}{4}$



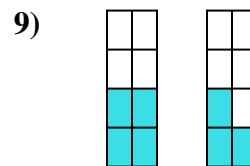
- A. $\frac{3}{9} < \frac{6}{9}$
- B. $\frac{6}{3} > \frac{3}{6}$
- C. $\frac{9}{3} > \frac{9}{6}$
- D. $\frac{3}{9} > \frac{6}{9}$



- A. $\frac{3}{1} < \frac{1}{3}$
- B. $\frac{3}{4} > \frac{1}{4}$
- C. $\frac{1}{3} > \frac{3}{1}$
- D. $\frac{4}{3} > \frac{4}{1}$



- A. $\frac{5}{3} < \frac{3}{5}$
- B. $\frac{3}{8} < \frac{5}{8}$
- C. $\frac{8}{3} > \frac{8}{5}$
- D. $\frac{5}{3} > \frac{3}{5}$

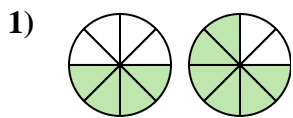


- A. $\frac{4}{8} > \frac{3}{8}$
- B. $\frac{4}{4} < \frac{3}{5}$
- C. $\frac{8}{4} > \frac{8}{3}$
- D. $\frac{4}{4} > \frac{5}{3}$

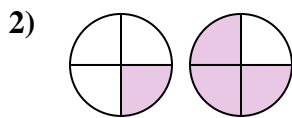
1. _____
2. _____
3. _____
4. _____
5. _____
6. _____
7. _____
8. _____
9. _____



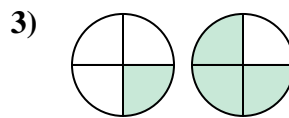
Determine which letter best compares the fractions shown.



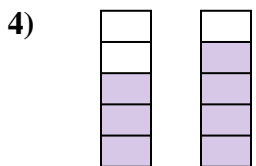
- A. $\frac{4}{4} < \frac{6}{2}$
- B. $\frac{4}{8} > \frac{6}{8}$
- C. $\frac{4}{4} < \frac{2}{6}$
- D. $\frac{4}{8} < \frac{6}{8}$



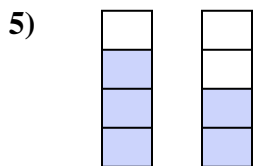
- A. $\frac{4}{1} > \frac{4}{3}$
- B. $\frac{3}{1} > \frac{1}{3}$
- C. $\frac{1}{3} < \frac{3}{1}$
- D. $\frac{1}{4} < \frac{3}{4}$



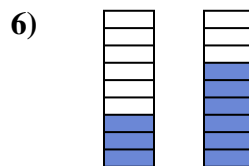
- A. $\frac{1}{4} < \frac{3}{4}$
- B. $\frac{1}{3} < \frac{3}{1}$
- C. $\frac{3}{1} > \frac{1}{3}$
- D. $\frac{1}{3} > \frac{3}{1}$



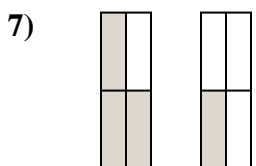
- A. $\frac{5}{3} > \frac{5}{4}$
- B. $\frac{3}{5} < \frac{4}{5}$
- C. $\frac{3}{2} < \frac{4}{1}$
- D. $\frac{3}{2} > \frac{4}{1}$



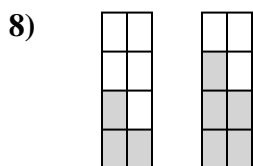
- A. $\frac{1}{3} < \frac{2}{2}$
- B. $\frac{3}{1} > \frac{2}{2}$
- C. $\frac{3}{4} < \frac{2}{4}$
- D. $\frac{3}{4} > \frac{2}{4}$



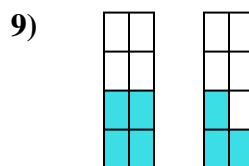
- A. $\frac{3}{9} < \frac{6}{9}$
- B. $\frac{6}{3} > \frac{3}{6}$
- C. $\frac{9}{3} > \frac{9}{6}$
- D. $\frac{3}{9} > \frac{6}{9}$



- A. $\frac{3}{1} < \frac{1}{3}$
- B. $\frac{3}{4} > \frac{1}{4}$
- C. $\frac{1}{3} > \frac{3}{1}$
- D. $\frac{4}{3} > \frac{4}{1}$



- A. $\frac{5}{3} < \frac{3}{5}$
- B. $\frac{3}{8} < \frac{5}{8}$
- C. $\frac{8}{3} > \frac{8}{5}$
- D. $\frac{5}{3} > \frac{3}{5}$



- A. $\frac{4}{8} > \frac{3}{8}$
- B. $\frac{4}{4} < \frac{3}{5}$
- C. $\frac{8}{4} > \frac{8}{3}$
- D. $\frac{4}{4} > \frac{5}{3}$

Answers

- 1. **D**
- 2. **D**
- 3. **A**
- 4. **B**
- 5. **D**
- 6. **A**
- 7. **B**
- 8. **B**
- 9. **A**