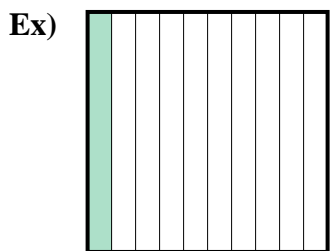


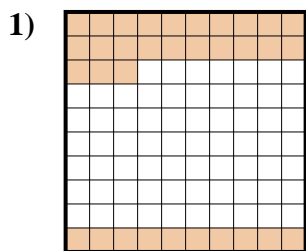




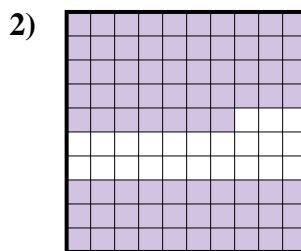
Determine the value written as a fraction , decimal & a percent.




fraction  $\frac{1}{10}$   
 decimal  $0.1$   
 percent  $10$



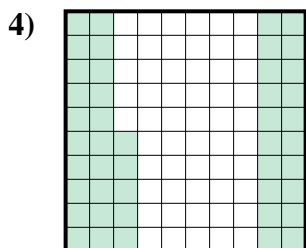
fraction  $\frac{33}{100}$   
 decimal  $0.33$   
 percent  $33$



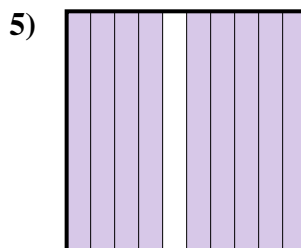
fraction  $\frac{77}{100}$   
 decimal  $0.77$   
 percent  $77$




fraction  $\frac{5}{100}$   
 decimal  $0.05$   
 percent  $5$



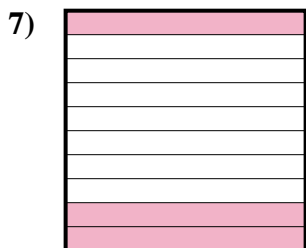
fraction  $\frac{45}{100}$   
 decimal  $0.45$   
 percent  $45$




fraction  $\frac{9}{10}$   
 decimal  $0.9$   
 percent  $90$



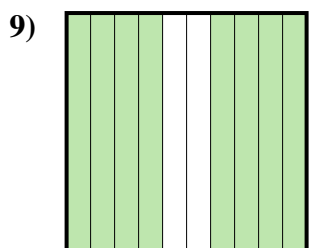
fraction  $\frac{7}{10}$   
 decimal  $0.7$   
 percent  $70$



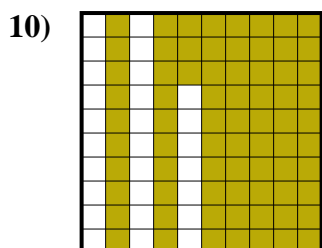
fraction  $\frac{3}{10}$   
 decimal  $0.3$   
 percent  $30$



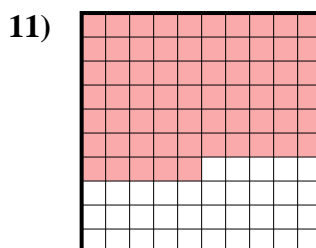
fraction  $\frac{2}{10}$   
 decimal  $0.2$   
 percent  $20$



fraction  $\frac{8}{10}$   
 decimal  $0.8$   
 percent  $80$



fraction  $\frac{73}{100}$   
 decimal  $0.73$   
 percent  $73$



fraction  $\frac{65}{100}$   
 decimal  $0.65$   
 percent  $65$

**Answers**

- Ex.  $\frac{1}{10}$  **0.1** **10%**  
 1.  $\frac{33}{100}$  **0.33** **33%**  
 2.  $\frac{77}{100}$  **0.77** **77%**  
 3.  $\frac{5}{100}$  **0.05** **5%**  
 4.  $\frac{45}{100}$  **0.45** **45%**  
 5.  $\frac{9}{10}$  **0.9** **90%**  
 6.  $\frac{7}{10}$  **0.7** **70%**  
 7.  $\frac{3}{10}$  **0.3** **30%**  
 8.  $\frac{2}{10}$  **0.2** **20%**  
 9.  $\frac{8}{10}$  **0.8** **80%**  
 10.  $\frac{73}{100}$  **0.73** **73%**  
 11.  $\frac{65}{100}$  **0.65** **65%**