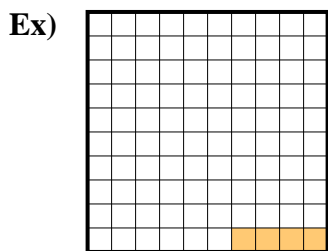
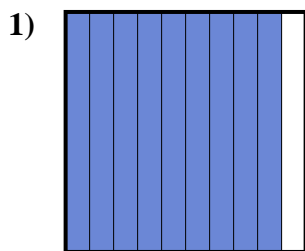




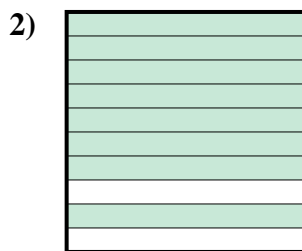
Determine the value written as a fraction , decimal & a percent.




fraction $\frac{4}{100}$
 decimal 0.04
 percent 4



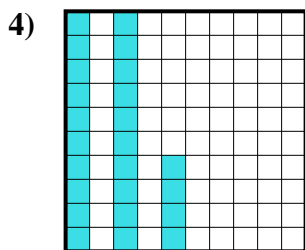
fraction $\frac{9}{10}$
 decimal 0.9
 percent 90



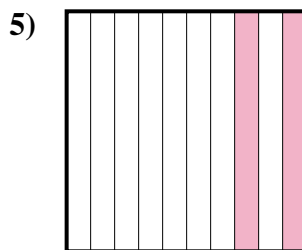
fraction $\frac{8}{10}$
 decimal 0.8
 percent 80



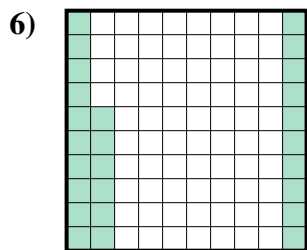
fraction $\frac{3}{10}$
 decimal 0.3
 percent 30



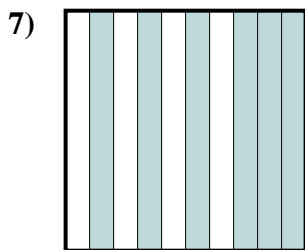
fraction $\frac{24}{100}$
 decimal 0.24
 percent 24



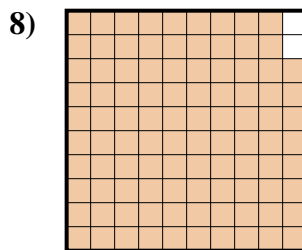
fraction $\frac{2}{10}$
 decimal 0.2
 percent 20



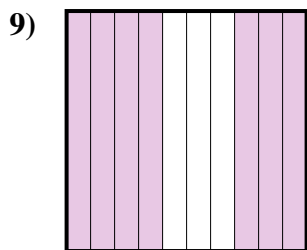
fraction $\frac{26}{100}$
 decimal 0.26
 percent 26



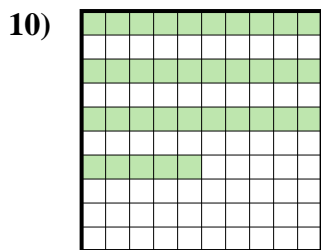
fraction $\frac{6}{10}$
 decimal 0.6
 percent 60



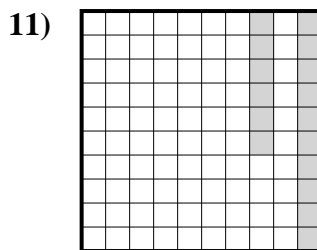
fraction $\frac{98}{100}$
 decimal 0.98
 percent 98



fraction $\frac{7}{10}$
 decimal 0.7
 percent 70



fraction $\frac{35}{100}$
 decimal 0.35
 percent 35



fraction $\frac{16}{100}$
 decimal 0.16
 percent 16

Answers

| | | | |
|-----|------------------|-------------|------------|
| Ex. | $\frac{4}{100}$ | 0.04 | 4% |
| 1. | $\frac{9}{10}$ | 0.9 | 90% |
| 2. | $\frac{8}{10}$ | 0.8 | 80% |
| 3. | $\frac{3}{10}$ | 0.3 | 30% |
| 4. | $\frac{24}{100}$ | 0.24 | 24% |
| 5. | $\frac{2}{10}$ | 0.2 | 20% |
| 6. | $\frac{26}{100}$ | 0.26 | 26% |
| 7. | $\frac{6}{10}$ | 0.6 | 60% |
| 8. | $\frac{98}{100}$ | 0.98 | 98% |
| 9. | $\frac{7}{10}$ | 0.7 | 70% |
| 10. | $\frac{35}{100}$ | 0.35 | 35% |
| 11. | $\frac{16}{100}$ | 0.16 | 16% |