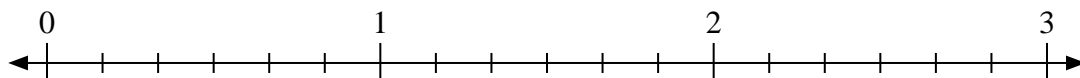




Use the numberline to solve.

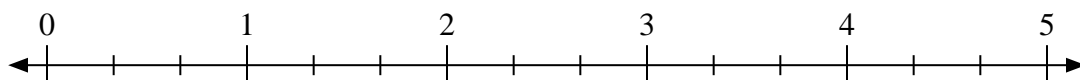
1)  $3 \div \frac{3}{6}$



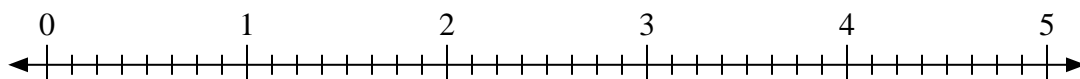
2)  $2 \div \frac{4}{5}$



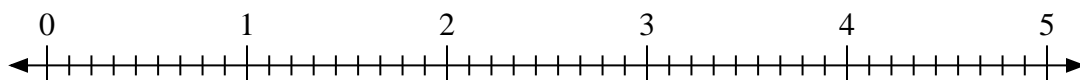
3)  $5 \div \frac{1}{3}$



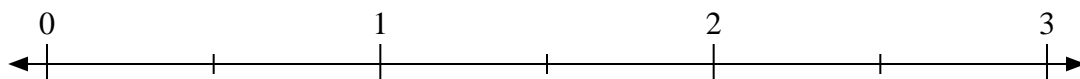
4)  $3 \div \frac{5}{8}$



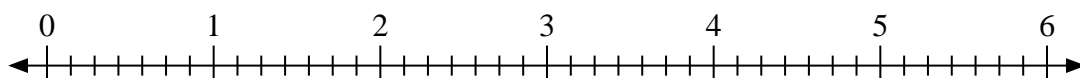
5)  $3 \div \frac{7}{9}$



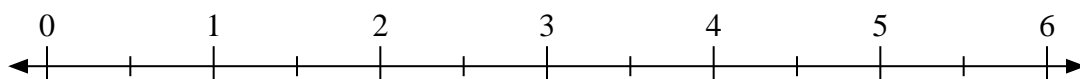
6)  $3 \div \frac{1}{2}$



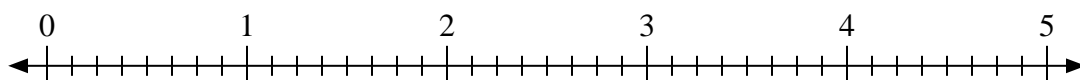
7)  $5 \div \frac{3}{7}$



8)  $5 \div \frac{1}{2}$



9)  $4 \div \frac{4}{8}$



Answers

1. \_\_\_\_\_

2. \_\_\_\_\_

3. \_\_\_\_\_

4. \_\_\_\_\_

5. \_\_\_\_\_

6. \_\_\_\_\_

7. \_\_\_\_\_

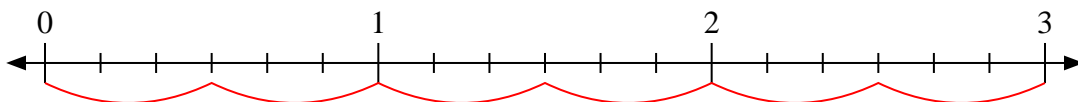
8. \_\_\_\_\_

9. \_\_\_\_\_

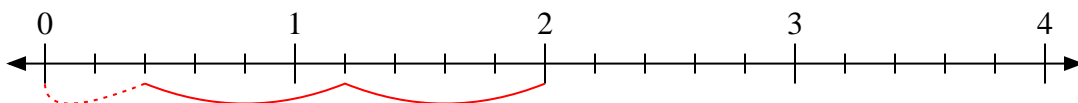


Use the numberline to solve.

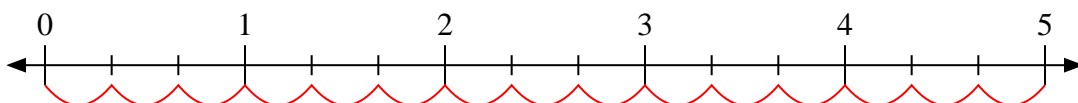
1)  $3 \div \frac{3}{6}$



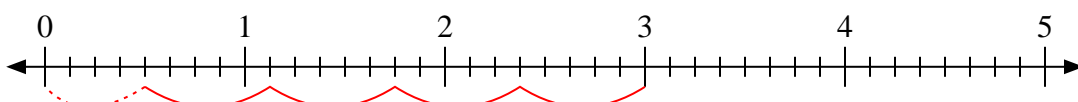
2)  $2 \div \frac{4}{5}$



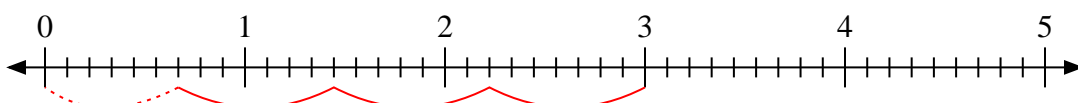
3)  $5 \div \frac{1}{3}$



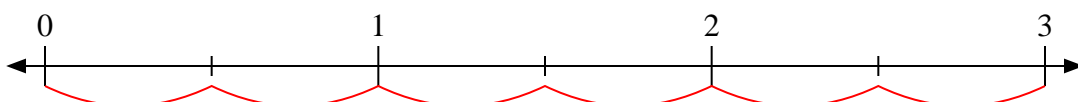
4)  $3 \div \frac{5}{8}$



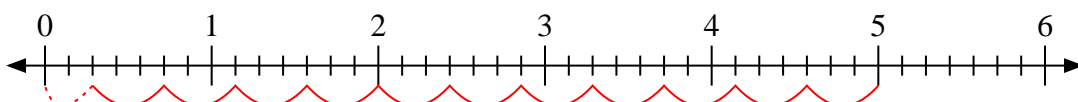
5)  $3 \div \frac{7}{9}$



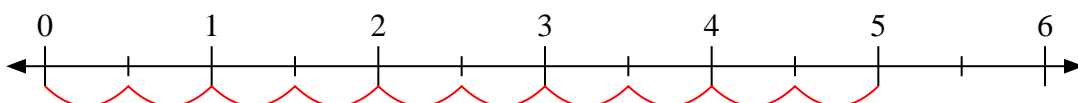
6)  $3 \div \frac{1}{2}$



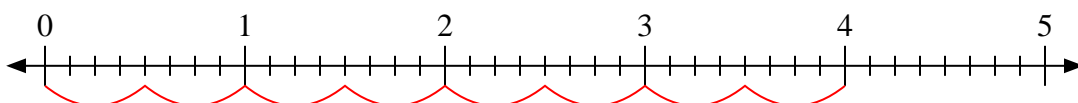
7)  $5 \div \frac{3}{7}$



8)  $5 \div \frac{1}{2}$



9)  $4 \div \frac{4}{8}$



Answers

1. 6

2.  $2 \frac{2}{4}$

3. 15

4.  $4 \frac{4}{5}$

5.  $3 \frac{6}{7}$

6. 6

7.  $11 \frac{2}{3}$

8. 10

9. 8