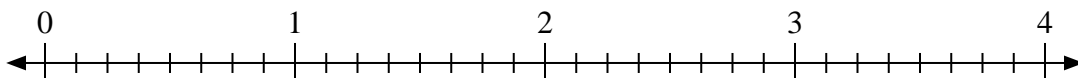




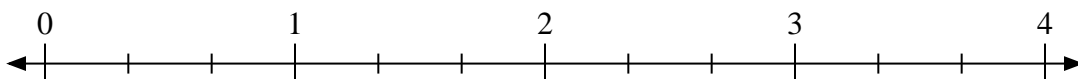
Use the numberline to solve.

Answers

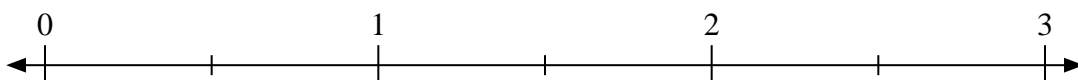
1)  $2 \div \frac{1}{8}$



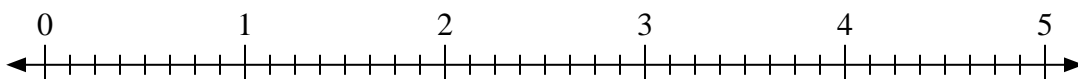
2)  $2 \div \frac{2}{3}$



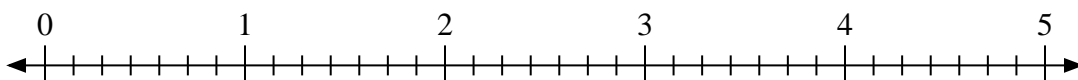
3)  $2 \div \frac{1}{2}$



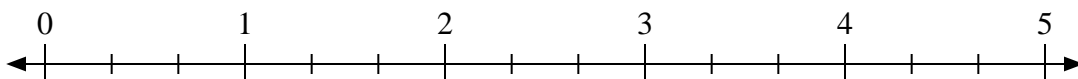
4)  $3 \div \frac{5}{8}$



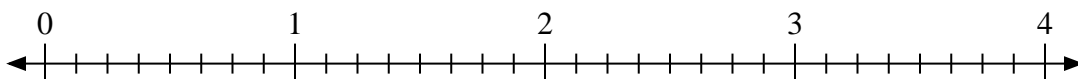
5)  $2 \div \frac{6}{7}$



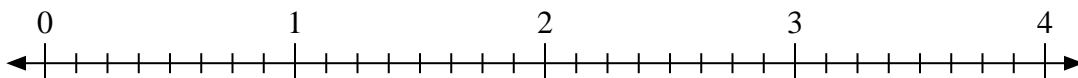
6)  $4 \div \frac{1}{3}$



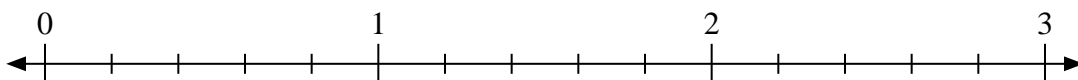
7)  $2 \div \frac{3}{8}$



8)  $2 \div \frac{2}{8}$



9)  $2 \div \frac{3}{5}$



1. \_\_\_\_\_

2. \_\_\_\_\_

3. \_\_\_\_\_

4. \_\_\_\_\_

5. \_\_\_\_\_

6. \_\_\_\_\_

7. \_\_\_\_\_

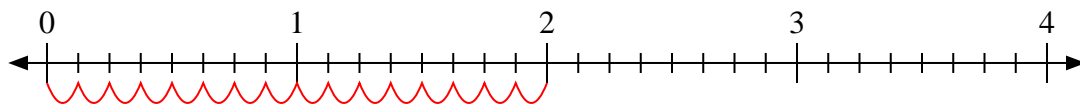
8. \_\_\_\_\_

9. \_\_\_\_\_

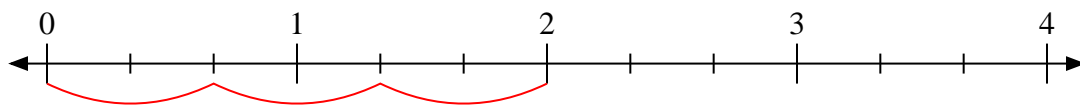


Use the numberline to solve.

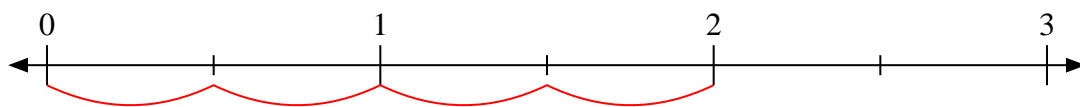
1)  $2 \div \frac{1}{8}$



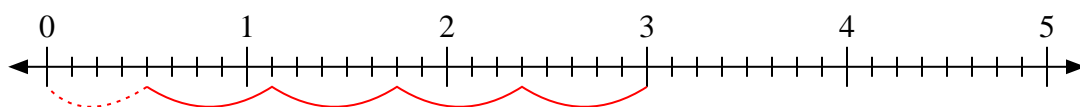
2)  $2 \div \frac{2}{3}$



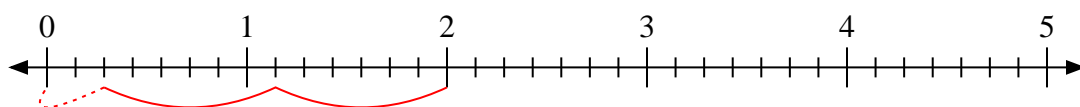
3)  $2 \div \frac{1}{2}$



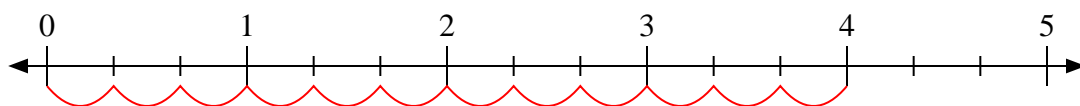
4)  $3 \div \frac{5}{8}$



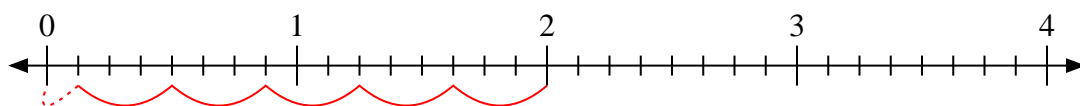
5)  $2 \div \frac{6}{7}$



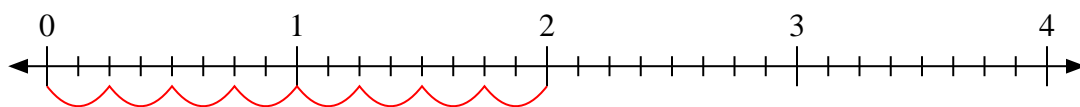
6)  $4 \div \frac{1}{3}$



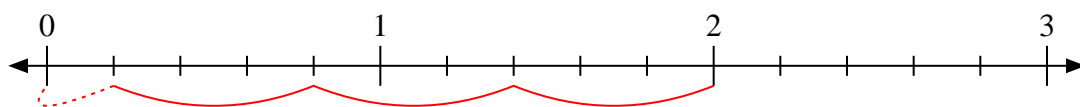
7)  $2 \div \frac{3}{8}$



8)  $2 \div \frac{2}{8}$



9)  $2 \div \frac{3}{5}$



Answers

1. 16

2. 3

3. 4

4.  $4 \frac{4}{5}$

5.  $2 \frac{2}{6}$

6. 12

7.  $5 \frac{1}{3}$

8. 8

9.  $3 \frac{1}{3}$