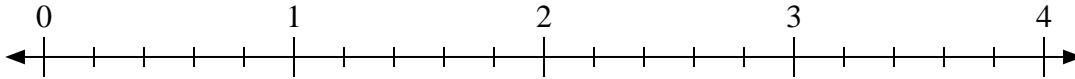


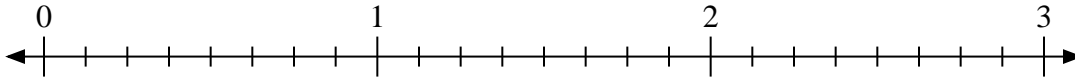


Use the numberline to solve.

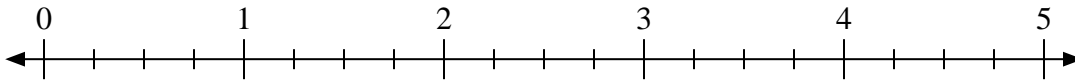
1)  $3 \div \frac{3}{5}$



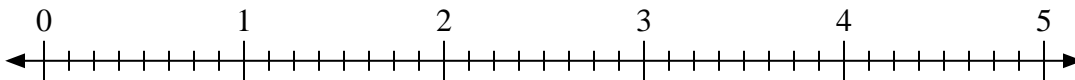
2)  $3 \div \frac{7}{8}$



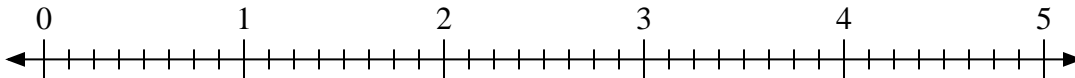
3)  $2 \div \frac{1}{4}$




4)  $4 \div \frac{6}{8}$



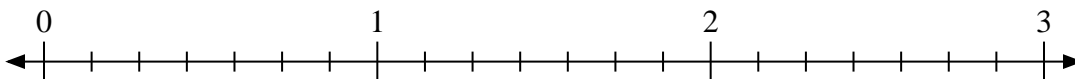
5)  $2 \div \frac{7}{8}$



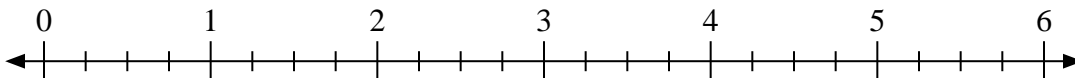
6)  $2 \div \frac{1}{3}$



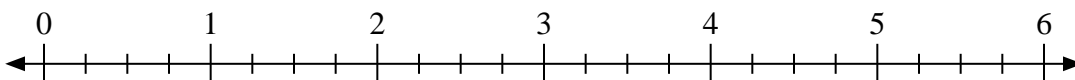
7)  $3 \div \frac{4}{7}$



8)  $5 \div \frac{3}{4}$



9)  $6 \div \frac{3}{4}$



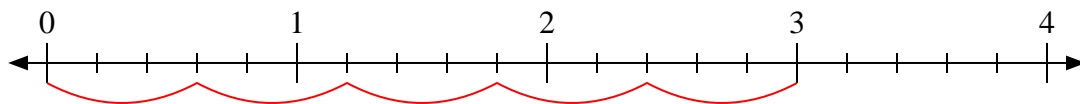
Answers

1. \_\_\_\_\_
2. \_\_\_\_\_
3. \_\_\_\_\_
4. \_\_\_\_\_
5. \_\_\_\_\_
6. \_\_\_\_\_
7. \_\_\_\_\_
8. \_\_\_\_\_
9. \_\_\_\_\_

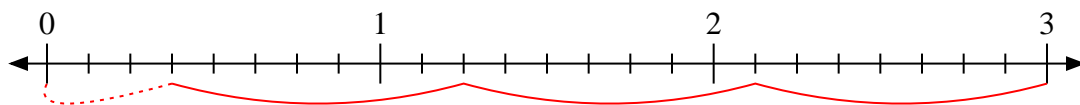


Use the numberline to solve.

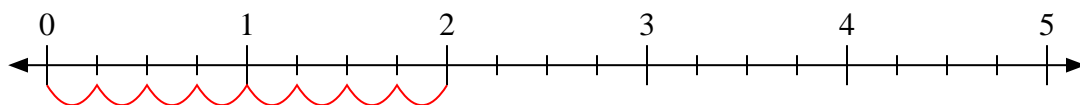
1)  $3 \div \frac{3}{5}$



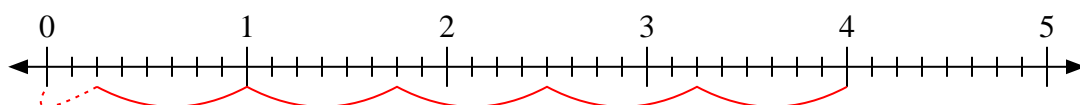
2)  $3 \div \frac{7}{8}$



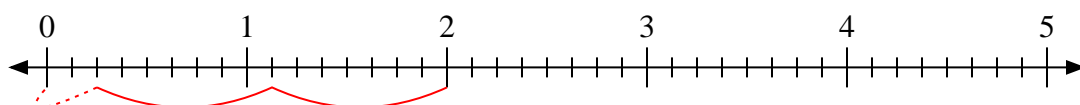
3)  $2 \div \frac{1}{4}$



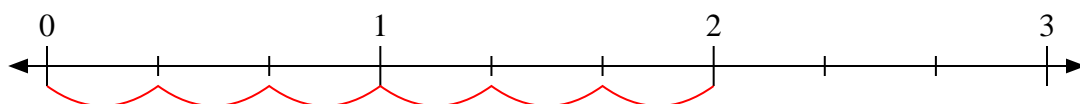
4)  $4 \div \frac{6}{8}$



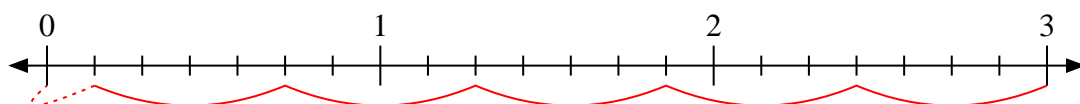
5)  $2 \div \frac{7}{8}$



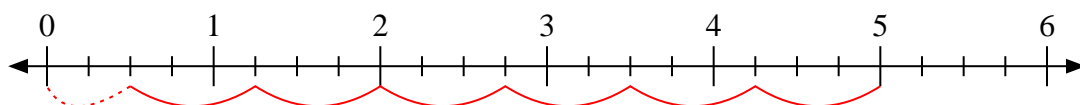
6)  $2 \div \frac{1}{3}$



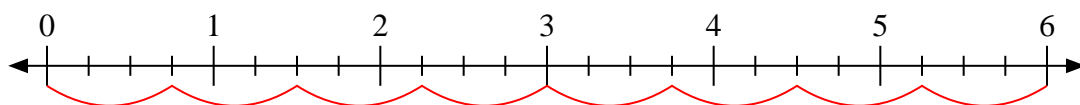
7)  $3 \div \frac{4}{7}$



8)  $5 \div \frac{3}{4}$



9)  $6 \div \frac{3}{4}$



Answers

1. 5

2.  $3 \frac{3}{7}$

3. 8

4.  $5 \frac{2}{6}$

5.  $2 \frac{2}{7}$

6. 6

7.  $5 \frac{1}{4}$

8.  $6 \frac{2}{3}$

9. 8