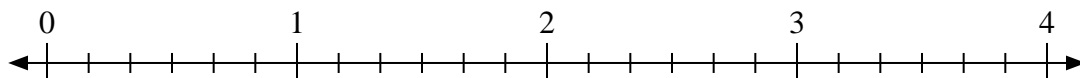




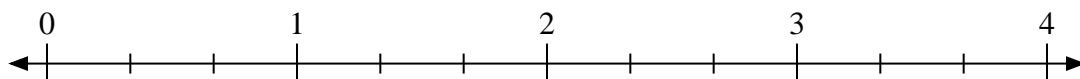
Use the numberline to solve.

Answers

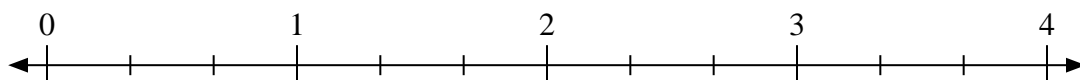
1) $3 \div \frac{2}{6}$



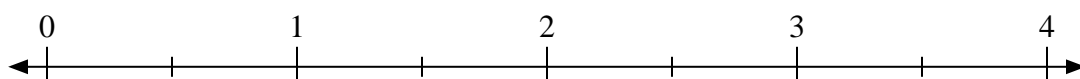
2) $2 \div \frac{2}{3}$



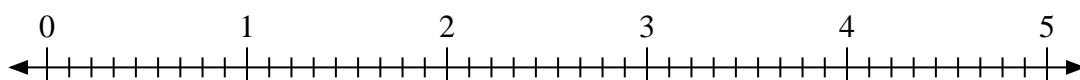
3) $4 \div \frac{1}{3}$



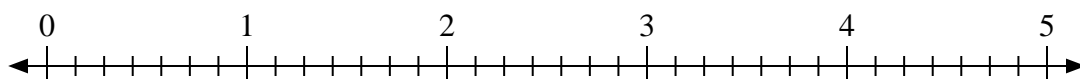
4) $2 \div \frac{1}{2}$



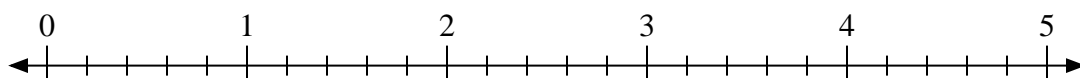
5) $3 \div \frac{5}{9}$



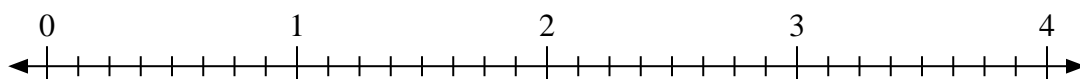
6) $4 \div \frac{1}{7}$



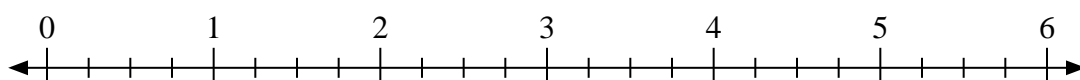
7) $4 \div \frac{2}{5}$



8) $4 \div \frac{3}{8}$



9) $2 \div \frac{1}{4}$

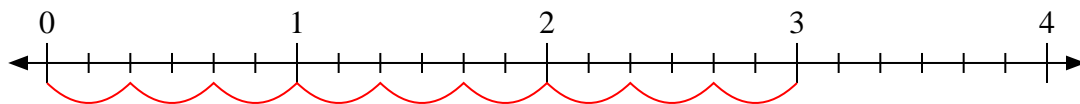


- 1. _____
- 2. _____
- 3. _____
- 4. _____
- 5. _____
- 6. _____
- 7. _____
- 8. _____
- 9. _____

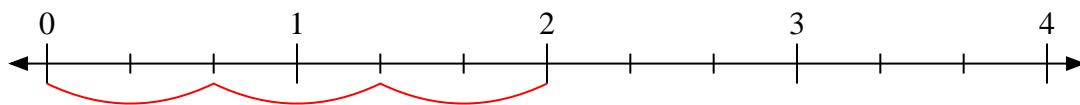


Use the numberline to solve.

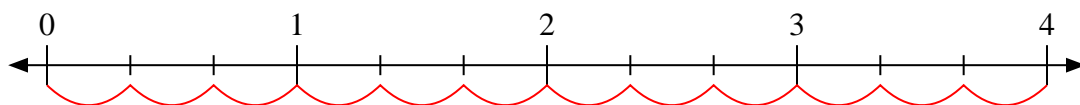
1) $3 \div \frac{2}{6}$



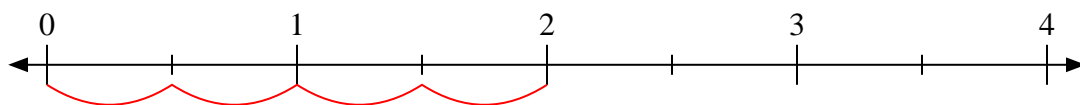
2) $2 \div \frac{2}{3}$



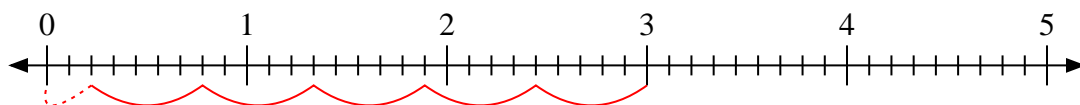
3) $4 \div \frac{1}{3}$



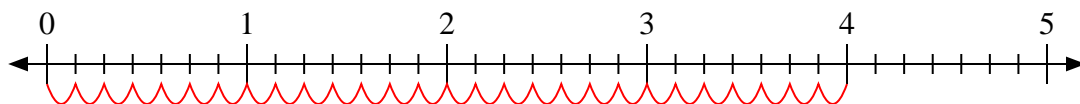
4) $2 \div \frac{1}{2}$



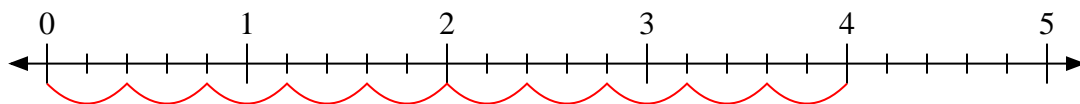
5) $3 \div \frac{5}{9}$



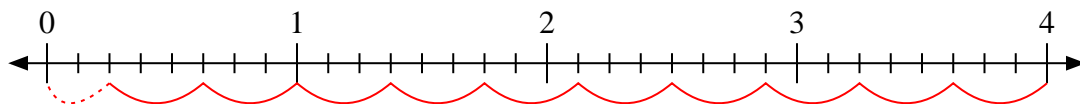
6) $4 \div \frac{1}{7}$



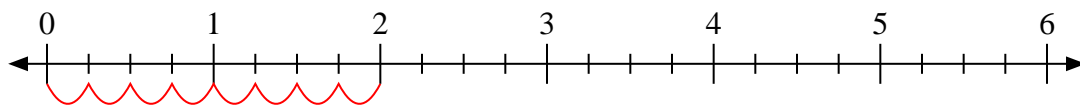
7) $4 \div \frac{2}{5}$



8) $4 \div \frac{3}{8}$



9) $2 \div \frac{1}{4}$



Answers

1. 9

2. 3

3. 12

4. 4

5. $5 \frac{2}{5}$

6. 28

7. 10

8. $10 \frac{2}{3}$

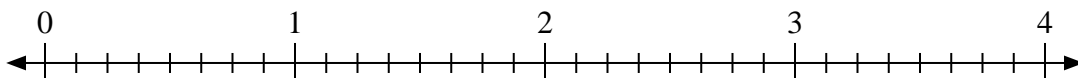
9. 8



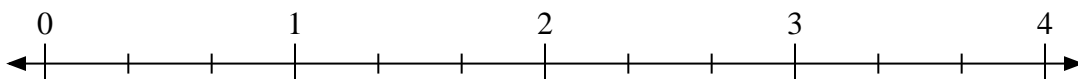
Use the numberline to solve.

Answers

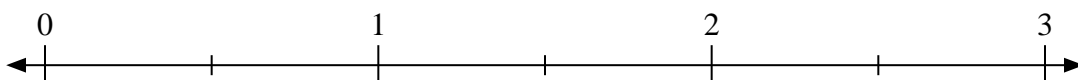
1) $2 \div \frac{1}{8}$



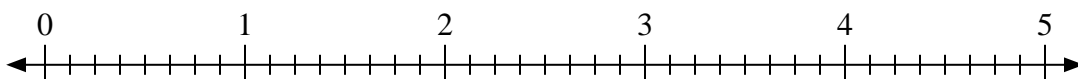
2) $2 \div \frac{2}{3}$



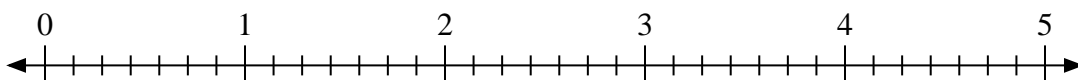
3) $2 \div \frac{1}{2}$



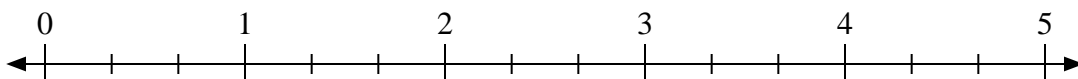
4) $3 \div \frac{5}{8}$



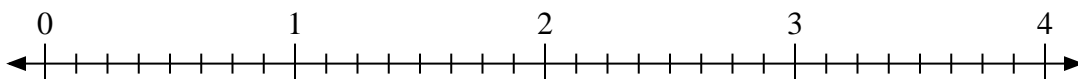
5) $2 \div \frac{6}{7}$



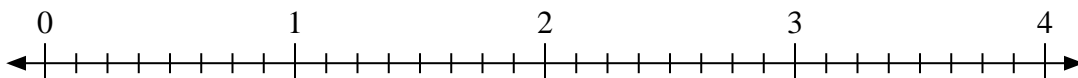
6) $4 \div \frac{1}{3}$



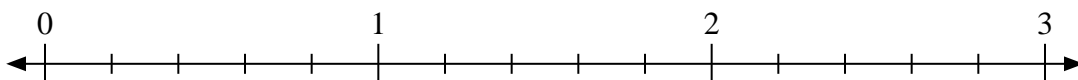
7) $2 \div \frac{3}{8}$



8) $2 \div \frac{2}{8}$



9) $2 \div \frac{3}{5}$



1. _____

2. _____

3. _____

4. _____

5. _____

6. _____

7. _____

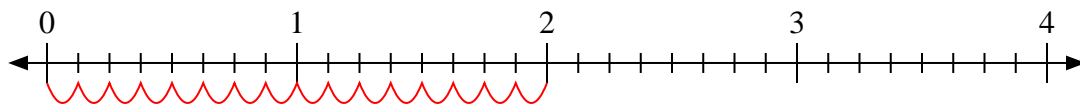
8. _____

9. _____

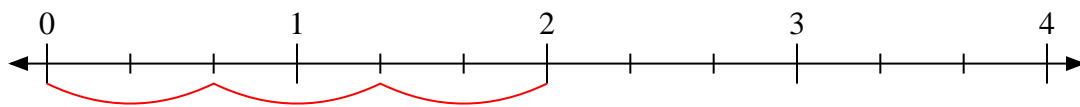


Use the numberline to solve.

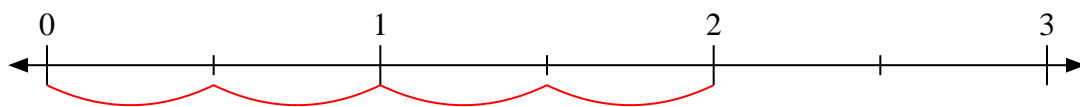
1) $2 \div \frac{1}{8}$



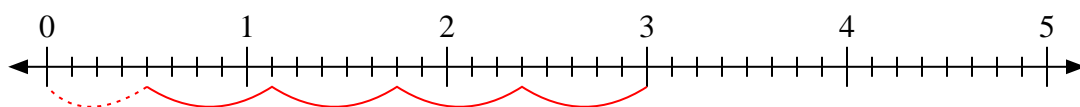
2) $2 \div \frac{2}{3}$



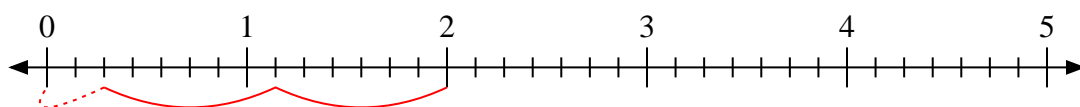
3) $2 \div \frac{1}{2}$



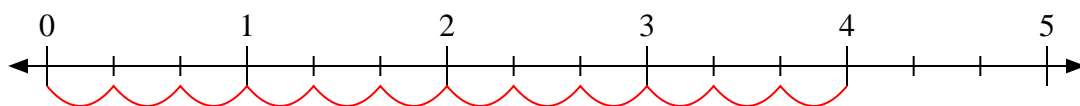
4) $3 \div \frac{5}{8}$



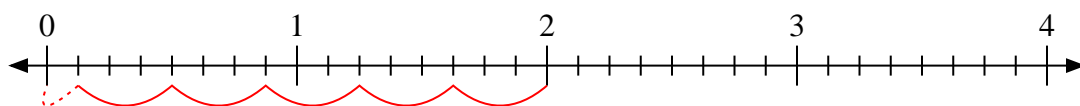
5) $2 \div \frac{6}{7}$



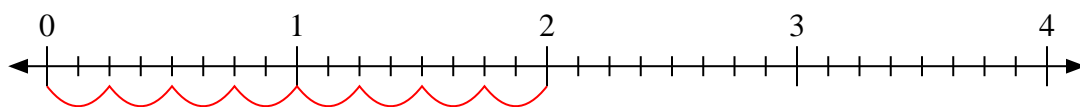
6) $4 \div \frac{1}{3}$



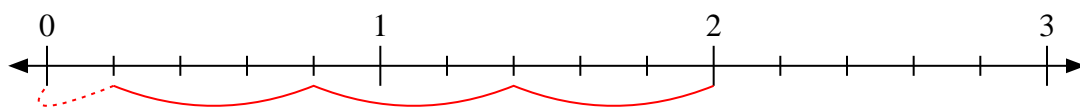
7) $2 \div \frac{3}{8}$



8) $2 \div \frac{2}{8}$



9) $2 \div \frac{3}{5}$



Answers

1. 16

2. 3

3. 4

4. $4 \frac{4}{5}$

5. $2 \frac{2}{6}$

6. 12

7. $5 \frac{1}{3}$

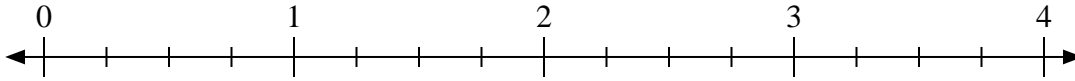
8. 8

9. $3 \frac{1}{3}$

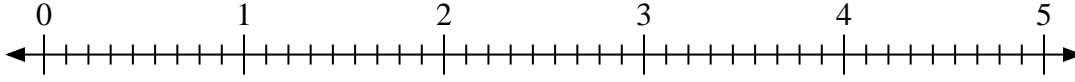


Use the numberline to solve.

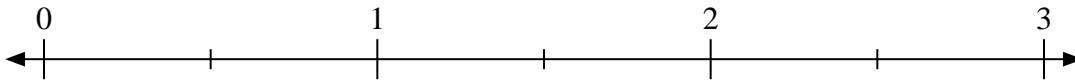
1) $4 \div \frac{3}{4}$



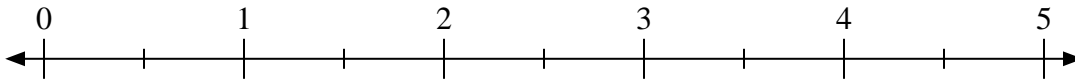
2) $2 \div \frac{2}{9}$



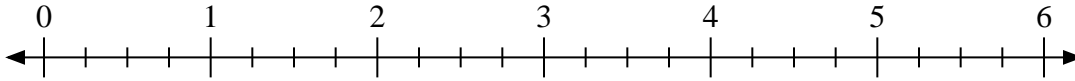
3) $3 \div \frac{1}{2}$



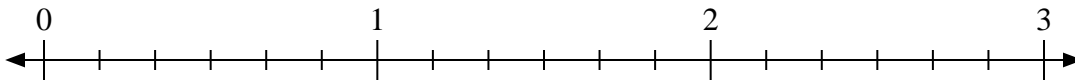
4) $5 \div \frac{1}{2}$



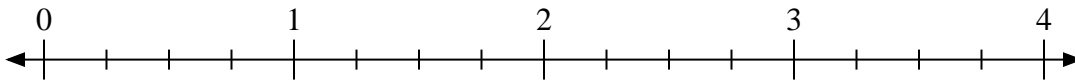
5) $4 \div \frac{2}{4}$



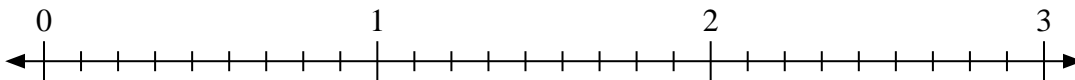
6) $2 \div \frac{1}{6}$



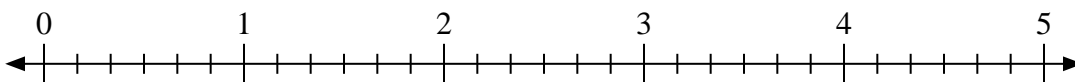
7) $3 \div \frac{3}{4}$



8) $2 \div \frac{7}{9}$



9) $3 \div \frac{2}{6}$



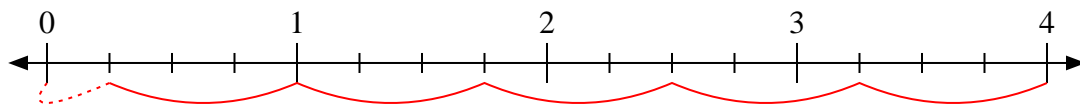
Answers

1. _____
2. _____
3. _____
4. _____
5. _____
6. _____
7. _____
8. _____
9. _____

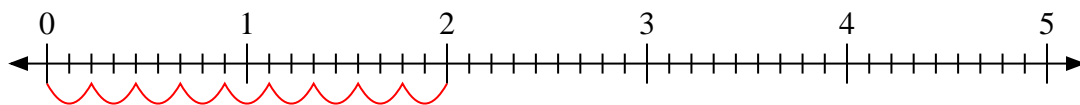


Use the numberline to solve.

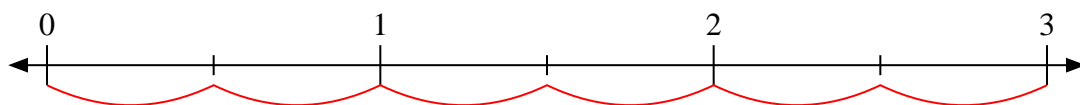
1) $4 \div \frac{3}{4}$



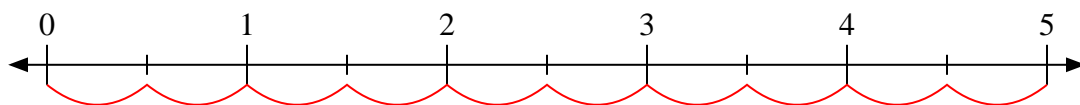
2) $2 \div \frac{2}{9}$



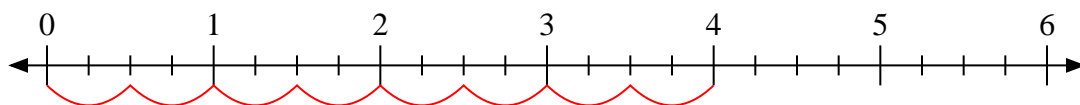
3) $3 \div \frac{1}{2}$



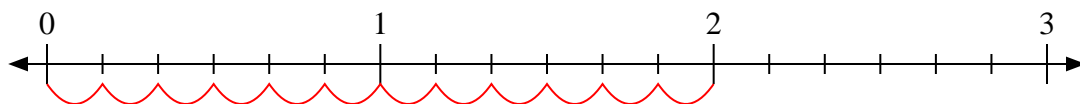
4) $5 \div \frac{1}{2}$



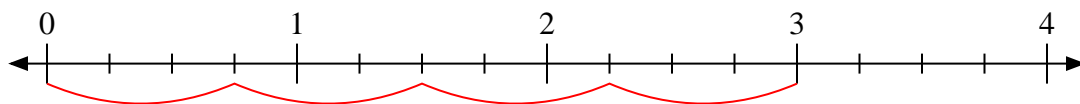
5) $4 \div \frac{2}{4}$



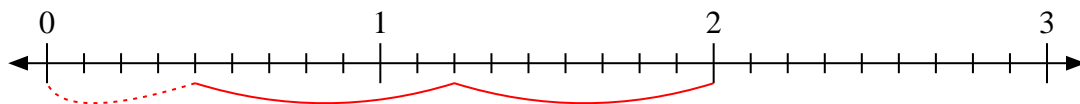
6) $2 \div \frac{1}{6}$



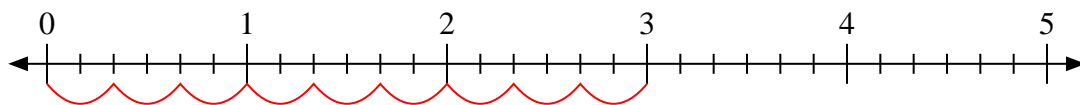
7) $3 \div \frac{3}{4}$



8) $2 \div \frac{7}{9}$



9) $3 \div \frac{2}{6}$



Answers

1. 5 ¹/₃

2. 9

3. 6

4. 10

5. 8

6. 12

7. 4

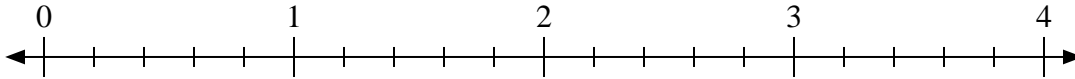
8. 2 ⁴/₇

9. 9

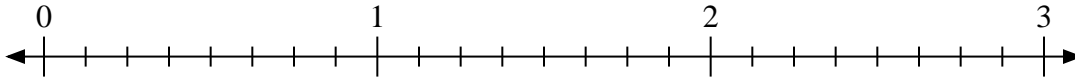


Use the numberline to solve.

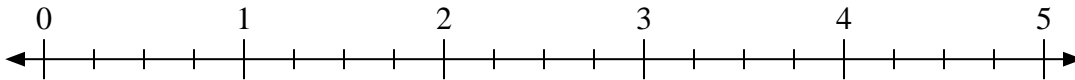
1) $3 \div \frac{3}{5}$



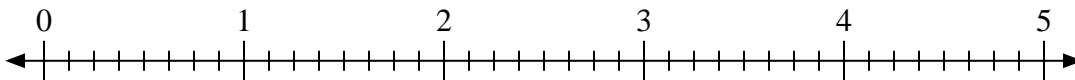
2) $3 \div \frac{7}{8}$



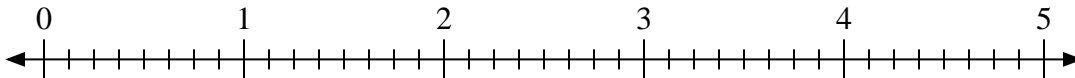
3) $2 \div \frac{1}{4}$




4) $4 \div \frac{6}{8}$



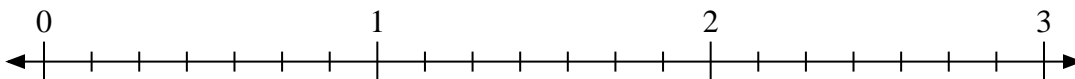
5) $2 \div \frac{7}{8}$



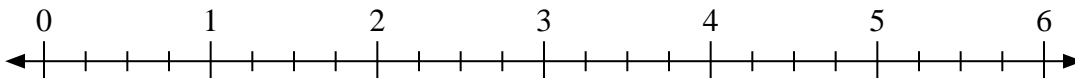
6) $2 \div \frac{1}{3}$



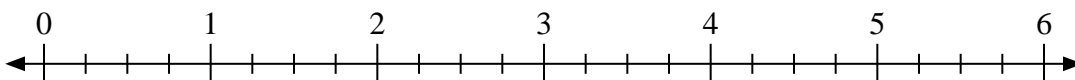
7) $3 \div \frac{4}{7}$



8) $5 \div \frac{3}{4}$



9) $6 \div \frac{3}{4}$



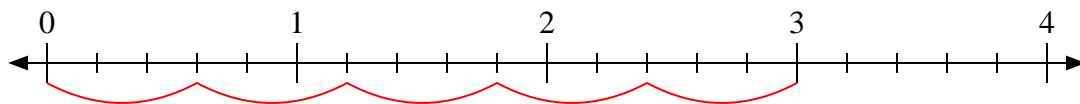
Answers

1. _____
2. _____
3. _____
4. _____
5. _____
6. _____
7. _____
8. _____
9. _____

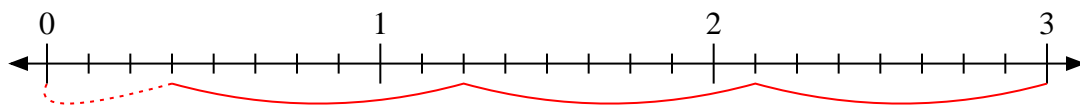


Use the numberline to solve.

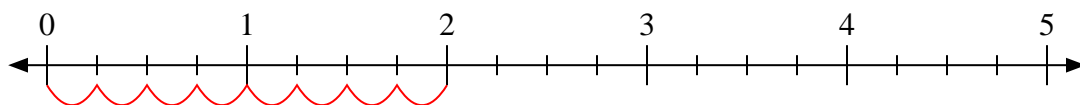
1) $3 \div \frac{3}{5}$



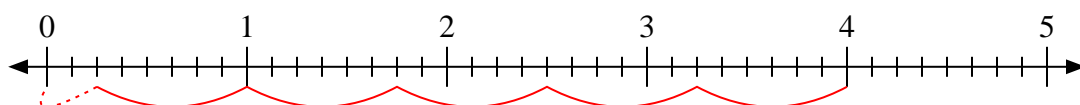
2) $3 \div \frac{7}{8}$



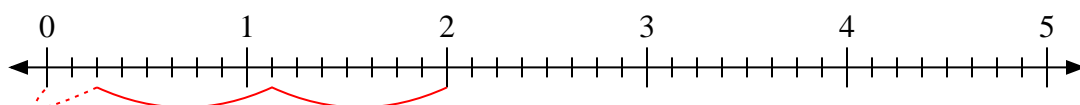
3) $2 \div \frac{1}{4}$



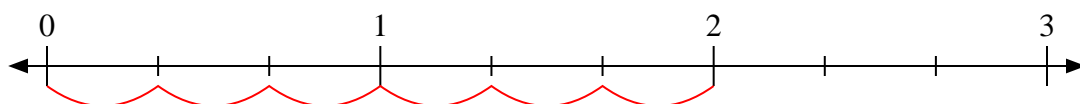
4) $4 \div \frac{6}{8}$



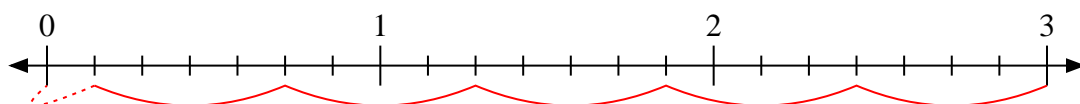
5) $2 \div \frac{7}{8}$



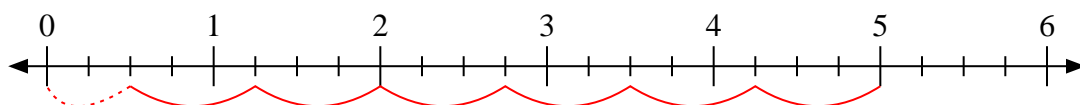
6) $2 \div \frac{1}{3}$



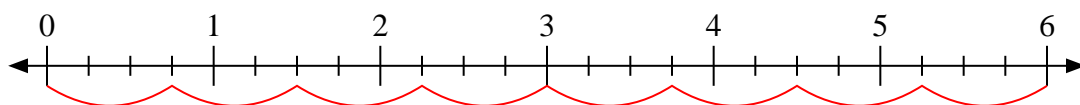
7) $3 \div \frac{4}{7}$



8) $5 \div \frac{3}{4}$



9) $6 \div \frac{3}{4}$



Answers

1. 5

2. $3 \frac{3}{7}$

3. 8

4. $5 \frac{2}{6}$

5. $2 \frac{2}{7}$

6. 6

7. $5 \frac{1}{4}$

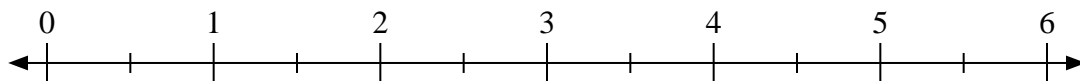
8. $6 \frac{2}{3}$

9. 8

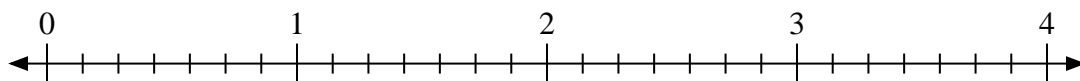


Use the numberline to solve.

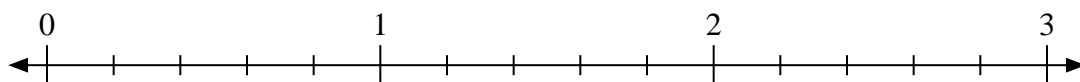
1) $5 \div \frac{1}{2}$



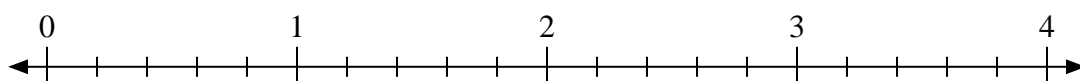
2) $4 \div \frac{4}{7}$



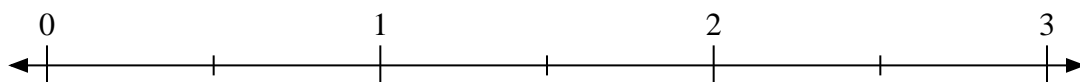
3) $3 \div \frac{1}{5}$



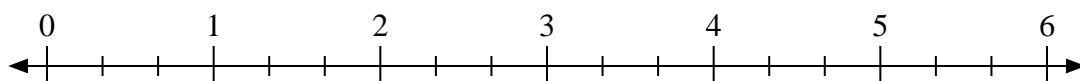
4) $2 \div \frac{2}{5}$



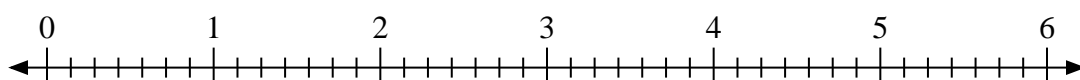
5) $2 \div \frac{1}{2}$



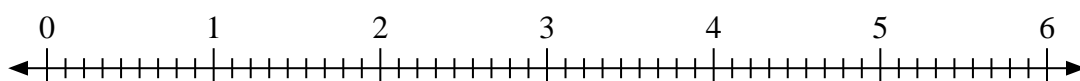
6) $3 \div \frac{2}{3}$



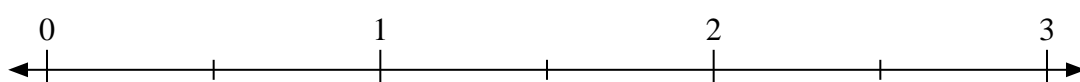
7) $2 \div \frac{2}{7}$



8) $2 \div \frac{4}{9}$



9) $3 \div \frac{1}{2}$



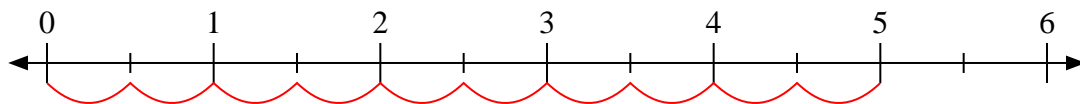
Answers

1. _____
2. _____
3. _____
4. _____
5. _____
6. _____
7. _____
8. _____
9. _____

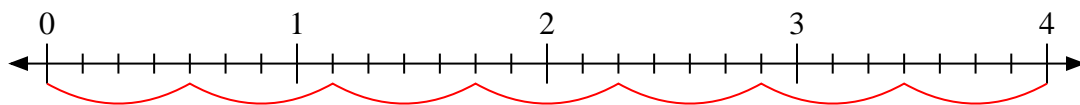


Use the numberline to solve.

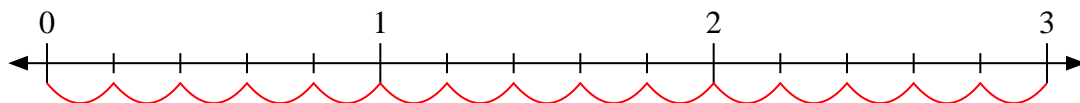
1) $5 \div \frac{1}{2}$



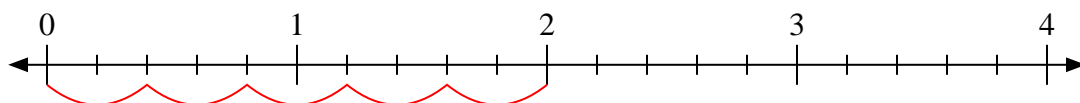
2) $4 \div \frac{4}{7}$



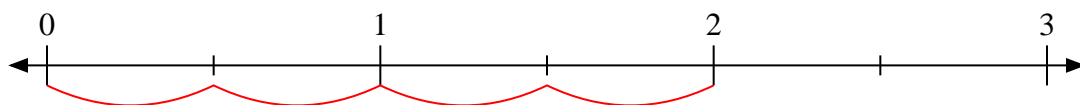
3) $3 \div \frac{1}{5}$



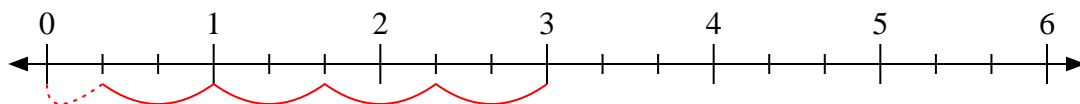
4) $2 \div \frac{2}{5}$



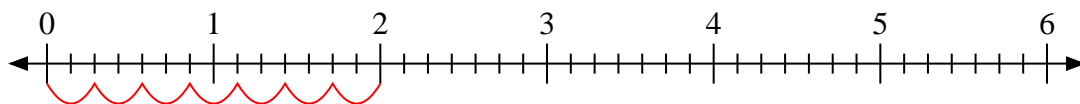
5) $2 \div \frac{1}{2}$



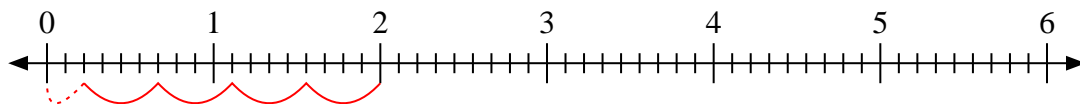
6) $3 \div \frac{2}{3}$



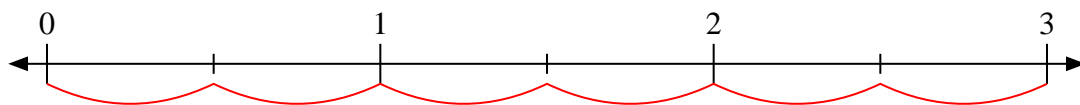
7) $2 \div \frac{2}{7}$



8) $2 \div \frac{4}{9}$



9) $3 \div \frac{1}{2}$



Answers

1. **10**

2. **7**

3. **15**

4. **5**

5. **4**

6. **$4 \frac{1}{2}$**

7. **7**

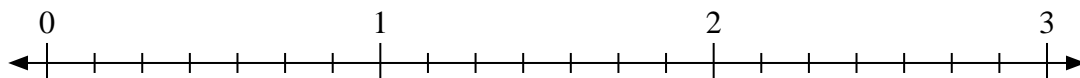
8. **$4 \frac{2}{4}$**

9. **6**

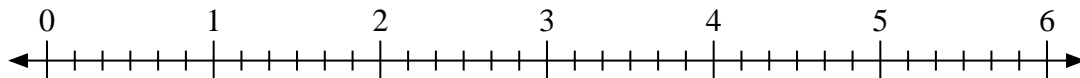


Use the numberline to solve.

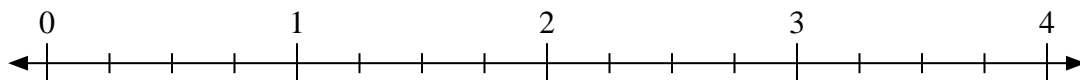
1) $2 \div \frac{3}{7}$



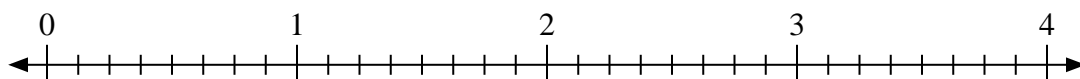
2) $6 \div \frac{3}{6}$



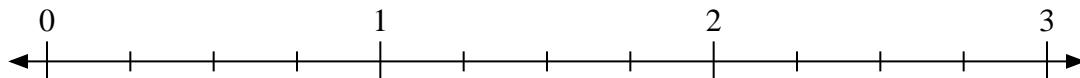
3) $2 \div \frac{1}{4}$



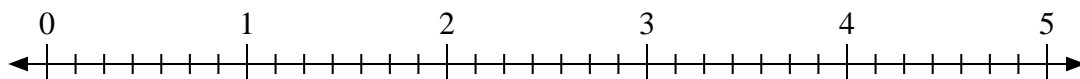
4) $2 \div \frac{2}{8}$



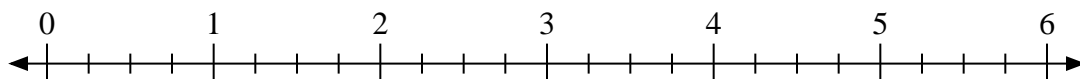
5) $3 \div \frac{2}{4}$



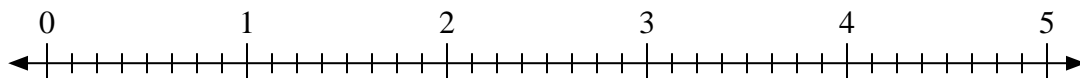
6) $5 \div \frac{4}{7}$



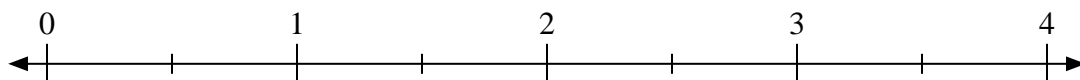
7) $6 \div \frac{1}{4}$



8) $5 \div \frac{5}{8}$



9) $3 \div \frac{1}{2}$



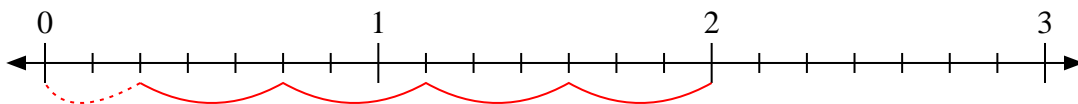
Answers

1. _____
2. _____
3. _____
4. _____
5. _____
6. _____
7. _____
8. _____
9. _____

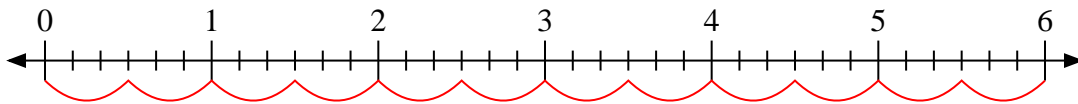


Use the numberline to solve.

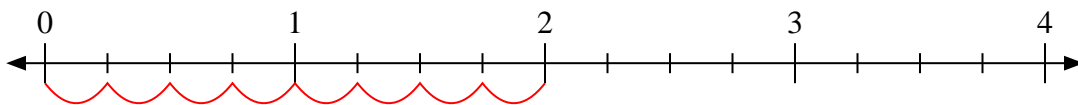
1) $2 \div \frac{3}{7}$



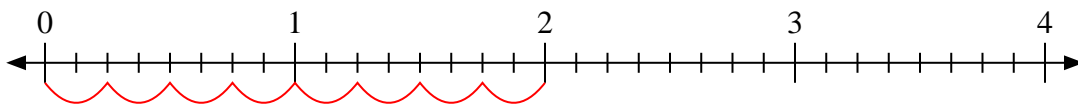
2) $6 \div \frac{3}{6}$



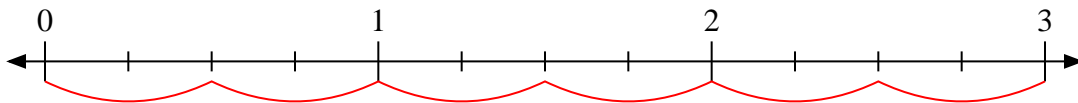
3) $2 \div \frac{1}{4}$



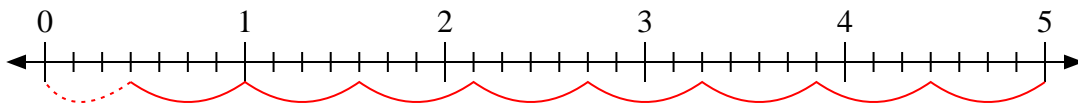
4) $2 \div \frac{2}{8}$



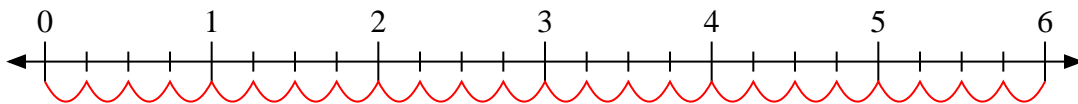
5) $3 \div \frac{2}{4}$



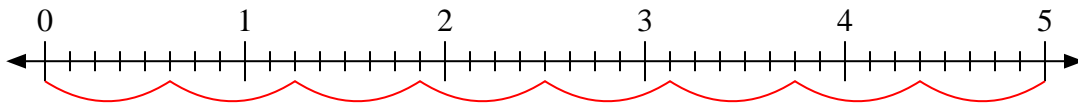
6) $5 \div \frac{4}{7}$



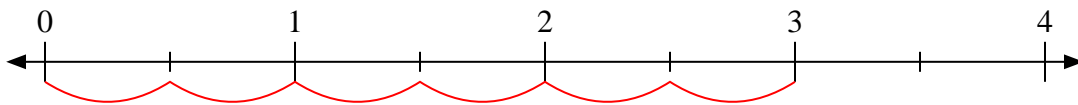
7) $6 \div \frac{1}{4}$



8) $5 \div \frac{5}{8}$



9) $3 \div \frac{1}{2}$



Answers

1. 4 ²/₃

2. 12

3. 8

4. 8

5. 6

6. 8 ³/₄

7. 24

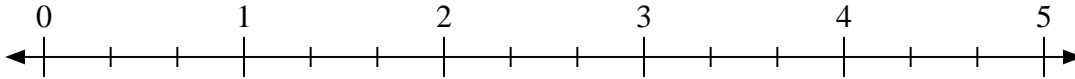
8. 8

9. 6




Use the numberline to solve.

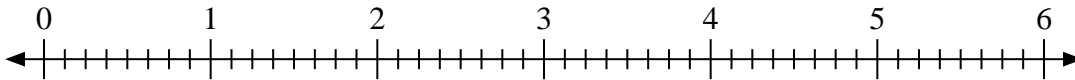
1) $2 \div \frac{2}{3}$



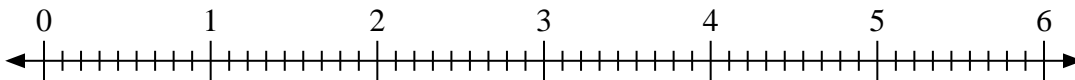
2) $2 \div \frac{1}{3}$



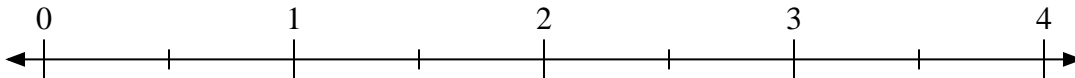
3) $4 \div \frac{3}{8}$



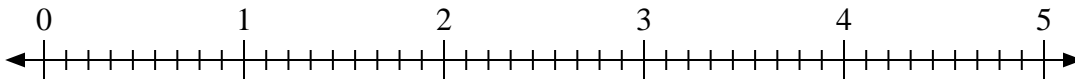
4) $6 \div \frac{8}{9}$



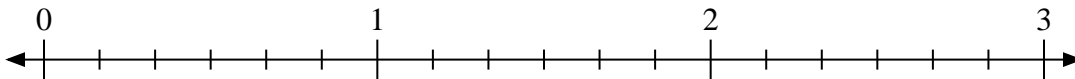
5) $2 \div \frac{1}{2}$



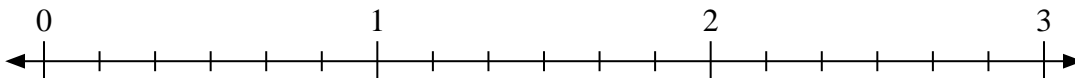
6) $3 \div \frac{8}{9}$



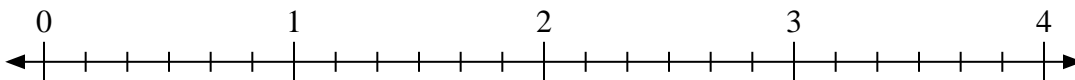
7) $2 \div \frac{3}{6}$



8) $2 \div \frac{4}{6}$



9) $3 \div \frac{5}{6}$



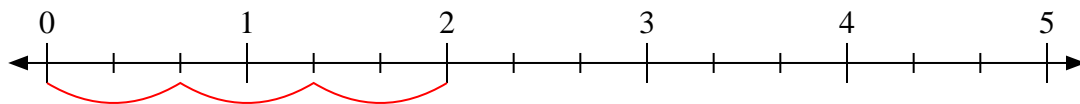
Answers

1. _____
2. _____
3. _____
4. _____
5. _____
6. _____
7. _____
8. _____
9. _____

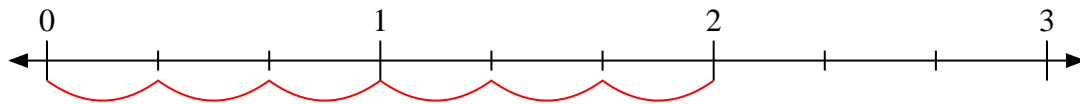


Use the numberline to solve.

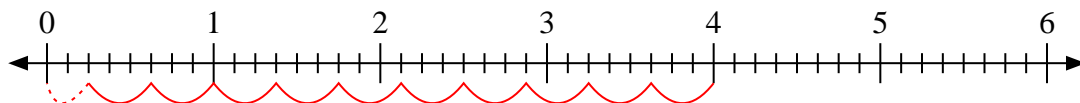
1) $2 \div \frac{2}{3}$



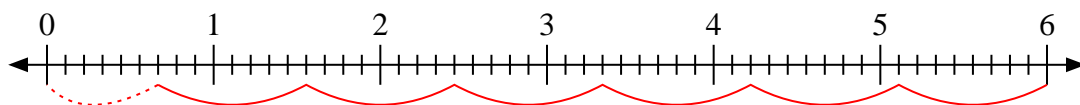
2) $2 \div \frac{1}{3}$



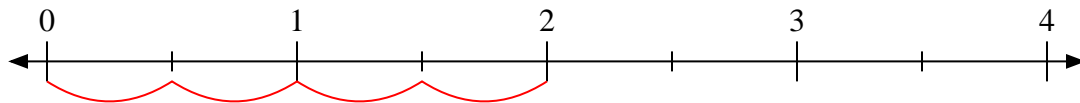
3) $4 \div \frac{3}{8}$



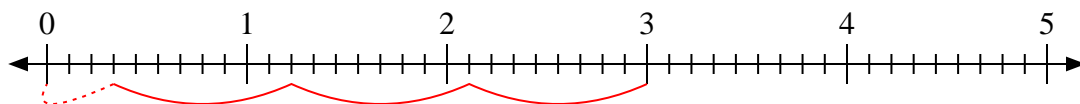
4) $6 \div \frac{8}{9}$



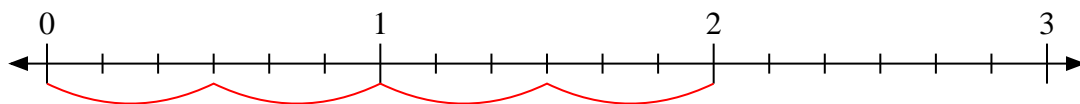
5) $2 \div \frac{1}{2}$



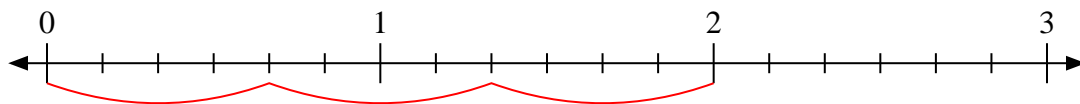
6) $3 \div \frac{8}{9}$



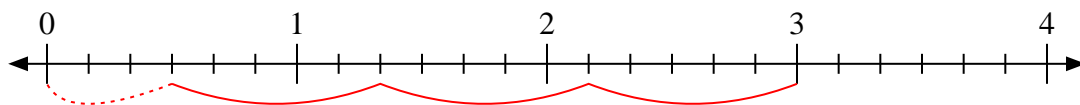
7) $2 \div \frac{3}{6}$



8) $2 \div \frac{4}{6}$



9) $3 \div \frac{5}{6}$



Answers

1. 3

2. 6

3. $10 \frac{2}{3}$

4. $6 \frac{6}{8}$

5. 4

6. $3 \frac{3}{8}$

7. 4

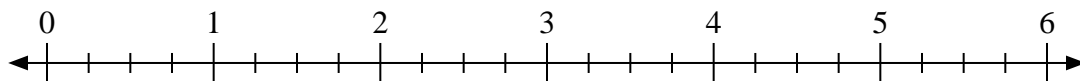
8. 3

9. $3 \frac{3}{5}$

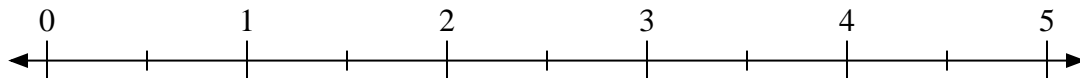


Use the numberline to solve.

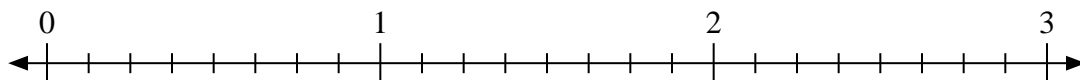
1) $6 \div \frac{3}{4}$



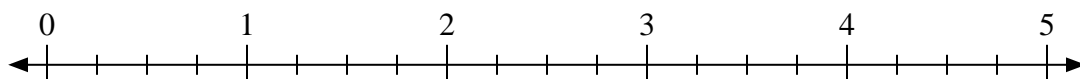
2) $5 \div \frac{1}{2}$



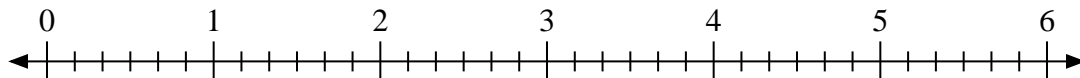
3) $3 \div \frac{6}{8}$



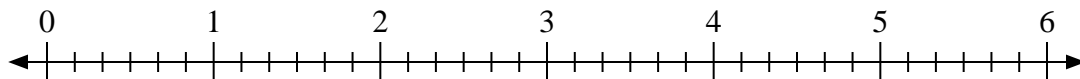
4) $3 \div \frac{3}{4}$



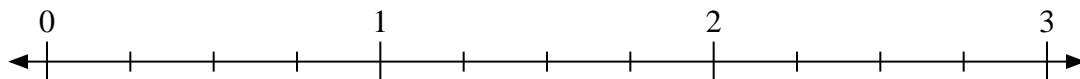
5) $6 \div \frac{3}{6}$




6) $5 \div \frac{1}{6}$



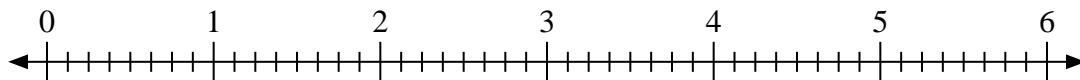
7) $3 \div \frac{1}{4}$



8) $3 \div \frac{2}{3}$



9) $3 \div \frac{3}{8}$



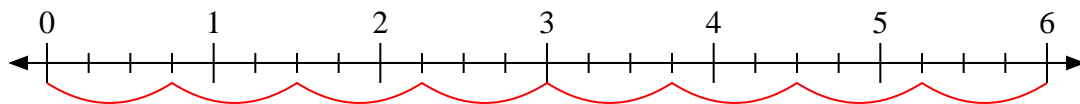
Answers

1. _____
2. _____
3. _____
4. _____
5. _____
6. _____
7. _____
8. _____
9. _____

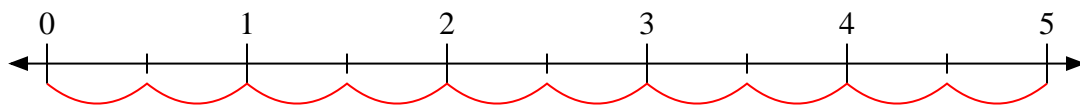


Use the numberline to solve.

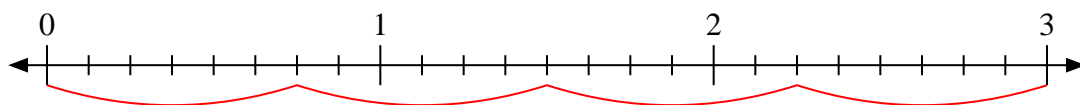
1) $6 \div \frac{3}{4}$



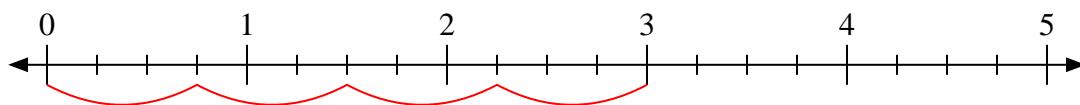
2) $5 \div \frac{1}{2}$



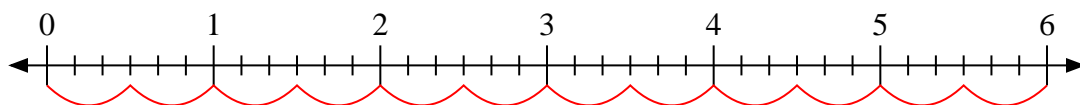
3) $3 \div \frac{6}{8}$



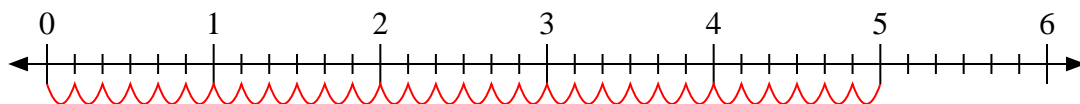
4) $3 \div \frac{3}{4}$



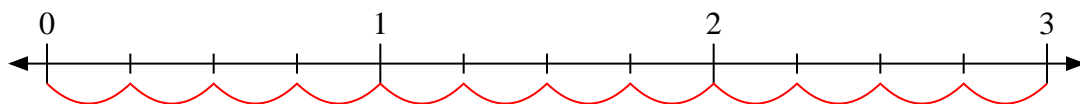
5) $6 \div \frac{3}{6}$



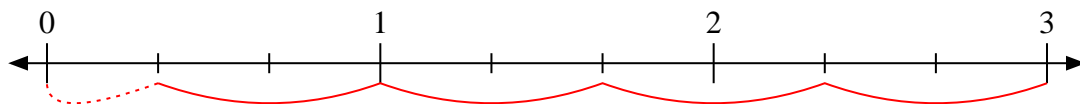
6) $5 \div \frac{1}{6}$



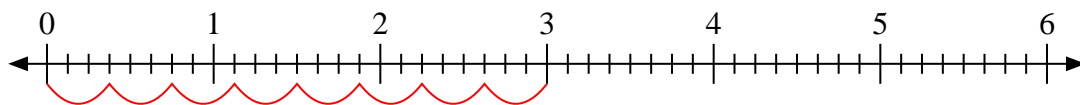
7) $3 \div \frac{1}{4}$



8) $3 \div \frac{2}{3}$



9) $3 \div \frac{3}{8}$



Answers

1. 8

2. 10

3. 4

4. 4

5. 12

6. 30

7. 12

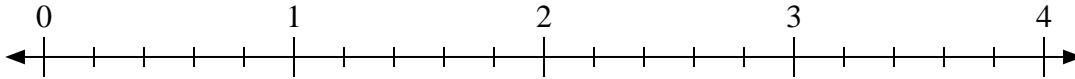
8. $4 \frac{1}{2}$

9. 8

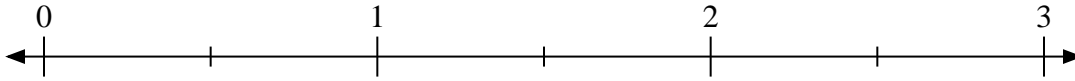


Use the numberline to solve.

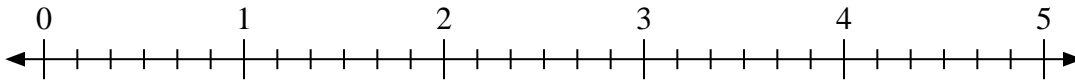
1) $2 \div \frac{1}{5}$



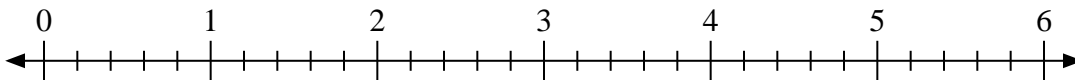
2) $3 \div \frac{1}{2}$



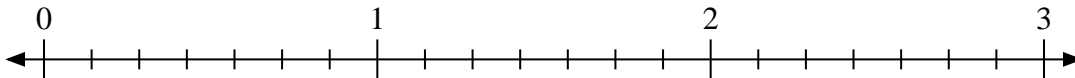
3) $3 \div \frac{1}{6}$



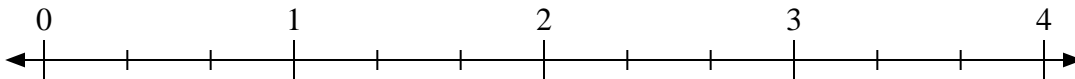
4) $6 \div \frac{4}{5}$



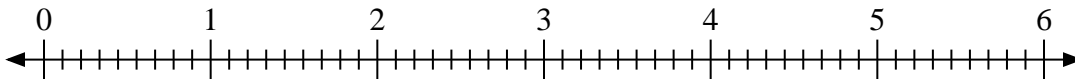
5) $3 \div \frac{5}{7}$



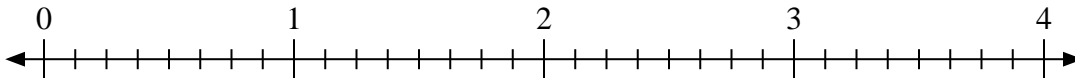
6) $4 \div \frac{2}{3}$



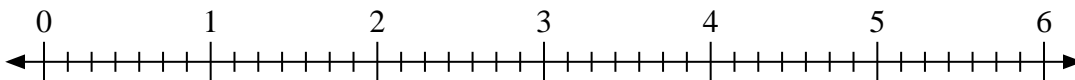
7) $4 \div \frac{5}{9}$



8) $4 \div \frac{7}{8}$



9) $5 \div \frac{3}{7}$



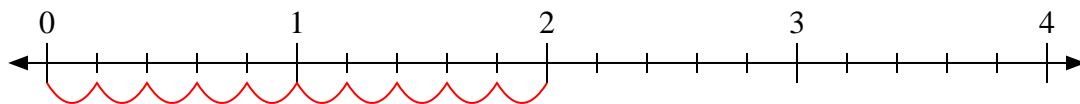
Answers

1. _____
2. _____
3. _____
4. _____
5. _____
6. _____
7. _____
8. _____
9. _____

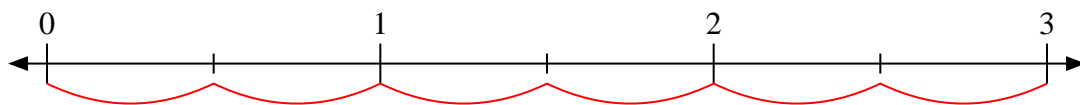


Use the numberline to solve.

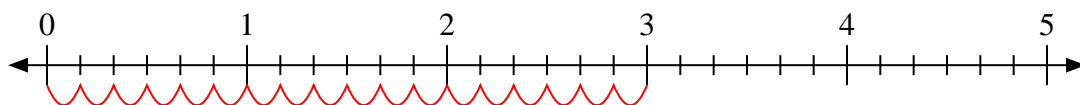
1) $2 \div \frac{1}{5}$



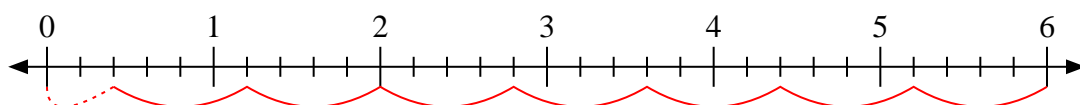
2) $3 \div \frac{1}{2}$



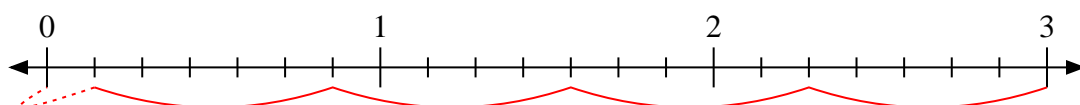
3) $3 \div \frac{1}{6}$



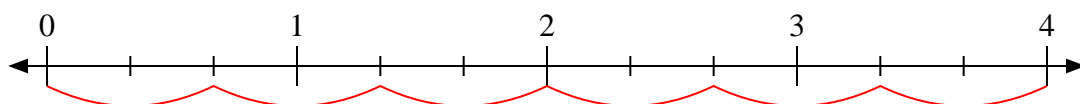
4) $6 \div \frac{4}{5}$



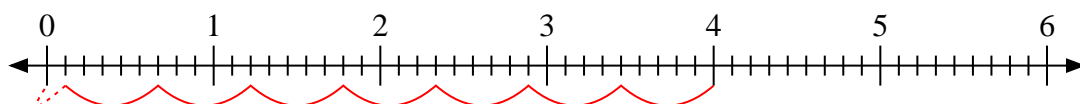
5) $3 \div \frac{5}{7}$



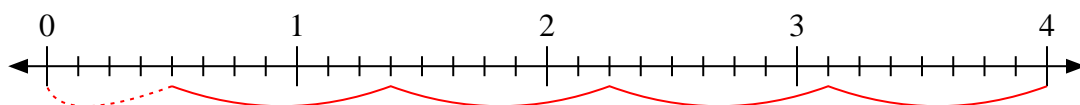
6) $4 \div \frac{2}{3}$



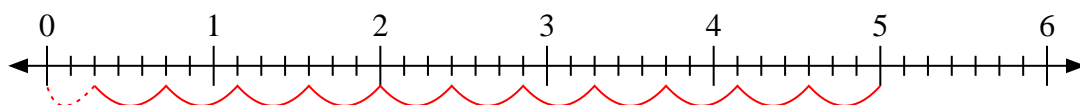
7) $4 \div \frac{5}{9}$



8) $4 \div \frac{7}{8}$



9) $5 \div \frac{3}{7}$



Answers

1. **10**

2. **6**

3. **18**

4. **$7 \frac{2}{4}$**

5. **$4 \frac{1}{5}$**

6. **6**

7. **$7 \frac{1}{5}$**

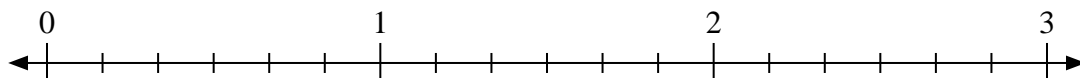
8. **$4 \frac{4}{7}$**

9. **$11 \frac{2}{3}$**

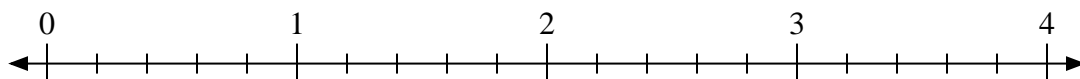


Use the numberline to solve.

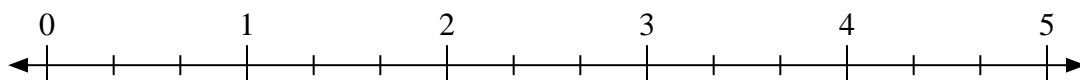
1) $3 \div \frac{3}{6}$



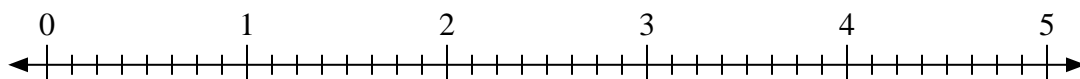
2) $2 \div \frac{4}{5}$



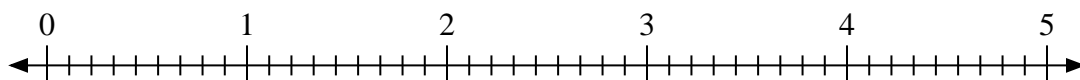
3) $5 \div \frac{1}{3}$



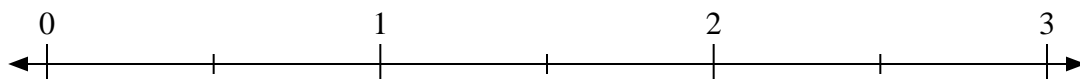
4) $3 \div \frac{5}{8}$



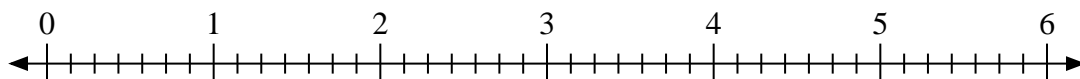
5) $3 \div \frac{7}{9}$



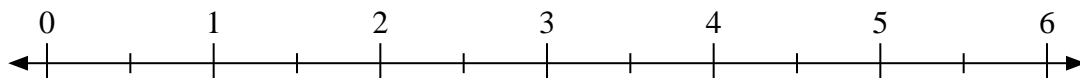
6) $3 \div \frac{1}{2}$



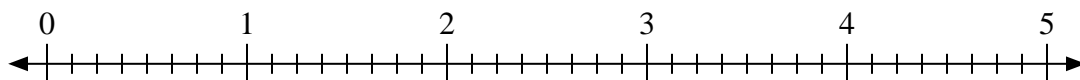
7) $5 \div \frac{3}{7}$



8) $5 \div \frac{1}{2}$



9) $4 \div \frac{4}{8}$



Answers

1. _____

2. _____

3. _____

4. _____

5. _____

6. _____

7. _____

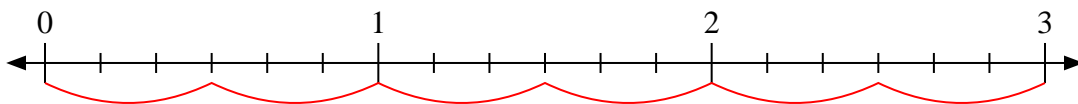
8. _____

9. _____

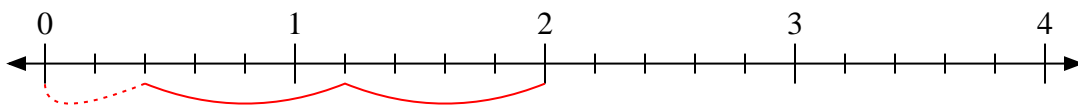


Use the numberline to solve.

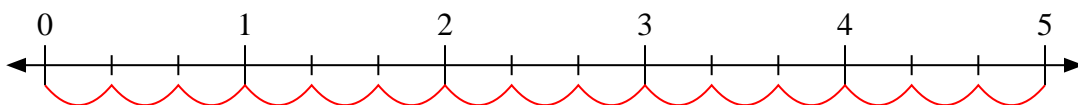
1) $3 \div \frac{3}{6}$



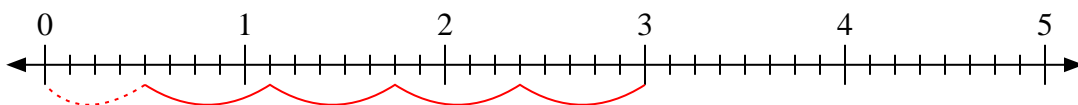
2) $2 \div \frac{4}{5}$



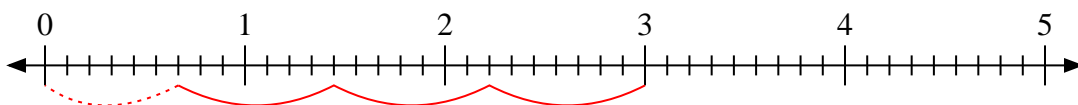
3) $5 \div \frac{1}{3}$



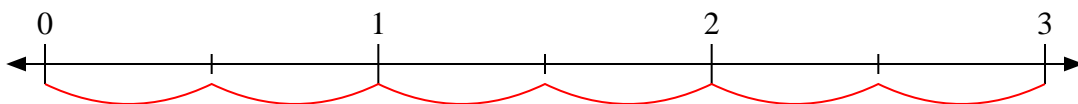
4) $3 \div \frac{5}{8}$



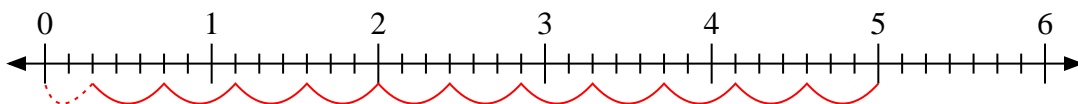
5) $3 \div \frac{7}{9}$



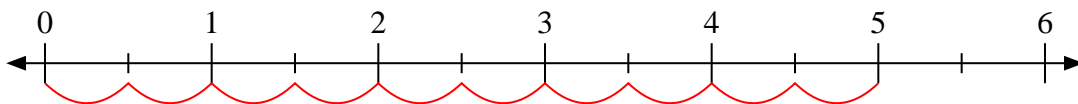
6) $3 \div \frac{1}{2}$



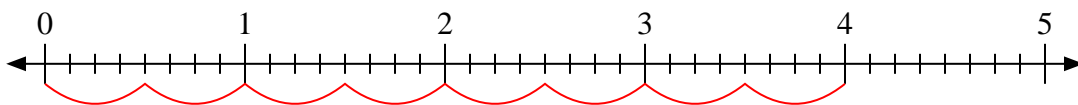
7) $5 \div \frac{3}{7}$



8) $5 \div \frac{1}{2}$



9) $4 \div \frac{4}{8}$



Answers

1. 6

2. $2 \frac{2}{4}$

3. 15

4. $4 \frac{4}{5}$

5. $3 \frac{6}{7}$

6. 6

7. $11 \frac{2}{3}$

8. 10

9. 8