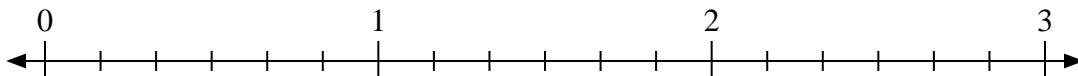


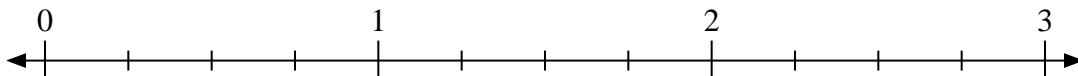


Use the numberline to solve.

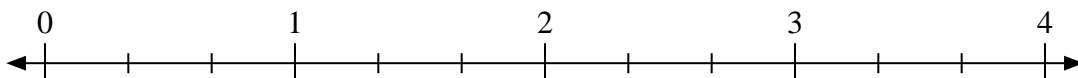
1)  $3 \div \frac{4}{6}$



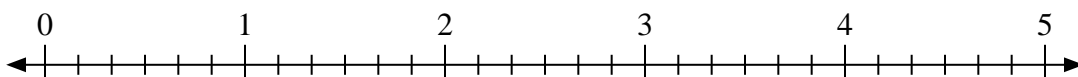
2)  $3 \div \frac{3}{4}$



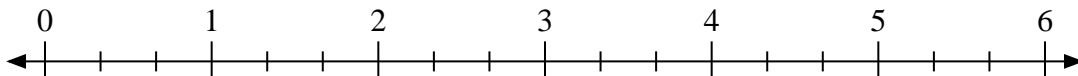
3)  $3 \div \frac{1}{3}$



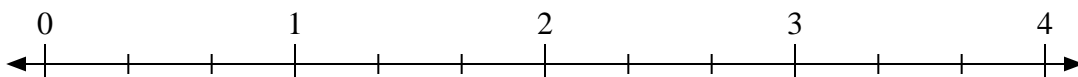
4)  $2 \div \frac{5}{6}$



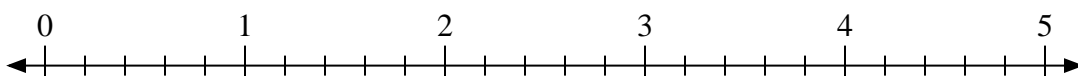
5)  $3 \div \frac{2}{3}$



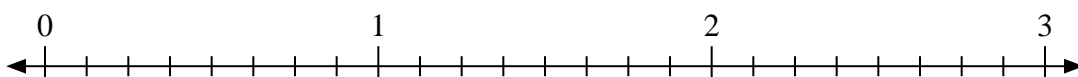
6)  $4 \div \frac{1}{3}$



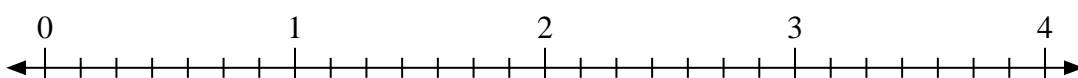
7)  $5 \div \frac{4}{5}$



8)  $3 \div \frac{6}{8}$



9)  $4 \div \frac{2}{7}$



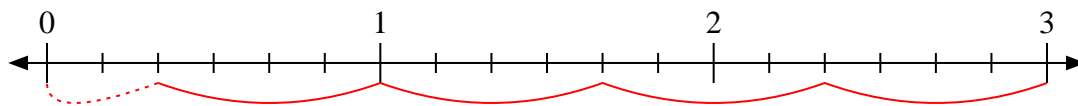
Answers

1. \_\_\_\_\_
2. \_\_\_\_\_
3. \_\_\_\_\_
4. \_\_\_\_\_
5. \_\_\_\_\_
6. \_\_\_\_\_
7. \_\_\_\_\_
8. \_\_\_\_\_
9. \_\_\_\_\_

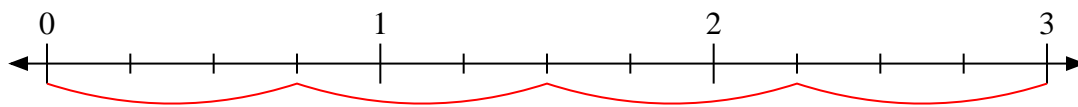


Use the numberline to solve.

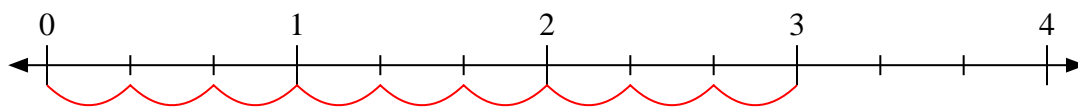
1)  $3 \div \frac{4}{6}$



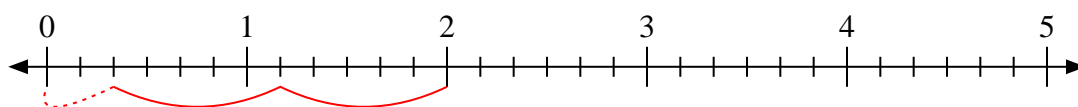
2)  $3 \div \frac{3}{4}$



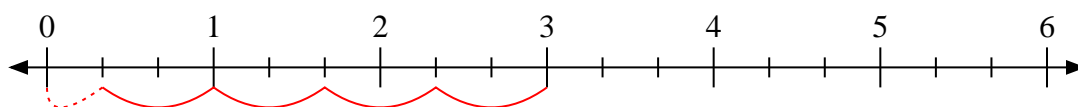
3)  $3 \div \frac{1}{3}$



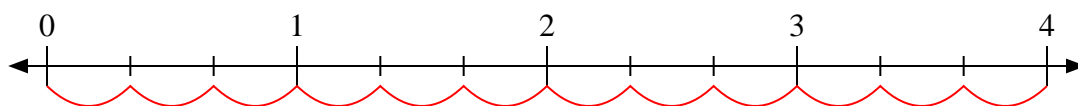
4)  $2 \div \frac{5}{6}$



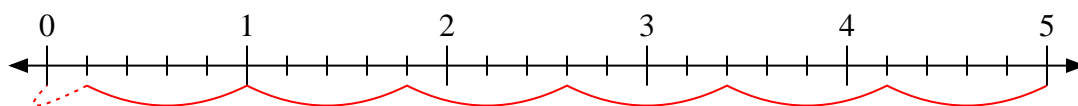
5)  $3 \div \frac{2}{3}$



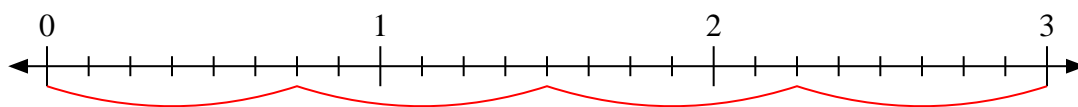
6)  $4 \div \frac{1}{3}$



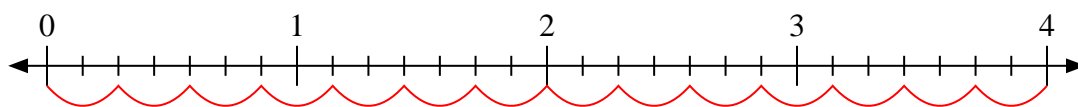
7)  $5 \div \frac{4}{5}$



8)  $3 \div \frac{6}{8}$



9)  $4 \div \frac{2}{7}$



Answers

1. 4  $\frac{2}{4}$

2. 4

3. 9

4. 2  $\frac{2}{5}$

5. 4  $\frac{1}{2}$

6. 12

7. 6  $\frac{1}{4}$

8. 4

9. 14