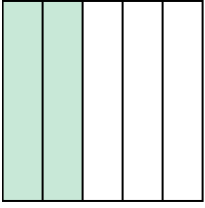




Write the shaded amount as a fraction.

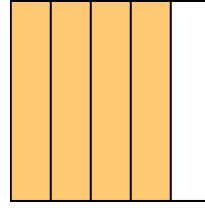
Ex)



1)



2)



Answers

Ex. $\frac{2}{5}$

1. _____

2. _____

3. _____

4. _____

5. _____

6. _____

7. _____

8. _____

9. _____

10. _____

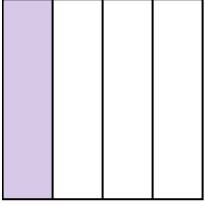
11. _____

12. _____

13. _____

14. _____

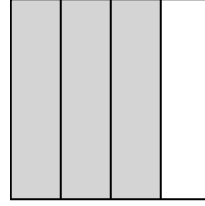
3)



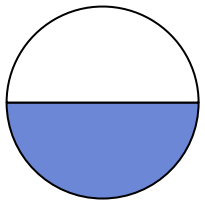
4)



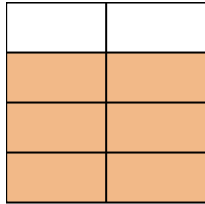
5)



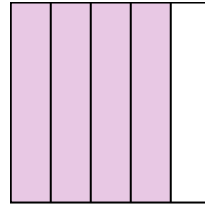
6)



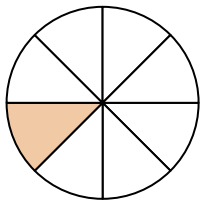
7)



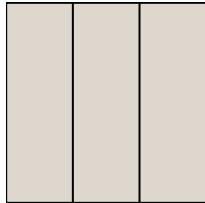
8)




9)




10)



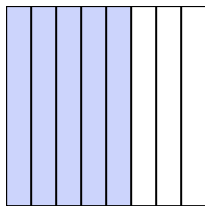
11)




12)



13)

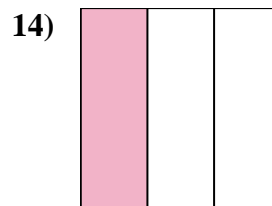
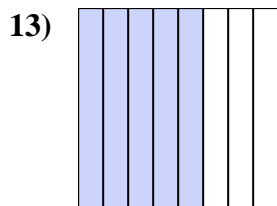
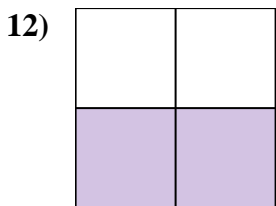
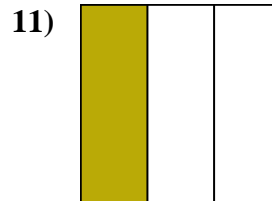
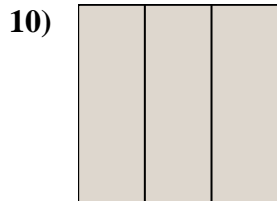
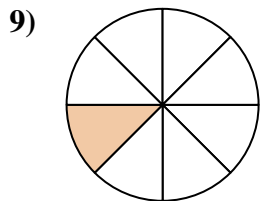
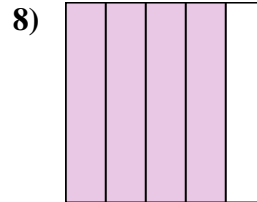
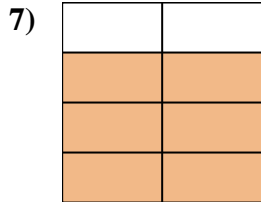
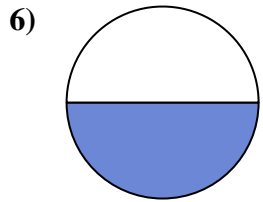
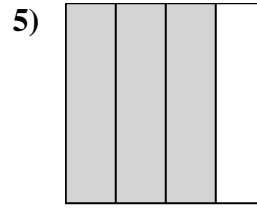
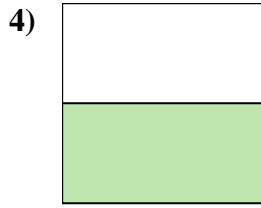
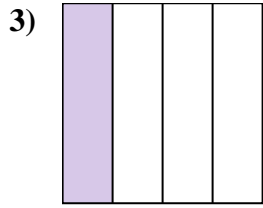
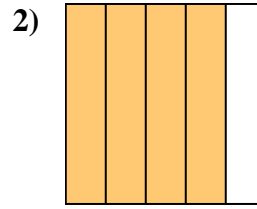
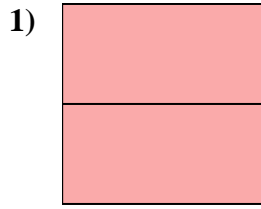
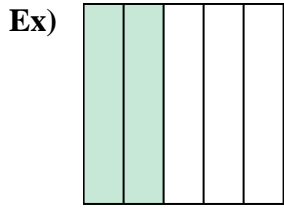


14)





Write the shaded amount as a fraction.



Answers

Ex. 2/5

1. 2/2

2. 4/5

3. 1/4

4. 1/2

5. 3/4

6. 1/2

7. 6/8

8. 4/5

9. 1/8

10. 3/3

11. 1/3

12. 2/4

13. 5/8

14. 1/3