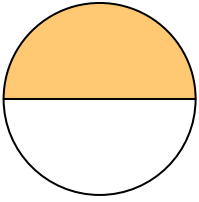





Write the shaded amount as a fraction.

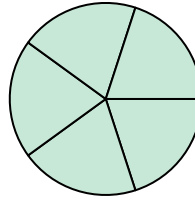
Ex)



1)



2)



Answers

Ex. $\frac{1}{2}$

1. _____

2. _____

3. _____

4. _____

5. _____

6. _____

7. _____

8. _____

9. _____

10. _____

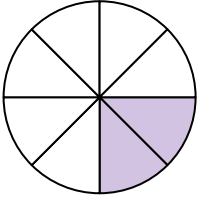
11. _____

12. _____


13. _____

14. _____


3)



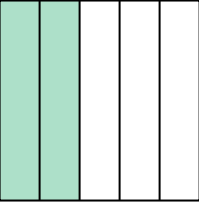
4)




5)



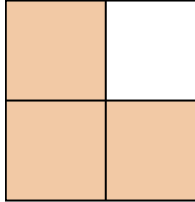
6)




7)




8)



9)



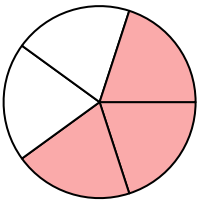
10)




11)



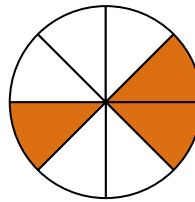
12)



13)



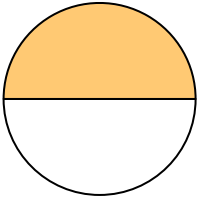
14)






Write the shaded amount as a fraction.

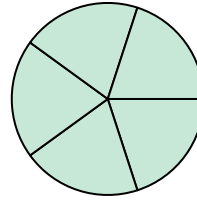
Ex)



1)



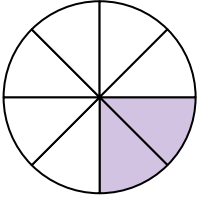
2)




Answers

Ex. 1/2


3)



4)



5)



1. 3/3

2. 5/5

3. 2/8

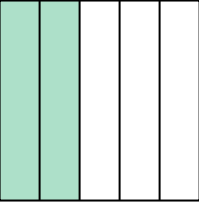
4. 3/3

5. 1/8


6. 2/5

7. 4/4


6)



7)



8)




8. 3/4

9. 2/2


10. 4/4

11. 3/3


9)



10)



11)

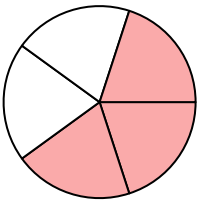


12. 3/5


13. 1/2

14. 3/8

12)



13)



14)

