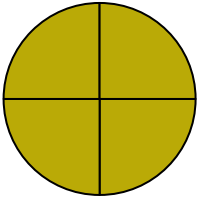


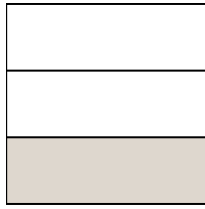


Write the shaded amount as a fraction.

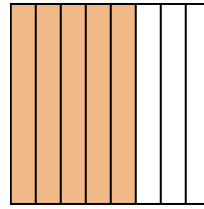
Ex)



1)



2)

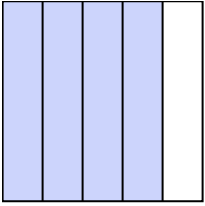


Answers

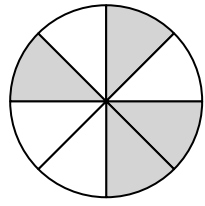
Ex. $\frac{4}{4}$

- 1. _____
- 2. _____
- 3. _____
- 4. _____
- 5. _____
- 6. _____
- 7. _____
- 8. _____
- 9. _____
- 10. _____
- 11. _____
- 12. _____
- 13. _____
- 14. _____

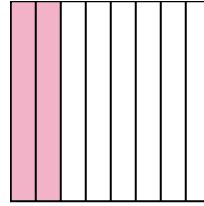
3)




4)



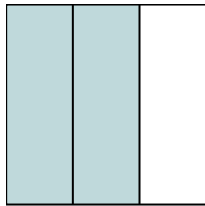
5)



6)



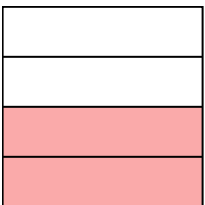
7)




8)



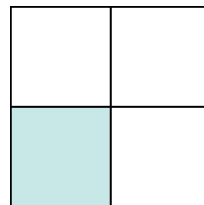
9)




10)



11)




12)



13)



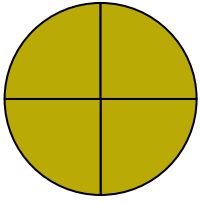
14)



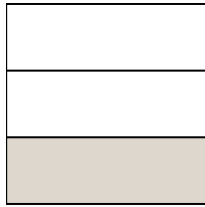


Write the shaded amount as a fraction.

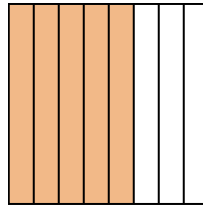
Ex)



1)



2)



Answers

Ex. 4/4

1. 1/3

2. 5/8

3. 4/5

4. 4/8

5. 2/8

6. 1/2

7. 2/3

8. 5/5

9. 2/4

10. 1/2

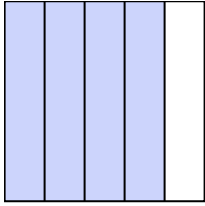
11. 1/4

12. 2/2

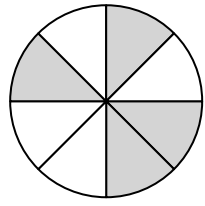
13. 1/5

14. 1/3

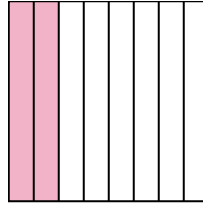
3)




4)



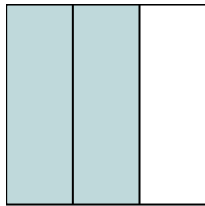
5)




6)




7)




8)



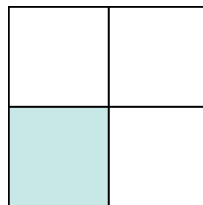
9)




10)



11)



12)



13)



14)

