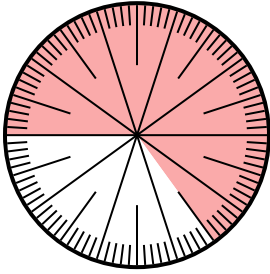


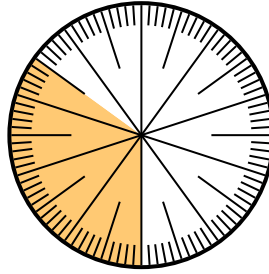


Solve each problem.

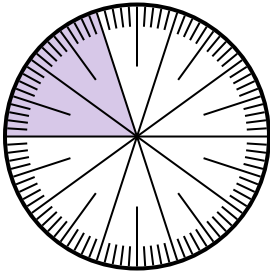
- 1) Express the shaded portion as a fraction of the whole with a 100 as the denominator.



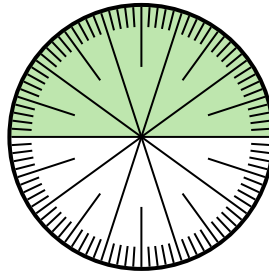
- 2) Express the un-shaded portion as a decimal of the whole.




- 3) Express the un-shaded portion as a fraction of the whole with a 10 as the denominator.



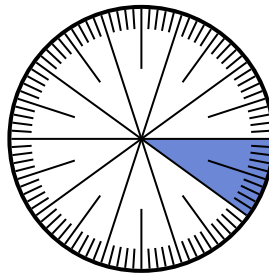
- 4) Express the shaded portion as a fraction of the whole with a 100 as the denominator.



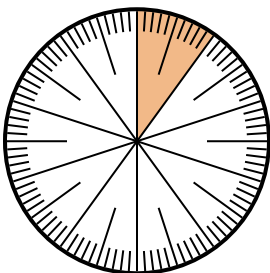
- 5) Express the un-shaded portion as a decimal of the whole.



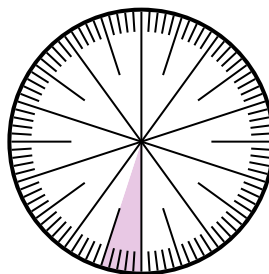
- 6) Express the un-shaded portion as a decimal of the whole.



- 7) Express the shaded portion as a fraction of the whole with a 100 as the denominator.



- 8) Express the shaded portion as a fraction of the whole with a 100 as the denominator.



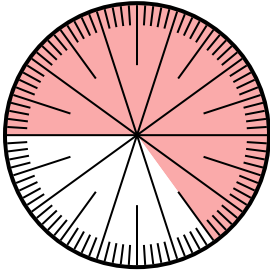
Answers

1. _____
2. _____
3. _____
4. _____
5. _____
6. _____
7. _____
8. _____

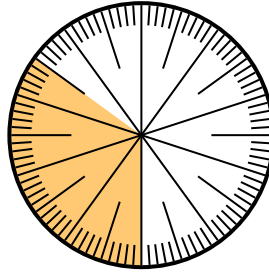


Solve each problem.

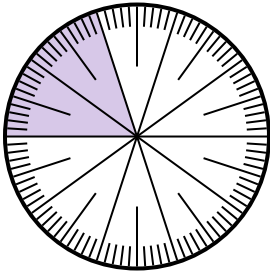
- 1) Express the shaded portion as a fraction of the whole with a 100 as the denominator.



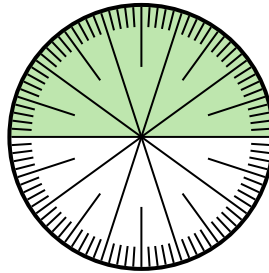
- 2) Express the un-shaded portion as a decimal of the whole.




- 3) Express the un-shaded portion as a fraction of the whole with a 10 as the denominator.



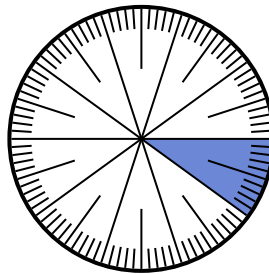
- 4) Express the shaded portion as a fraction of the whole with a 100 as the denominator.



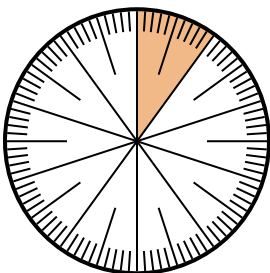
- 5) Express the un-shaded portion as a decimal of the whole.



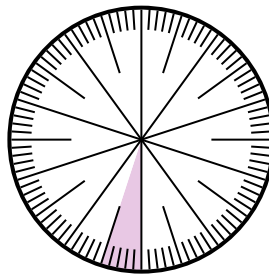
- 6) Express the un-shaded portion as a decimal of the whole.



- 7) Express the shaded portion as a fraction of the whole with a 100 as the denominator.



- 8) Express the shaded portion as a fraction of the whole with a 100 as the denominator.



Answers

1. $\frac{65}{100}$

2. **0.65**

3. $\frac{8}{10}$

4. $\frac{50}{100}$

5. **0.1**

6. **0.9**

7. $\frac{10}{100}$

8. $\frac{5}{100}$