


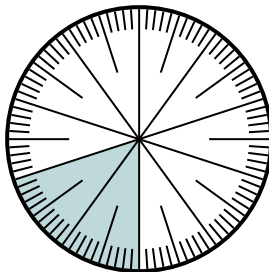


Solve each problem.

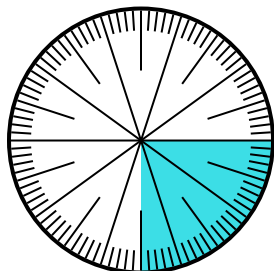
1) Express the un-shaded portion as a fraction of the whole with a 100 as the denominator.



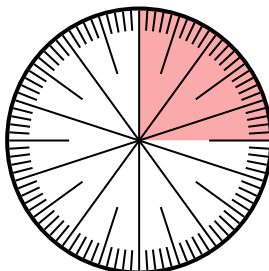
2) Express the shaded portion as a decimal of the whole.



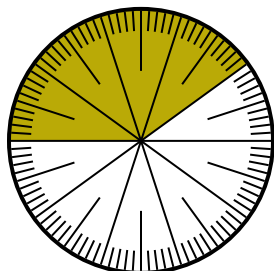
3) Express the shaded portion as a decimal of the whole.



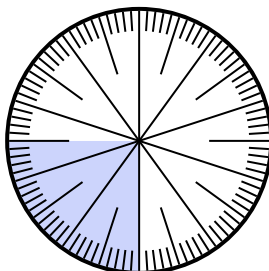
4) Express the un-shaded portion as a decimal of the whole.



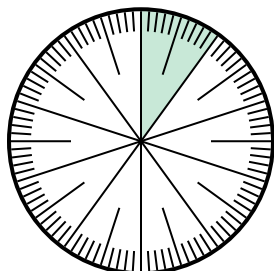
5) Express the un-shaded portion as a fraction of the whole with a 100 as the denominator.



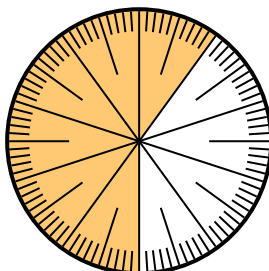
6) Express the un-shaded portion as a decimal of the whole.



7) Express the un-shaded portion as a decimal of the whole.



8) Express the shaded portion as a decimal of the whole.




Answers

1. _____
2. _____
3. _____
4. _____
5. _____
6. _____
7. _____
8. _____

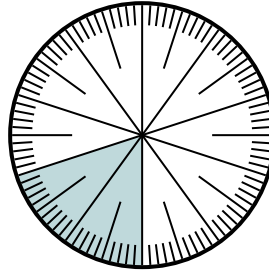


Solve each problem.

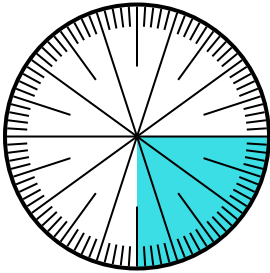
- 1) Express the un-shaded portion as a fraction of the whole with a 100 as the denominator.



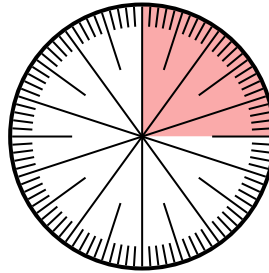
- 2) Express the shaded portion as a decimal of the whole.



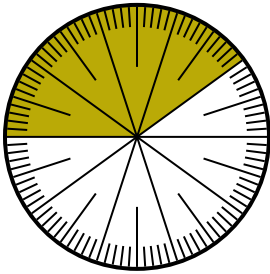
- 3) Express the shaded portion as a decimal of the whole.



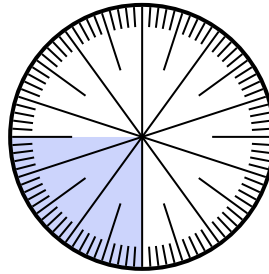
- 4) Express the un-shaded portion as a decimal of the whole.



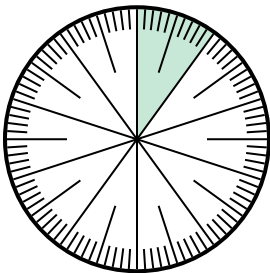
- 5) Express the un-shaded portion as a fraction of the whole with a 100 as the denominator.



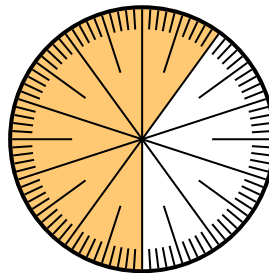
- 6) Express the un-shaded portion as a decimal of the whole.



- 7) Express the un-shaded portion as a decimal of the whole.



- 8) Express the shaded portion as a decimal of the whole.



Answers

1. 15/100
2. 0.2
3. 0.25
4. 0.75
5. 60/100
6. 0.75
7. 0.9
8. 0.6