


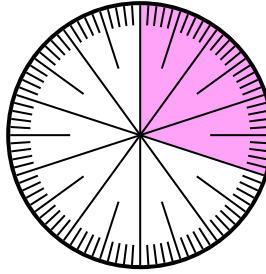


Solve each problem.

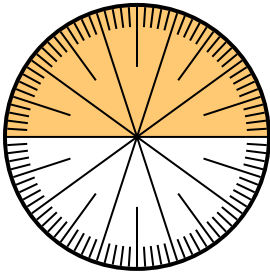
- 1) Express the shaded portion as a decimal of the whole.



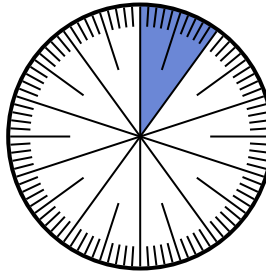
- 2) Express the shaded portion as a fraction of the whole with a 100 as the denominator.



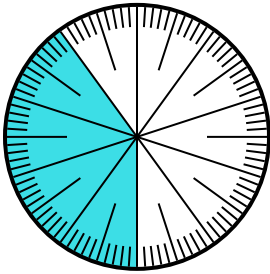
- 3) Express the shaded portion as a fraction of the whole with a 100 as the denominator.



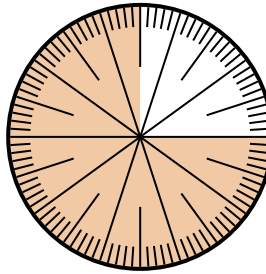
- 4) Express the un-shaded portion as a decimal of the whole.



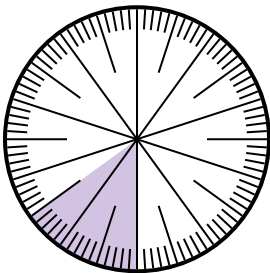
- 5) Express the shaded portion as a decimal of the whole.



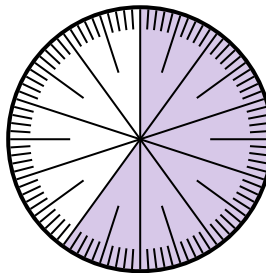
- 6) Express the un-shaded portion as a decimal of the whole.



- 7) Express the un-shaded portion as a decimal of the whole.



- 8) Express the un-shaded portion as a fraction of the whole with a 100 as the denominator.




Answers

1. _____
2. _____
3. _____
4. _____
5. _____
6. _____
7. _____
8. _____

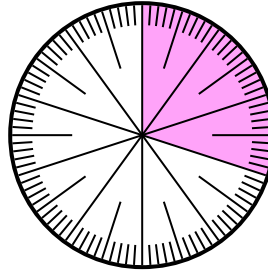


Solve each problem.

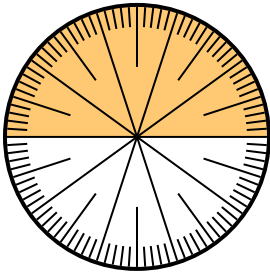
- 1) Express the shaded portion as a decimal of the whole.



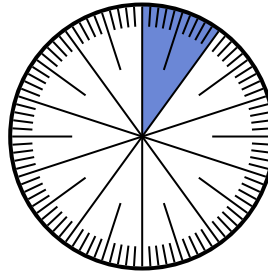
- 2) Express the shaded portion as a fraction of the whole with a 100 as the denominator.



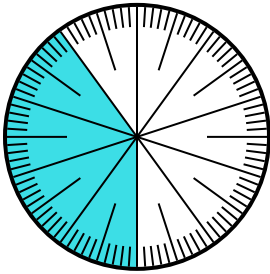
- 3) Express the shaded portion as a fraction of the whole with a 100 as the denominator.



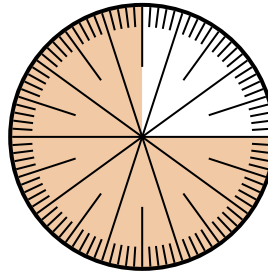
- 4) Express the un-shaded portion as a decimal of the whole.



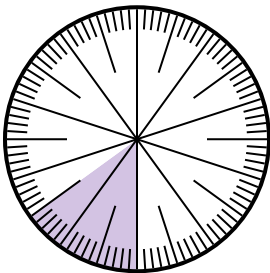
- 5) Express the shaded portion as a decimal of the whole.



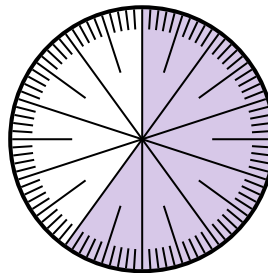
- 6) Express the un-shaded portion as a decimal of the whole.



- 7) Express the un-shaded portion as a decimal of the whole.



- 8) Express the un-shaded portion as a fraction of the whole with a 100 as the denominator.

Answers1. 0.82. $\frac{30}{100}$ 3. $\frac{25}{100}$ 4. 0.95. 0.46. 0.257. 0.858. $\frac{40}{100}$