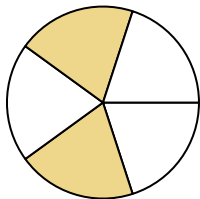


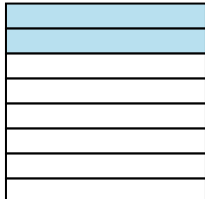


Write the shaded amount in word form.

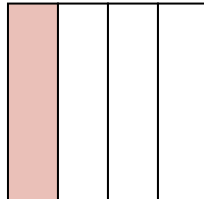
Ex)



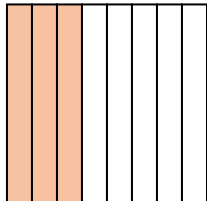
1)



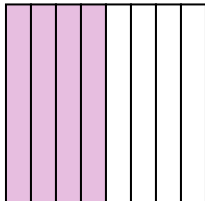
2)



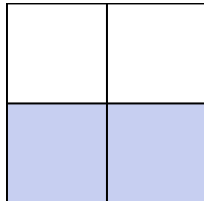
3)



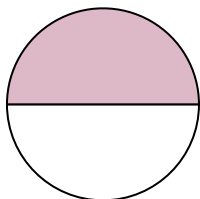
4)




5)



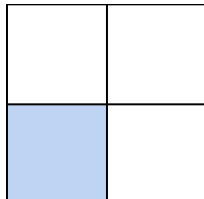
6)



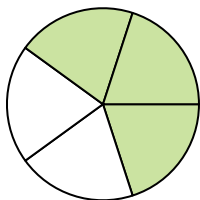
7)



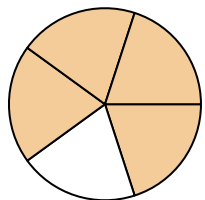
8)



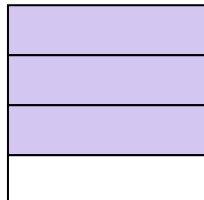
9)



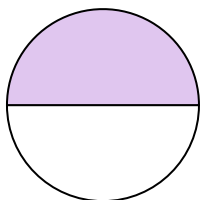
10)




11)



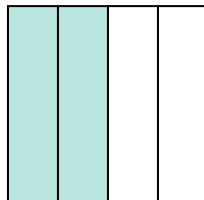
12)



13)



14)

**Answers**Ex. **two-fifths**

1. _____

2. _____

3. _____

4. _____

5. _____

6. _____

7. _____

8. _____

9. _____

10. _____

11. _____

12. _____

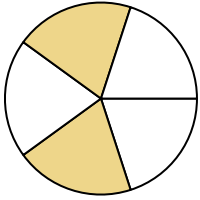
13. _____

14. _____

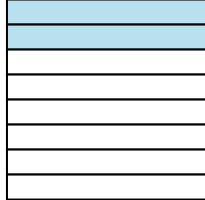


Write the shaded amount in word form.

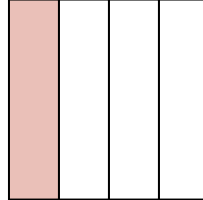
Ex)



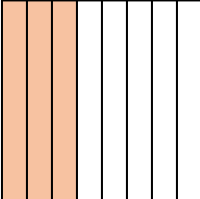
1)



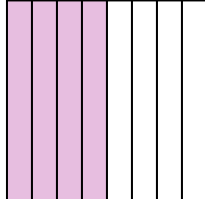
2)



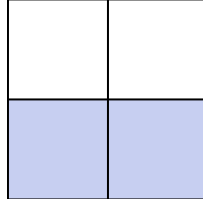
3)



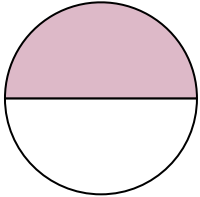
4)




5)



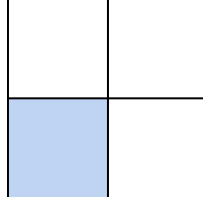
6)



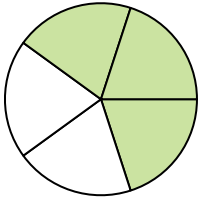
7)



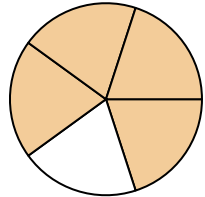
8)



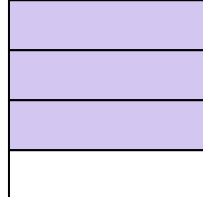
9)



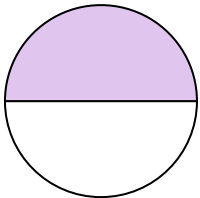
10)




11)



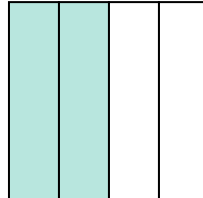
12)



13)



14)

**Answers**Ex. **two-fifths**1. **two-eighths**2. **one-fourth**3. **three-eighths**4. **four-eighths**5. **two-thirds**6. **one-half**7. **one-third**8. **one-third**9. **three-fifths**10. **four-fifths**11. **three-fourths**12. **one-half**13. **one-half**14. **two-fourths**