

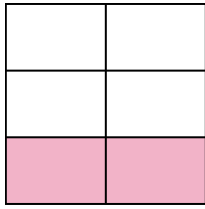


Write the shaded amount in word form.


Ex)



1)



2)



Answers

Ex. **one-half**

1. _____

2. _____

3. _____

4. _____

5. _____

6. _____

7. _____

8. _____

9. _____

10. _____

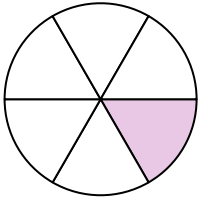
11. _____

12. _____

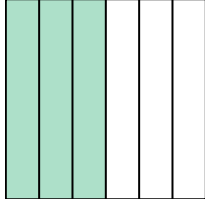
13. _____

14. _____

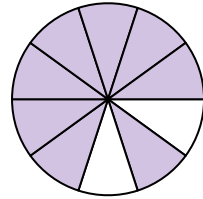
3)



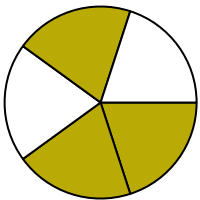
4)




5)



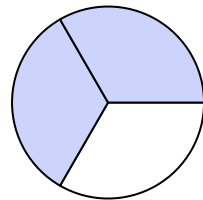
6)



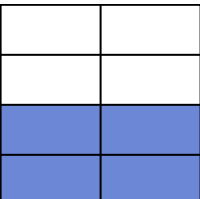
7)



8)



9)




10)




11)



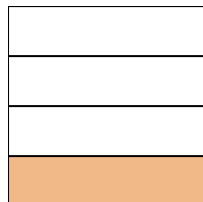
12)



13)

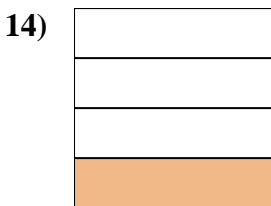
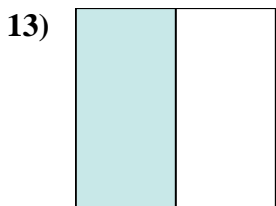
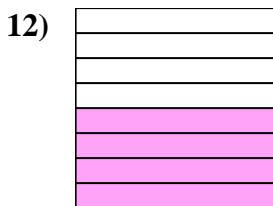
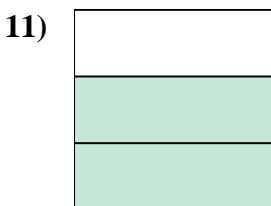

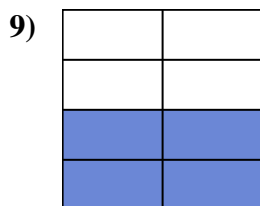
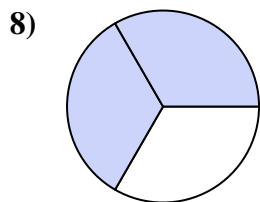
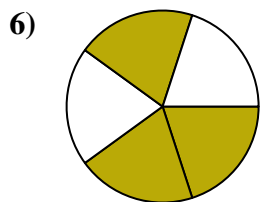
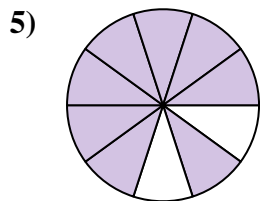
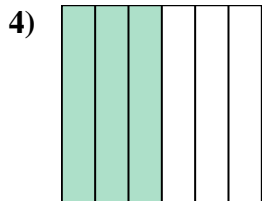
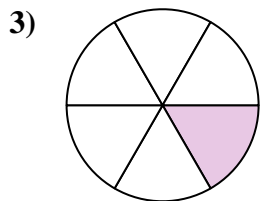

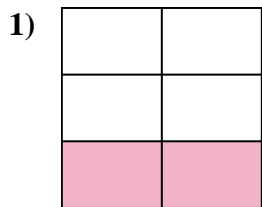



14)





Write the shaded amount in word form.



Answers

Ex. one-half

1. two-fifths

2. two-ninths

3. one-sixth

4. three-sixths

5. eight-tenths

6. three-fifths

7. three-fourths

8. two-thirds

9. four-sevenths

10. one-tenth

11. two-thirds

12. four-eighths

13. one-half

14. one-fourth