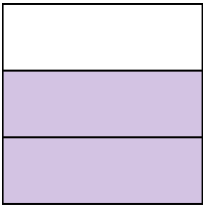





Write the shaded amount in word form.

Ex)



1)



2)



Answers

Ex. two-thirds

1. _____

2. _____

3. _____

4. _____

5. _____

6. _____

7. _____

8. _____

9. _____

10. _____


11. _____

12. _____


13. _____

14. _____

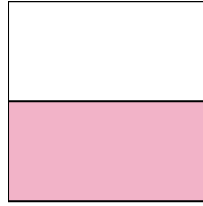
3)



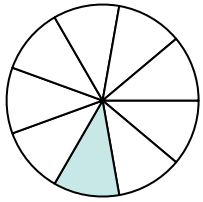
4)



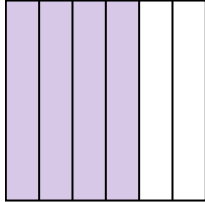
5)




6)



7)



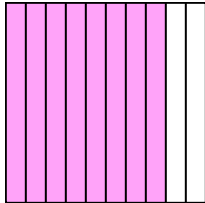
8)



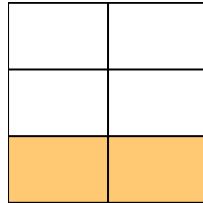
9)



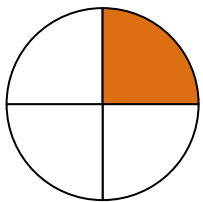
10)



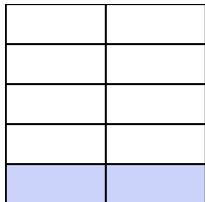
11)




12)



13)

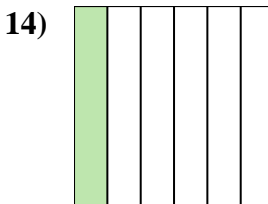
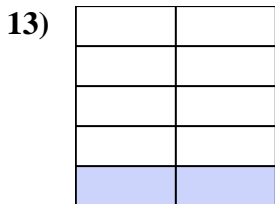
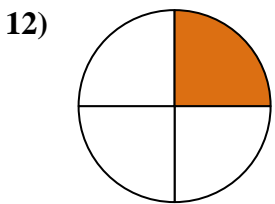
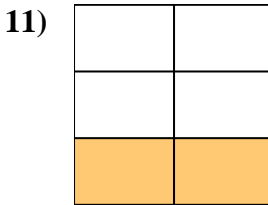
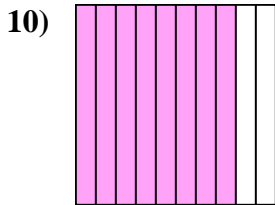
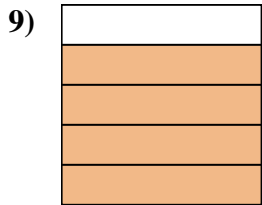
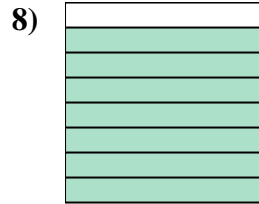
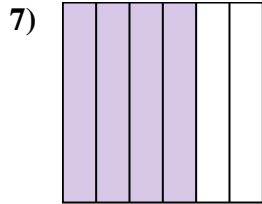
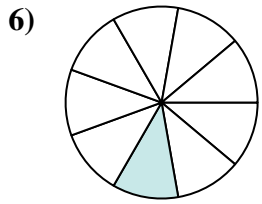
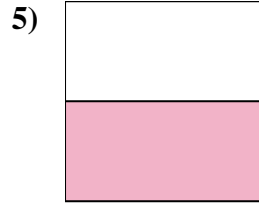
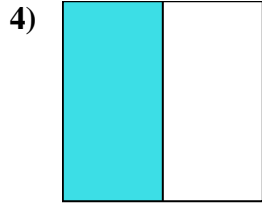
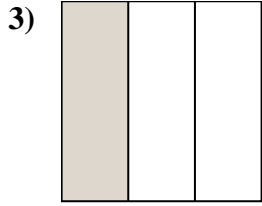
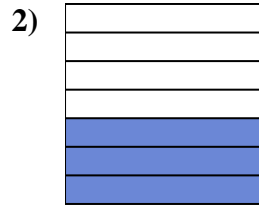
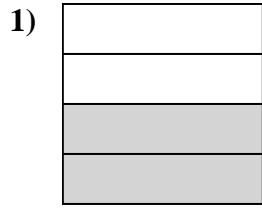
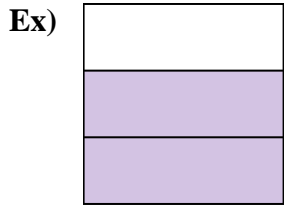


14)





Write the shaded amount in word form.



Answers

Ex. two-thirds

1. two-fourths

2. three-sevenths

3. one-third

4. one-half

5. one-half

6. one-ninth

7. four-sixths

8. seven-eighths

9. four-fifths

10. eight-tenths

11. two-fifths

12. one-fourth

13. two-ninths

14. one-sixth