


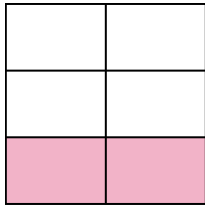


Write the shaded amount in word form.


Ex)



1)



2)



Answers

Ex. **one-half**

1. _____

2. _____

3. _____

4. _____

5. _____

6. _____

7. _____

8. _____

9. _____

10. _____

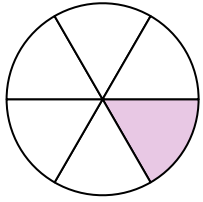
11. _____

12. _____

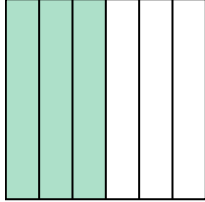
13. _____

14. _____

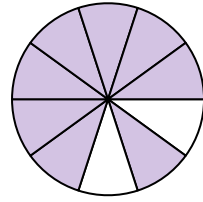
3)



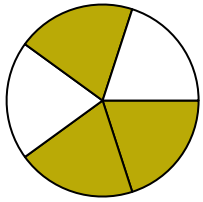
4)




5)



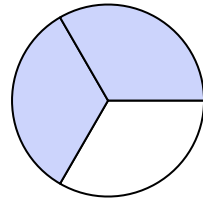
6)



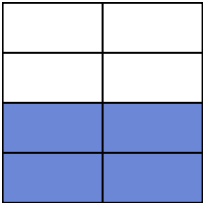
7)




8)




9)




10)




11)



12)



13)

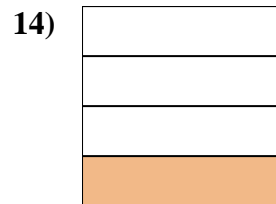
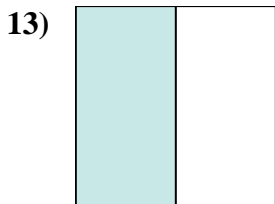
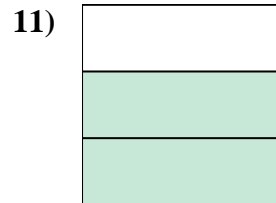
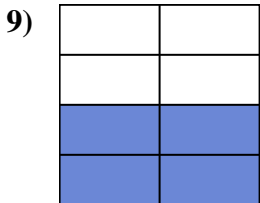
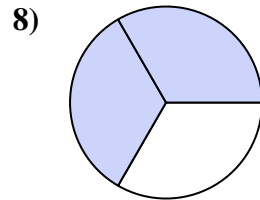
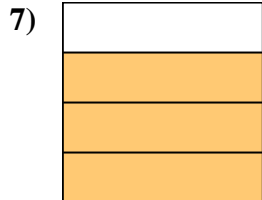
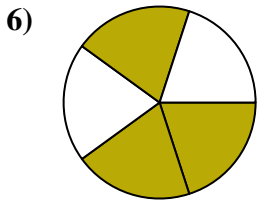
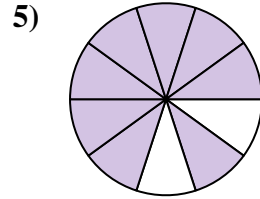
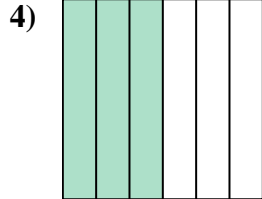
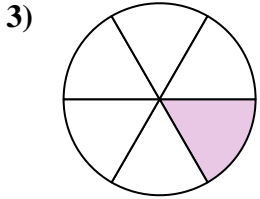

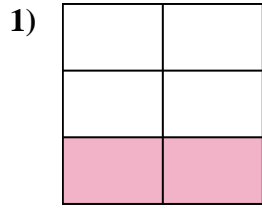
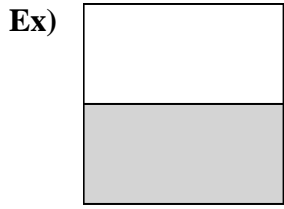


14)





Write the shaded amount in word form.



Answers

Ex. one-half

1. two-fifths

2. two-ninths

3. one-sixth

4. three-sixths

5. eight-tenths

6. three-fifths

7. three-fourths

8. two-thirds

9. four-sevenths

10. one-tenth

11. two-thirds

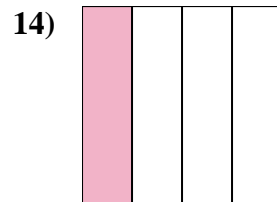
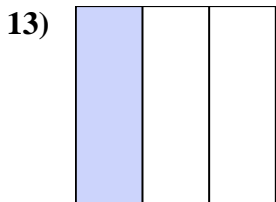
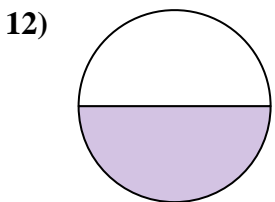
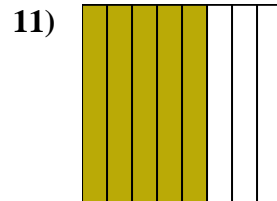
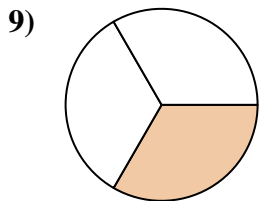
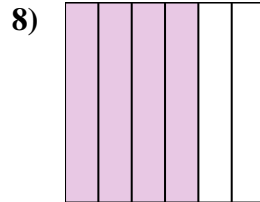
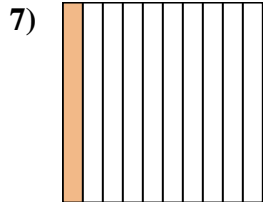
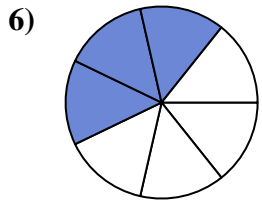
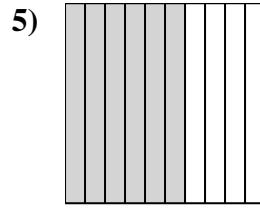
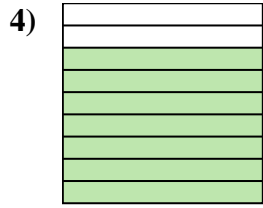
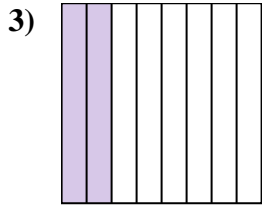
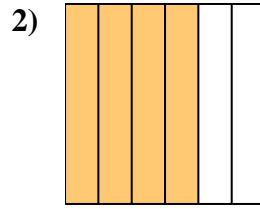
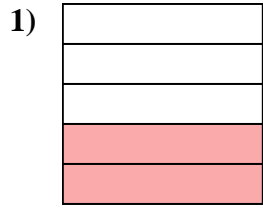
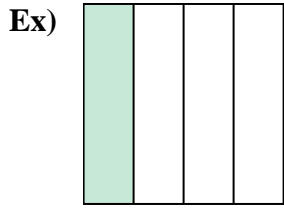
12. four-eighths

13. one-half

14. one-fourth



Write the shaded amount in word form.



Answers

Ex. one-fourth

1. _____

2. _____

3. _____

4. _____

5. _____

6. _____

7. _____

8. _____

9. _____

10. _____

11. _____

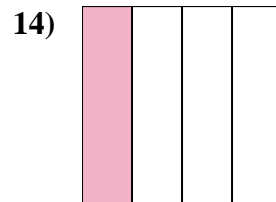
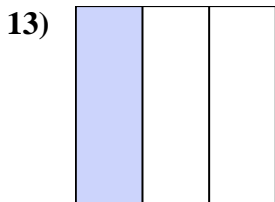
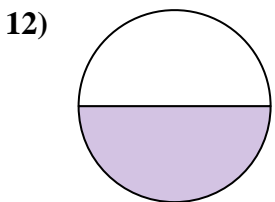
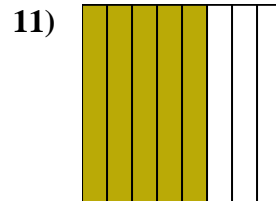
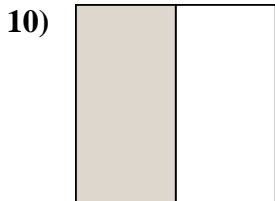
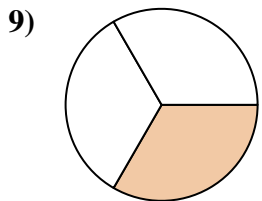
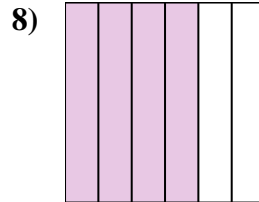
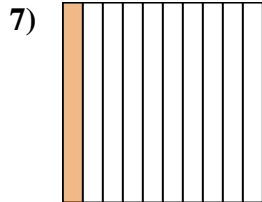
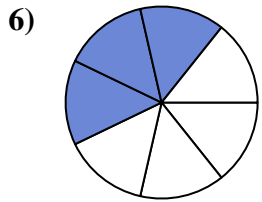
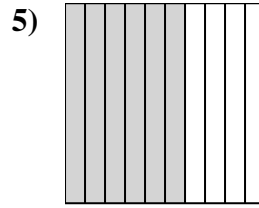
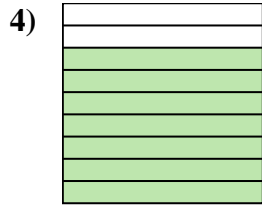
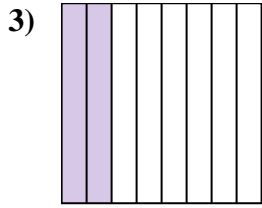
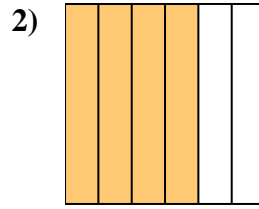
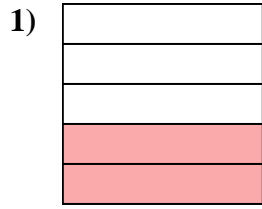
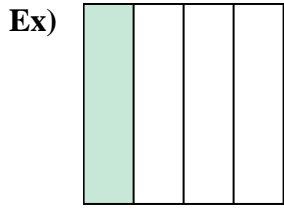
12. _____

13. _____

14. _____



Write the shaded amount in word form.



Answers

Ex. one-fourth

1. two-fifths

2. four-sixths

3. two-eighths

4. seven-ninths

5. six-tenths

6. three-sevenths

7. one-tenth

8. four-sixths

9. one-third

10. one-half

11. five-eighths

12. one-half


13. one-third

14. one-fourth

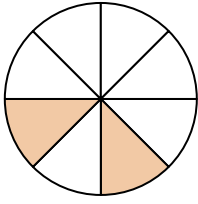


Write the shaded amount in word form.

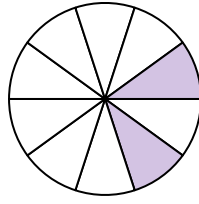
Ex)



1)



2)



Answers

Ex. seven-eighths

1. _____

2. _____

3. _____

4. _____

5. _____

6. _____

7. _____

8. _____

9. _____

10. _____


11. _____

12. _____


13. _____

14. _____

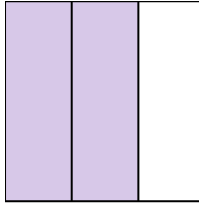
3)



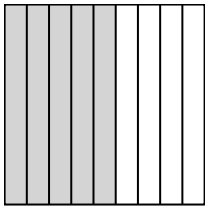
4)



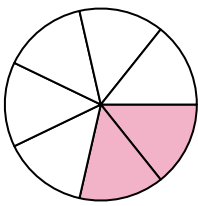
5)




6)




7)




8)




9)




10)




11)



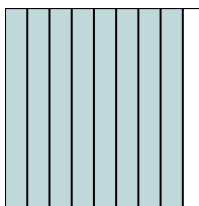
12)



13)

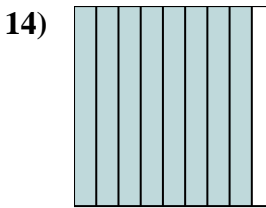
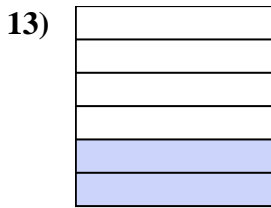
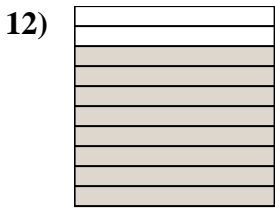
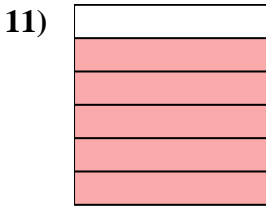
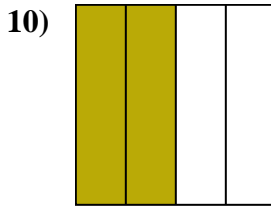
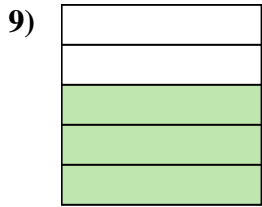
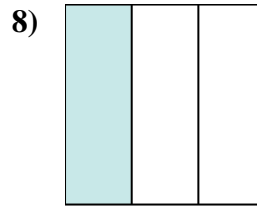
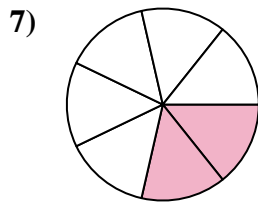
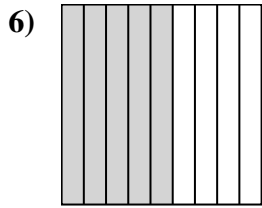
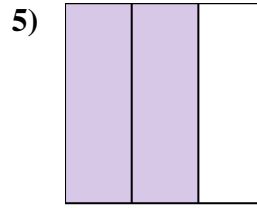
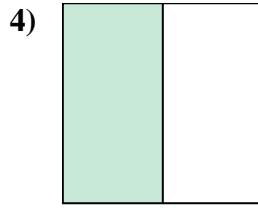
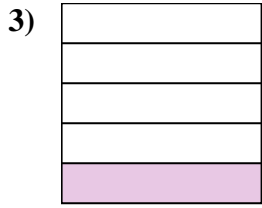
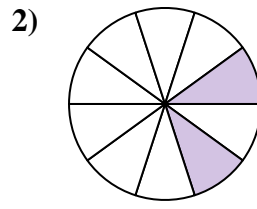
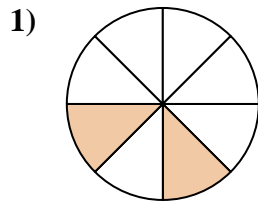
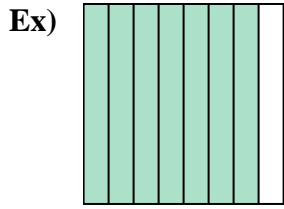


14)





Write the shaded amount in word form.



Answers

Ex. seven-eighths

1. two-eighths

2. two-tenths

3. one-fifth

4. one-half

5. two-thirds

6. five-ninths

7. two-sevenths

8. one-third

9. three-fifths

10. two-fourths

11. five-sixths

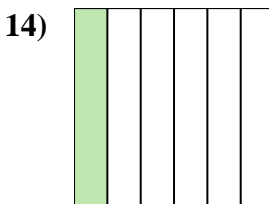
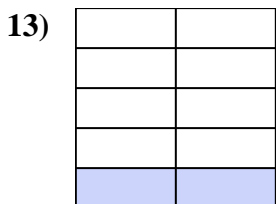
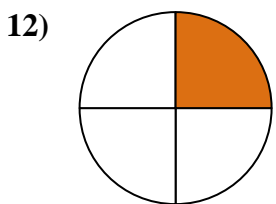
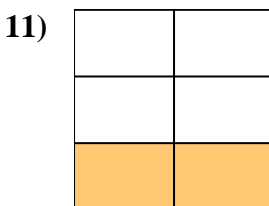
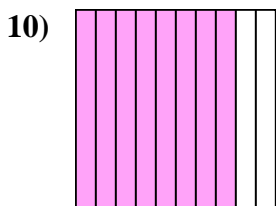
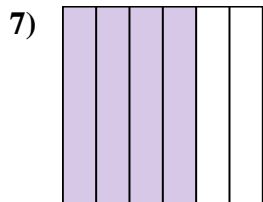
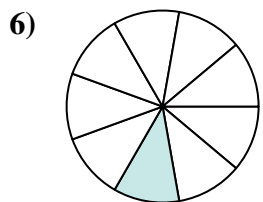
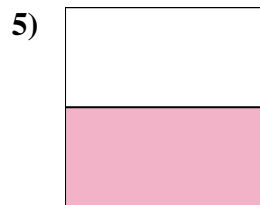
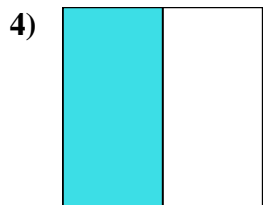
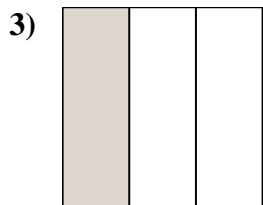

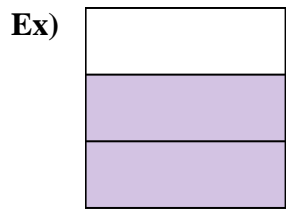
12. eight-tenths

13. two-sixths

14. eight-ninths



Write the shaded amount in word form.



Answers

Ex. two-thirds

1. _____

2. _____

3. _____

4. _____

5. _____

6. _____

7. _____

8. _____

9. _____

10. _____

11. _____


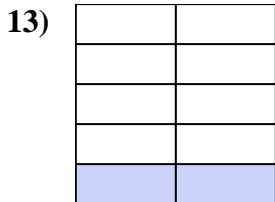
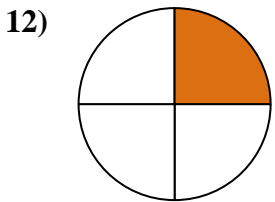
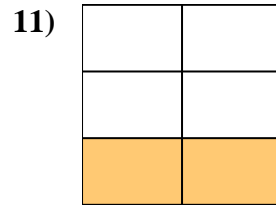
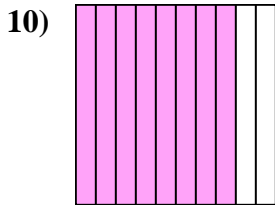
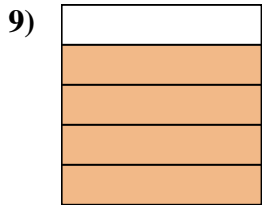
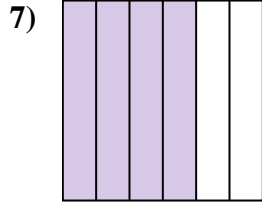
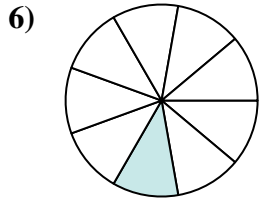
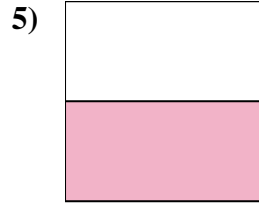
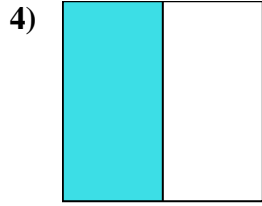
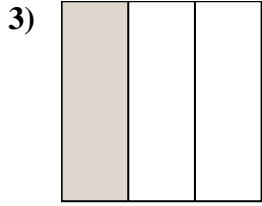
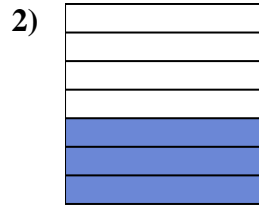
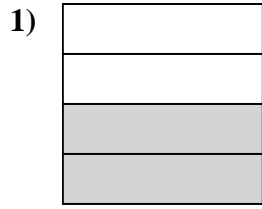
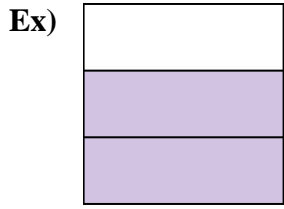
12. _____

13. _____

14. _____



Write the shaded amount in word form.



Answers

Ex. two-thirds

1. two-fourths

2. three-sevenths

3. one-third

4. one-half

5. one-half

6. one-ninth

7. four-sixths

8. seven-eighths

9. four-fifths

10. eight-tenths

11. two-fifths

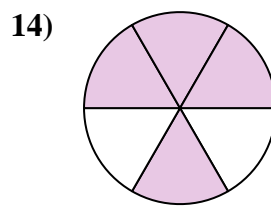
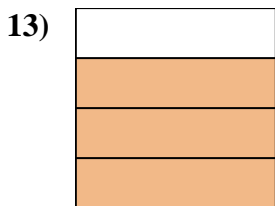
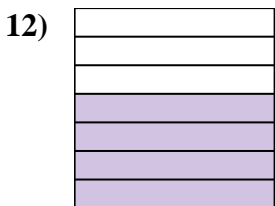
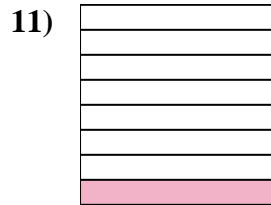
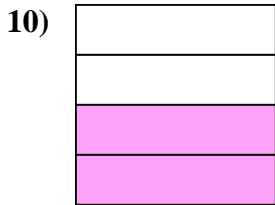
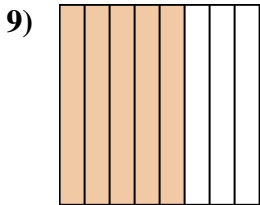
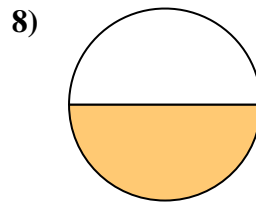
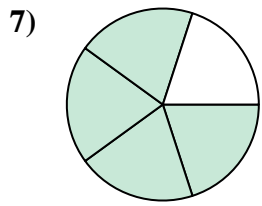
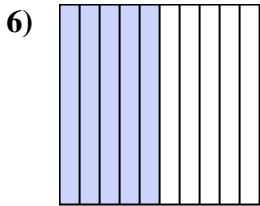
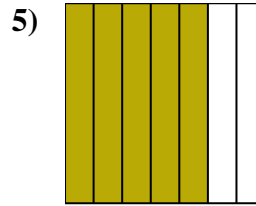
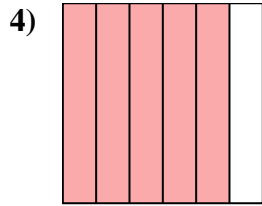
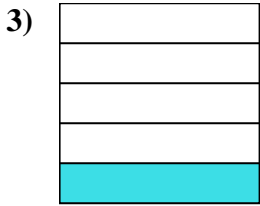
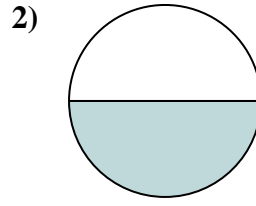
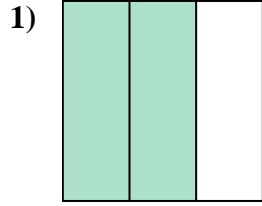
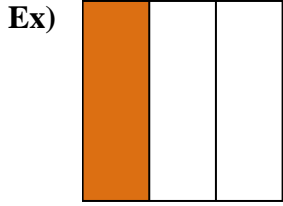
12. one-fourth

13. two-ninths

14. one-sixth



Write the shaded amount in word form.



Answers

Ex. one-third

1. _____

2. _____

3. _____

4. _____

5. _____

6. _____

7. _____

8. _____

9. _____

10. _____

11. _____

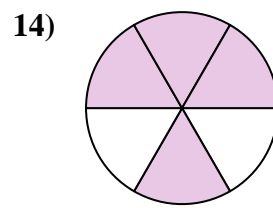
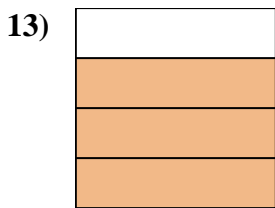
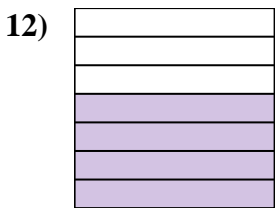

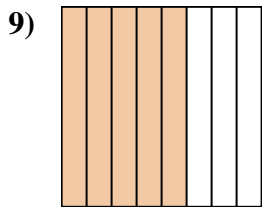
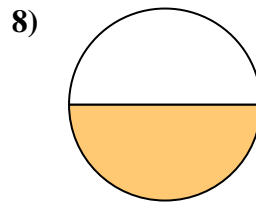
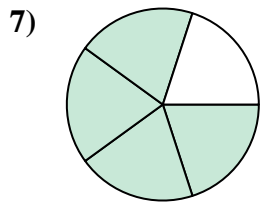
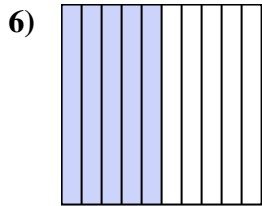
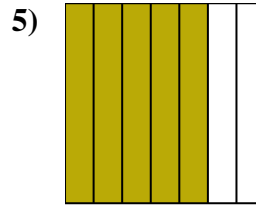
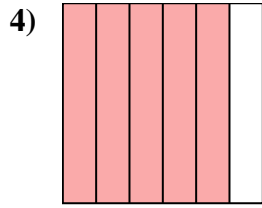
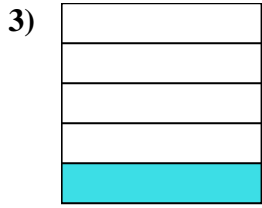
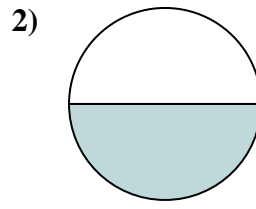
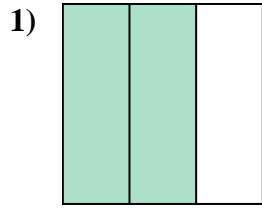
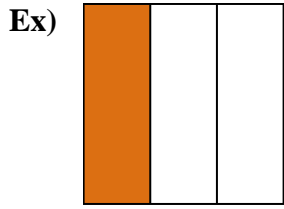
12. _____

13. _____

14. _____



Write the shaded amount in word form.



Answers

Ex. one-third

1. two-thirds

2. one-half

3. one-fifth

4. five-sixths

5. five-sevenths

6. five-tenths

7. four-fifths

8. one-half

9. five-eighths

10. two-fourths

11. one-eighth

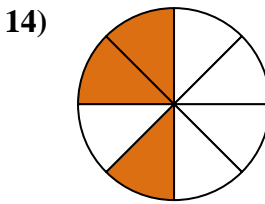
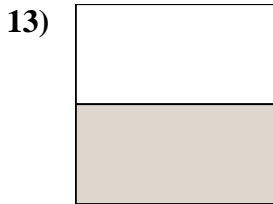
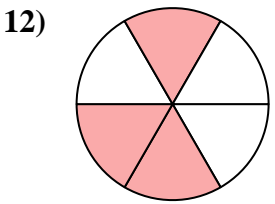
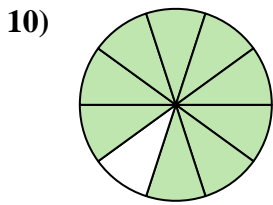
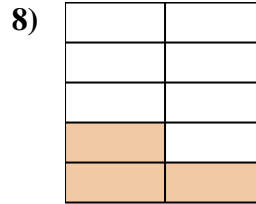
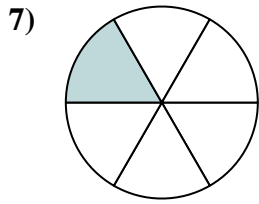
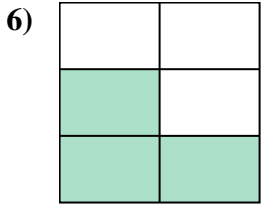
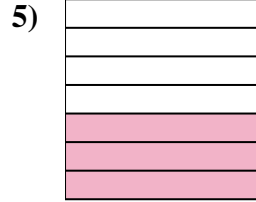
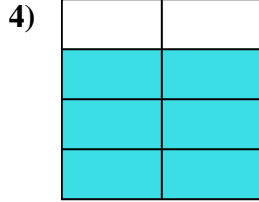
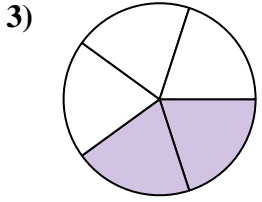
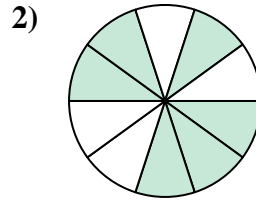
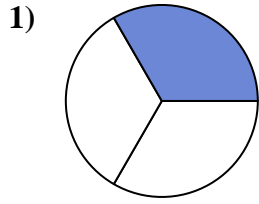
12. four-sevenths

13. three-fourths

14. four-sixths



Write the shaded amount in word form.



Answers

Ex. five-eighths

1. _____

2. _____

3. _____

4. _____

5. _____

6. _____

7. _____

8. _____

9. _____

10. _____

11. _____

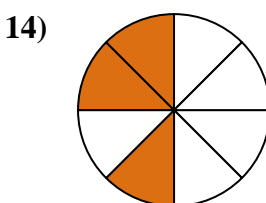
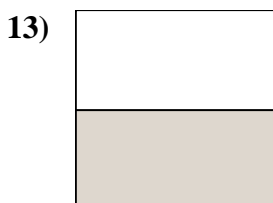
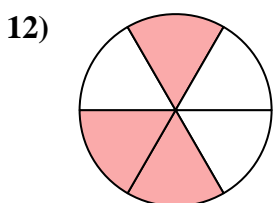
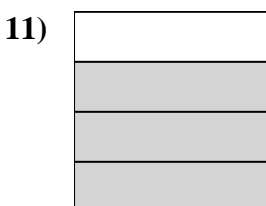
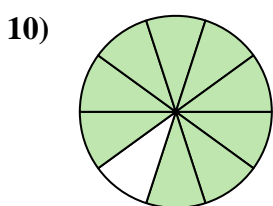
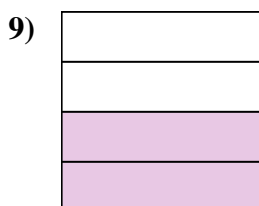
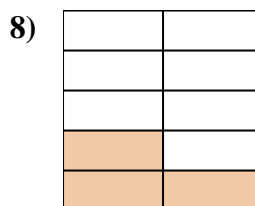
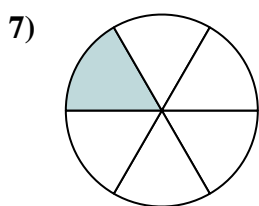
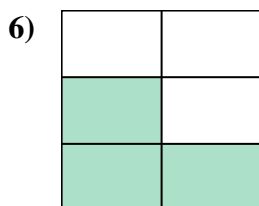
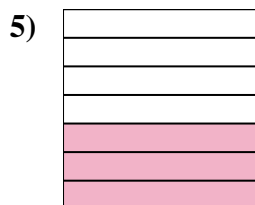
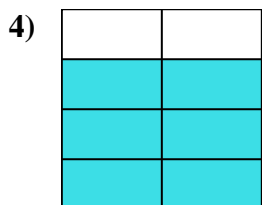
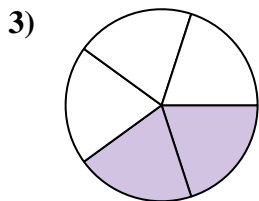
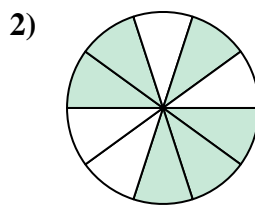
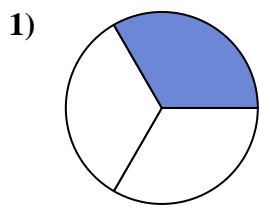
12. _____

13. _____

14. _____



Write the shaded amount in word form.



Answers

Ex. five-eighths

1. one-third

2. six-tenths

3. two-fifths

4. six-sevenths

5. three-sevenths

6. three-fifths

7. one-sixth

8. three-ninths

9. two-fourths

10. nine-tenths

11. three-fourths

12. three-sixths

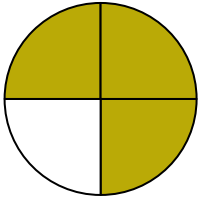
13. one-half

14. three-eighths




Write the shaded amount in word form.

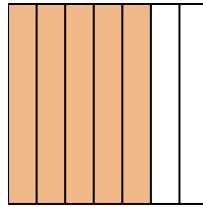
Ex)



1)



2)



Answers

Ex. three-fourths

1. _____

2. _____

3. _____

4. _____

5. _____

6. _____

7. _____

8. _____

9. _____

10. _____


11. _____

12. _____

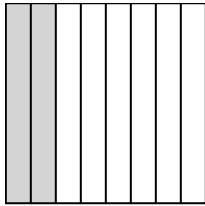
13. _____

14. _____

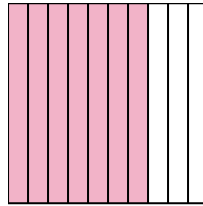
3)



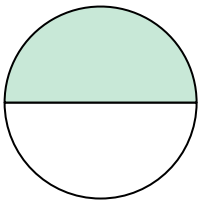
4)



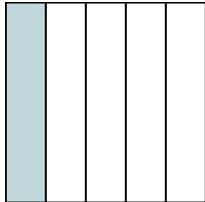
5)



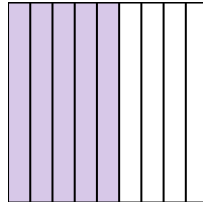
6)




7)




8)



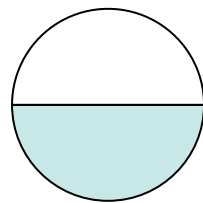
9)



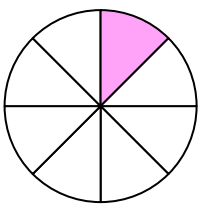
10)




11)



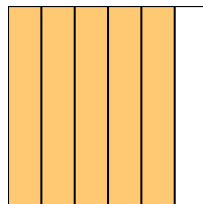
12)



13)



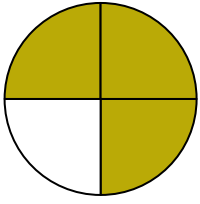
14)






Write the shaded amount in word form.

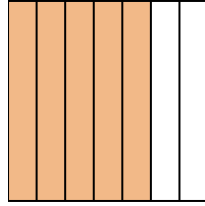
Ex)



1)



2)



Answers

Ex. three-fourths

1. one-fourth

2. five-sevenths

3. four-ninths

4. two-eighths

5. seven-tenths

6. one-half

7. one-fifth

8. five-ninths

9. two-fifths

10. one-third


11. one-half

12. one-eighth

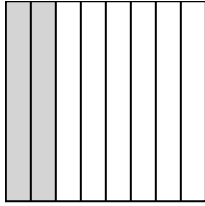
13. two-tenths

14. five-sixths

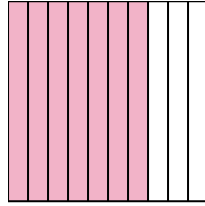
3)



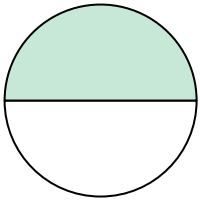
4)



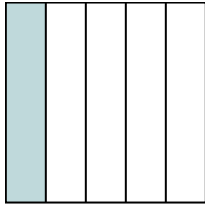
5)



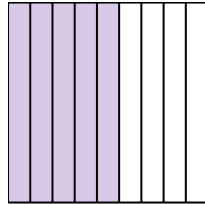
6)




7)



8)



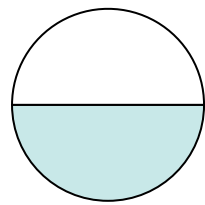
9)



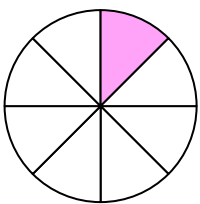
10)




11)



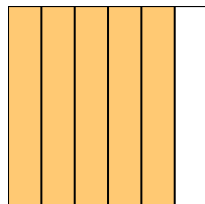
12)



13)



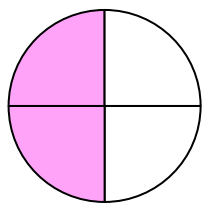
14)



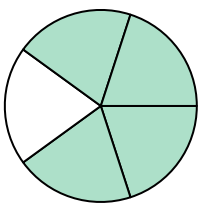


Write the shaded amount in word form.

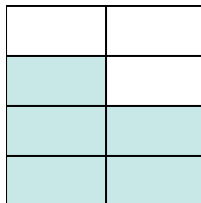
Ex)



1)



2)



Answers

Ex. **two-fourths**

1. _____

2. _____

3. _____

4. _____

5. _____

6. _____

7. _____

8. _____

9. _____

10. _____

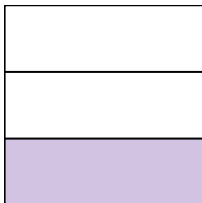
11. _____

12. _____

13. _____

14. _____

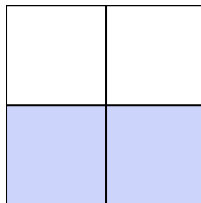
3)



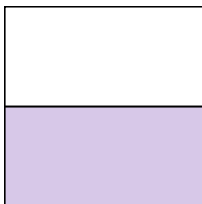
4)



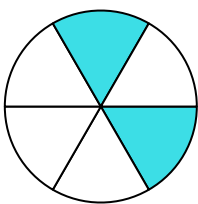
5)



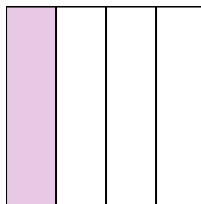
6)




7)



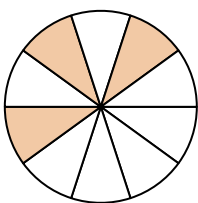
8)



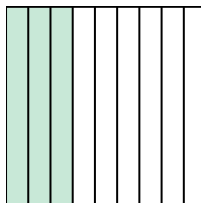
9)



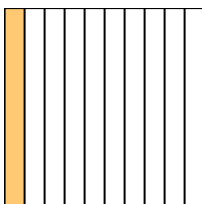
10)



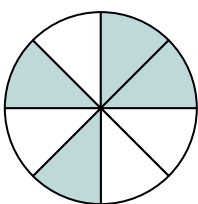
11)




12)



13)



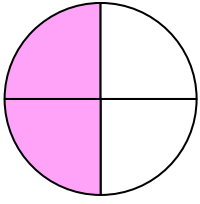
14)



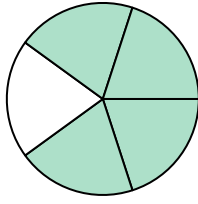


Write the shaded amount in word form.

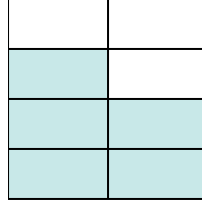
Ex)



1)



2)



Answers

Ex. two-fourths

1. four-fifths

2. five-sevenths

3. one-third

4. three-ninths

5. two-thirds

6. one-half

7. two-sixths

8. one-fourth

9. one-half

10. three-tenths

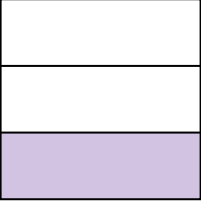
11. three-ninths

12. one-tenth


13. four-eighths

14. five-eighths

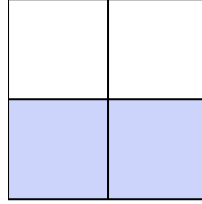
3)




4)



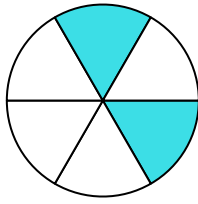
5)



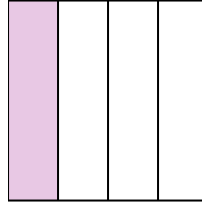
6)




7)



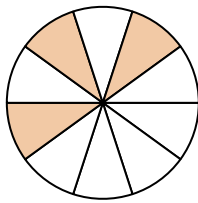
8)



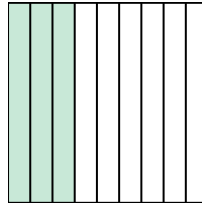
9)



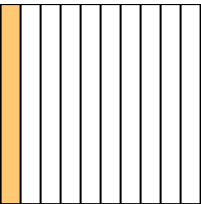
10)



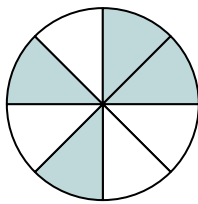
11)




12)



13)

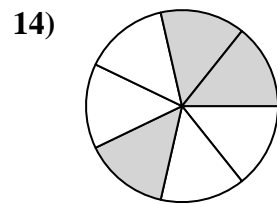
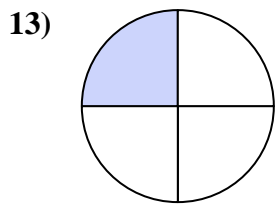
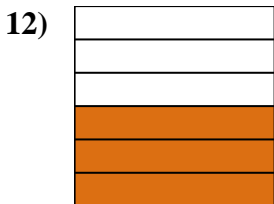
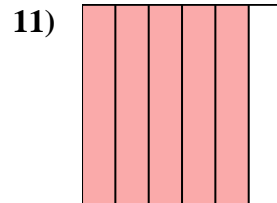

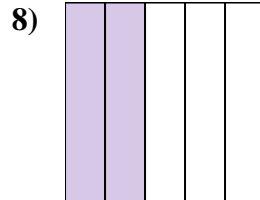

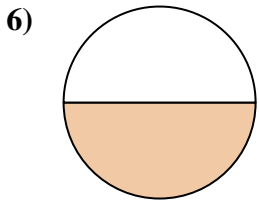
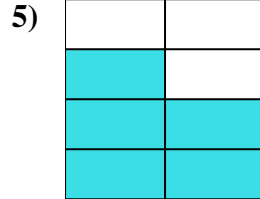
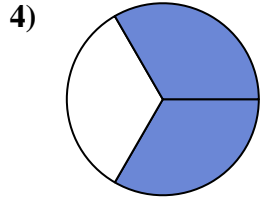
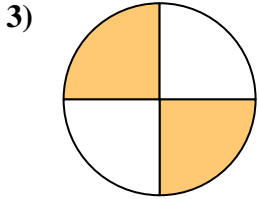
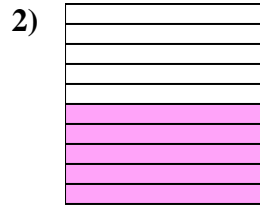
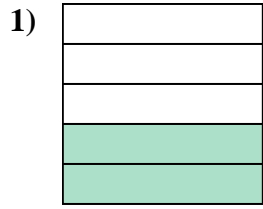
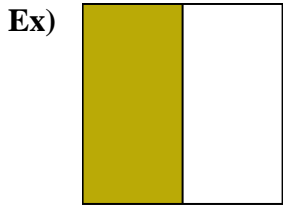


14)





Write the shaded amount in word form.



Answers

Ex. one-half

1. _____

2. _____

3. _____

4. _____

5. _____

6. _____

7. _____

8. _____

9. _____

10. _____

11. _____

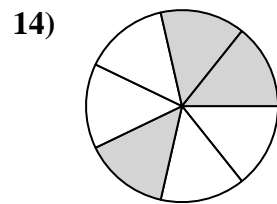
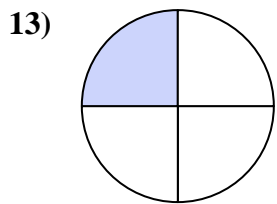
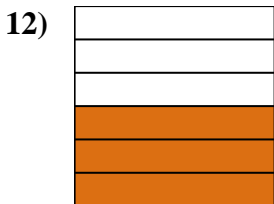
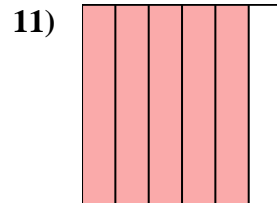
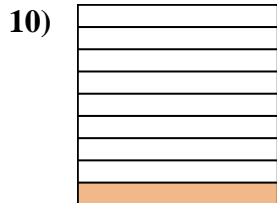

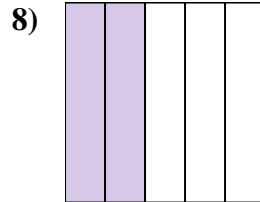
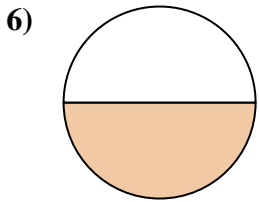
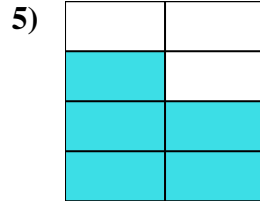
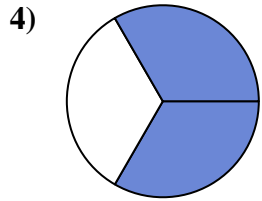
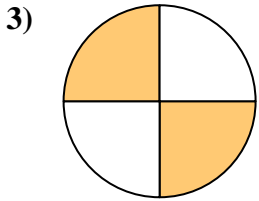
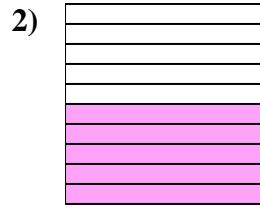
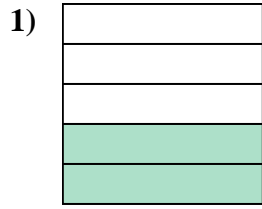
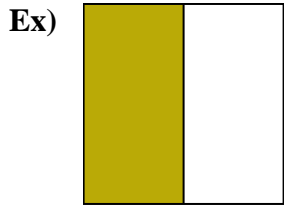
12. _____

13. _____

14. _____



Write the shaded amount in word form.



Answers

Ex. one-half

1. two-fifths

2. five-tenths

3. two-fourths

4. two-thirds

5. five-sevenths

6. one-half

7. four-eighths

8. two-fifths

9. two-thirds

10. one-ninth

11. five-sixths

12. three-sixths

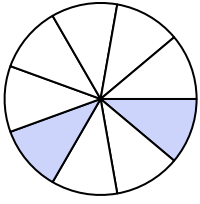
13. one-fourth

14. three-sevenths




Write the shaded amount in word form.


Ex)



1)



2)



Answers

Ex. two-ninths

1. _____

2. _____

3. _____

4. _____

5. _____

6. _____

7. _____

8. _____

9. _____

10. _____

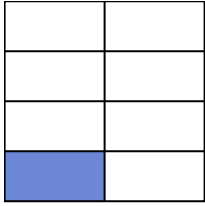
11. _____

12. _____


13. _____

14. _____

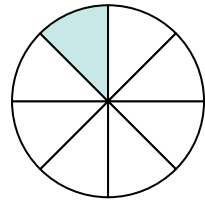
3)



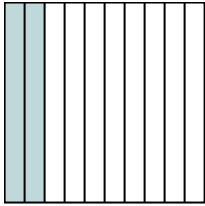
4)




5)



6)



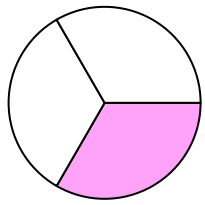
7)



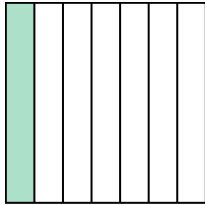
8)



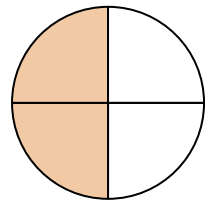
9)



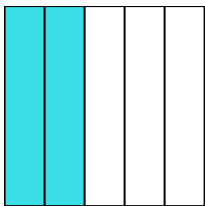
10)



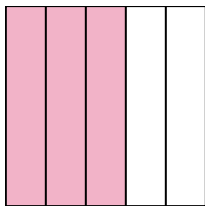
11)



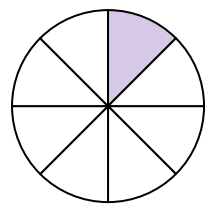
12)



13)



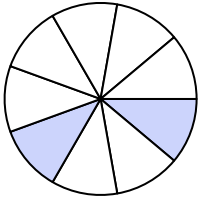
14)






Write the shaded amount in word form.


Ex)



1)



2)



Answers

Ex. two-ninths

1. nine-tenths

2. one-half

3. one-seventh

4. seven-ninths

5. one-eighth

6. two-tenths

7. four-sixths

8. three-fourths

9. one-third

10. one-seventh

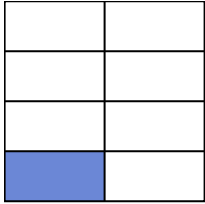
11. two-fourths

12. two-fifths


13. three-fifths

14. one-eighth

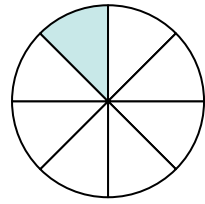
3)



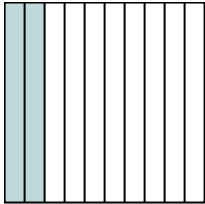
4)




5)



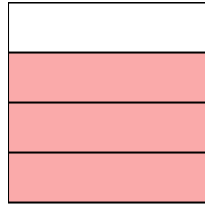
6)



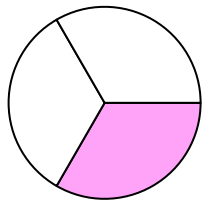
7)



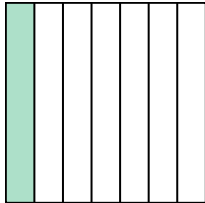
8)



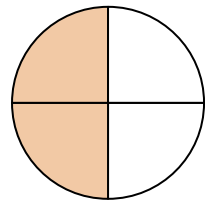
9)



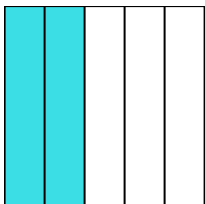
10)



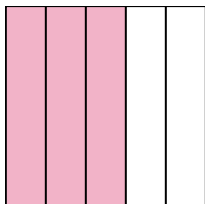
11)



12)



13)



14)

