




Solve each problem.

Ex) Express the moons as a fraction of the entire set.



1) Express the moons as a fraction of the entire set.



Answers

Ex. $\frac{5}{15}$

1. _____

2. _____

3. _____

4. _____

5. _____

6. _____

7. _____


8. _____

9. _____


10. _____

11. _____

2) Express the hearts as a fraction of the entire set.



3) Express the triangles as a fraction of the entire set.



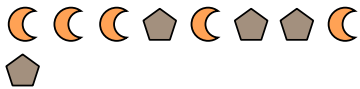
4) Express the stars as a fraction of the entire set.



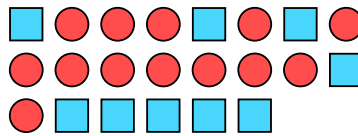
5) Express the stars as a fraction of the entire set.



6) Express the pentagons as a fraction of the entire set.



7) Express the circles as a fraction of the entire set.



8) Express the stars as a fraction of the entire set.



9) Express the triangles as a fraction of the entire set.



10) Express the stars as a fraction of the entire set.



11) Express the stars as a fraction of the entire set.



