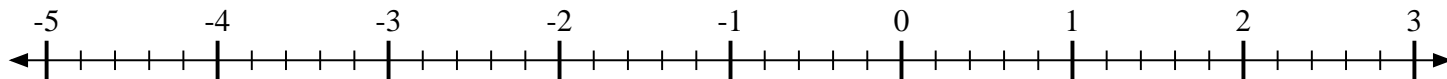
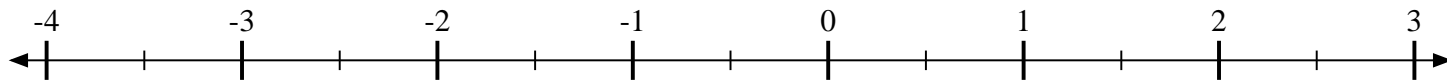


**Mark each location described.**

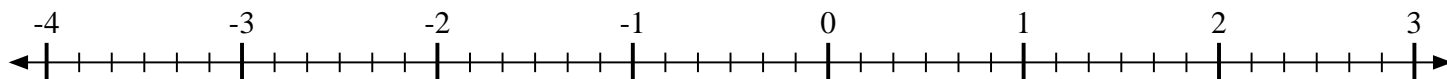
- 1) Mark the location of
- $-3\frac{4}{5}$



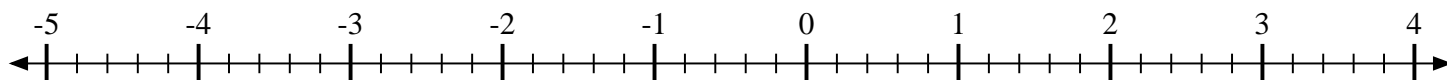
- 2) Mark the location of
- $-2\frac{1}{2}$



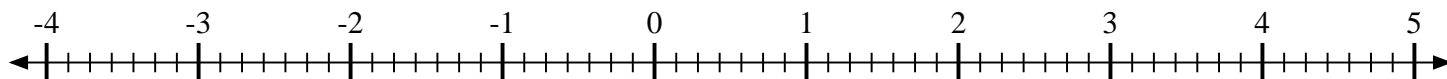
- 3) Mark the location of
- $-3\frac{4}{6}$



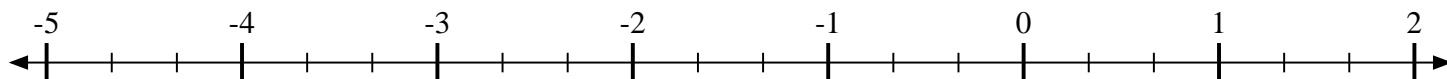
- 4) Mark the location of
- $-1\frac{4}{5}$



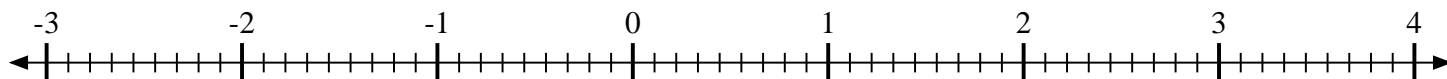
- 5) Mark the location of
- $1\frac{4}{7}$



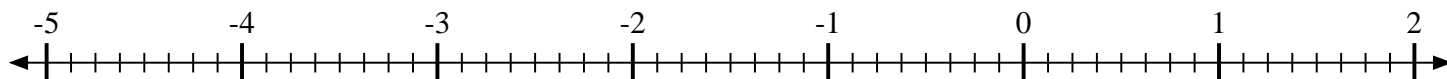
- 6) Mark the location of
- $-3\frac{2}{3}$



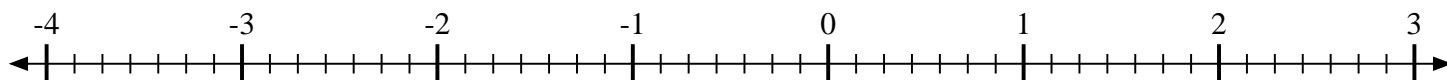
- 7) Mark the location of
- $2\frac{6}{9}$



- 8) Mark the location of
- $-4\frac{3}{8}$



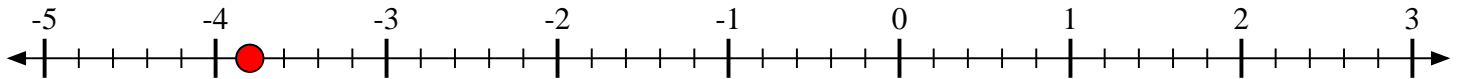
- 9) Mark the location of
- $-1\frac{1}{7}$



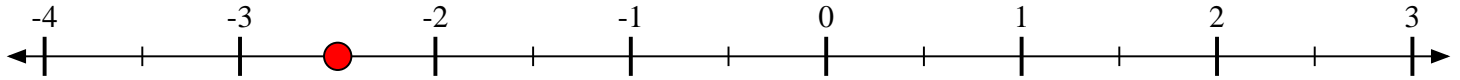


Mark each location described.

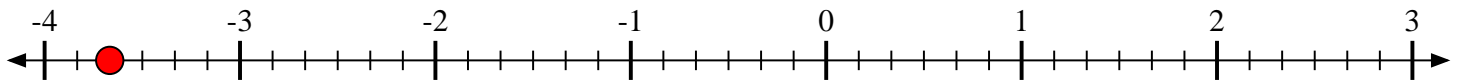
- 1) Mark the location of
- $-3\frac{4}{5}$



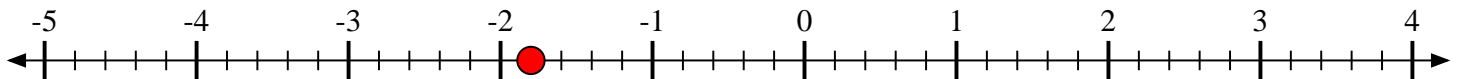
- 2) Mark the location of
- $-2\frac{1}{2}$



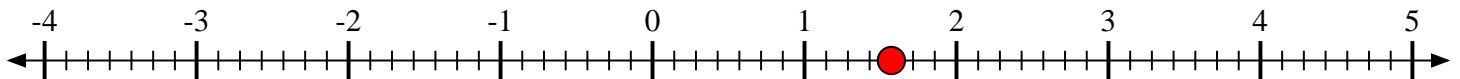
- 3) Mark the location of
- $-3\frac{4}{6}$



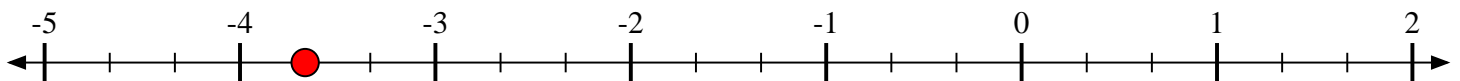
- 4) Mark the location of
- $-1\frac{4}{5}$



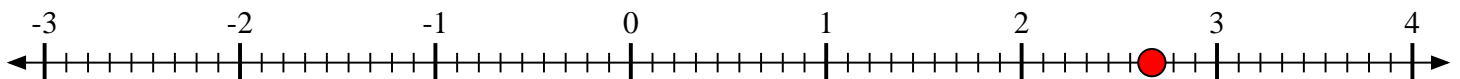
- 5) Mark the location of
- $1\frac{4}{7}$



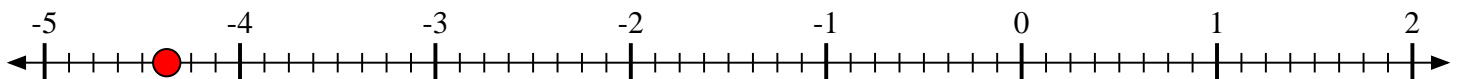
- 6) Mark the location of
- $-3\frac{2}{3}$



- 7) Mark the location of
- $2\frac{6}{9}$



- 8) Mark the location of
- $-4\frac{3}{8}$



- 9) Mark the location of
- $-1\frac{1}{7}$

