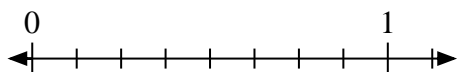


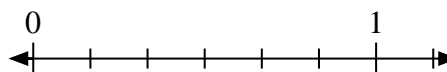


Solve each problem.

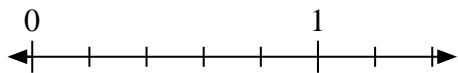
- 1) Mark the location of
- $\frac{4}{8}$



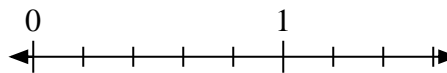
- 2) Mark the location of
- $\frac{0}{6}$




- 3) Mark the location of
- $\frac{3}{5}$



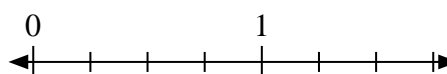
- 4) Mark the location of
- $\frac{0}{5}$



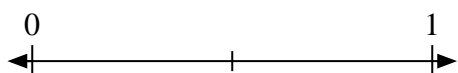
- 5) Mark the location of
- $\frac{0}{3}$



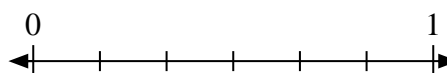
- 6) Mark the location of
- $\frac{4}{4}$



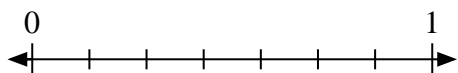
- 7) Mark the location of
- $\frac{0}{2}$



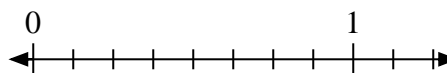
- 8) Mark the location of
- $\frac{2}{6}$




- 9) Mark the location of
- $\frac{5}{7}$



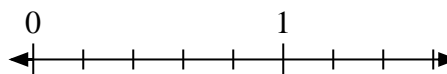
- 10) Mark the location of
- $\frac{7}{8}$



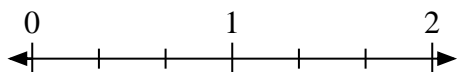
- 11) Mark the location of
- $\frac{2}{2}$



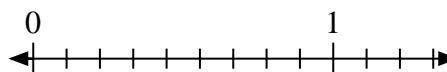
- 12) Mark the location of
- $\frac{5}{5}$



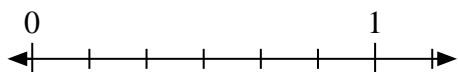
- 13) Mark the location of
- $\frac{2}{3}$



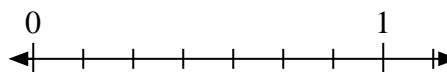
- 14) Mark the location of
- $\frac{5}{9}$



- 15) Mark the location of
- $\frac{5}{6}$



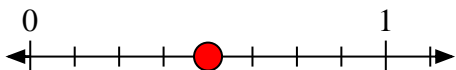
- 16) Mark the location of
- $\frac{2}{7}$



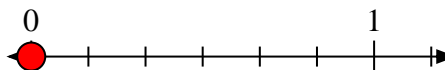


Solve each problem.

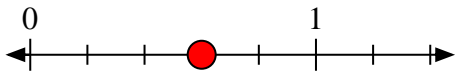
- 1) Mark the location of
- $\frac{4}{8}$



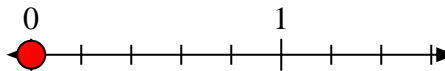
- 2) Mark the location of
- $\frac{0}{6}$




- 3) Mark the location of
- $\frac{3}{5}$



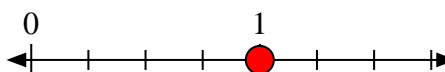
- 4) Mark the location of
- $\frac{0}{5}$



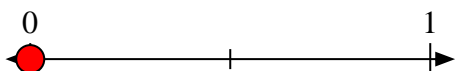
- 5) Mark the location of
- $\frac{0}{3}$



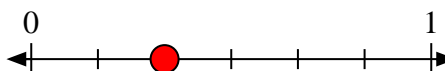
- 6) Mark the location of
- $\frac{4}{4}$



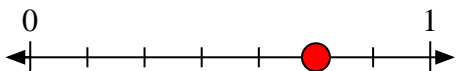
- 7) Mark the location of
- $\frac{0}{2}$



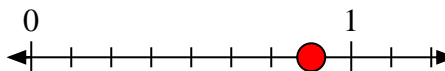
- 8) Mark the location of
- $\frac{2}{6}$




- 9) Mark the location of
- $\frac{5}{7}$



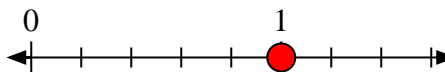
- 10) Mark the location of
- $\frac{7}{8}$



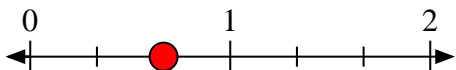
- 11) Mark the location of
- $\frac{2}{2}$



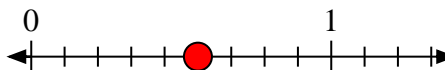
- 12) Mark the location of
- $\frac{5}{5}$



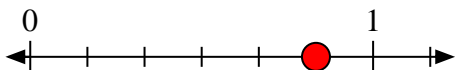
- 13) Mark the location of
- $\frac{2}{3}$



- 14) Mark the location of
- $\frac{5}{9}$



- 15) Mark the location of
- $\frac{5}{6}$



- 16) Mark the location of
- $\frac{2}{7}$

