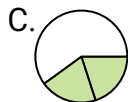
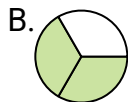
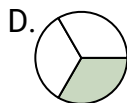
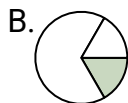


**Determine which letter best represents each fraction.****Answers**

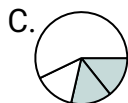
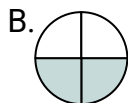
1)

Which choice best represents $\frac{2}{3}$?

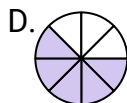
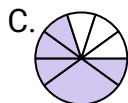
2)

Which choice best represents $\frac{1}{3}$?

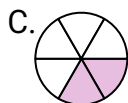
3)

Which choice best represents $\frac{2}{4}$?

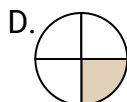
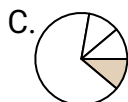
4)

Which choice best represents $\frac{5}{8}$?

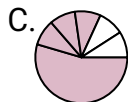
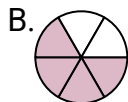
5)

Which choice best represents $\frac{2}{6}$?

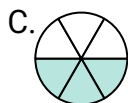
6)

Which choice best represents $\frac{1}{4}$?

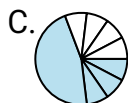
7)

Which choice best represents $\frac{4}{6}$?

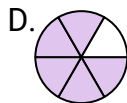
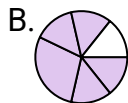
8)

Which choice best represents $\frac{3}{6}$?

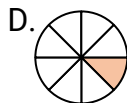
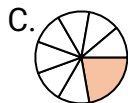
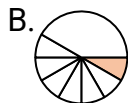
9)

Which choice best represents $\frac{4}{8}$?

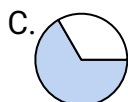
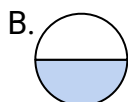
10)

Which choice best represents $\frac{5}{6}$?

11)

Which choice best represents $\frac{1}{8}$?

12)

Which choice best represents $\frac{1}{2}$?

1. _____

2. _____

3. _____

4. _____

5. _____

6. _____

7. _____

8. _____

9. _____

10. _____















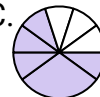

































11. _____

12. _____



Determine which letter best represents each fraction.

Answers

- 1) Which choice best represents $\frac{2}{3}$?
A.  B.  C.  D. 
- 2) Which choice best represents $\frac{1}{3}$?
A.  B.  C.  D. 
- 3) Which choice best represents $\frac{2}{4}$?
A.  B.  C.  D. 
- 4) Which choice best represents $\frac{5}{8}$?
A.  B.  C.  D. 
- 5) Which choice best represents $\frac{2}{6}$?
A.  B.  C.  D. 
- 6) Which choice best represents $\frac{1}{4}$?
A.  B.  C.  D. 
- 7) Which choice best represents $\frac{4}{6}$?
A.  B.  C.  D. 
- 8) Which choice best represents $\frac{3}{6}$?
A.  B.  C.  D. 
- 9) Which choice best represents $\frac{4}{8}$?
A.  B.  C.  D. 
- 10) Which choice best represents $\frac{5}{6}$?
A.  B.  C.  D. 
- 11) Which choice best represents $\frac{1}{8}$?
A.  B.  C.  D. 
- 12) Which choice best represents $\frac{1}{2}$?
A.  B.  C.  D. 

1. **B**2. **D**3. **B**4. **D**5. **C**6. **D**7. **B**8. **C**9. **A**10. **D**11. **D**12. **B**