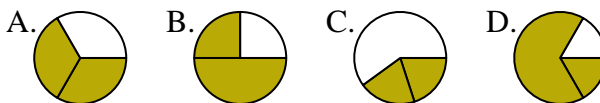




Determine which letter best represents each fraction.

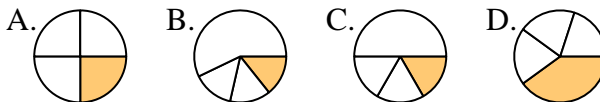
**Answers**

1) Which choice best represents  $\frac{2}{3}$ ?



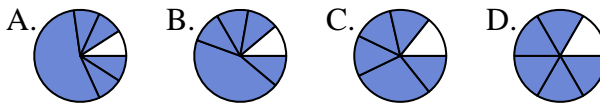
1. \_\_\_\_\_

2) Which choice best represents  $\frac{1}{4}$ ?



2. \_\_\_\_\_

3) Which choice best represents  $\frac{5}{6}$ ?



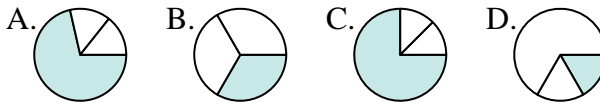
4. \_\_\_\_\_

4) Which choice best represents  $\frac{3}{8}$ ?



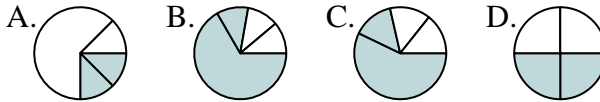
6. \_\_\_\_\_

5) Which choice best represents  $\frac{1}{3}$ ?



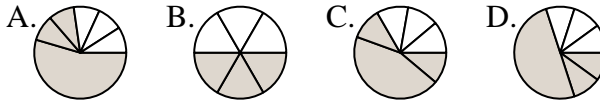
7. \_\_\_\_\_

6) Which choice best represents  $\frac{2}{4}$ ?



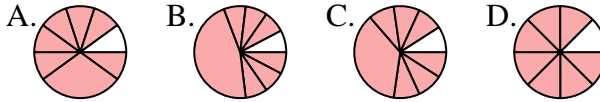
9. \_\_\_\_\_

7) Which choice best represents  $\frac{3}{6}$ ?



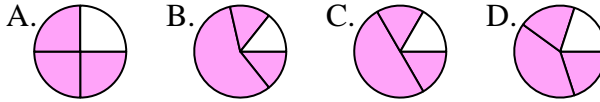
10. \_\_\_\_\_

8) Which choice best represents  $\frac{7}{8}$ ?



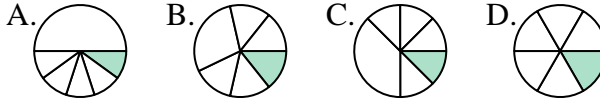
11. \_\_\_\_\_

9) Which choice best represents  $\frac{3}{4}$ ?

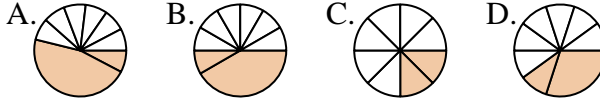


12. \_\_\_\_\_

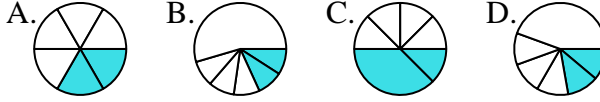
10) Which choice best represents  $\frac{1}{6}$ ?



11) Which choice best represents  $\frac{2}{8}$ ?



12) Which choice best represents  $\frac{2}{6}$ ?

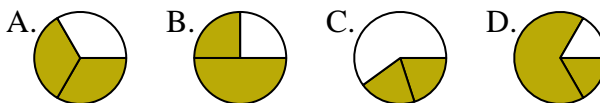




Determine which letter best represents each fraction.

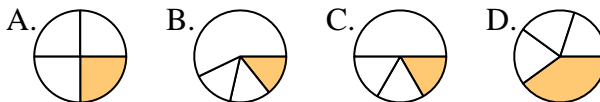
**Answers**

1) Which choice best represents  $\frac{2}{3}$ ?



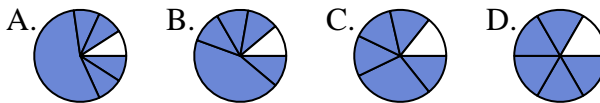
1. **A**

2) Which choice best represents  $\frac{1}{4}$ ?



2. **A**

3) Which choice best represents  $\frac{5}{6}$ ?



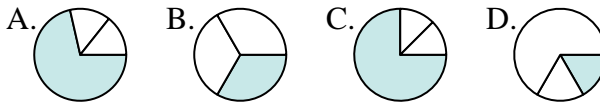
3. **D**

4) Which choice best represents  $\frac{3}{8}$ ?



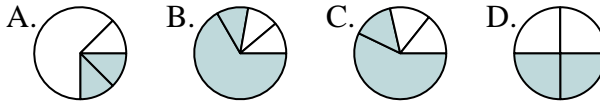
4. **D**

5) Which choice best represents  $\frac{1}{3}$ ?



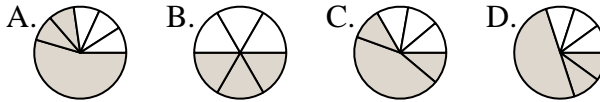
5. **B**

6) Which choice best represents  $\frac{2}{4}$ ?



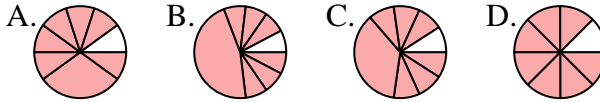
6. **D**

7) Which choice best represents  $\frac{3}{6}$ ?



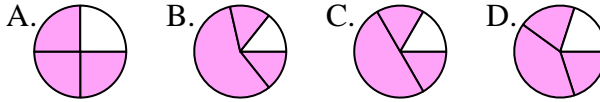
7. **B**

8) Which choice best represents  $\frac{7}{8}$ ?



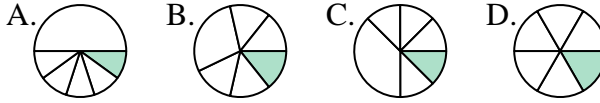
8. **D**

9) Which choice best represents  $\frac{3}{4}$ ?



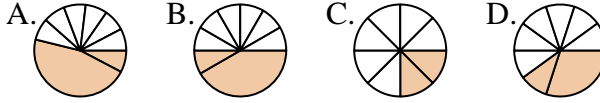
9. **A**

10) Which choice best represents  $\frac{1}{6}$ ?



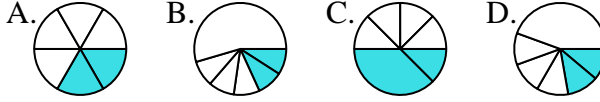
10. **D**

11) Which choice best represents  $\frac{2}{8}$ ?



11. **C**

12) Which choice best represents  $\frac{2}{6}$ ?



12. **A**