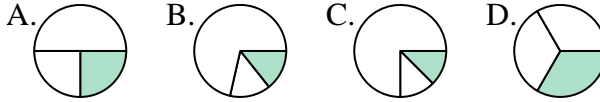




Determine which letter best represents each fraction.

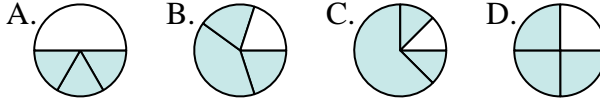
Answers

1) Which choice best represents $\frac{1}{3}$?



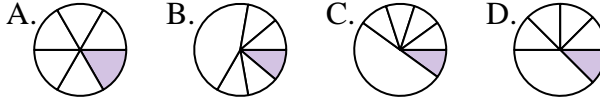
1. _____

2) Which choice best represents $\frac{3}{4}$?



2. _____

3) Which choice best represents $\frac{1}{6}$?



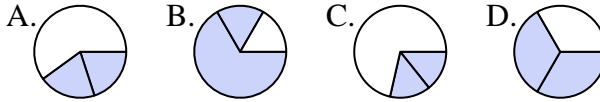
4. _____

4) Which choice best represents $\frac{5}{8}$?



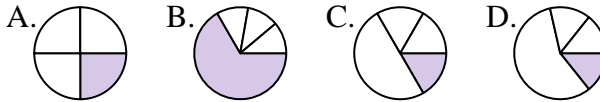
6. _____

5) Which choice best represents $\frac{2}{3}$?



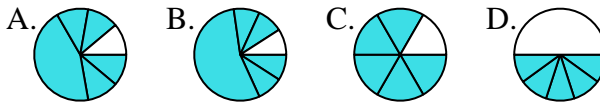
7. _____

6) Which choice best represents $\frac{1}{4}$?



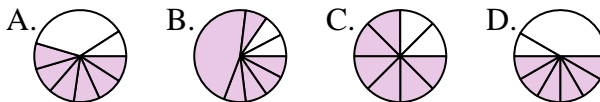
9. _____

7) Which choice best represents $\frac{5}{6}$?



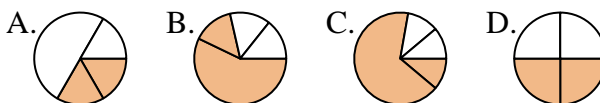
11. _____

8) Which choice best represents $\frac{6}{8}$?

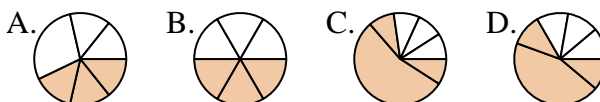


12. _____

9) Which choice best represents $\frac{2}{4}$?



10) Which choice best represents $\frac{3}{6}$?



11) Which choice best represents $\frac{2}{8}$?



12) Which choice best represents $\frac{4}{6}$?

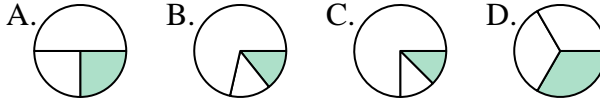




Determine which letter best represents each fraction.

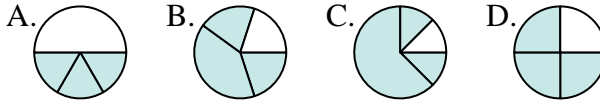
Answers

1) Which choice best represents $\frac{1}{3}$?



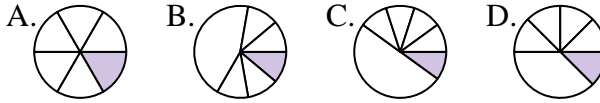
1. **D**

2) Which choice best represents $\frac{3}{4}$?



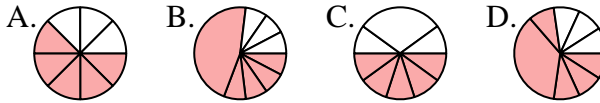
2. **D**

3) Which choice best represents $\frac{1}{6}$?



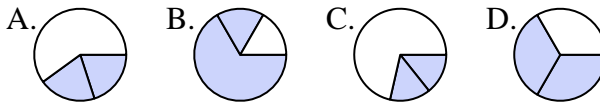
3. **A**

4) Which choice best represents $\frac{5}{8}$?



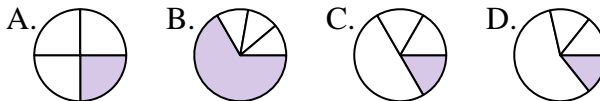
4. **A**

5) Which choice best represents $\frac{2}{3}$?



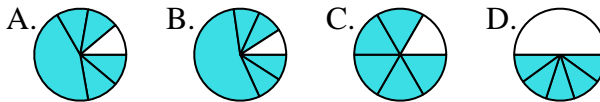
5. **D**

6) Which choice best represents $\frac{1}{4}$?



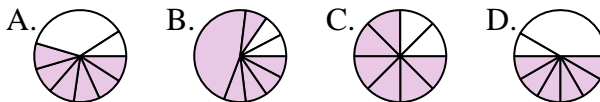
6. **A**

7) Which choice best represents $\frac{5}{6}$?



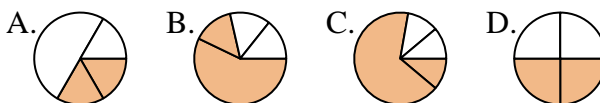
7. **C**

8) Which choice best represents $\frac{6}{8}$?



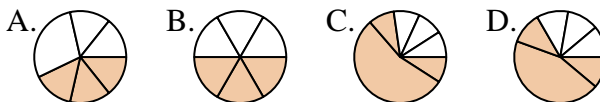
8. **C**

9) Which choice best represents $\frac{2}{4}$?



9. **D**

10) Which choice best represents $\frac{3}{6}$?



10. **B**

11) Which choice best represents $\frac{2}{8}$?



11. **C**

12) Which choice best represents $\frac{4}{6}$?



12. **C**