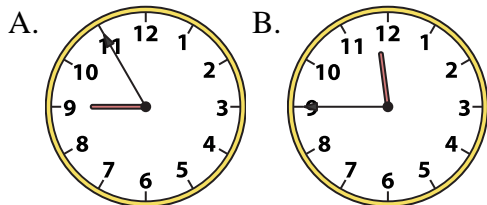




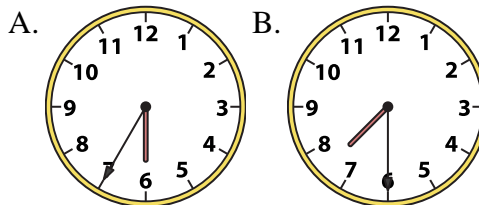
Determine which clock accurately shows the time.

**Answers**

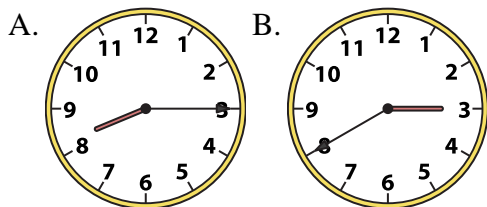
1) 11:45



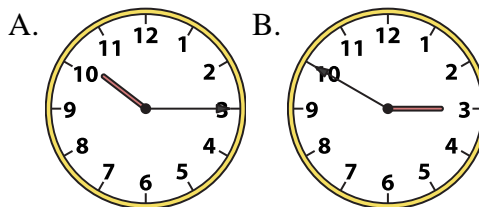
2) 7:30



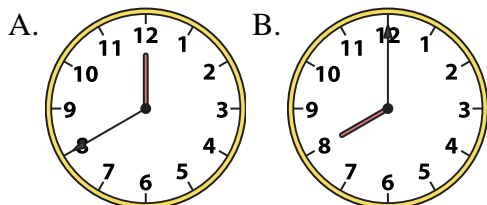
3) 8:15



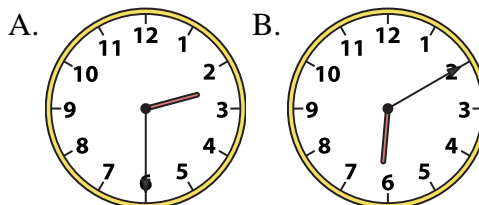
4) 10:15



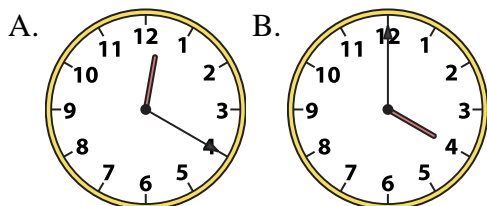
5) 8:00



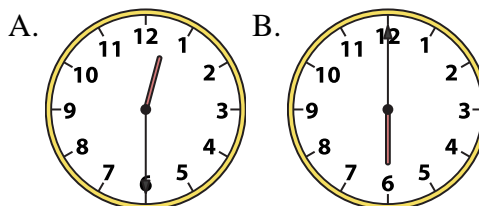
6) 2:30



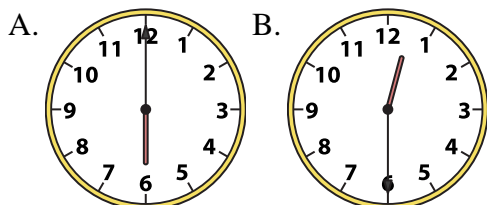
7) 4:00



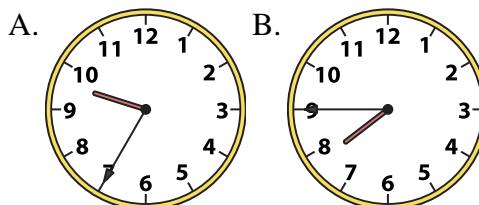
8) 12:30



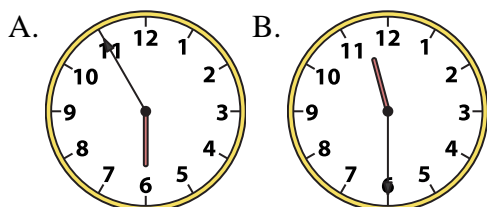
9) 12:30



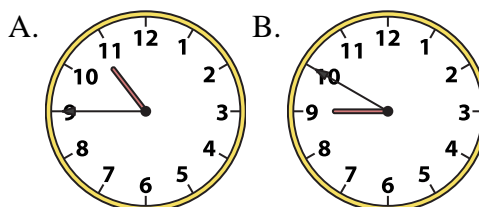
10) 7:45



11) 11:30



12) 10:45



1. \_\_\_\_\_
2. \_\_\_\_\_
3. \_\_\_\_\_
4. \_\_\_\_\_
5. \_\_\_\_\_
6. \_\_\_\_\_
7. \_\_\_\_\_
8. \_\_\_\_\_
9. \_\_\_\_\_
10. \_\_\_\_\_
11. \_\_\_\_\_
12. \_\_\_\_\_

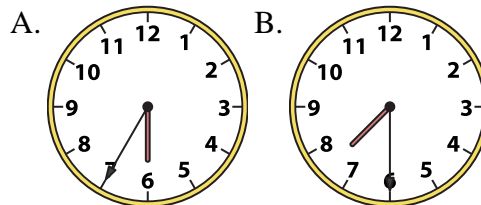
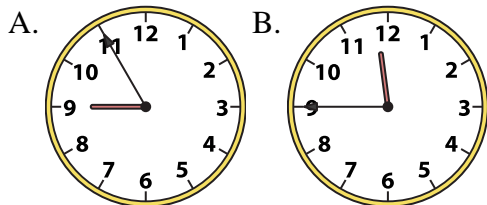


Determine which clock accurately shows the time.

**Answers**

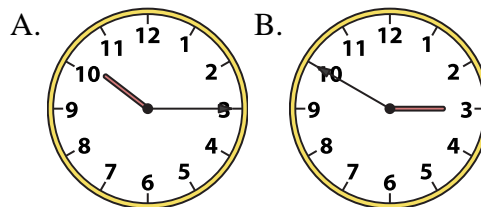
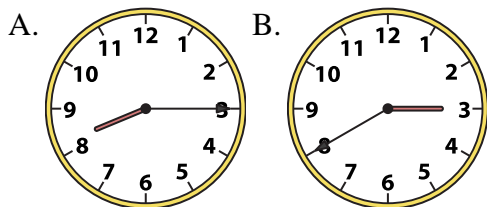
1) 11:45

2) 7:30



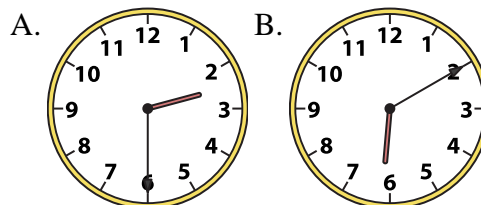
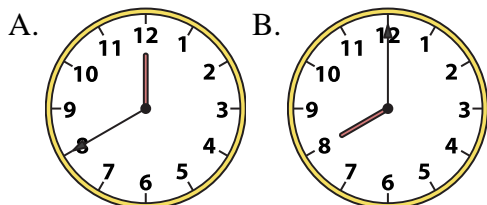
3) 8:15

4) 10:15



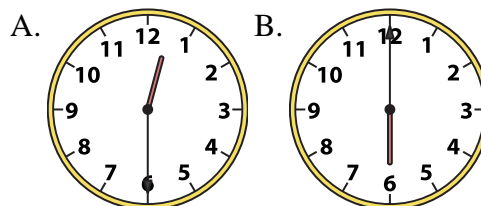
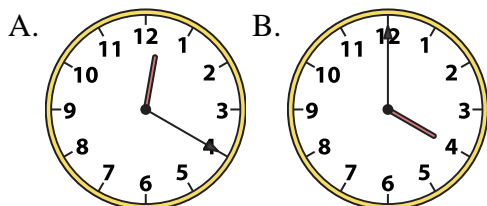
5) 8:00

6) 2:30



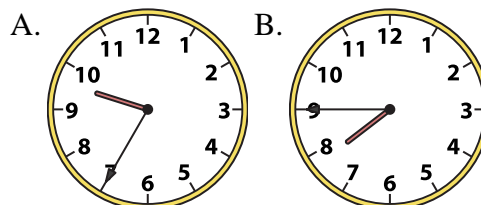
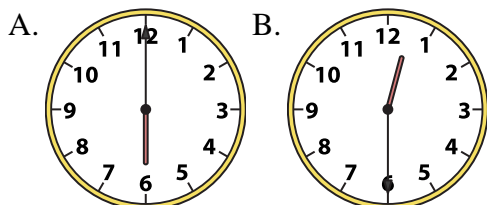
7) 4:00

8) 12:30



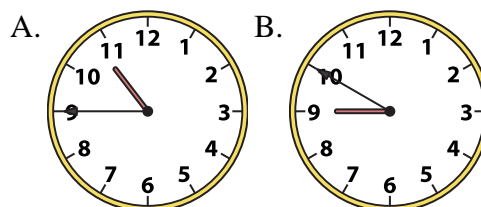
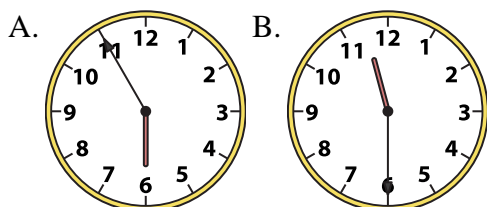
9) 12:30

10) 7:45



11) 11:30

12) 10:45



1. **B**

2. **B**

3. **A**

4. **A**

5. **B**

6. **A**

7. **B**

8. **A**

9. **B**

10. **B**

11. **B**

12. **A**