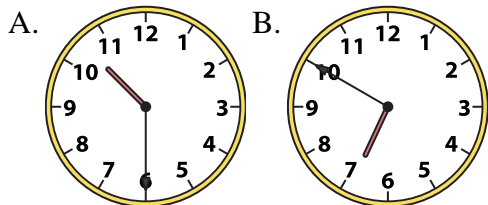




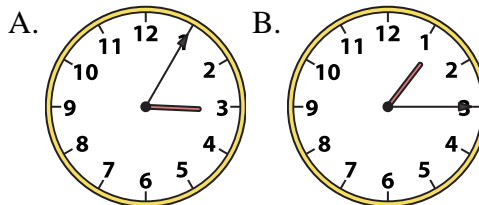
Determine which clock accurately shows the time.

Answers

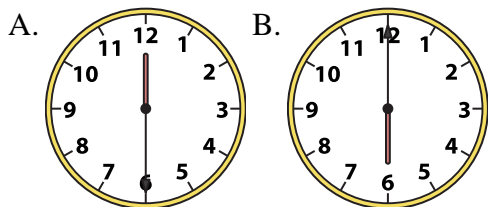
1) 10:30



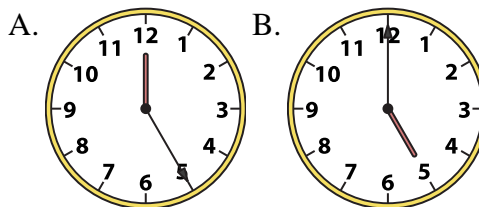
2) 1:15



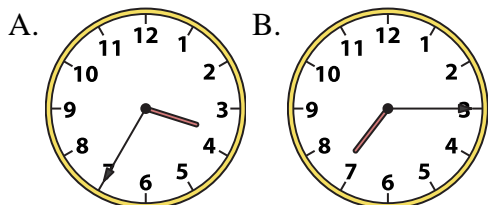
3) 6:00



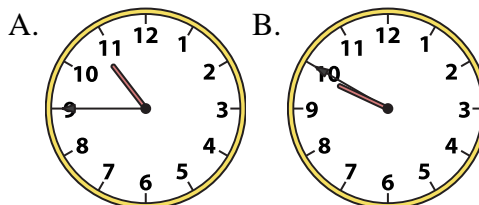
4) 5:00



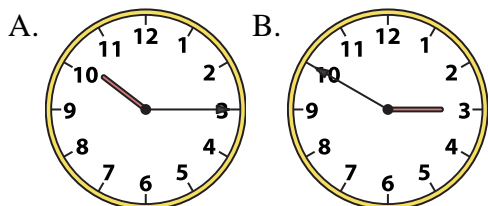
5) 7:15



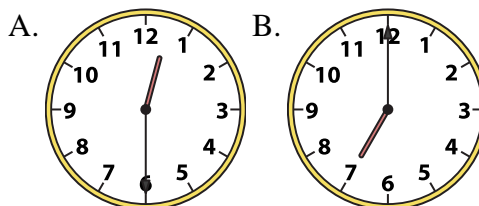
6) 10:45



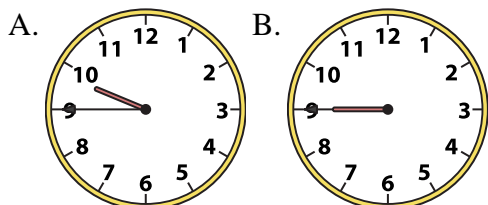
7) 10:15



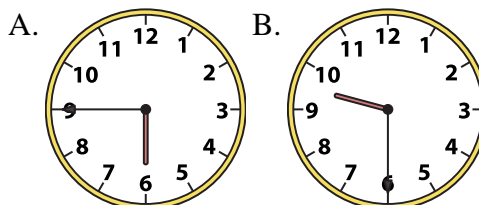
8) 12:30



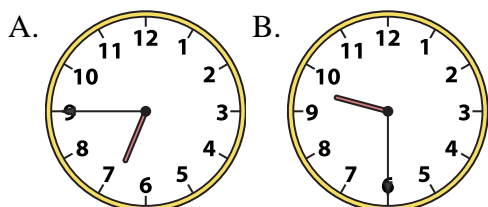
9) 9:45



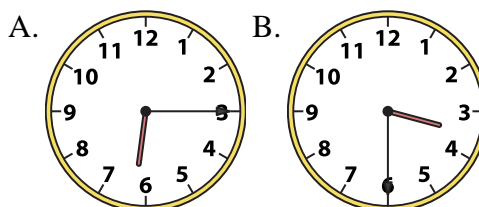
10) 9:30



11) 9:30



12) 3:30



1. _____
2. _____
3. _____
4. _____
5. _____
6. _____
7. _____
8. _____
9. _____
10. _____
11. _____
12. _____

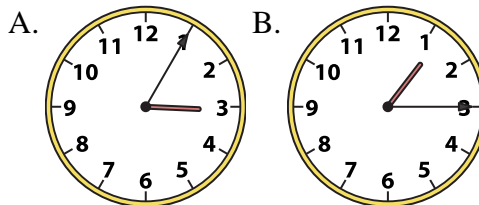
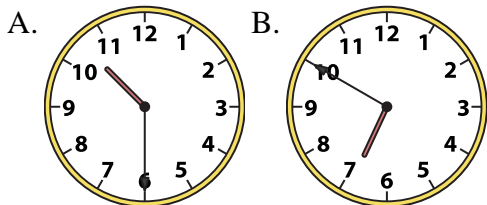


Determine which clock accurately shows the time.

Answers

1) 10:30

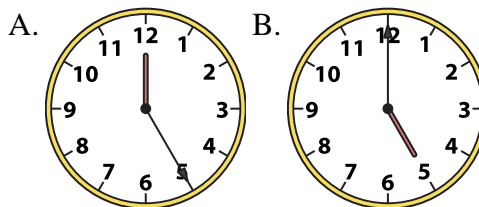
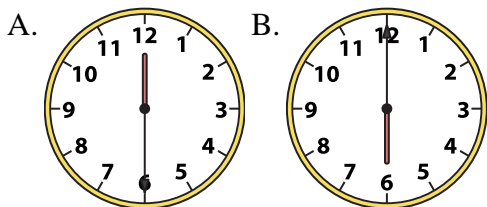
2) 1:15



1. **A**

3) 6:00

4) 5:00



2. **B**

3. **B**

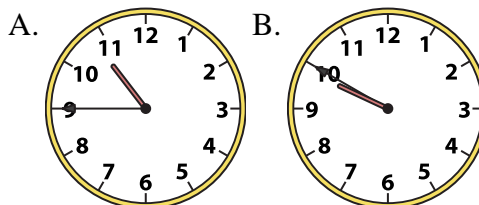
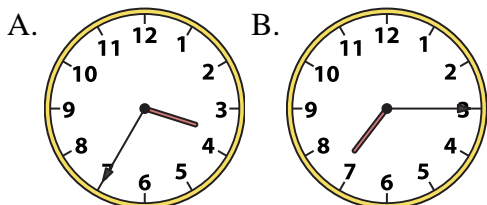
4. **B**

5. **B**

6. **A**

5) 7:15

6) 10:45



7. **A**

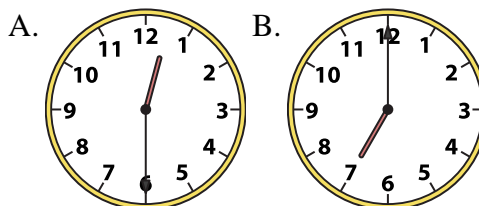
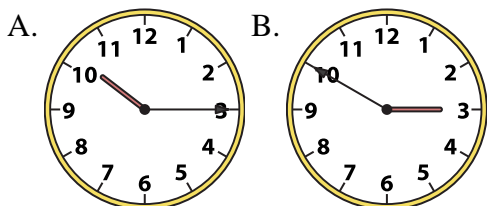
8. **A**

9. **A**

10. **B**

7) 10:15

8) 12:30

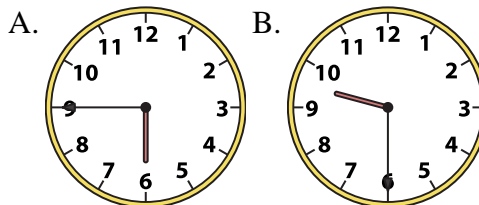
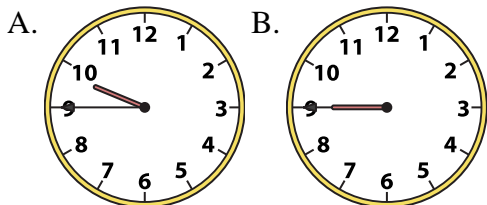


11. **B**

12. **B**

9) 9:45

10) 9:30



11) 9:30

12) 3:30

