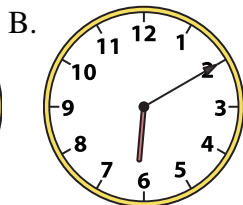
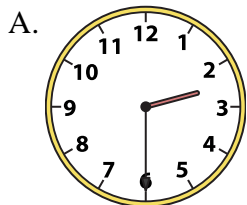




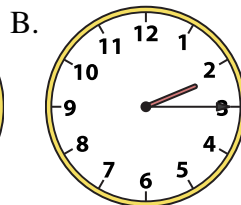
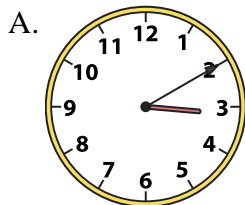
Determine which clock accurately shows the time.

**Answers**

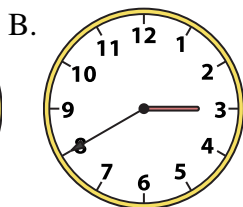
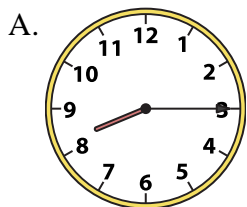
1) 2:30



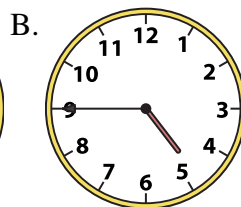
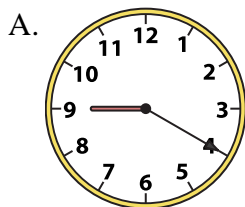
2) 2:15




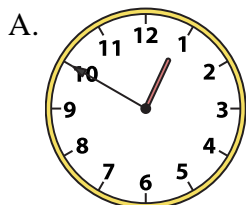
3) 8:15




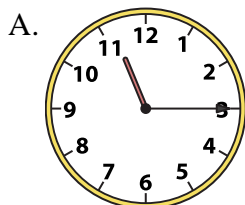
4) 4:45




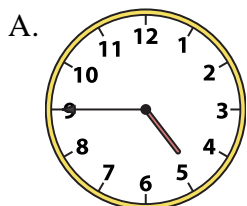
5) 10:00




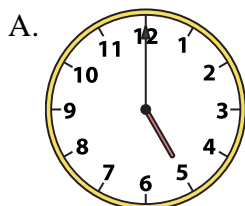
6) 11:15




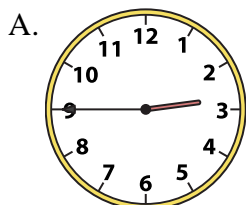
7) 4:45





8) 5:00





9) 2:45



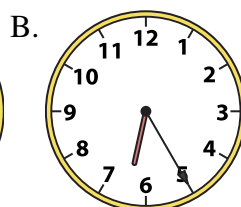

10) 5:00



11) 8:00



12) 5:30



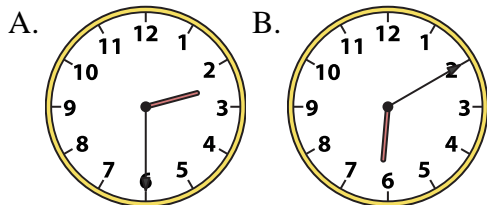
1. \_\_\_\_\_
2. \_\_\_\_\_
3. \_\_\_\_\_
4. \_\_\_\_\_
5. \_\_\_\_\_
6. \_\_\_\_\_
7. \_\_\_\_\_
8. \_\_\_\_\_
9. \_\_\_\_\_
10. \_\_\_\_\_
11. \_\_\_\_\_
12. \_\_\_\_\_



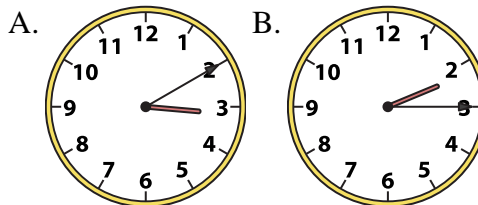
Determine which clock accurately shows the time.

**Answers**

1) 2:30

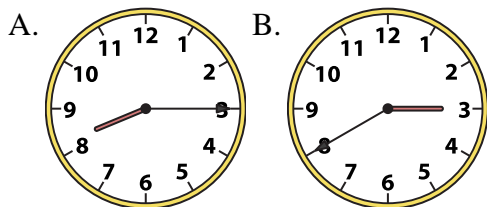


2) 2:15

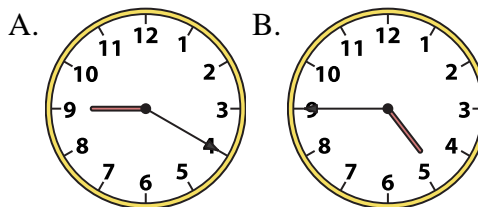


1.   **A**  

3) 8:15



4) 4:45



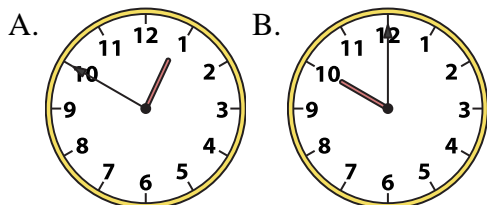
2.   **B**  

3.   **A**  

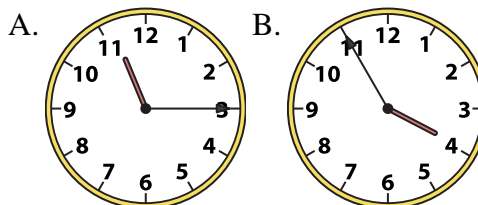
4.   **B**  

5.   **B**  

5) 10:00



6) 11:15



6.   **A**  

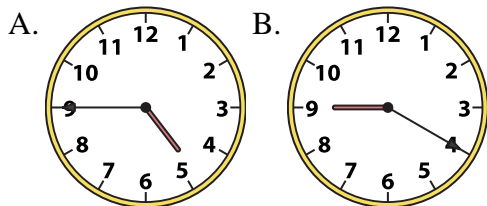
7.   **A**  

8.   **A**  

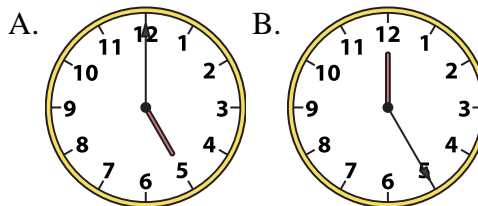
9.   **A**  

10.   **A**  

7) 4:45



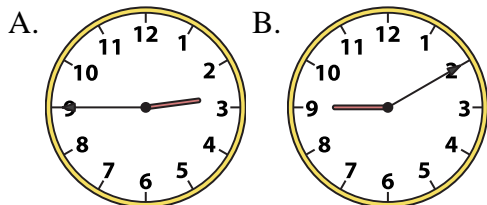
8) 5:00



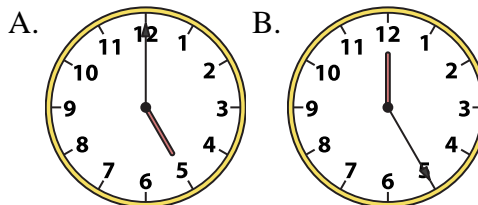
11.   **A**  

12.   **A**  

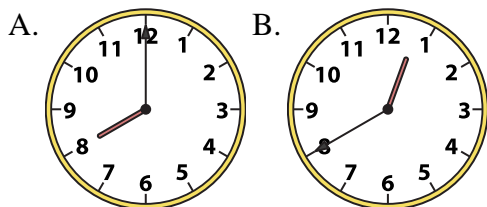
9) 2:45



10) 5:00



11) 8:00



12) 5:30

