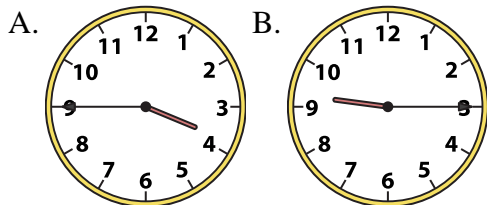




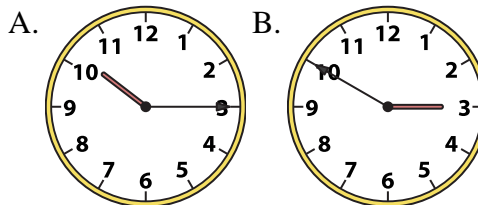
Determine which clock accurately shows the time.

Answers

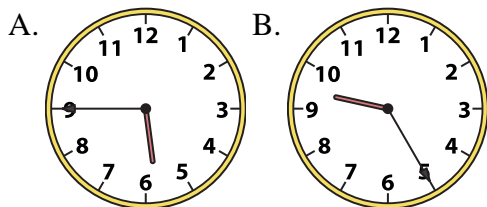
1) 3:45



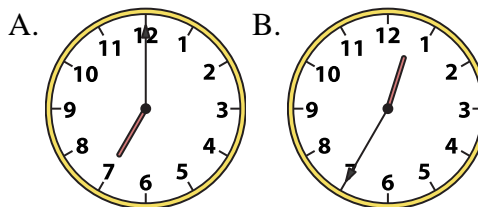
2) 10:15



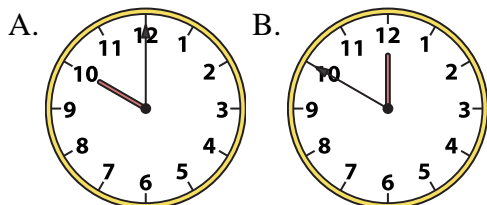
3) 5:45



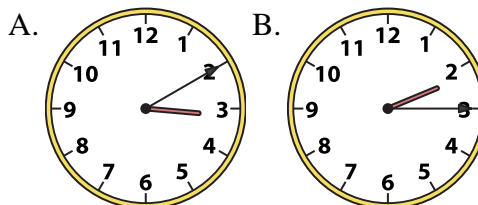
4) 7:00



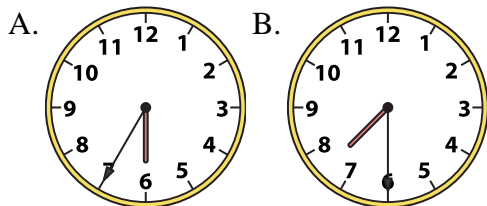
5) 10:00



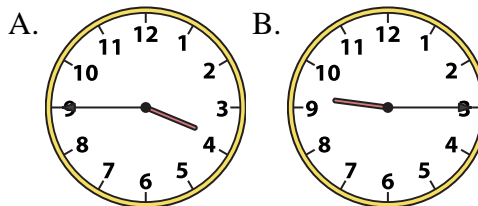
6) 2:15



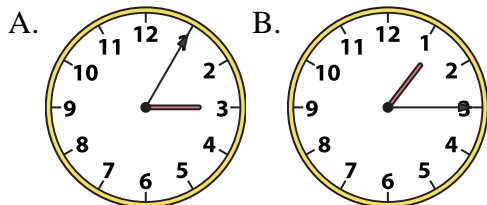
7) 7:30



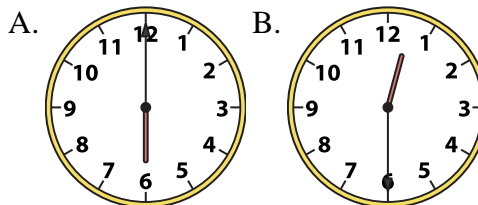
8) 9:15



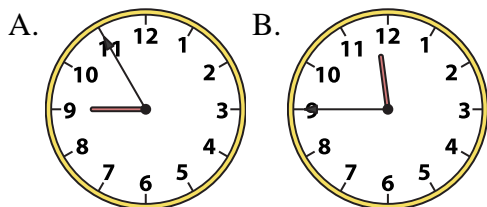
9) 1:15



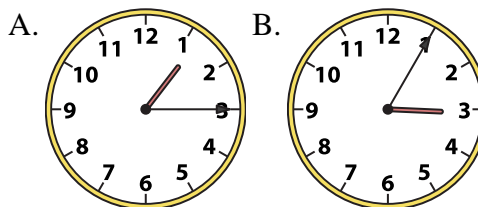
10) 12:30



11) 11:45



12) 1:15



1. _____
2. _____
3. _____
4. _____
5. _____
6. _____
7. _____
8. _____
9. _____
10. _____
11. _____
12. _____

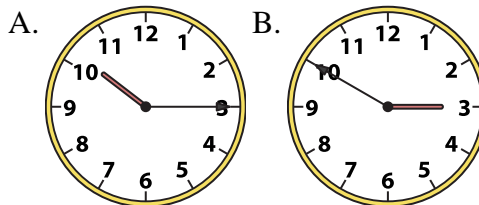
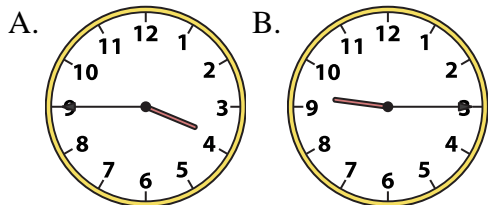


Determine which clock accurately shows the time.

Answers

1) 3:45

2) 10:15

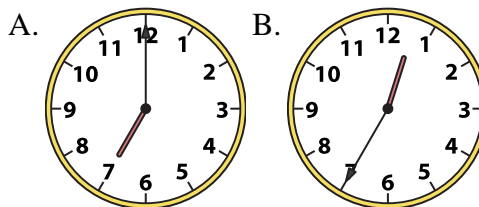
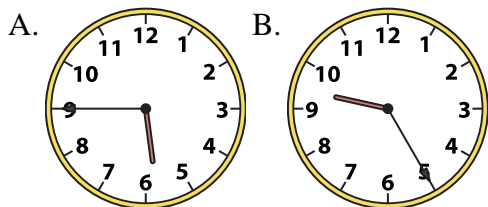


1. **A**

2. **A**

3) 5:45

4) 7:00



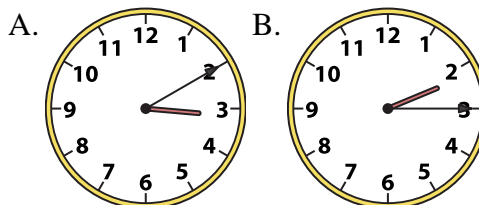
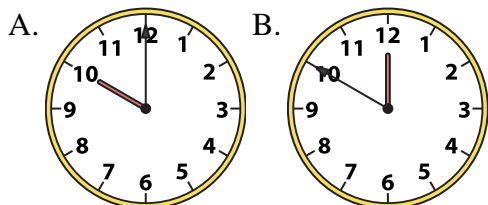
4. **A**

5. **A**

6. **B**

5) 10:00

6) 2:15



7. **B**

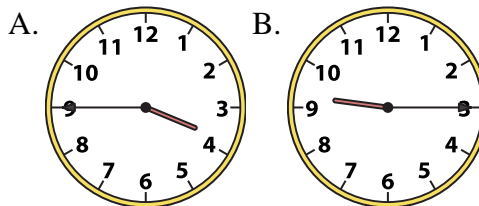
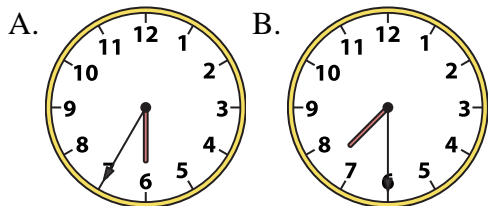
8. **B**

9. **B**

10. **B**

7) 7:30

8) 9:15

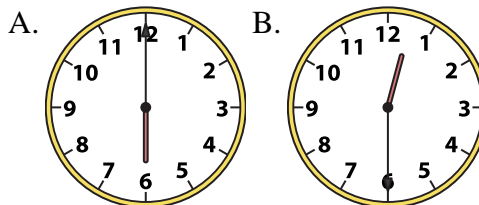
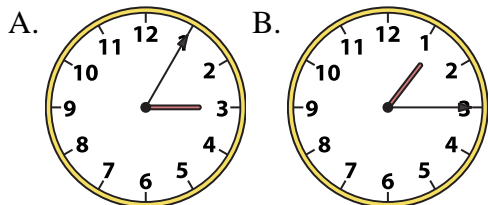


11. **B**

12. **A**

9) 1:15

10) 12:30



11) 11:45

12) 1:15

