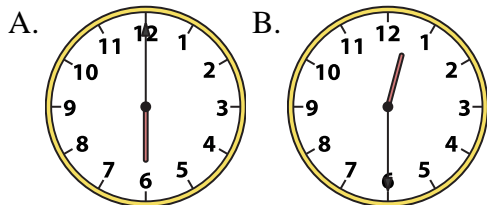




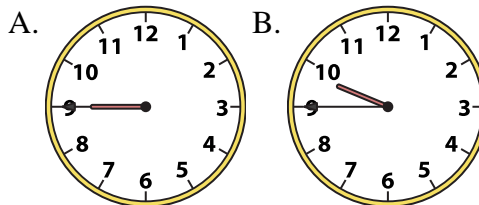
Determine which clock accurately shows the time.

**Answers**

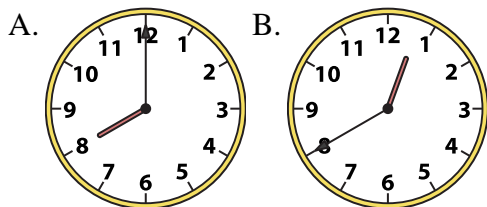
1) 12:30



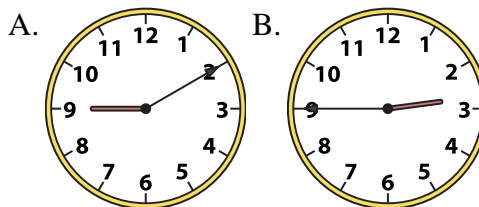
2) 9:45



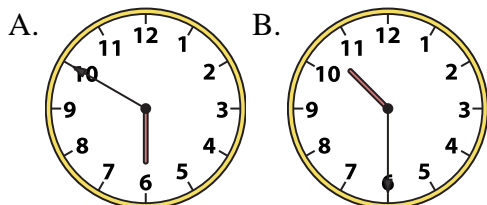
3) 8:00



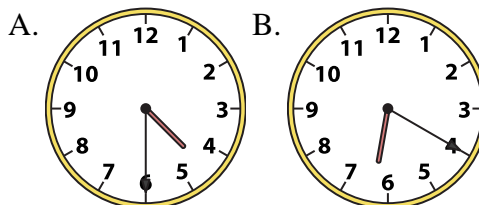
4) 2:45



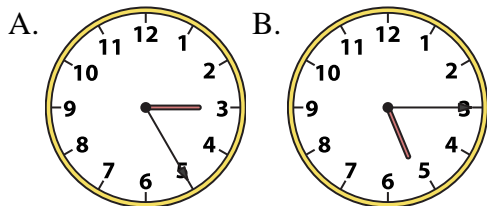
5) 10:30



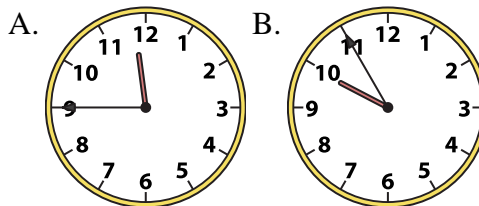
6) 4:30



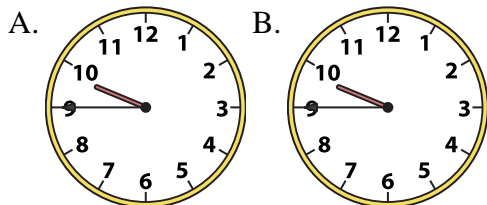
7) 5:15



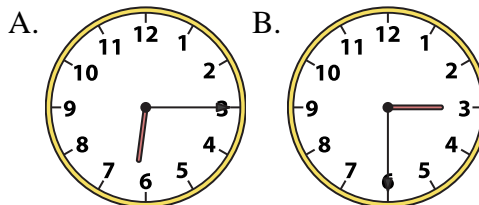
8) 11:45



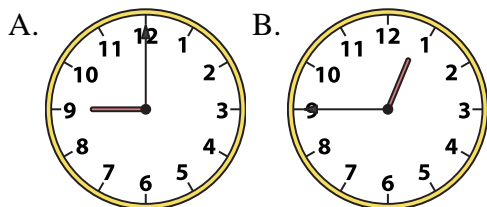
9) 9:45



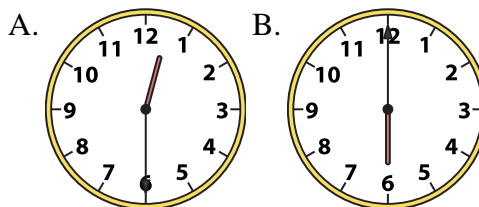
10) 6:15



11) 12:45



12) 6:00



1. \_\_\_\_\_
2. \_\_\_\_\_
3. \_\_\_\_\_
4. \_\_\_\_\_
5. \_\_\_\_\_
6. \_\_\_\_\_
7. \_\_\_\_\_
8. \_\_\_\_\_
9. \_\_\_\_\_
10. \_\_\_\_\_
11. \_\_\_\_\_
12. \_\_\_\_\_

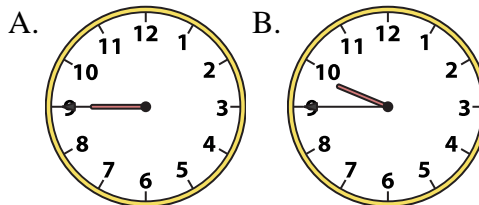
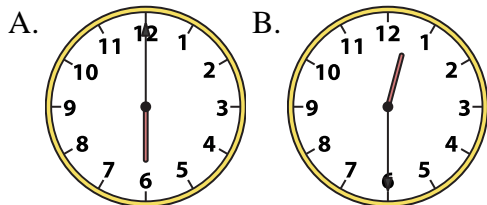


Determine which clock accurately shows the time.

**Answers**

1) 12:30

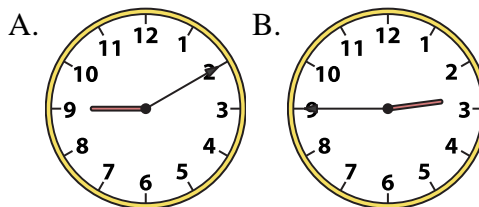
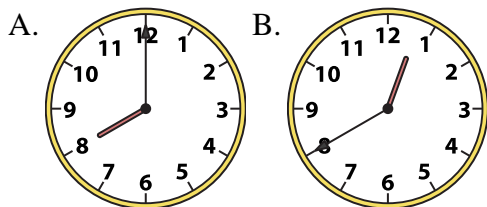
2) 9:45



1. **B**

3) 8:00

4) 2:45



2. **B**

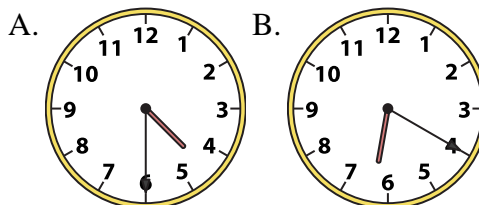
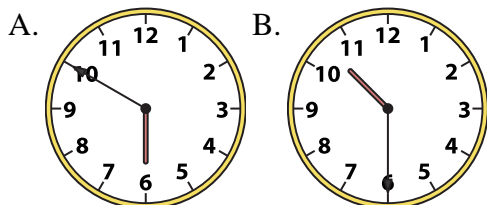
3. **A**

4. **B**

5. **B**

5) 10:30

6) 4:30



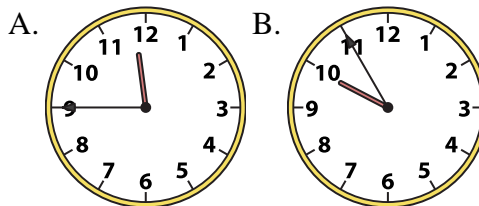
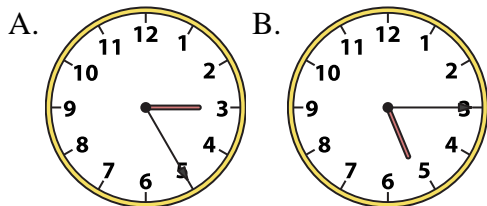
6. **A**

7. **B**

8. **A**

7) 5:15

8) 11:45



9. **B**

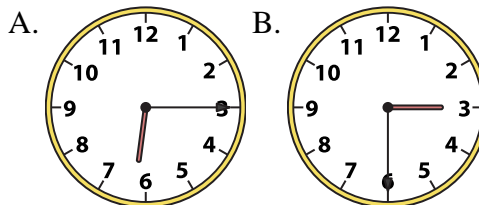
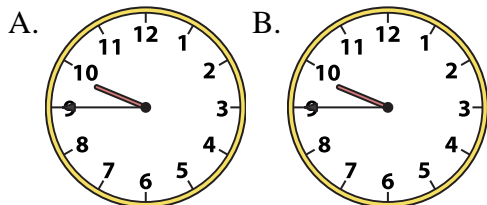
10. **A**

11. **B**

12. **B**

9) 9:45

10) 6:15



11) 12:45

12) 6:00

