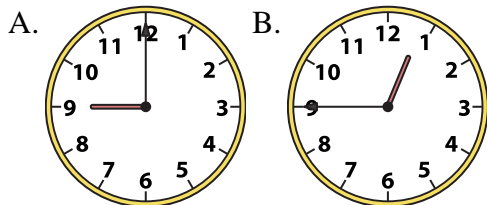




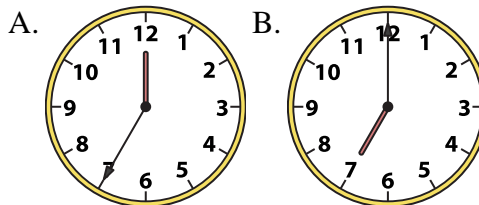
Determine which clock accurately shows the time.

**Answers**

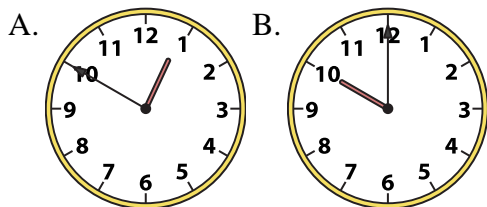
1) 12:45



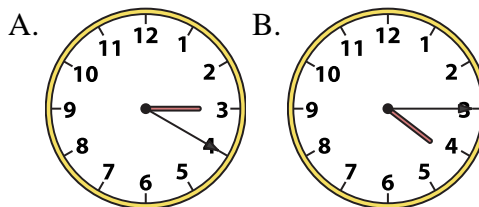
2) 7:00



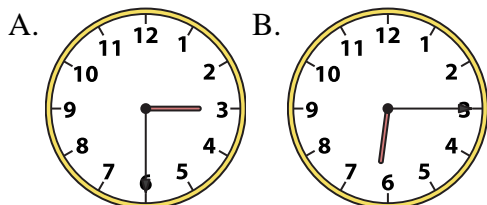
3) 10:00



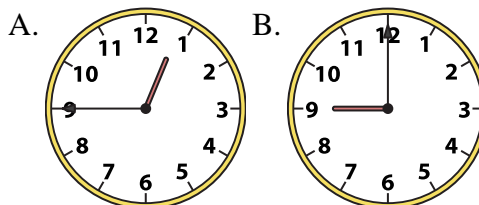
4) 4:15



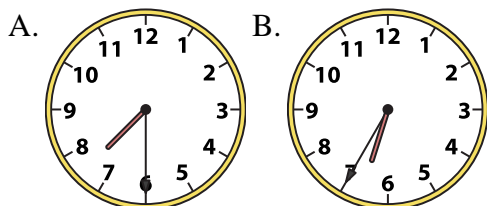
5) 6:15



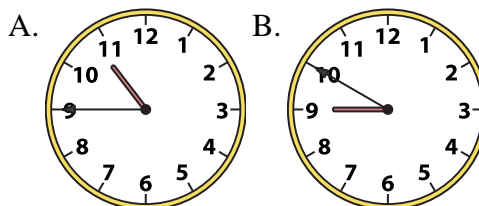
6) 12:45



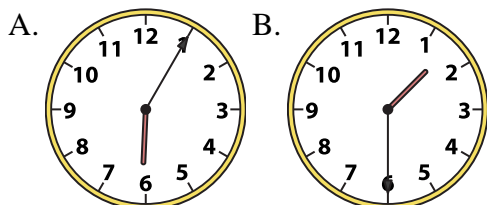
7) 7:30



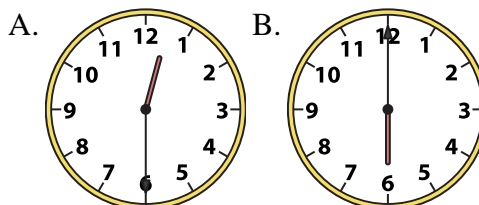
8) 10:45



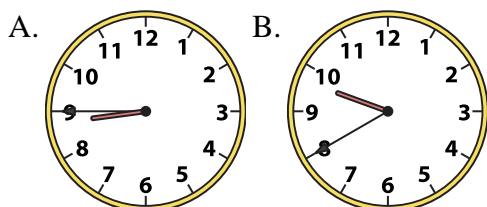
9) 1:30



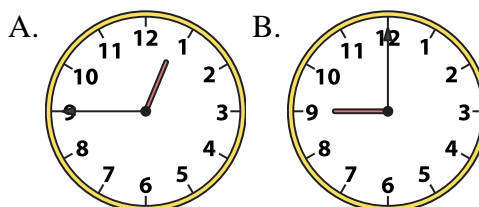
10) 12:30



11) 8:45



12) 12:45



1. \_\_\_\_\_
2. \_\_\_\_\_
3. \_\_\_\_\_
4. \_\_\_\_\_
5. \_\_\_\_\_
6. \_\_\_\_\_
7. \_\_\_\_\_
8. \_\_\_\_\_
9. \_\_\_\_\_
10. \_\_\_\_\_
11. \_\_\_\_\_
12. \_\_\_\_\_

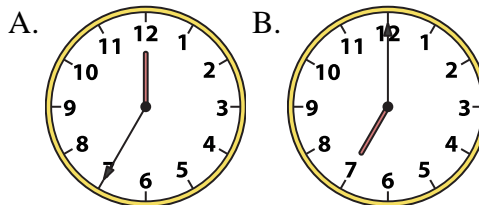
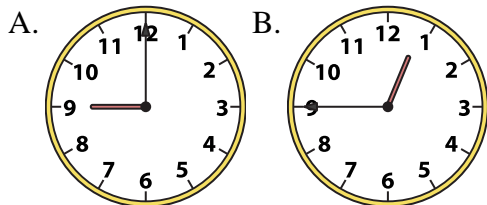


Determine which clock accurately shows the time.

**Answers**

1) 12:45

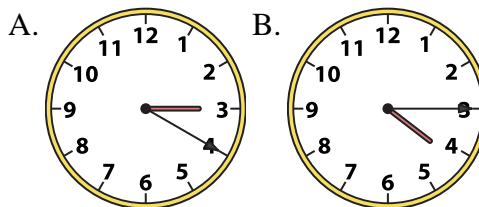
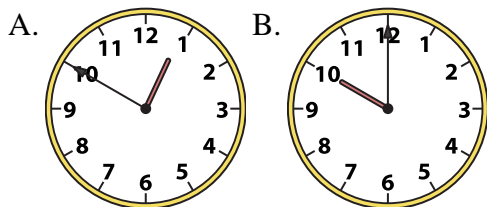
2) 7:00



1. **B**

3) 10:00

4) 4:15



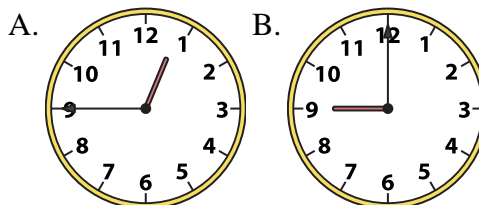
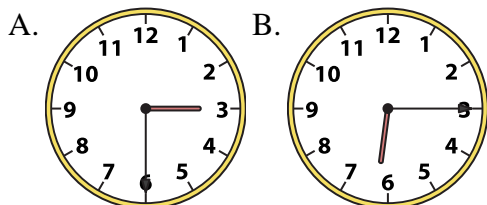
2. **B**

3. **B**

4. **B**

5) 6:15

6) 12:45

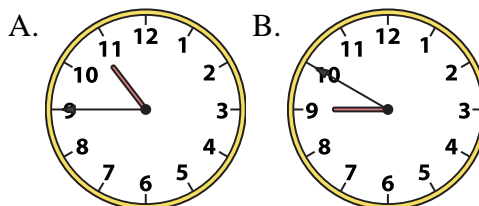
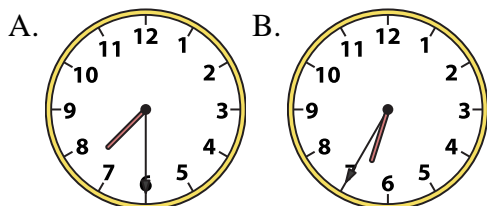


5. **B**

6. **A**

7) 7:30

8) 10:45

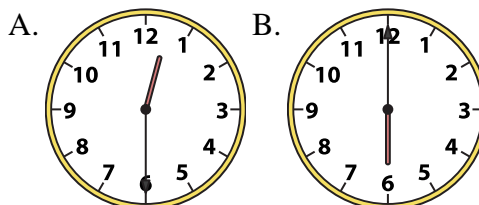
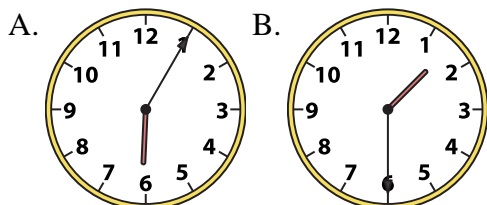


7. **A**

8. **A**

9) 1:30

10) 12:30

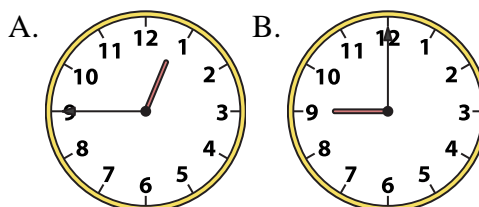
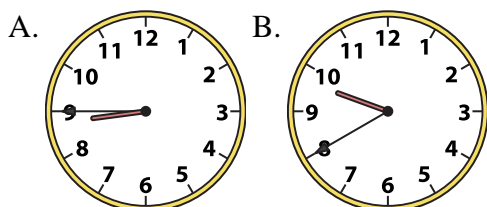


9. **B**

10. **A**

11) 8:45

12) 12:45



11. **A**

12. **A**