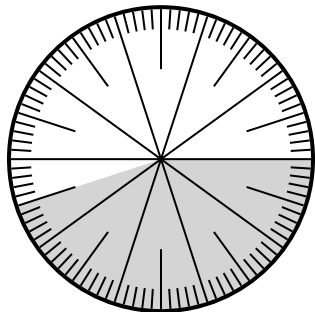




Solve each problem.

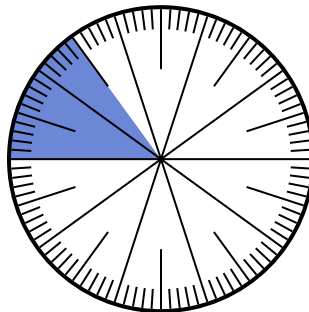
**Answers**

1) Which choice represents the un-shaded portion of the number wheel?



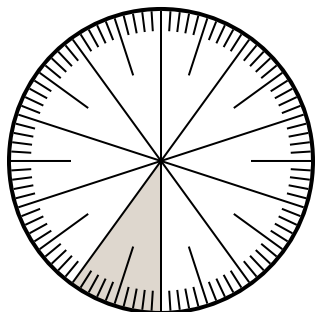
- A.  $\frac{55}{100}$       B. 5.5  
C. 5.50      D.  $\frac{0.55}{100}$

2) Which choice represents the un-shaded portion of the number wheel?



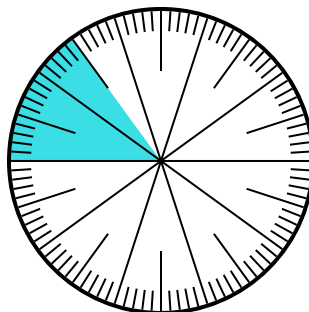
- A.  $\frac{15}{85}$       B. 0.85  
C. 85      D.  $\frac{85}{15}$

3) Which choice represents the shaded portion of the number wheel?



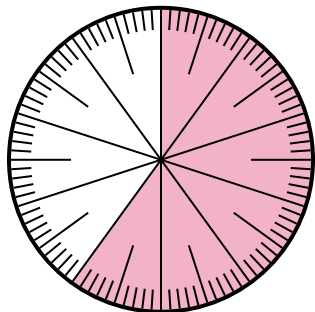
- A.  $\frac{0.1}{100}$       B. 0.0010  
C. 0.1      D. 1.00

4) Which choice represents the shaded portion of the number wheel?



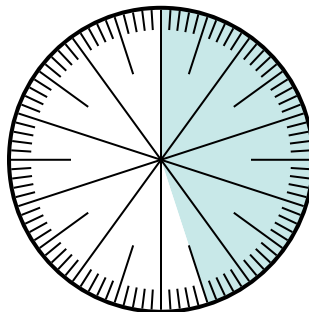
- A. 8.50      B. 0.015  
C. 0.15      D. 15

5) Which choice represents the shaded portion of the number wheel?



- A.  $\frac{60}{100}$       B. 6.00  
C. 0.0060      D. 60.0

6) Which choice represents the shaded portion of the number wheel?



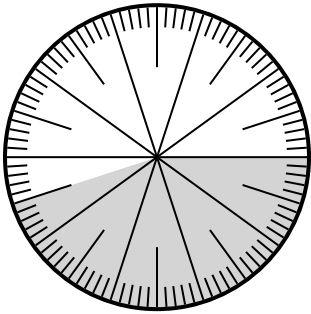
- A.  $\frac{4.5}{100}$       B.  $\frac{0.45}{100}$   
C.  $\frac{45}{100}$       D.  $\frac{45}{55}$

1. \_\_\_\_\_  
2. \_\_\_\_\_  
3. \_\_\_\_\_  
4. \_\_\_\_\_  
5. \_\_\_\_\_  
6. \_\_\_\_\_



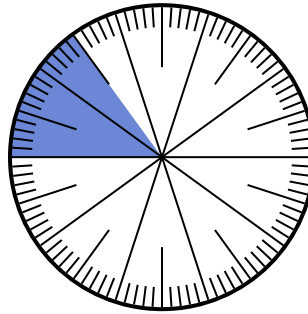
Solve each problem.

- 1) Which choice represents the un-shaded portion of the number wheel?




- A.  $\frac{55}{100}$       B. 5.5  
C. 5.50      D.  $\frac{0.55}{100}$

- 2) Which choice represents the un-shaded portion of the number wheel?



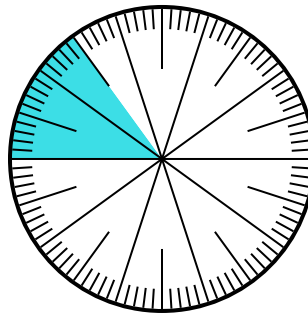
- A.  $\frac{15}{85}$       B. 0.85  
C. 85      D.  $\frac{85}{15}$

- 3) Which choice represents the shaded portion of the number wheel?



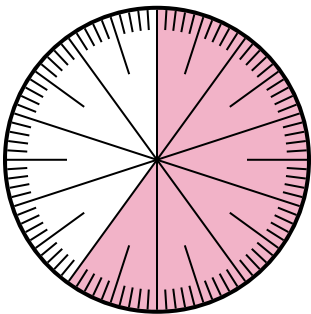
- A.  $\frac{0.1}{100}$       B. 0.0010  
C. 0.1      D. 1.00

- 4) Which choice represents the shaded portion of the number wheel?



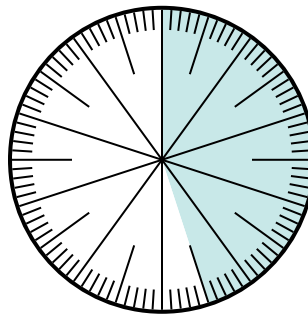
- A. 8.50      B. 0.015  
C. 0.15      D. 15

- 5) Which choice represents the shaded portion of the number wheel?



- A.  $\frac{60}{100}$       B. 6.00  
C. 0.0060      D. 60.0

- 6) Which choice represents the shaded portion of the number wheel?



- A.  $\frac{4.5}{100}$       B.  $\frac{0.45}{100}$   
C.  $\frac{45}{100}$       D.  $\frac{45}{55}$

**Answers**

1.   **A**    
2.   **B**    
3.   **C**    
4.   **C**    
5.   **A**    
6.   **C**