



Use the visual model to solve each problem.

$$\frac{2}{4} \times 3 =$$

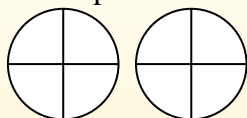
To solve multiplication problems with fractions one strategy is to think of them as addition problems.

For example the problem above is the same as:

$$\frac{2}{4} + \frac{2}{4} + \frac{2}{4}$$

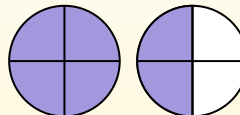
$$\frac{2}{4} \times 3 =$$

If we shade in $\frac{2}{4}$ on the fractions below 3 times we can see a visual representation of the problem.



$$\frac{2}{4} \times 3 = 1 \frac{2}{4}$$

After shading it in we can see why $\frac{2}{4}$ three times is equal to 1 whole and $\frac{2}{4}$.



Answers

1. _____

2. _____

3. _____

4. _____

5. _____

6. _____

7. _____

8. _____

9. _____

10. _____

11. _____

12. _____

1) $\frac{1}{4} \times 2 =$

2) $\frac{1}{5} \times 5 =$

3) $\frac{1}{8} \times 5 =$

4) $\frac{5}{12} \times 4 =$

5) $\frac{7}{12} \times 3 =$

6) $\frac{1}{3} \times 3 =$

7) $\frac{2}{3} \times 6 =$

8) $\frac{2}{3} \times 4 =$

9) $\frac{2}{12} \times 5 =$

10) $\frac{3}{5} \times 7 =$

11) $\frac{6}{8} \times 5 =$

12) $\frac{6}{10} \times 3 =$



Use the visual model to solve each problem.

$$\frac{2}{4} \times 3 =$$

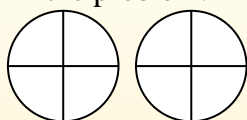
To solve multiplication problems with fractions one strategy is to think of them as addition problems.

For example the problem above is the same as:

$$\frac{2}{4} + \frac{2}{4} + \frac{2}{4}$$

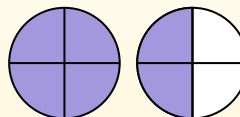
$$\frac{2}{4} \times 3 =$$

If we shade in $\frac{2}{4}$ on the fractions below 3 times we can see a visual representation of the problem.

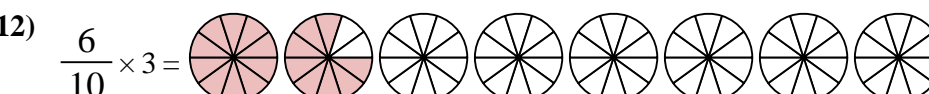
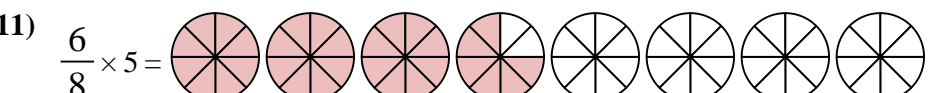
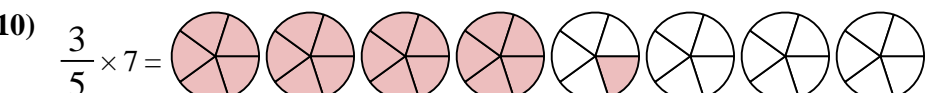
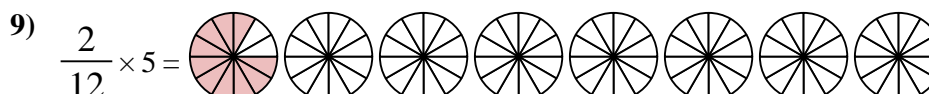
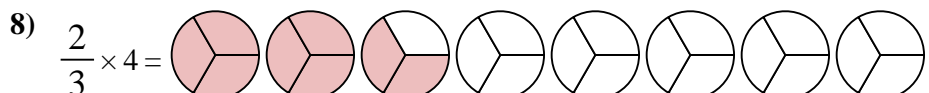
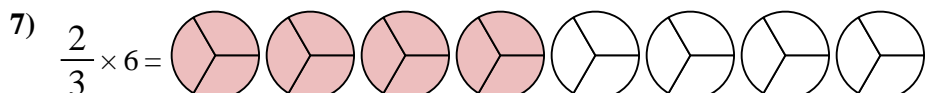
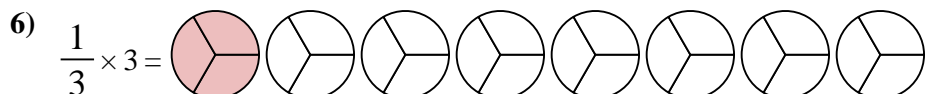
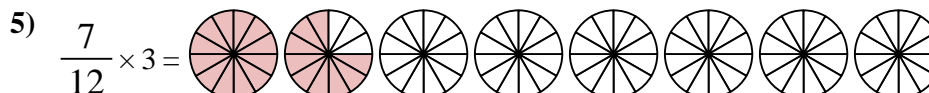
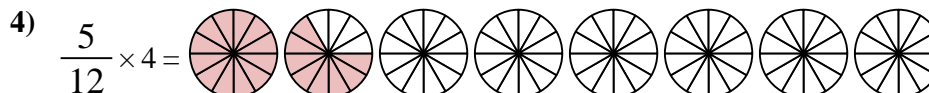
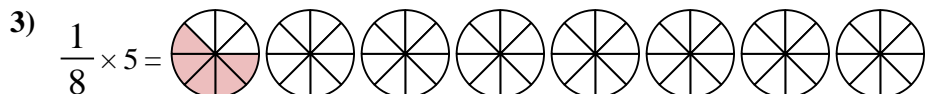

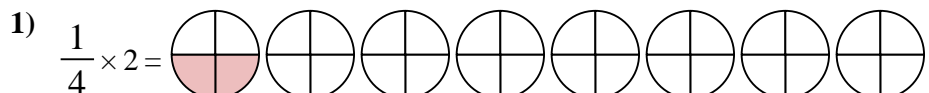


$$\frac{2}{4} \times 3 = 1 \frac{2}{4}$$

After shading it in we can see why $\frac{2}{4}$ three times is equal to 1 whole and $\frac{2}{4}$.



Answers



1. $\frac{2}{4}$
2. $1 \frac{0}{5}$
3. $\frac{5}{8}$
4. $1 \frac{8}{12}$
5. $1 \frac{9}{12}$
6. $1 \frac{0}{3}$
7. $4 \frac{0}{3}$
8. $2 \frac{2}{3}$
9. $\frac{10}{12}$
10. $4 \frac{1}{5}$
11. $3 \frac{6}{8}$
12. $1 \frac{8}{10}$