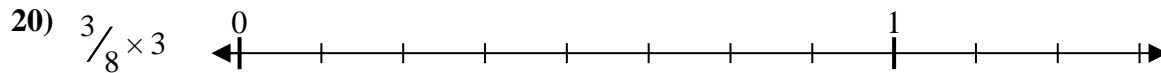
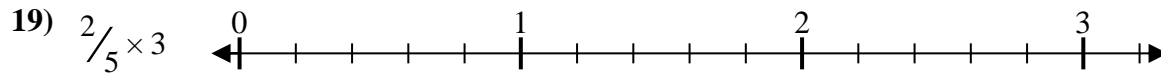
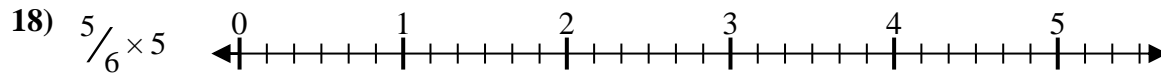
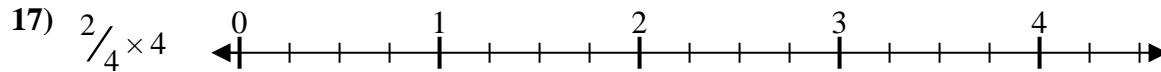
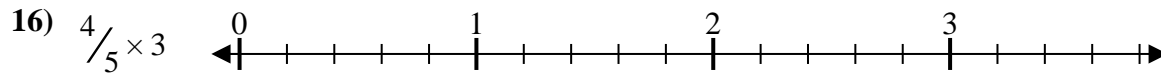
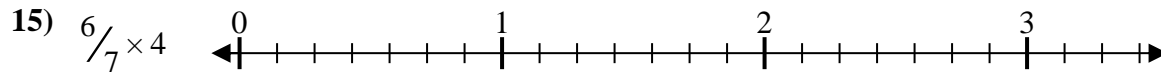
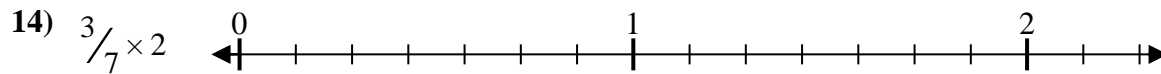
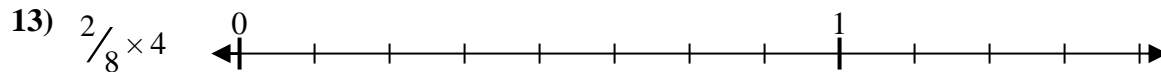
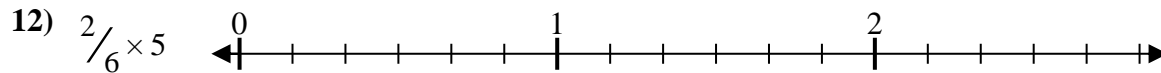
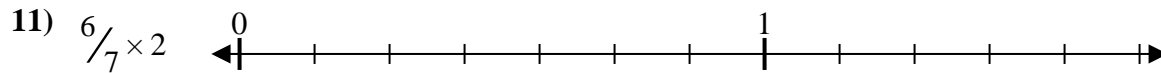
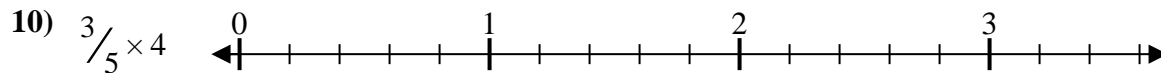
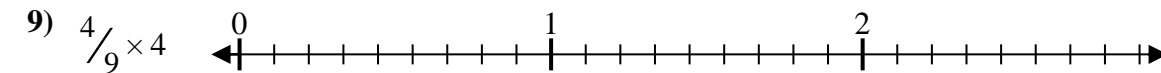
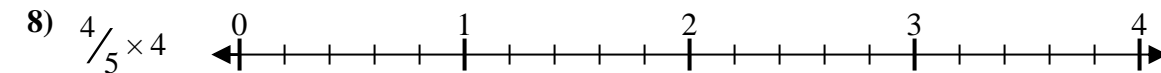
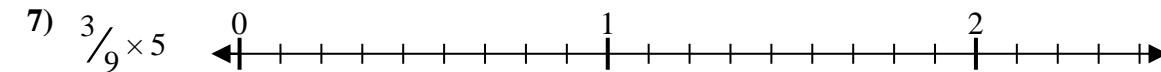
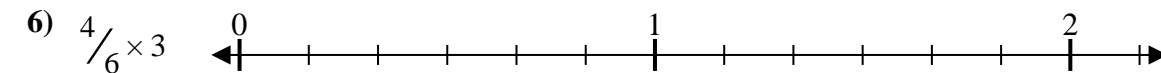
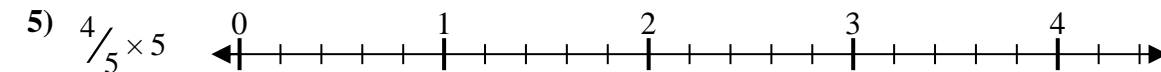
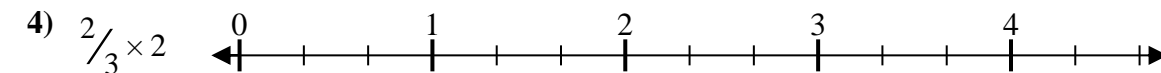

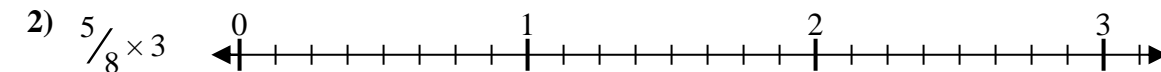
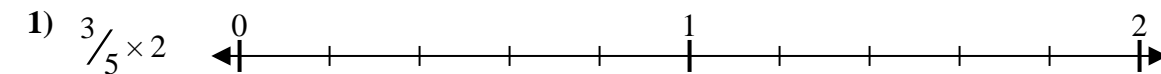




Solve each problem.

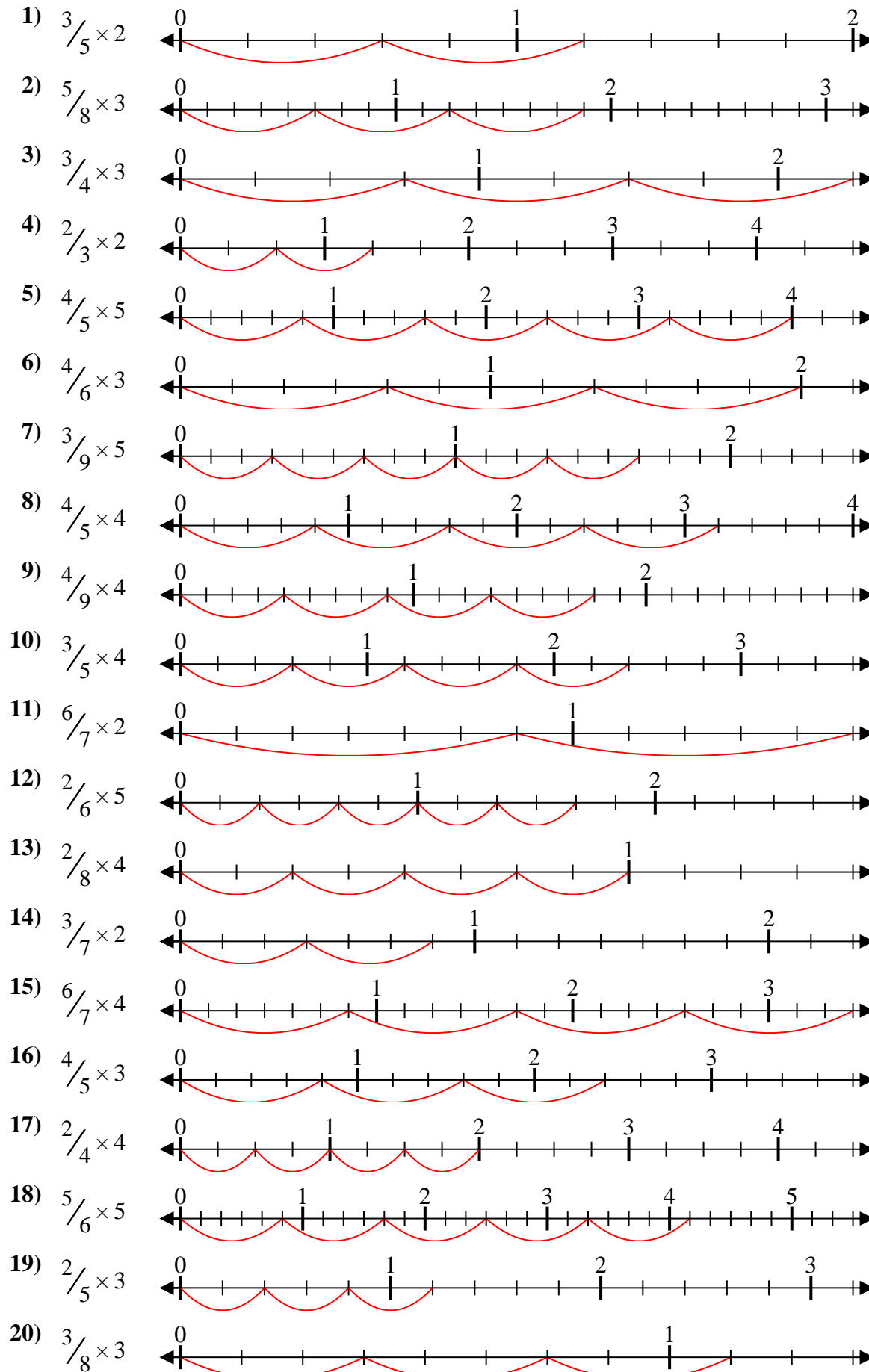
**Answers**



1. \_\_\_\_\_
2. \_\_\_\_\_
3. \_\_\_\_\_
4. \_\_\_\_\_
5. \_\_\_\_\_
6. \_\_\_\_\_
7. \_\_\_\_\_
8. \_\_\_\_\_
9. \_\_\_\_\_
10. \_\_\_\_\_
11. \_\_\_\_\_
12. \_\_\_\_\_
13. \_\_\_\_\_
14. \_\_\_\_\_
15. \_\_\_\_\_
16. \_\_\_\_\_
17. \_\_\_\_\_
18. \_\_\_\_\_
19. \_\_\_\_\_
20. \_\_\_\_\_



Solve each problem.



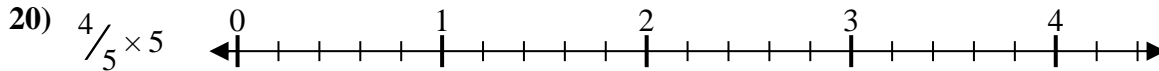
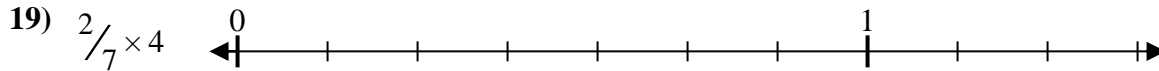
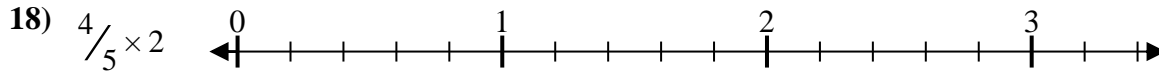
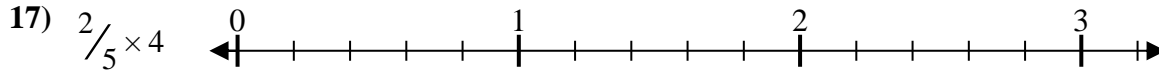
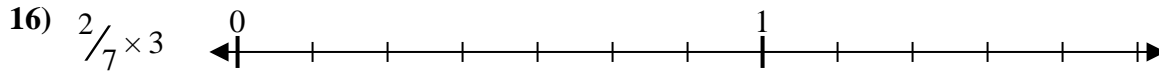
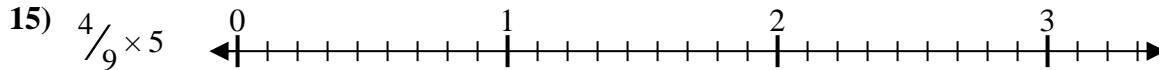
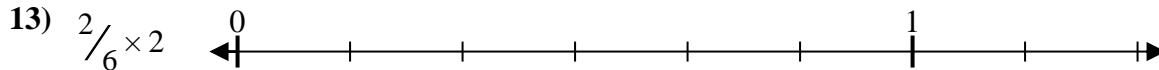
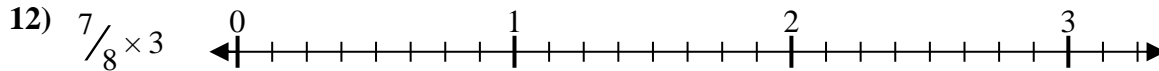
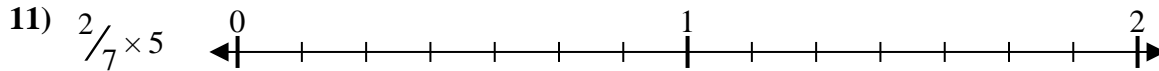
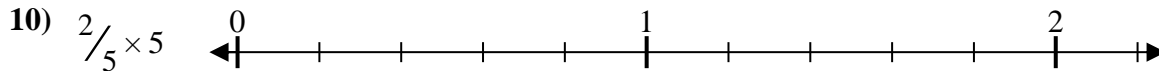
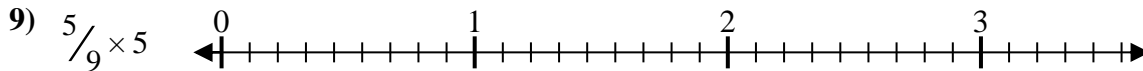

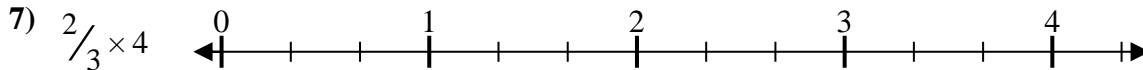
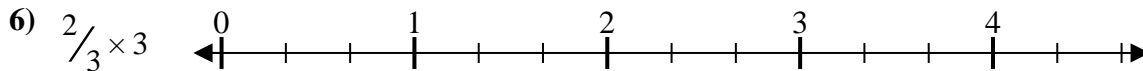
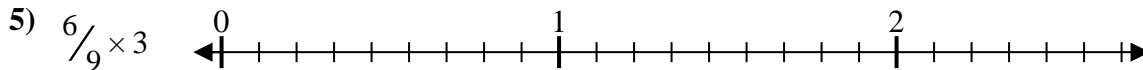
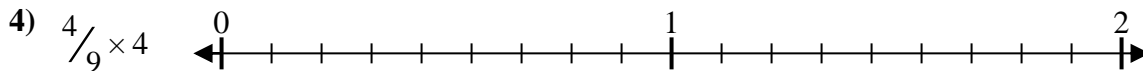
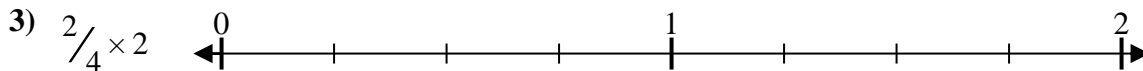
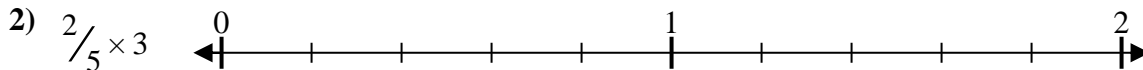
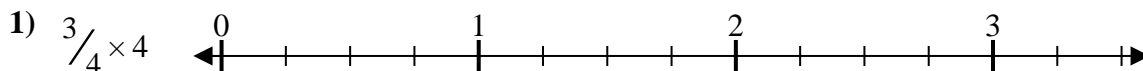
**Answers**

1.  $\frac{6}{5} = 1\frac{1}{5}$
2.  $\frac{15}{8} = 1\frac{7}{8}$
3.  $\frac{9}{4} = 2\frac{1}{4}$
4.  $\frac{4}{3} = 1\frac{1}{3}$
5.  $\frac{20}{5} = 4$
6.  $\frac{12}{6} = 2$
7.  $\frac{15}{9} = 1\frac{2}{3}$
8.  $\frac{16}{5} = 3\frac{1}{5}$
9.  $\frac{16}{9} = 1\frac{7}{9}$
10.  $\frac{12}{5} = 2\frac{2}{5}$
11.  $\frac{12}{7} = 1\frac{5}{7}$
12.  $\frac{10}{6} = 1\frac{2}{3}$
13.  $\frac{8}{8} = 1$
14.  $\frac{6}{7} = \frac{6}{7}$
15.  $\frac{24}{7} = 3\frac{3}{7}$
16.  $\frac{12}{5} = 2\frac{2}{5}$
17.  $\frac{8}{4} = 2$
18.  $\frac{25}{6} = 4\frac{1}{6}$
19.  $\frac{6}{5} = 1\frac{1}{5}$
20.  $\frac{9}{8} = 1\frac{1}{8}$



Solve each problem.

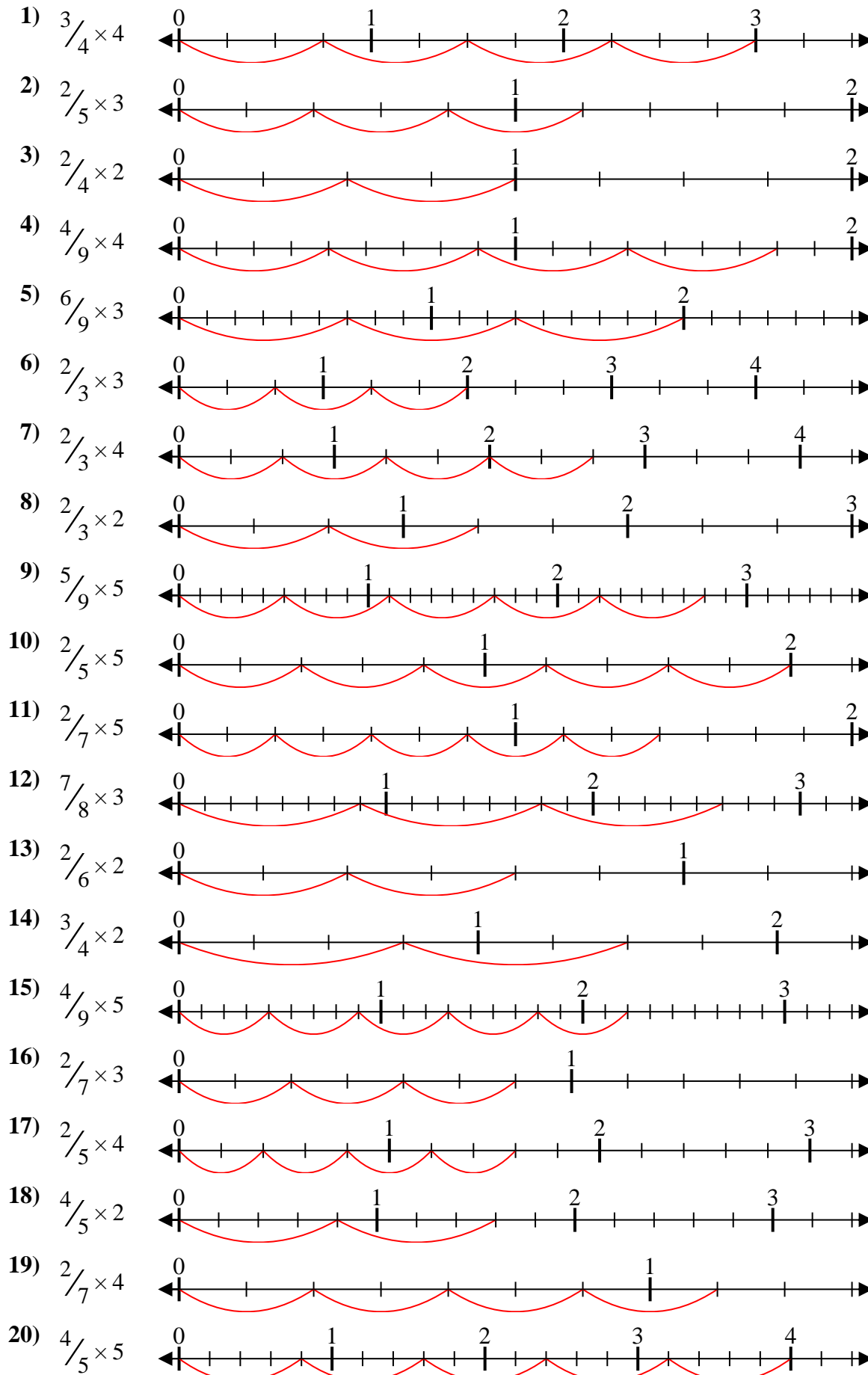
Answers



1. \_\_\_\_\_
2. \_\_\_\_\_
3. \_\_\_\_\_
4. \_\_\_\_\_
5. \_\_\_\_\_
6. \_\_\_\_\_
7. \_\_\_\_\_
8. \_\_\_\_\_
9. \_\_\_\_\_
10. \_\_\_\_\_
11. \_\_\_\_\_
12. \_\_\_\_\_
13. \_\_\_\_\_
14. \_\_\_\_\_
15. \_\_\_\_\_
16. \_\_\_\_\_
17. \_\_\_\_\_
18. \_\_\_\_\_
19. \_\_\_\_\_
20. \_\_\_\_\_



Solve each problem.



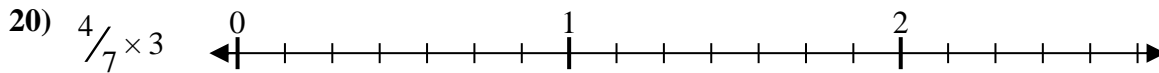
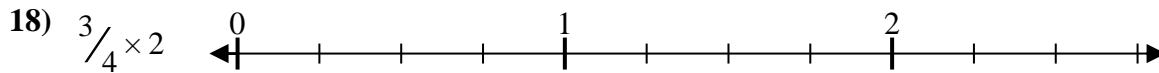
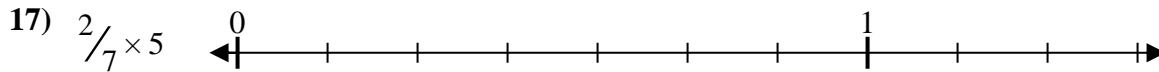

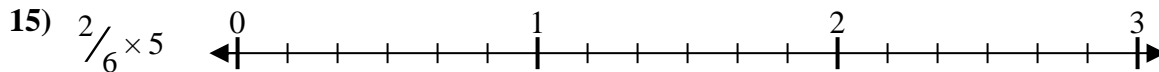
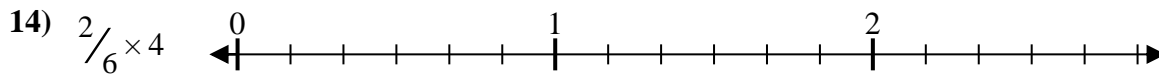
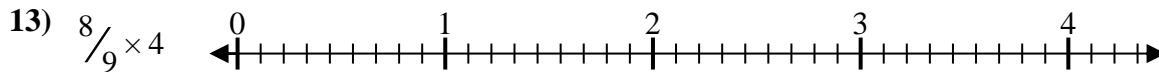
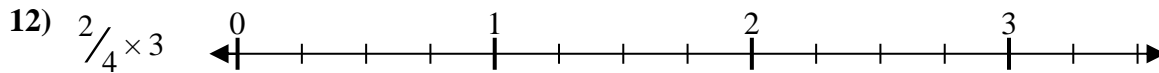

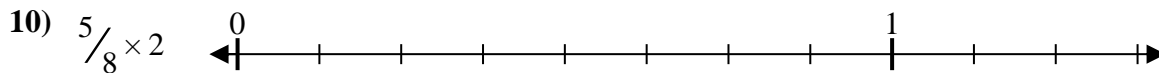
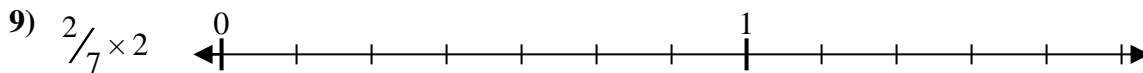
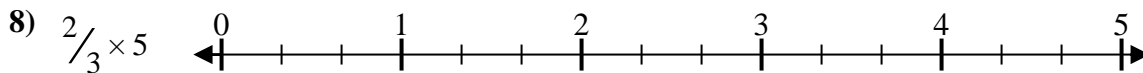
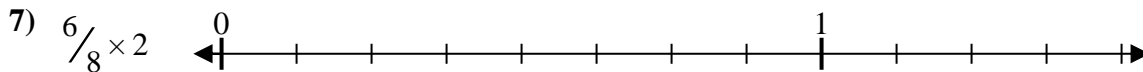
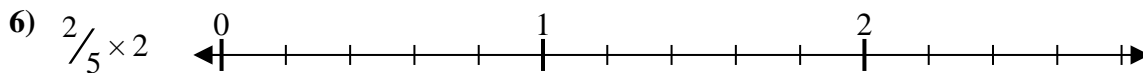
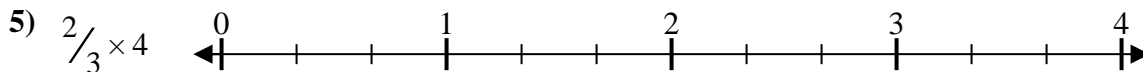
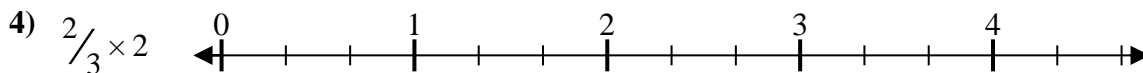
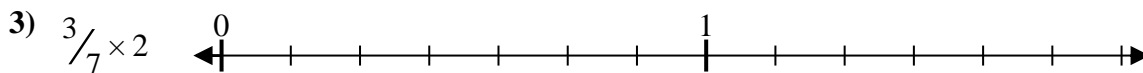
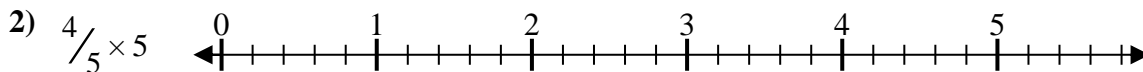
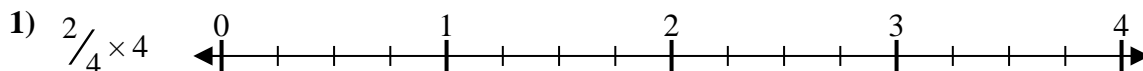
**Answers**

1.  $\frac{12}{4} = 3$
2.  $\frac{6}{5} = 1\frac{1}{5}$
3.  $\frac{4}{4} = 1$
4.  $\frac{16}{9} = 1\frac{7}{9}$
5.  $\frac{18}{9} = 2$
6.  $\frac{6}{3} = 2$
7.  $\frac{8}{3} = 2\frac{2}{3}$
8.  $\frac{4}{3} = 1\frac{1}{3}$
9.  $\frac{25}{9} = 2\frac{7}{9}$
10.  $\frac{10}{5} = 2$
11.  $\frac{10}{7} = 1\frac{3}{7}$
12.  $\frac{21}{8} = 2\frac{5}{8}$
13.  $\frac{4}{6} = \frac{2}{3}$
14.  $\frac{6}{4} = 1\frac{1}{2}$
15.  $\frac{20}{9} = 2\frac{2}{9}$
16.  $\frac{6}{7} = \frac{6}{7}$
17.  $\frac{8}{5} = 1\frac{3}{5}$
18.  $\frac{8}{5} = 1\frac{3}{5}$
19.  $\frac{8}{7} = 1\frac{1}{7}$
20.  $\frac{20}{5} = 4$



Solve each problem.

Answers



1. \_\_\_\_\_

2. \_\_\_\_\_

3. \_\_\_\_\_

4. \_\_\_\_\_

5. \_\_\_\_\_

6. \_\_\_\_\_

7. \_\_\_\_\_

8. \_\_\_\_\_

9. \_\_\_\_\_

10. \_\_\_\_\_

11. \_\_\_\_\_

12. \_\_\_\_\_

13. \_\_\_\_\_

14. \_\_\_\_\_

15. \_\_\_\_\_

16. \_\_\_\_\_

17. \_\_\_\_\_

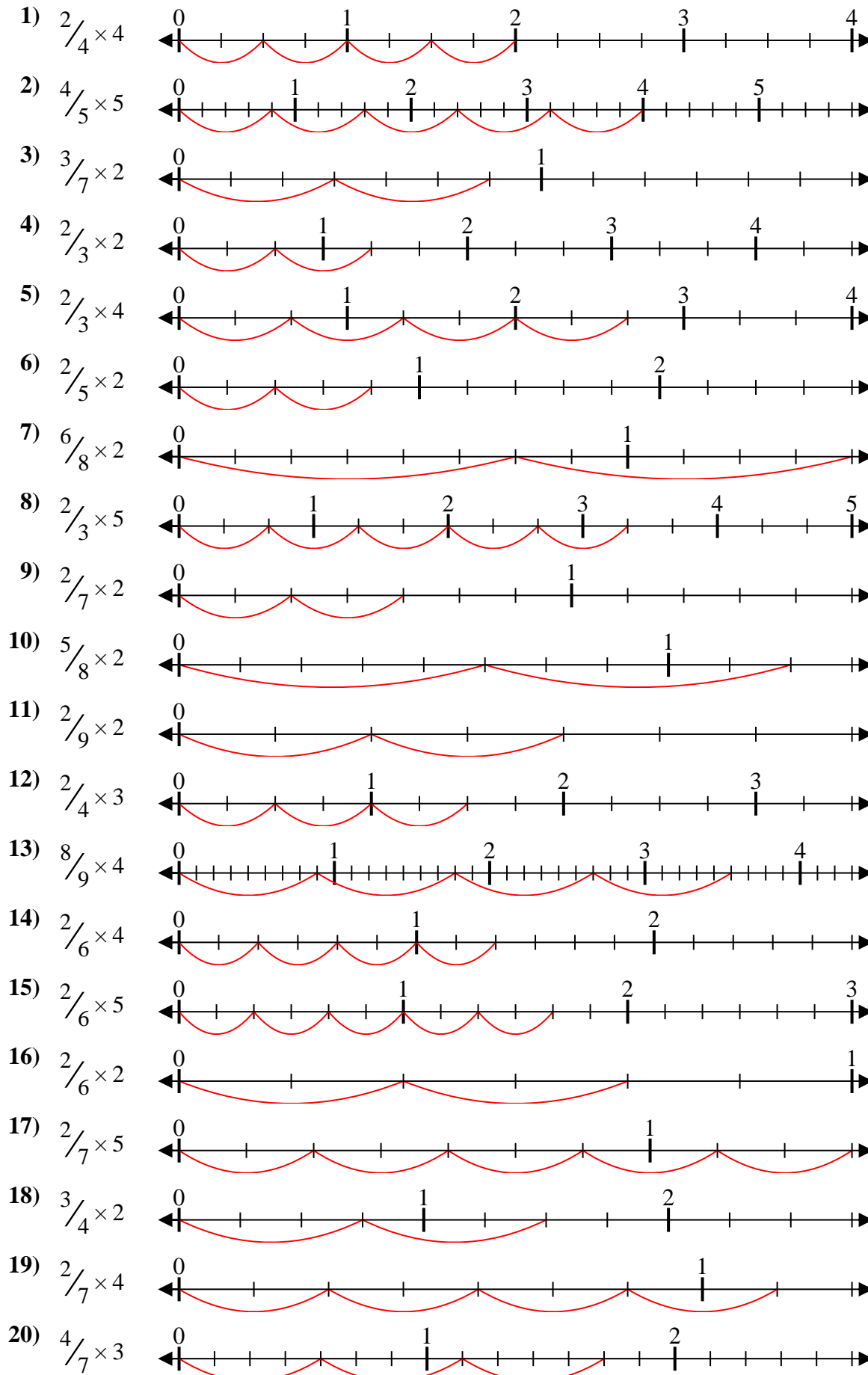
18. \_\_\_\_\_

19. \_\_\_\_\_

20. \_\_\_\_\_



Solve each problem.



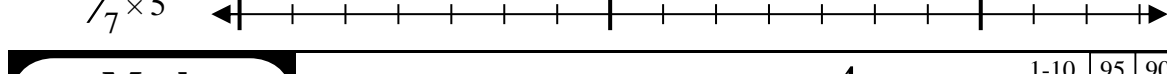
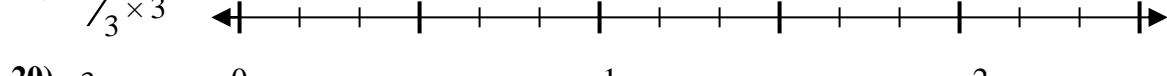

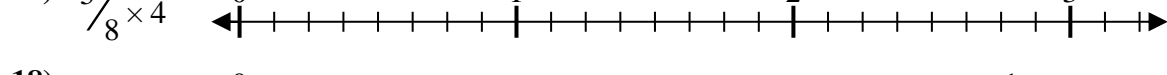
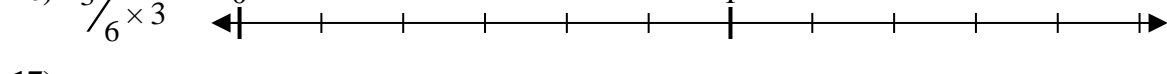
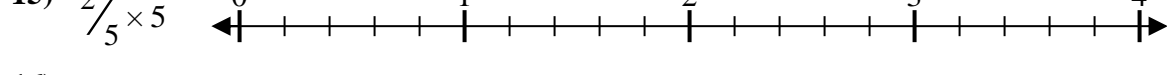
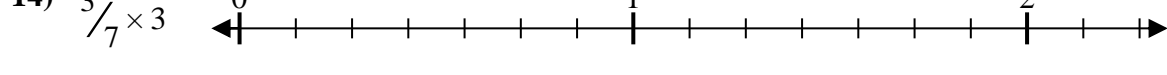
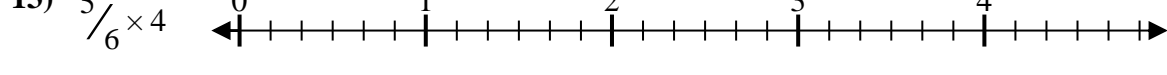

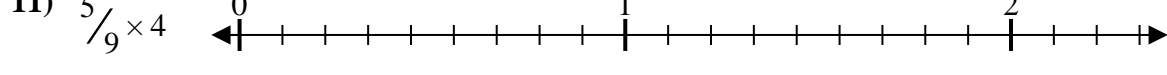
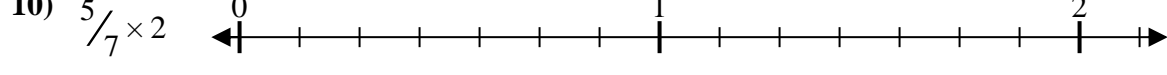
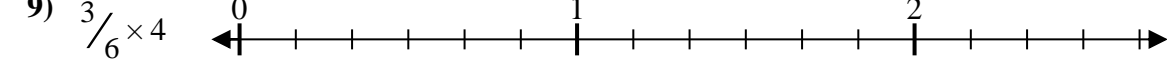
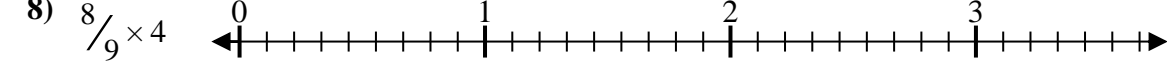
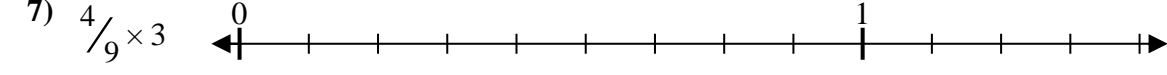
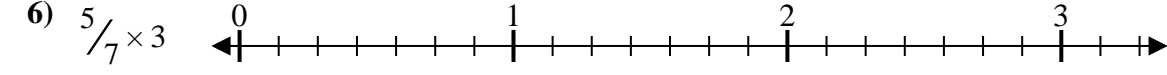

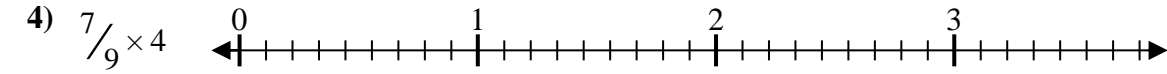
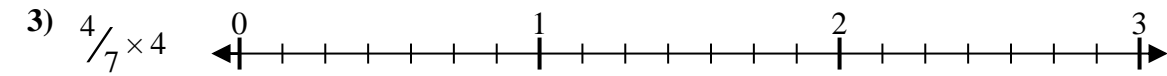
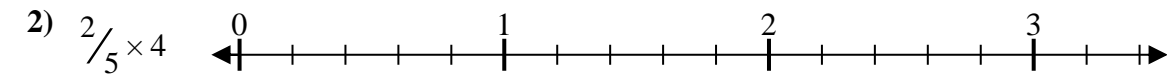
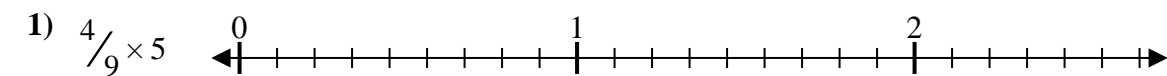
**Answers**

1.  $\frac{8}{4} = 2$
2.  $\frac{20}{5} = 4$
3.  $\frac{6}{7} = \frac{6}{7}$
4.  $\frac{4}{3} = 1\frac{1}{3}$
5.  $\frac{8}{3} = 2\frac{2}{3}$
6.  $\frac{4}{5} = \frac{4}{5}$
7.  $\frac{12}{8} = 1\frac{1}{2}$
8.  $\frac{10}{3} = 3\frac{1}{3}$
9.  $\frac{4}{7} = \frac{4}{7}$
10.  $\frac{10}{8} = 1\frac{1}{4}$
11.  $\frac{4}{9} = \frac{4}{9}$
12.  $\frac{6}{4} = 1\frac{1}{2}$
13.  $\frac{32}{9} = 3\frac{5}{9}$
14.  $\frac{8}{6} = 1\frac{1}{3}$
15.  $\frac{10}{6} = 1\frac{2}{3}$
16.  $\frac{4}{6} = \frac{2}{3}$
17.  $\frac{10}{7} = 1\frac{3}{7}$
18.  $\frac{6}{4} = 1\frac{1}{2}$
19.  $\frac{8}{7} = 1\frac{1}{7}$
20.  $\frac{12}{7} = 1\frac{5}{7}$



Solve each problem.

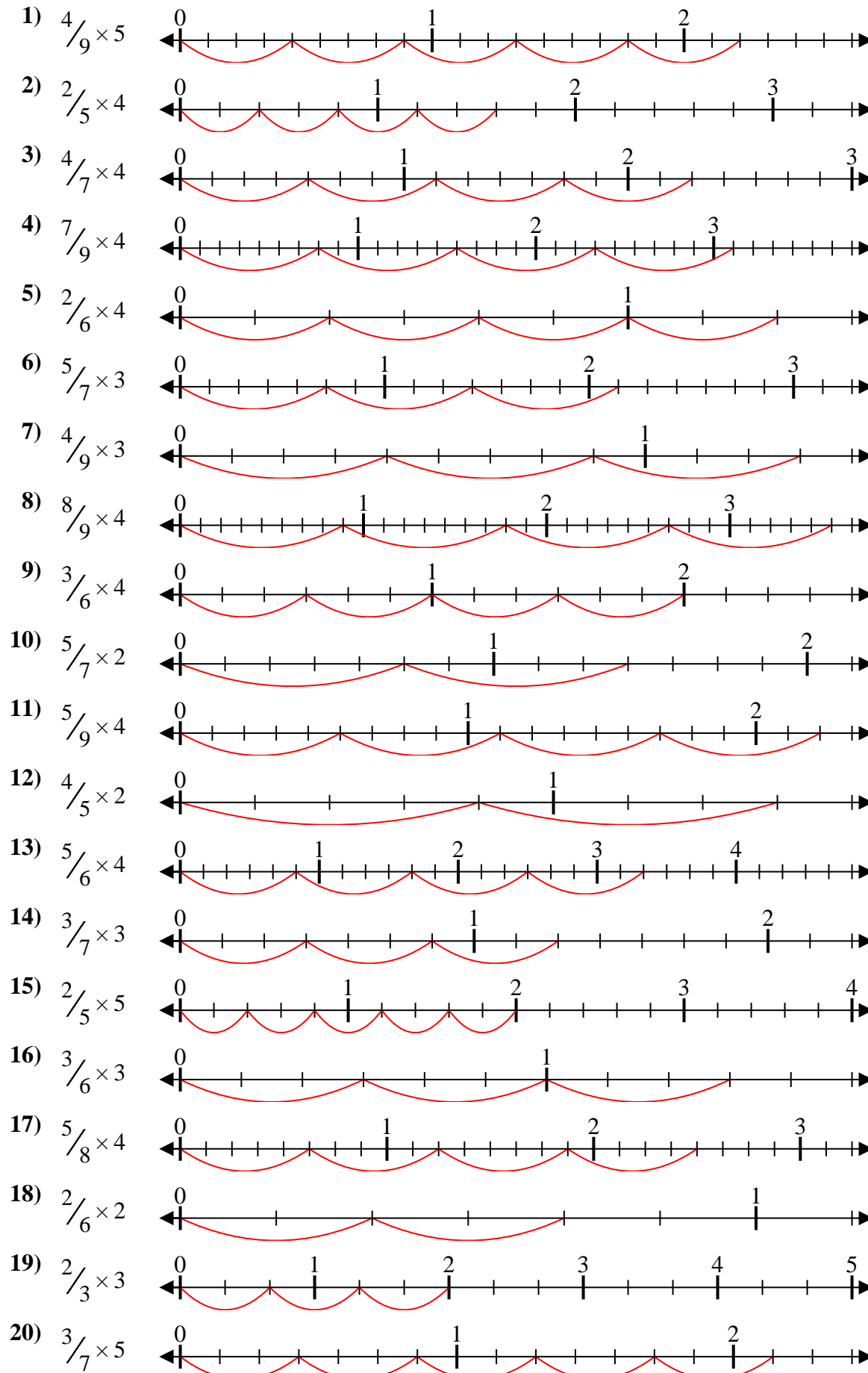
Answers



1. \_\_\_\_\_
2. \_\_\_\_\_
3. \_\_\_\_\_
4. \_\_\_\_\_
5. \_\_\_\_\_
6. \_\_\_\_\_
7. \_\_\_\_\_
8. \_\_\_\_\_
9. \_\_\_\_\_
10. \_\_\_\_\_
11. \_\_\_\_\_
12. \_\_\_\_\_
13. \_\_\_\_\_
14. \_\_\_\_\_
15. \_\_\_\_\_
16. \_\_\_\_\_
17. \_\_\_\_\_
18. \_\_\_\_\_
19. \_\_\_\_\_
20. \_\_\_\_\_



Solve each problem.



**Answers**

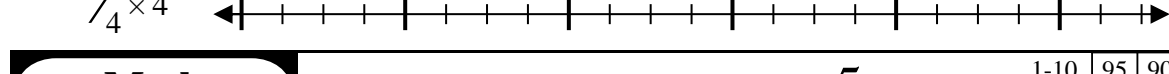
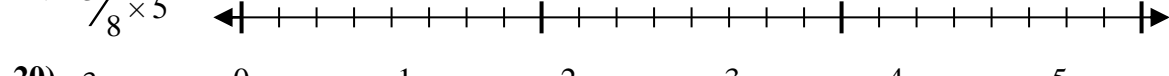
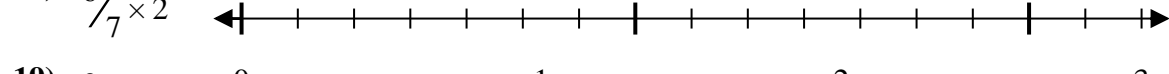
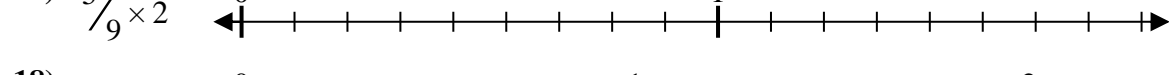
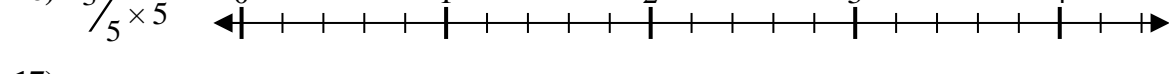
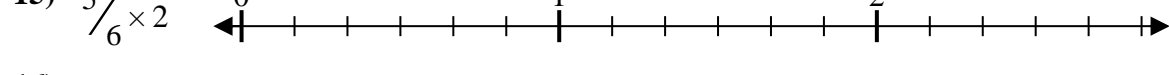
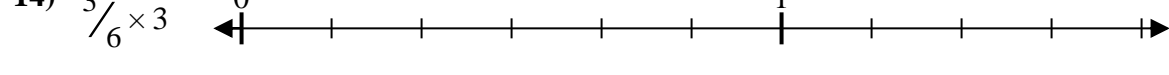
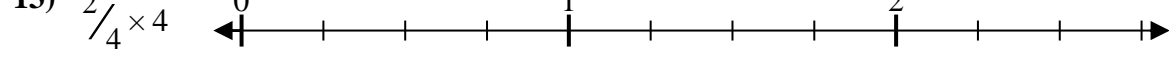
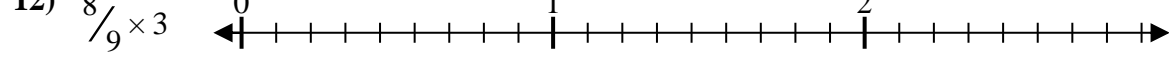
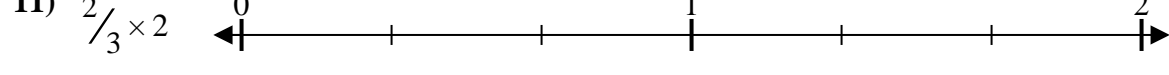
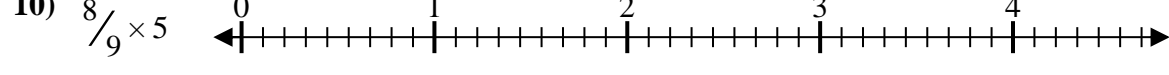
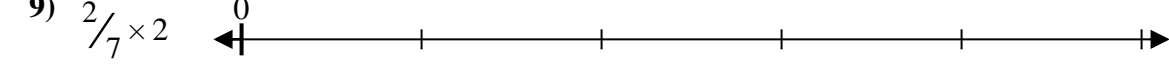
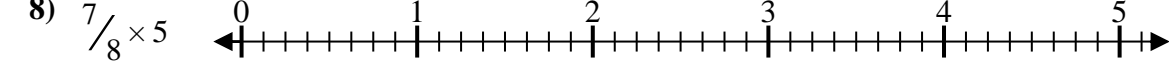
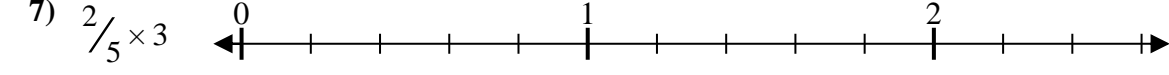
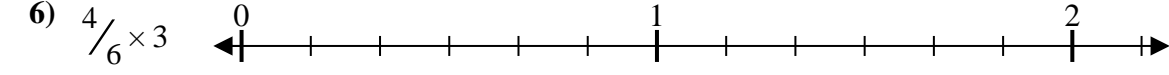
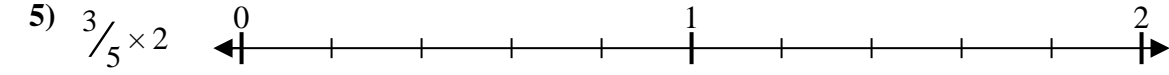
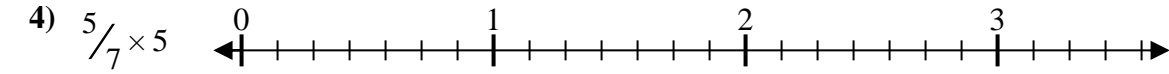
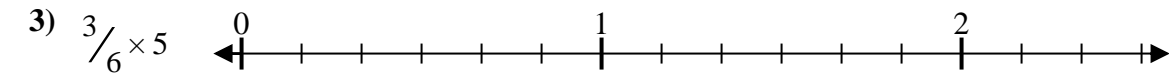
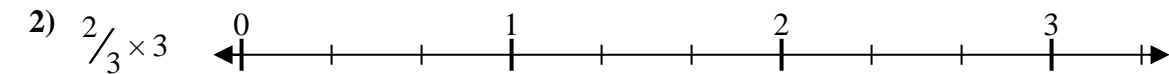
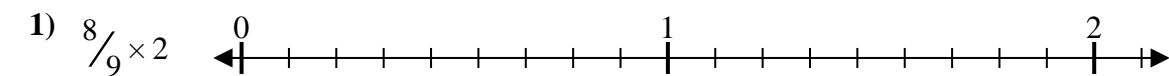
1.  $\frac{20}{9} = 2\frac{2}{9}$
2.  $\frac{8}{5} = 1\frac{3}{5}$
3.  $\frac{16}{7} = 2\frac{2}{7}$
4.  $\frac{28}{9} = 3\frac{1}{9}$
5.  $\frac{8}{6} = 1\frac{1}{3}$
6.  $\frac{15}{7} = 2\frac{1}{7}$
7.  $\frac{12}{9} = 1\frac{1}{3}$
8.  $\frac{32}{9} = 3\frac{5}{9}$
9.  $\frac{12}{6} = 2$
10.  $\frac{10}{7} = 1\frac{3}{7}$
11.  $\frac{20}{9} = 2\frac{2}{9}$
12.  $\frac{8}{5} = 1\frac{3}{5}$
13.  $\frac{20}{6} = 3\frac{1}{3}$
14.  $\frac{9}{7} = 1\frac{2}{7}$
15.  $\frac{10}{5} = 2$
16.  $\frac{9}{6} = 1\frac{1}{2}$
17.  $\frac{20}{8} = 2\frac{1}{2}$
18.  $\frac{4}{6} = \frac{2}{3}$
19.  $\frac{6}{3} = 2$
20.  $\frac{15}{7} = 2\frac{1}{7}$





Solve each problem.

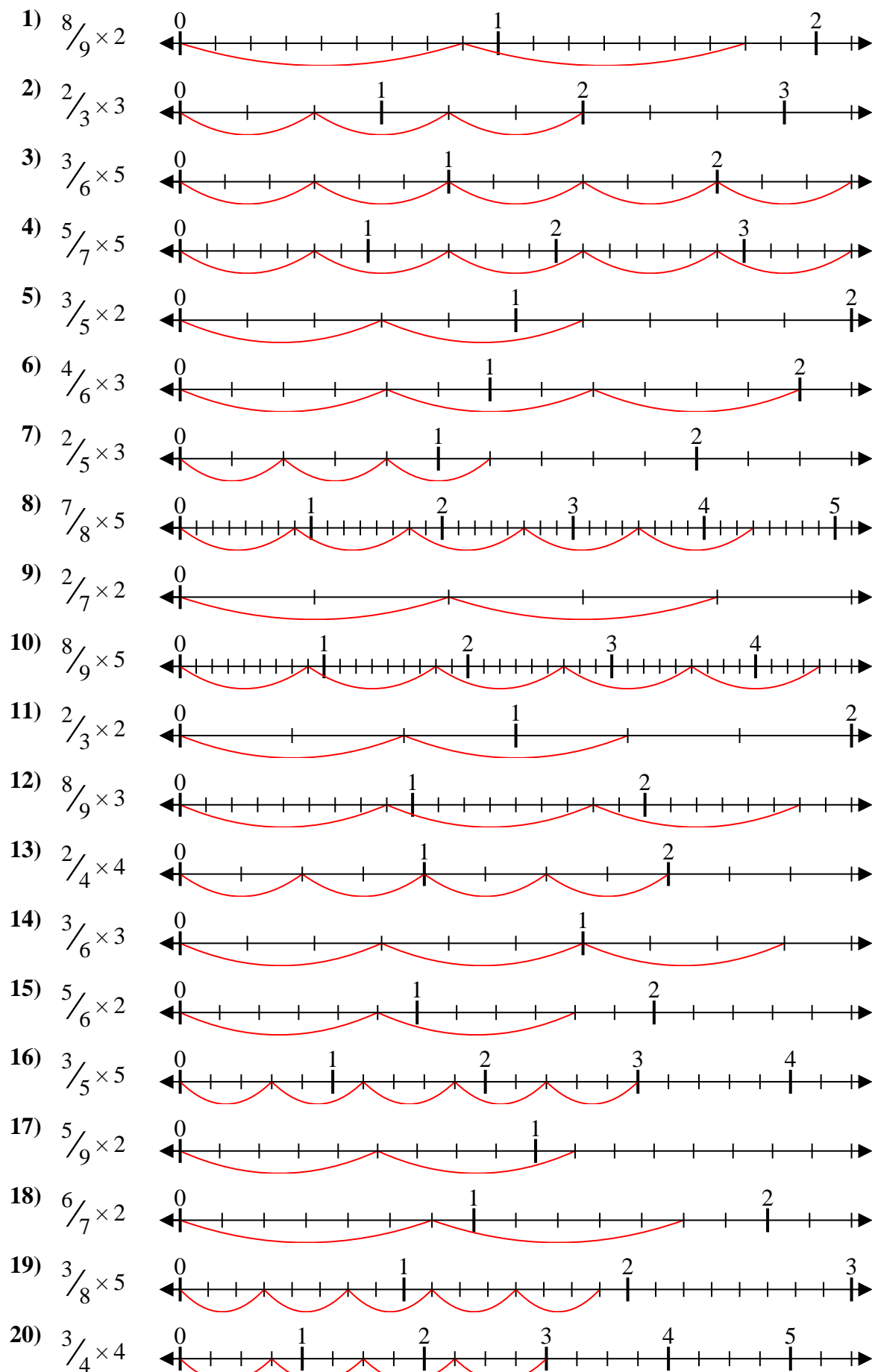
Answers



1. \_\_\_\_\_
2. \_\_\_\_\_
3. \_\_\_\_\_
4. \_\_\_\_\_
5. \_\_\_\_\_
6. \_\_\_\_\_
7. \_\_\_\_\_
8. \_\_\_\_\_
9. \_\_\_\_\_
10. \_\_\_\_\_
11. \_\_\_\_\_
12. \_\_\_\_\_
13. \_\_\_\_\_
14. \_\_\_\_\_
15. \_\_\_\_\_
16. \_\_\_\_\_
17. \_\_\_\_\_
18. \_\_\_\_\_
19. \_\_\_\_\_
20. \_\_\_\_\_



Solve each problem.



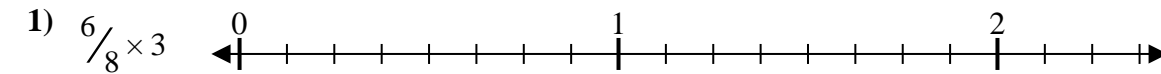
**Answers**

1.  $\frac{16}{9} = 1\frac{7}{9}$
2.  $\frac{6}{3} = 2$
3.  $\frac{15}{6} = 2\frac{1}{2}$
4.  $\frac{25}{7} = 3\frac{4}{7}$
5.  $\frac{6}{5} = 1\frac{1}{5}$
6.  $\frac{12}{6} = 2$
7.  $\frac{6}{5} = 1\frac{1}{5}$
8.  $\frac{35}{8} = 4\frac{3}{8}$
9.  $\frac{4}{7} = \frac{4}{7}$
10.  $\frac{40}{9} = 4\frac{4}{9}$
11.  $\frac{4}{3} = 1\frac{1}{3}$
12.  $\frac{24}{9} = 2\frac{2}{3}$
13.  $\frac{8}{4} = 2$
14.  $\frac{9}{6} = 1\frac{1}{2}$
15.  $\frac{10}{6} = 1\frac{2}{3}$
16.  $\frac{15}{5} = 3$
17.  $\frac{10}{9} = 1\frac{1}{9}$
18.  $\frac{12}{7} = 1\frac{5}{7}$
19.  $\frac{15}{8} = 1\frac{7}{8}$
20.  $\frac{12}{4} = 3$

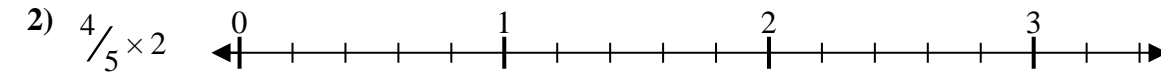


Solve each problem.

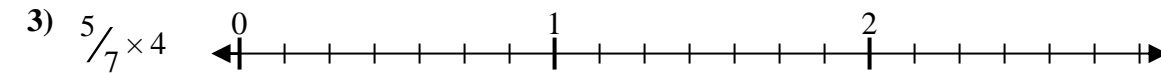
**Answers**



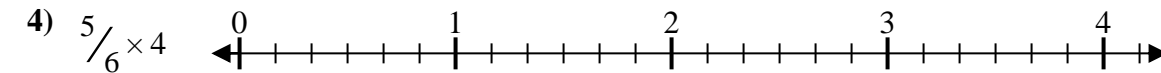
1. \_\_\_\_\_



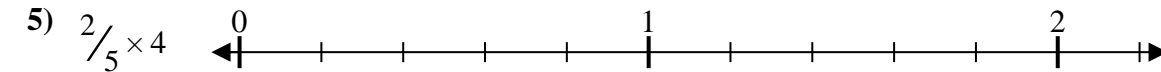
2. \_\_\_\_\_



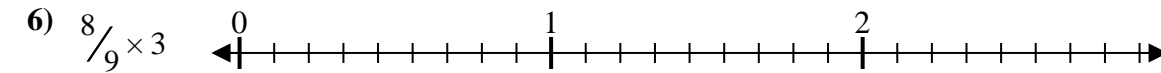
3. \_\_\_\_\_



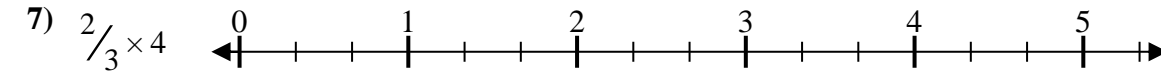
4. \_\_\_\_\_



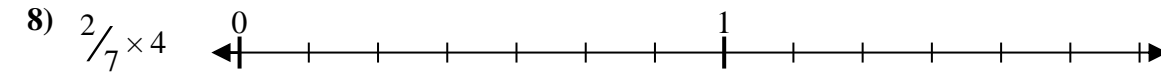
5. \_\_\_\_\_



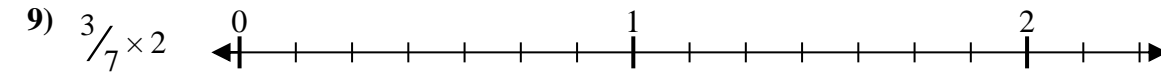
6. \_\_\_\_\_



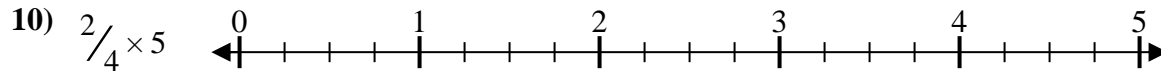
7. \_\_\_\_\_



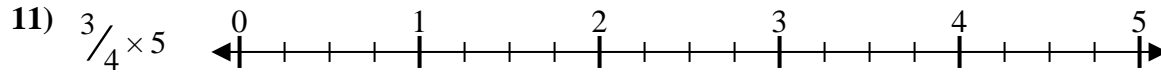
8. \_\_\_\_\_



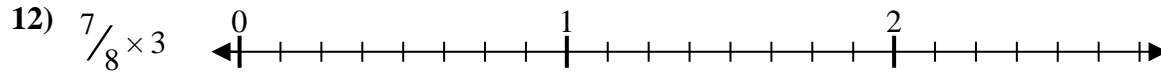
9. \_\_\_\_\_



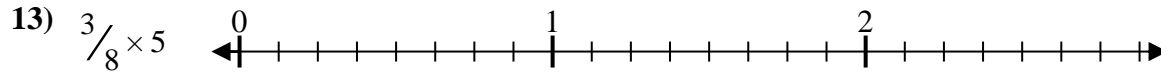
10. \_\_\_\_\_



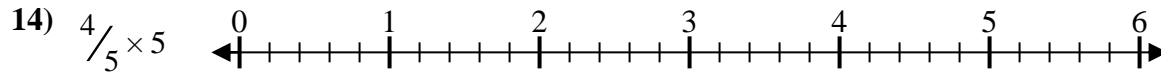
11. \_\_\_\_\_



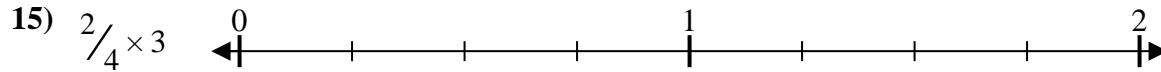
12. \_\_\_\_\_



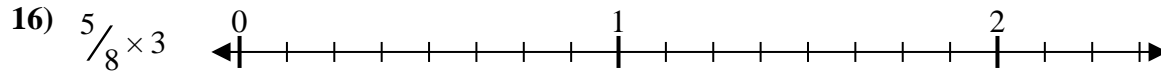
13. \_\_\_\_\_



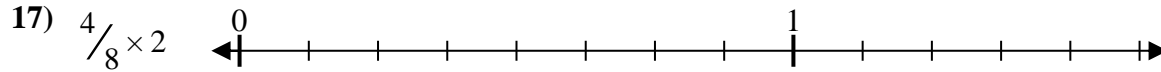
14. \_\_\_\_\_



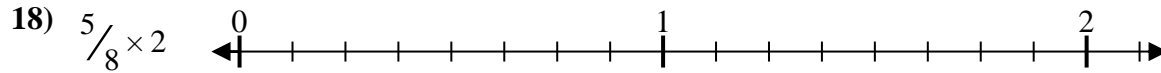
15. \_\_\_\_\_



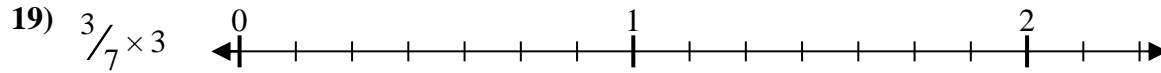
16. \_\_\_\_\_



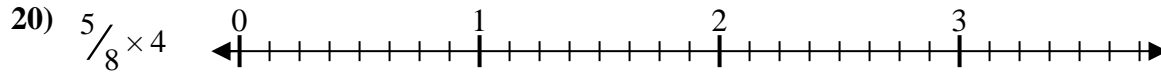
17. \_\_\_\_\_



18. \_\_\_\_\_



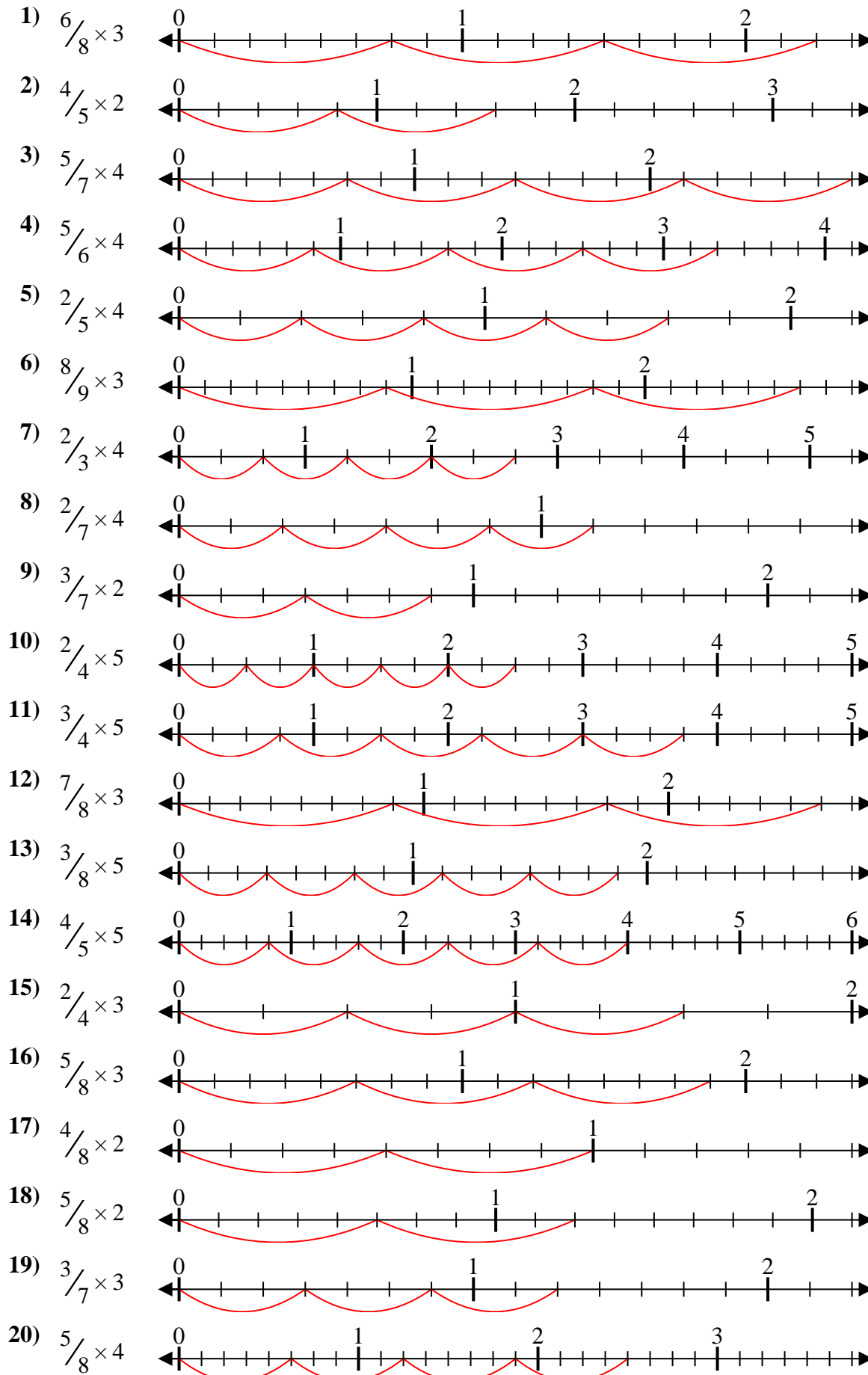
19. \_\_\_\_\_



20. \_\_\_\_\_



Solve each problem.



**Answers**

1.  $\frac{18}{8} = 2\frac{1}{4}$
2.  $\frac{8}{5} = 1\frac{3}{5}$
3.  $\frac{20}{7} = 2\frac{6}{7}$
4.  $\frac{20}{6} = 3\frac{1}{3}$
5.  $\frac{8}{5} = 1\frac{3}{5}$
6.  $\frac{24}{9} = 2\frac{2}{3}$
7.  $\frac{8}{3} = 2\frac{2}{3}$
8.  $\frac{8}{7} = 1\frac{1}{7}$
9.  $\frac{6}{7} = \frac{6}{7}$
10.  $\frac{10}{4} = 2\frac{1}{2}$
11.  $\frac{15}{4} = 3\frac{3}{4}$
12.  $\frac{21}{8} = 2\frac{5}{8}$
13.  $\frac{15}{8} = 1\frac{7}{8}$
14.  $\frac{20}{5} = 4$
15.  $\frac{6}{4} = 1\frac{1}{2}$
16.  $\frac{15}{8} = 1\frac{7}{8}$
17.  $\frac{8}{8} = 1$
18.  $\frac{10}{8} = 1\frac{1}{4}$
19.  $\frac{9}{7} = 1\frac{2}{7}$
20.  $\frac{20}{8} = 2\frac{1}{2}$



Solve each problem.

**Answers**

1)  $\frac{5}{9} \times 3$

2)  $\frac{2}{4} \times 3$

3)  $\frac{2}{5} \times 4$

4)  $\frac{2}{4} \times 5$

5)  $\frac{2}{6} \times 2$

6)  $\frac{7}{8} \times 5$

7)  $\frac{6}{9} \times 2$

8)  $\frac{6}{8} \times 2$

9)  $\frac{3}{8} \times 2$

10)  $\frac{5}{9} \times 4$

11)  $\frac{2}{7} \times 3$

12)  $\frac{2}{3} \times 5$

13)  $\frac{3}{5} \times 5$

14)  $\frac{2}{5} \times 5$

15)  $\frac{4}{7} \times 4$

16)  $\frac{3}{5} \times 3$

17)  $\frac{2}{9} \times 2$

18)  $\frac{2}{3} \times 4$

19)  $\frac{6}{8} \times 4$

20)  $\frac{3}{4} \times 5$

1. \_\_\_\_\_

2. \_\_\_\_\_

3. \_\_\_\_\_

4. \_\_\_\_\_

5. \_\_\_\_\_

6. \_\_\_\_\_

7. \_\_\_\_\_

8. \_\_\_\_\_

9. \_\_\_\_\_

10. \_\_\_\_\_

11. \_\_\_\_\_

12. \_\_\_\_\_

13. \_\_\_\_\_

14. \_\_\_\_\_

15. \_\_\_\_\_

16. \_\_\_\_\_

17. \_\_\_\_\_

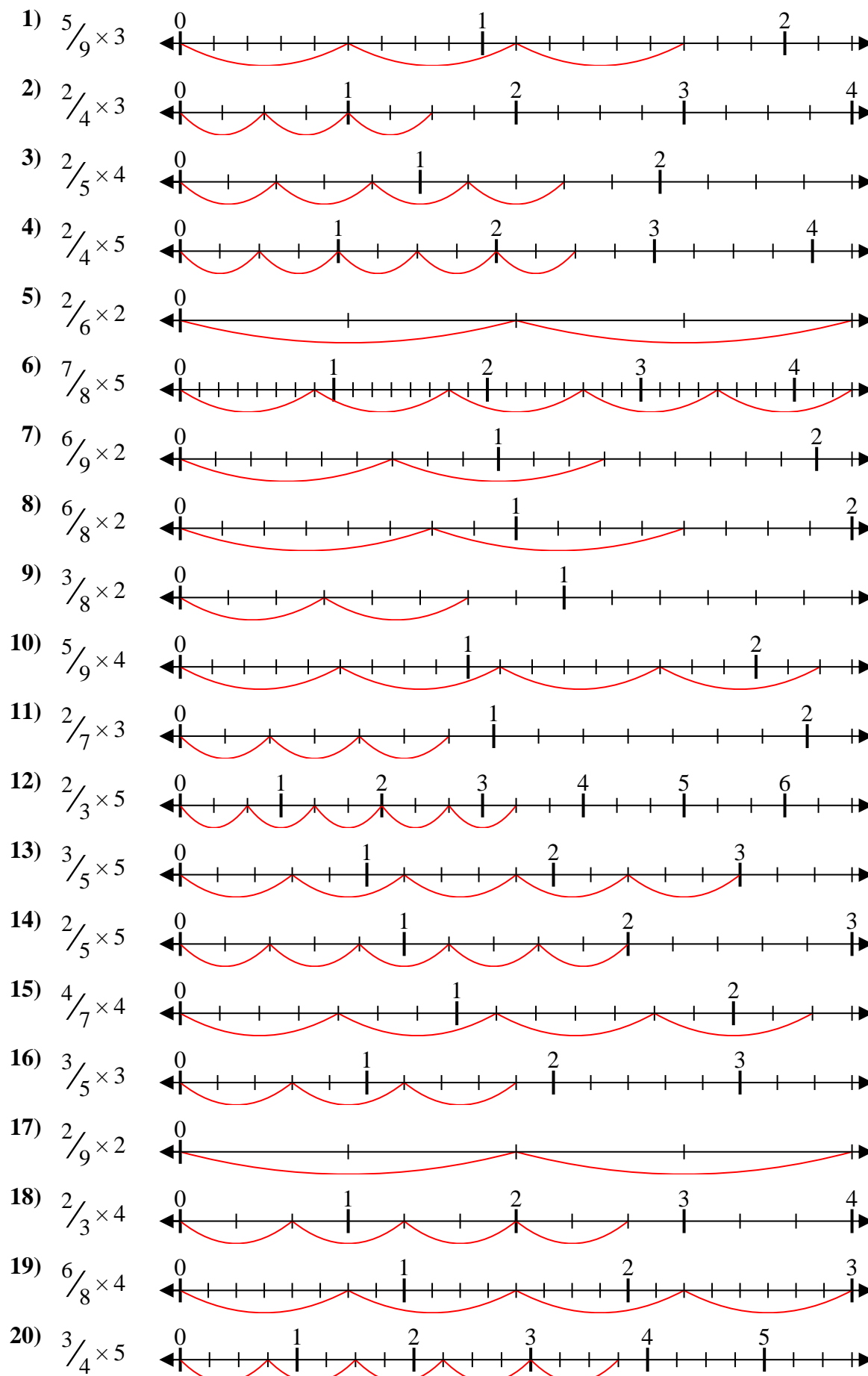
18. \_\_\_\_\_

19. \_\_\_\_\_

20. \_\_\_\_\_



Solve each problem.



**Answers**

1.  $\frac{15}{9} = 1\frac{2}{3}$
2.  $\frac{6}{4} = 1\frac{1}{2}$
3.  $\frac{8}{5} = 1\frac{3}{5}$
4.  $\frac{10}{4} = 2\frac{1}{2}$
5.  $\frac{4}{6} = \frac{2}{3}$
6.  $\frac{35}{8} = 4\frac{3}{8}$
7.  $\frac{12}{9} = 1\frac{1}{3}$
8.  $\frac{12}{8} = 1\frac{1}{2}$
9.  $\frac{6}{8} = \frac{3}{4}$
10.  $\frac{20}{9} = 2\frac{2}{9}$
11.  $\frac{6}{7} = \frac{6}{7}$
12.  $\frac{10}{3} = 3\frac{1}{3}$
13.  $\frac{15}{5} = 3$
14.  $\frac{10}{5} = 2$
15.  $\frac{16}{7} = 2\frac{2}{7}$
16.  $\frac{9}{5} = 1\frac{4}{5}$
17.  $\frac{4}{9} = \frac{4}{9}$
18.  $\frac{8}{3} = 2\frac{2}{3}$
19.  $\frac{24}{8} = 3$
20.  $\frac{15}{4} = 3\frac{3}{4}$



Solve each problem.

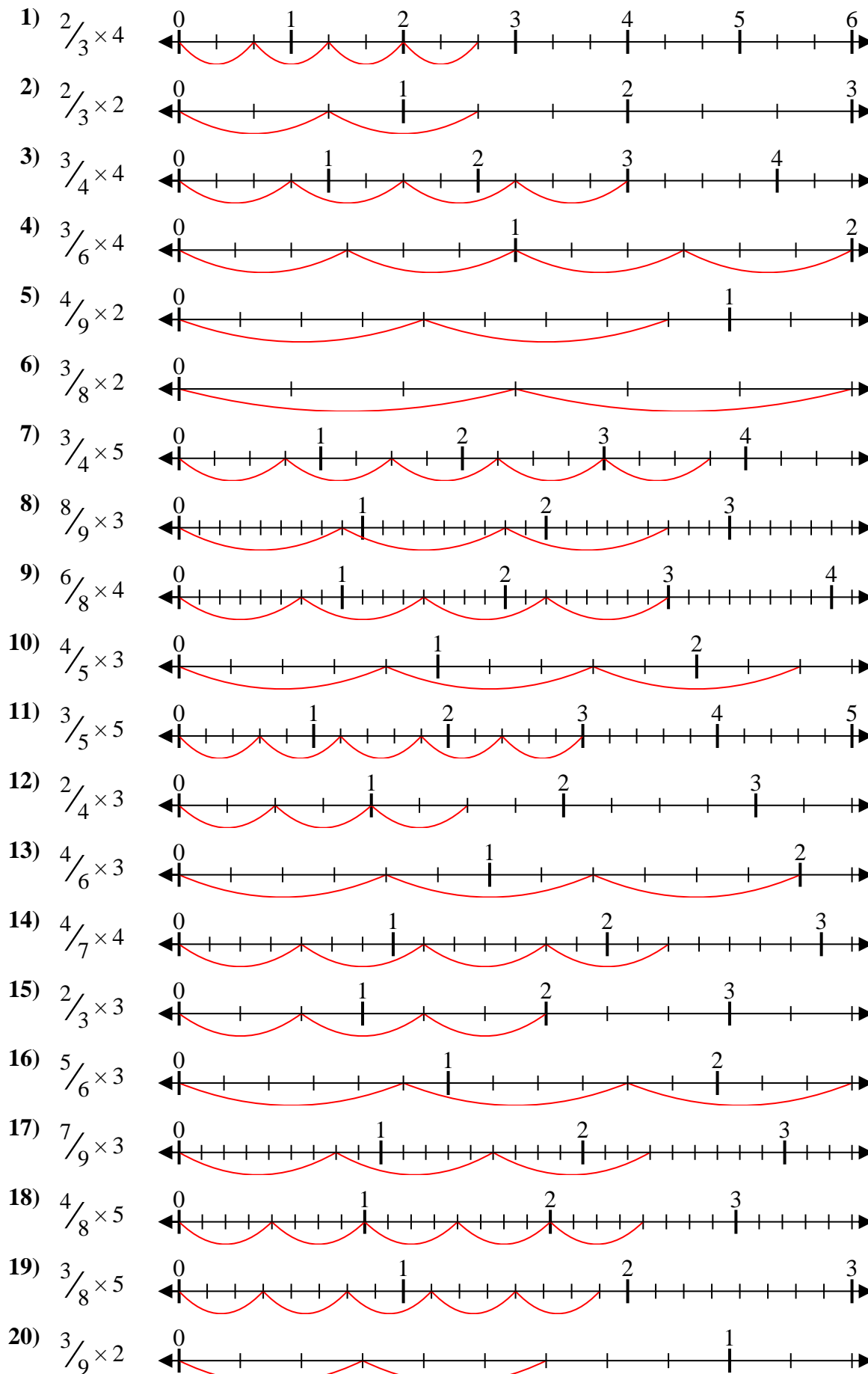
**Answers**

- 1)  $\frac{2}{3} \times 4$
- 2)  $\frac{2}{3} \times 2$
- 3)  $\frac{3}{4} \times 4$
- 4)  $\frac{3}{6} \times 4$
- 5)  $\frac{4}{9} \times 2$
- 6)  $\frac{3}{8} \times 2$
- 7)  $\frac{3}{4} \times 5$
- 8)  $\frac{8}{9} \times 3$
- 9)  $\frac{6}{8} \times 4$
- 10)  $\frac{4}{5} \times 3$
- 11)  $\frac{3}{5} \times 5$
- 12)  $\frac{2}{4} \times 3$
- 13)  $\frac{4}{6} \times 3$
- 14)  $\frac{4}{7} \times 4$
- 15)  $\frac{2}{3} \times 3$
- 16)  $\frac{5}{6} \times 3$
- 17)  $\frac{7}{9} \times 3$
- 18)  $\frac{4}{8} \times 5$
- 19)  $\frac{3}{8} \times 5$
- 20)  $\frac{3}{9} \times 2$

1. \_\_\_\_\_
2. \_\_\_\_\_
3. \_\_\_\_\_
4. \_\_\_\_\_
5. \_\_\_\_\_
6. \_\_\_\_\_
7. \_\_\_\_\_
8. \_\_\_\_\_
9. \_\_\_\_\_
10. \_\_\_\_\_
11. \_\_\_\_\_
12. \_\_\_\_\_
13. \_\_\_\_\_
14. \_\_\_\_\_
15. \_\_\_\_\_
16. \_\_\_\_\_
17. \_\_\_\_\_
18. \_\_\_\_\_
19. \_\_\_\_\_
20. \_\_\_\_\_



Solve each problem.



**Answers**

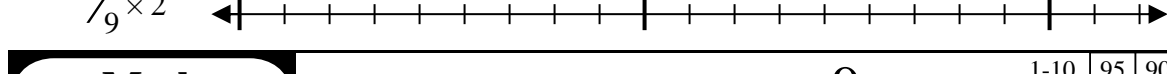
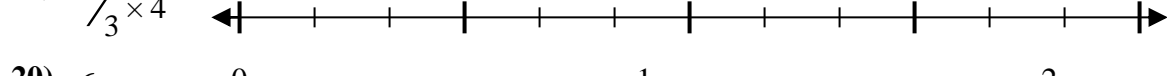
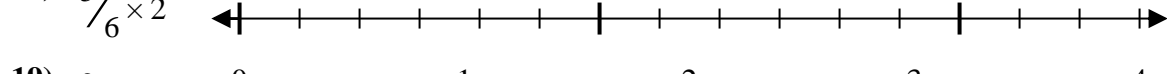
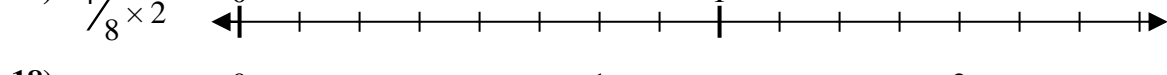
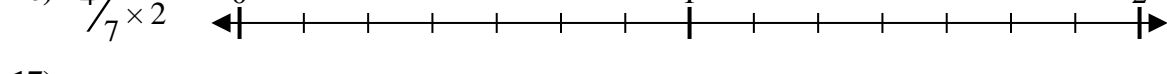
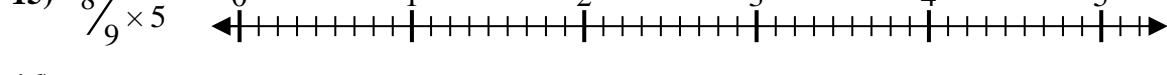
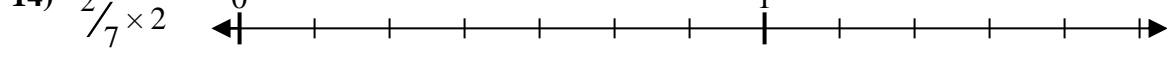
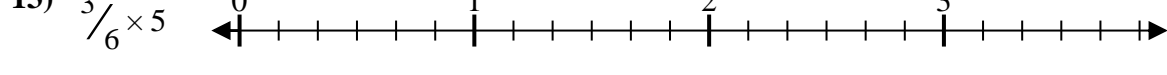
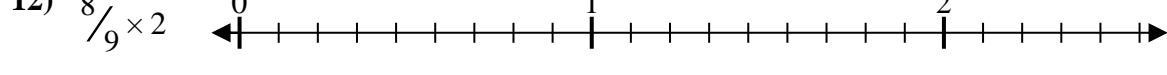
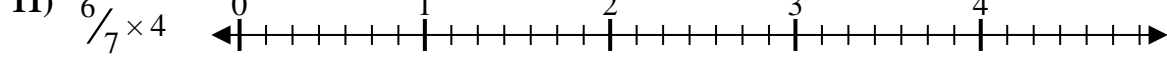
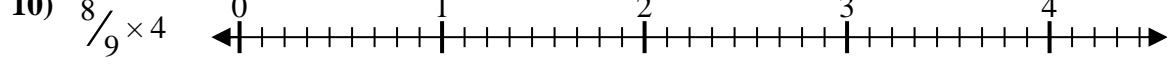
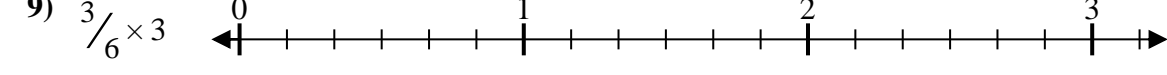
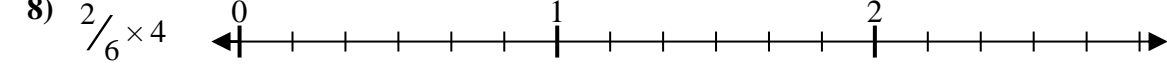
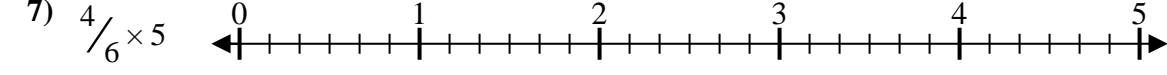
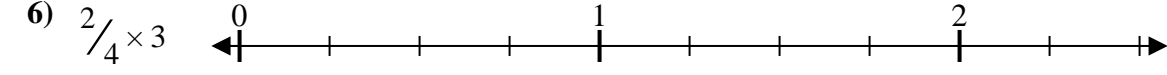
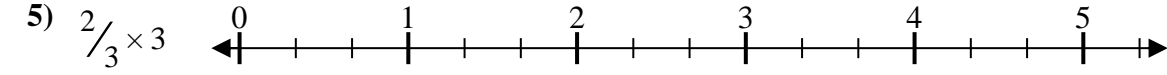
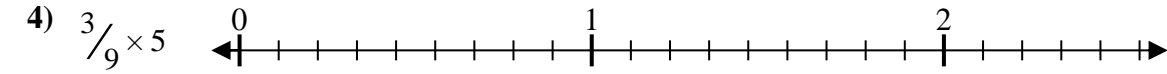
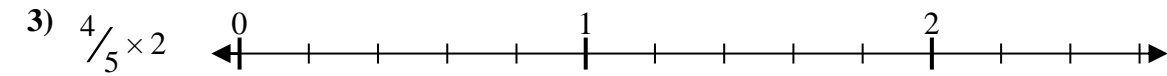

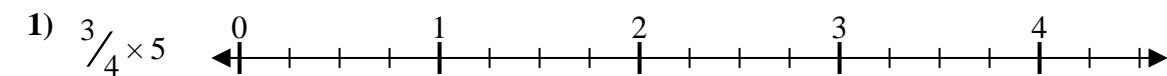
1.  $\frac{8}{3} = 2\frac{2}{3}$
2.  $\frac{4}{3} = 1\frac{1}{3}$
3.  $\frac{12}{4} = 3$
4.  $\frac{12}{6} = 2$
5.  $\frac{8}{9} = \frac{8}{9}$
6.  $\frac{6}{8} = \frac{3}{4}$
7.  $\frac{15}{4} = 3\frac{3}{4}$
8.  $\frac{24}{9} = 2\frac{2}{3}$
9.  $\frac{24}{8} = 3$
10.  $\frac{12}{5} = 2\frac{2}{5}$
11.  $\frac{15}{5} = 3$
12.  $\frac{6}{4} = 1\frac{1}{2}$
13.  $\frac{12}{6} = 2$
14.  $\frac{16}{7} = 2\frac{2}{7}$
15.  $\frac{6}{3} = 2$
16.  $\frac{15}{6} = 2\frac{1}{2}$
17.  $\frac{21}{9} = 2\frac{1}{3}$
18.  $\frac{20}{8} = 2\frac{1}{2}$
19.  $\frac{15}{8} = 1\frac{7}{8}$
20.  $\frac{6}{9} = \frac{2}{3}$





Solve each problem.

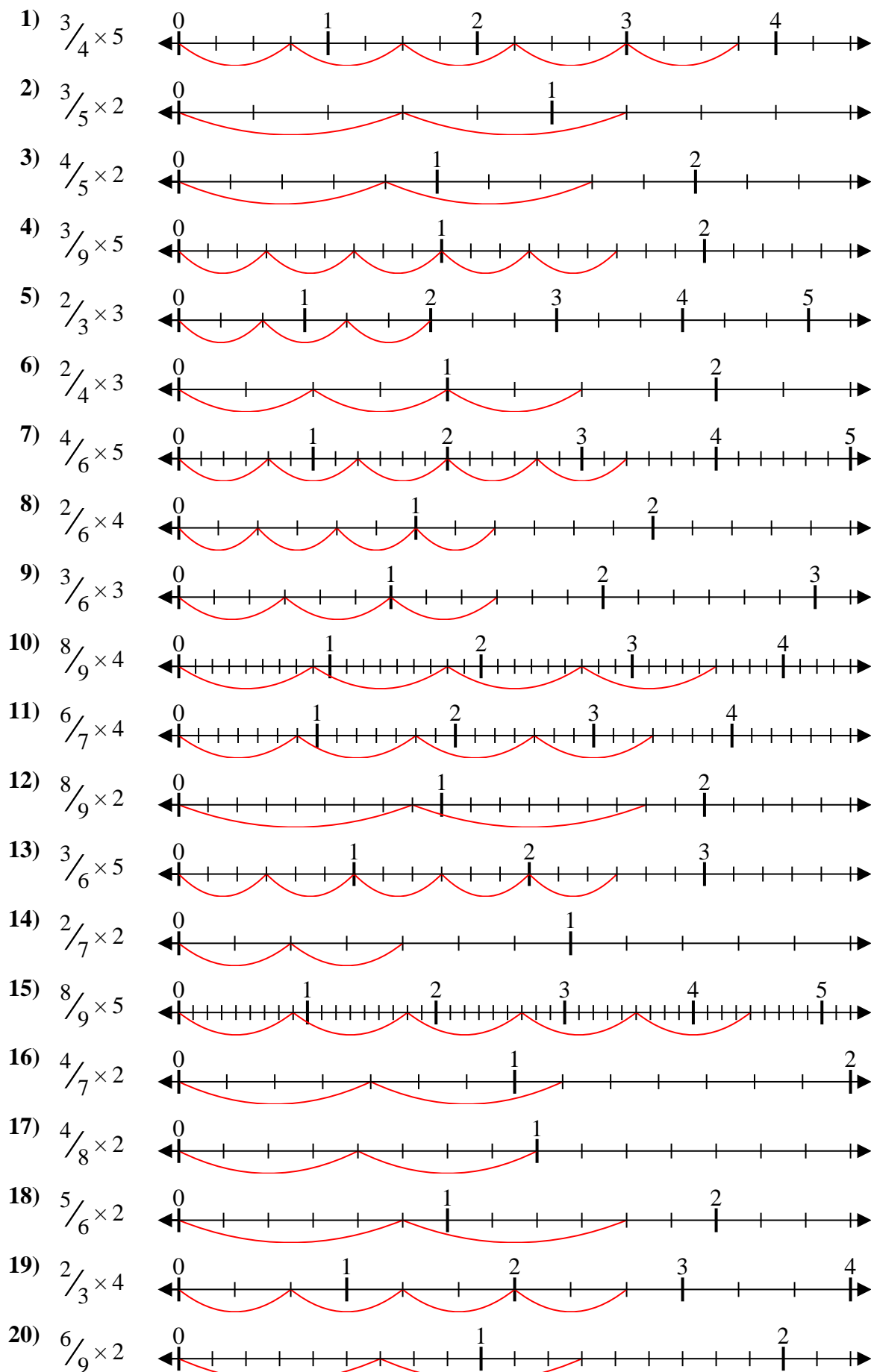
**Answers**



1. \_\_\_\_\_
2. \_\_\_\_\_
3. \_\_\_\_\_
4. \_\_\_\_\_
5. \_\_\_\_\_
6. \_\_\_\_\_
7. \_\_\_\_\_
8. \_\_\_\_\_
9. \_\_\_\_\_
10. \_\_\_\_\_
11. \_\_\_\_\_
12. \_\_\_\_\_
13. \_\_\_\_\_
14. \_\_\_\_\_
15. \_\_\_\_\_
16. \_\_\_\_\_
17. \_\_\_\_\_
18. \_\_\_\_\_
19. \_\_\_\_\_
20. \_\_\_\_\_



Solve each problem.



**Answers**

1.  $\frac{15}{4} = 3\frac{3}{4}$
2.  $\frac{6}{5} = 1\frac{1}{5}$
3.  $\frac{8}{5} = 1\frac{3}{5}$
4.  $\frac{15}{9} = 1\frac{2}{3}$
5.  $\frac{6}{3} = 2$
6.  $\frac{6}{4} = 1\frac{1}{2}$
7.  $\frac{20}{6} = 3\frac{1}{3}$
8.  $\frac{8}{6} = 1\frac{1}{3}$
9.  $\frac{9}{6} = 1\frac{1}{2}$
10.  $\frac{32}{9} = 3\frac{5}{9}$
11.  $\frac{24}{7} = 3\frac{3}{7}$
12.  $\frac{16}{9} = 1\frac{7}{9}$
13.  $\frac{15}{6} = 2\frac{1}{2}$
14.  $\frac{4}{7} = \frac{4}{7}$
15.  $\frac{40}{9} = 4\frac{4}{9}$
16.  $\frac{8}{7} = 1\frac{1}{7}$
17.  $\frac{8}{8} = 1$
18.  $\frac{10}{6} = 1\frac{2}{3}$
19.  $\frac{8}{3} = 2\frac{2}{3}$
20.  $\frac{12}{9} = 1\frac{1}{3}$



Solve each problem.

Answers

1)  $\frac{3}{8} \times 2$

2)  $\frac{2}{5} \times 5$

3)  $\frac{5}{8} \times 3$

4)  $\frac{3}{9} \times 4$

5)  $\frac{2}{3} \times 5$

6)  $\frac{2}{5} \times 2$

7)  $\frac{5}{7} \times 3$

8)  $\frac{7}{9} \times 2$

9)  $\frac{2}{4} \times 4$

10)  $\frac{2}{3} \times 3$

11)  $\frac{2}{3} \times 2$

12)  $\frac{2}{7} \times 4$

13)  $\frac{2}{6} \times 3$

14)  $\frac{3}{4} \times 3$

15)  $\frac{3}{5} \times 3$

16)  $\frac{3}{4} \times 5$

17)  $\frac{3}{5} \times 4$

18)  $\frac{6}{7} \times 4$

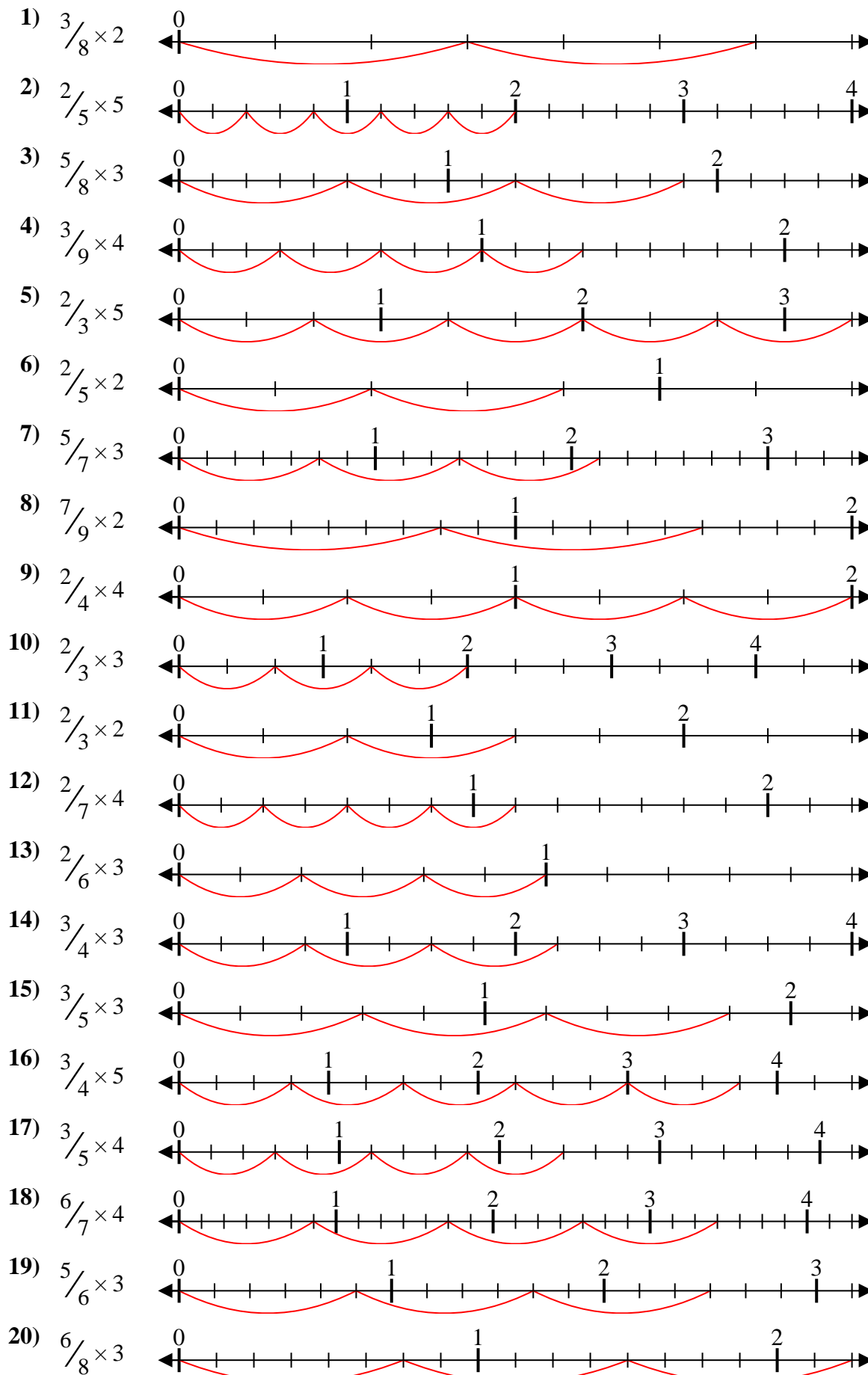
19)  $\frac{5}{6} \times 3$

20)  $\frac{6}{8} \times 3$

1. \_\_\_\_\_
2. \_\_\_\_\_
3. \_\_\_\_\_
4. \_\_\_\_\_
5. \_\_\_\_\_
6. \_\_\_\_\_
7. \_\_\_\_\_
8. \_\_\_\_\_
9. \_\_\_\_\_
10. \_\_\_\_\_
11. \_\_\_\_\_
12. \_\_\_\_\_
13. \_\_\_\_\_
14. \_\_\_\_\_
15. \_\_\_\_\_
16. \_\_\_\_\_
17. \_\_\_\_\_
18. \_\_\_\_\_
19. \_\_\_\_\_
20. \_\_\_\_\_



Solve each problem.



**Answers**

1.  $\frac{6}{8} = \frac{3}{4}$
2.  $\frac{10}{5} = 2$
3.  $\frac{15}{8} = 1\frac{7}{8}$
4.  $\frac{12}{9} = 1\frac{1}{3}$
5.  $\frac{10}{3} = 3\frac{1}{3}$
6.  $\frac{4}{5} = \frac{4}{5}$
7.  $\frac{15}{7} = 2\frac{1}{7}$
8.  $\frac{14}{9} = 1\frac{5}{9}$
9.  $\frac{8}{4} = 2$
10.  $\frac{6}{3} = 2$
11.  $\frac{4}{3} = 1\frac{1}{3}$
12.  $\frac{8}{7} = 1\frac{1}{7}$
13.  $\frac{6}{6} = 1$
14.  $\frac{9}{4} = 2\frac{1}{4}$
15.  $\frac{9}{5} = 1\frac{4}{5}$
16.  $\frac{15}{4} = 3\frac{3}{4}$
17.  $\frac{12}{5} = 2\frac{2}{5}$
18.  $\frac{24}{7} = 3\frac{3}{7}$
19.  $\frac{15}{6} = 2\frac{1}{2}$
20.  $\frac{18}{8} = 2\frac{1}{4}$