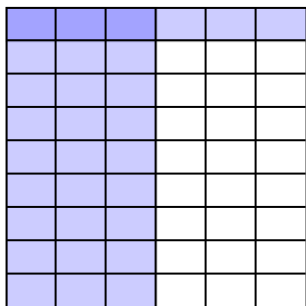


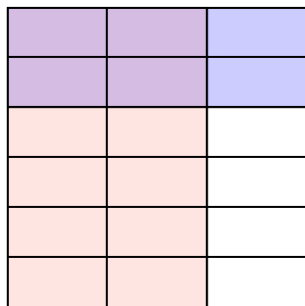


Use the box provided to show a visual example of how to multiply two fractions.

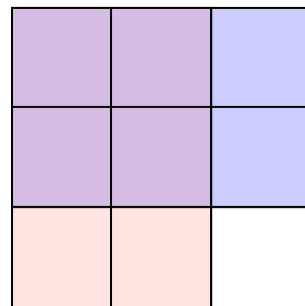
Ex) $\frac{3}{6} \times \frac{1}{9} =$



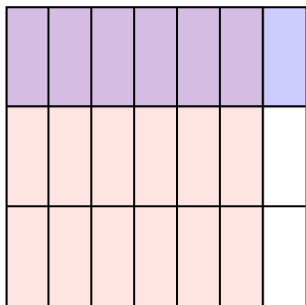
1) $\frac{2}{3} \times \frac{2}{6} =$



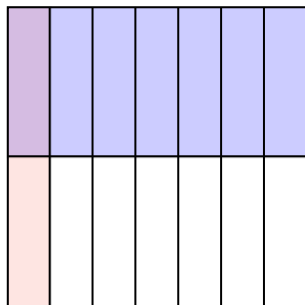
2) $\frac{2}{3} \times \frac{2}{3} =$



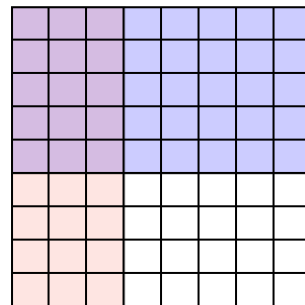
3) $\frac{6}{7} \times \frac{1}{3} =$



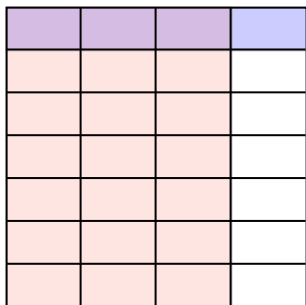
4) $\frac{1}{7} \times \frac{1}{2} =$



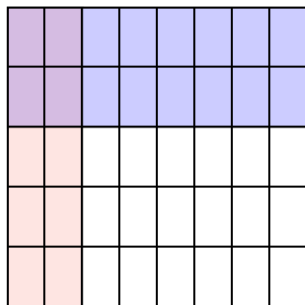
5) $\frac{3}{8} \times \frac{5}{9} =$




6) $\frac{3}{4} \times \frac{1}{7} =$



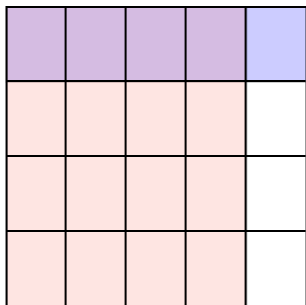
7) $\frac{2}{8} \times \frac{2}{5} =$




8) $\frac{3}{7} \times \frac{3}{8} =$



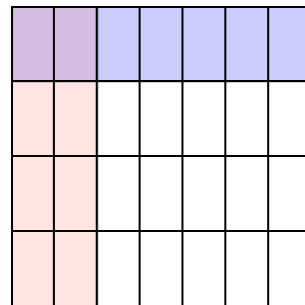
9) $\frac{4}{5} \times \frac{1}{4} =$



10) $\frac{2}{4} \times \frac{6}{8} =$



11) $\frac{2}{7} \times \frac{1}{4} =$



Answers

Ex. $\frac{3}{54}$

1. $\frac{4}{18}$

2. $\frac{4}{9}$

3. $\frac{6}{21}$

4. $\frac{1}{14}$

5. $\frac{15}{72}$

6. $\frac{3}{28}$

7. $\frac{4}{40}$

8. $\frac{9}{56}$

9. $\frac{4}{20}$


10. $\frac{12}{32}$

11. $\frac{2}{28}$

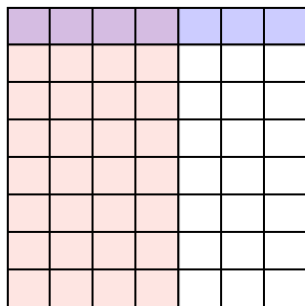


Use the box provided to show a visual example of how to multiply two fractions.

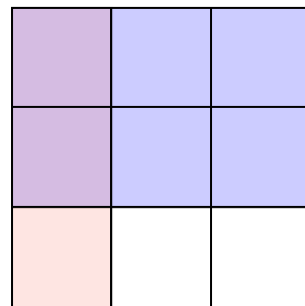
Ex) $\frac{1}{2} \times \frac{6}{7} =$



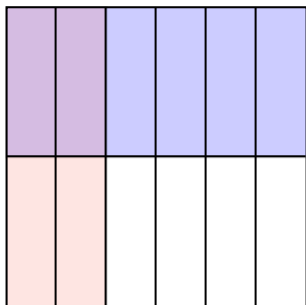
1) $\frac{4}{7} \times \frac{1}{8} =$



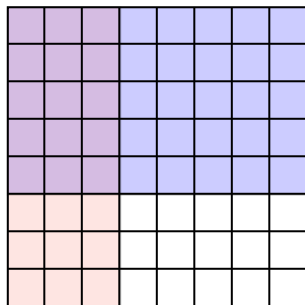
2) $\frac{1}{3} \times \frac{2}{3} =$



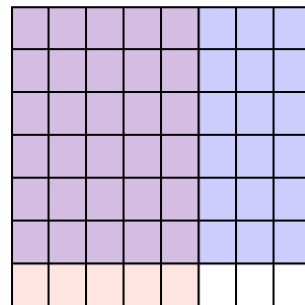
3) $\frac{2}{6} \times \frac{1}{2} =$



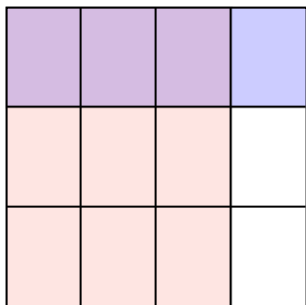
4) $\frac{3}{8} \times \frac{5}{8} =$



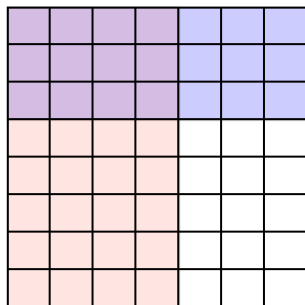
5) $\frac{5}{8} \times \frac{6}{7} =$



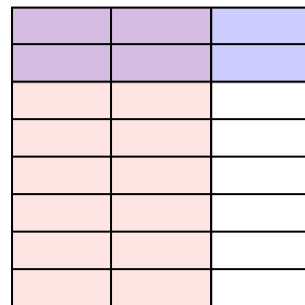
6) $\frac{3}{4} \times \frac{1}{3} =$




7) $\frac{4}{7} \times \frac{3}{8} =$



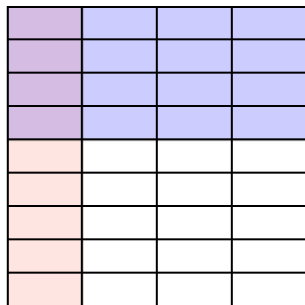
8) $\frac{2}{3} \times \frac{2}{8} =$



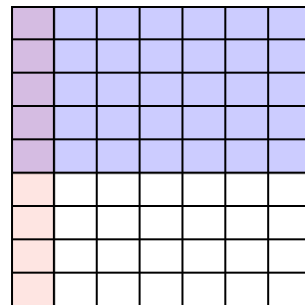
9) $\frac{1}{2} \times \frac{3}{5} =$



10) $\frac{1}{4} \times \frac{4}{9} =$



11) $\frac{1}{7} \times \frac{5}{9} =$



Answers

Ex. $\frac{6}{14}$

1. $\frac{4}{56}$

2. $\frac{2}{9}$

3. $\frac{2}{12}$

4. $\frac{15}{64}$

5. $\frac{30}{56}$

6. $\frac{3}{12}$

7. $\frac{12}{56}$

8. $\frac{4}{24}$

9. $\frac{3}{10}$


10. $\frac{4}{36}$

11. $\frac{5}{63}$

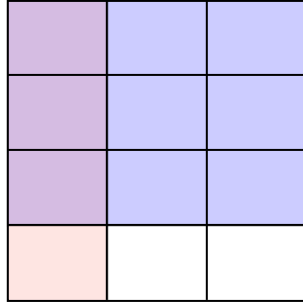


Use the box provided to show a visual example of how to multiply two fractions.

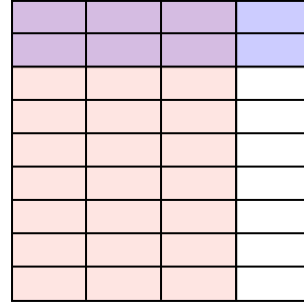
Ex) $\frac{8}{9} \times \frac{5}{8} =$




1) $\frac{1}{3} \times \frac{3}{4} =$



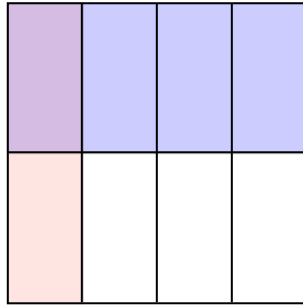
2) $\frac{3}{4} \times \frac{2}{9} =$



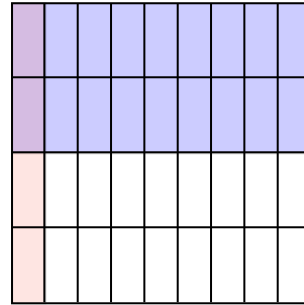
3) $\frac{1}{2} \times \frac{1}{2} =$



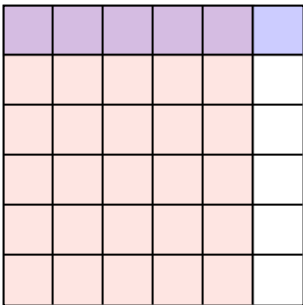
4) $\frac{1}{4} \times \frac{1}{2} =$



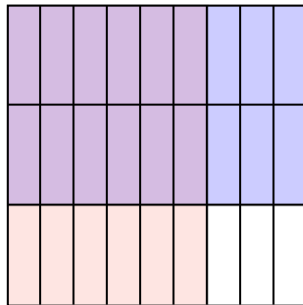
5) $\frac{1}{9} \times \frac{2}{4} =$



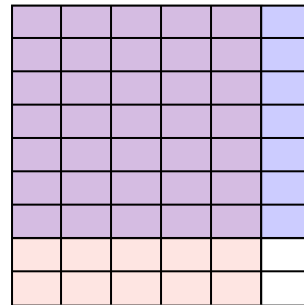
6) $\frac{5}{6} \times \frac{1}{6} =$




7) $\frac{6}{9} \times \frac{2}{3} =$



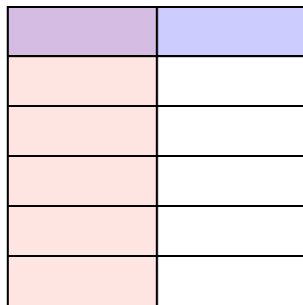
8) $\frac{5}{6} \times \frac{7}{9} =$



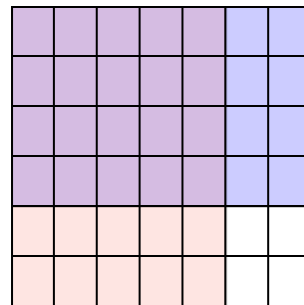
9) $\frac{2}{4} \times \frac{2}{6} =$



10) $\frac{1}{2} \times \frac{1}{6} =$



11) $\frac{5}{7} \times \frac{4}{6} =$



Answers

Ex. $\frac{40}{72}$

1. $\frac{3}{12}$

2. $\frac{6}{36}$

3. $\frac{1}{4}$

4. $\frac{1}{8}$

5. $\frac{2}{36}$

6. $\frac{5}{36}$

7. $\frac{12}{27}$

8. $\frac{35}{54}$

9. $\frac{4}{24}$

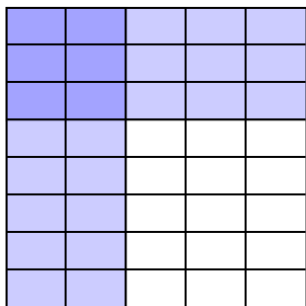
10. $\frac{1}{12}$

11. $\frac{20}{42}$

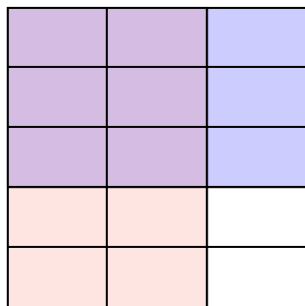


Use the box provided to show a visual example of how to multiply two fractions.

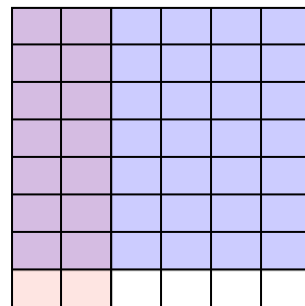
Ex) $\frac{2}{5} \times \frac{3}{8} =$



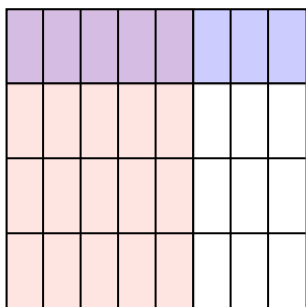
1) $\frac{2}{3} \times \frac{3}{5} =$



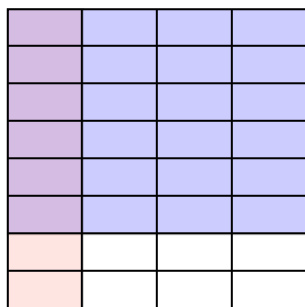
2) $\frac{2}{6} \times \frac{7}{8} =$



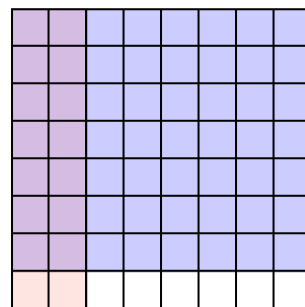
3) $\frac{5}{8} \times \frac{1}{4} =$



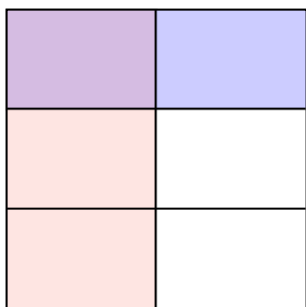
4) $\frac{1}{4} \times \frac{6}{8} =$



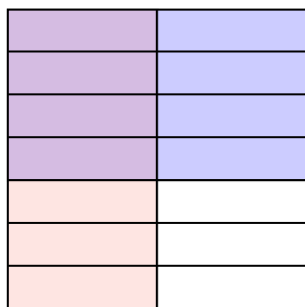
5) $\frac{2}{8} \times \frac{7}{8} =$



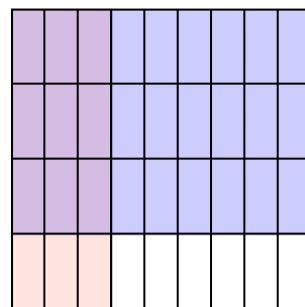
6) $\frac{1}{2} \times \frac{1}{3} =$



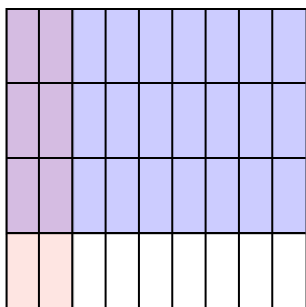
7) $\frac{1}{2} \times \frac{4}{7} =$



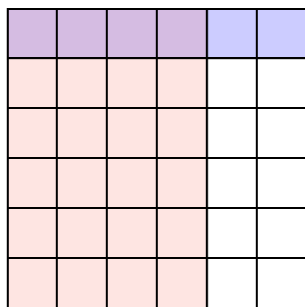
8) $\frac{3}{9} \times \frac{3}{4} =$



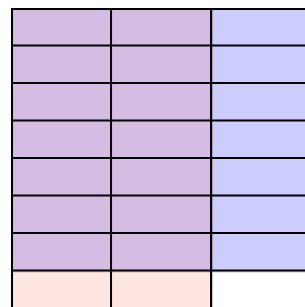
9) $\frac{2}{9} \times \frac{3}{4} =$



10) $\frac{4}{6} \times \frac{1}{6} =$



11) $\frac{2}{3} \times \frac{7}{8} =$



Answers

Ex. $\frac{6}{40}$

1. $\frac{6}{15}$

2. $\frac{14}{48}$

3. $\frac{5}{32}$

4. $\frac{6}{32}$

5. $\frac{14}{64}$

6. $\frac{1}{6}$

7. $\frac{4}{14}$

8. $\frac{9}{36}$

9. $\frac{6}{36}$

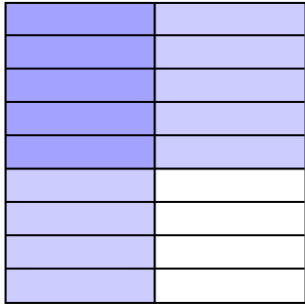
10. $\frac{4}{36}$

11. $\frac{14}{24}$

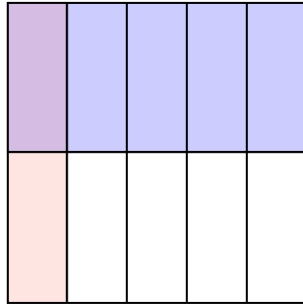


Use the box provided to show a visual example of how to multiply two fractions.

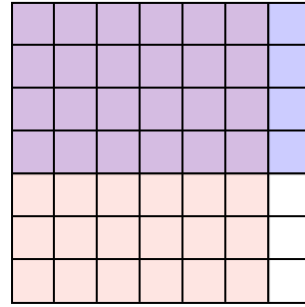
Ex) $\frac{1}{2} \times \frac{5}{9} =$



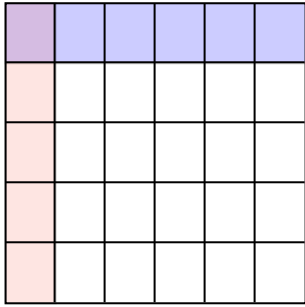
1) $\frac{1}{5} \times \frac{1}{2} =$



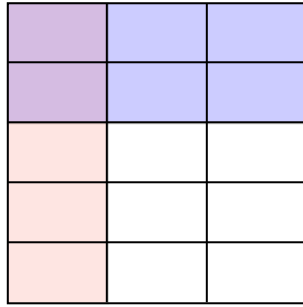
2) $\frac{6}{7} \times \frac{4}{7} =$




3) $\frac{1}{6} \times \frac{1}{5} =$



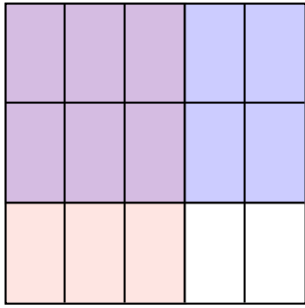
4) $\frac{1}{3} \times \frac{2}{5} =$



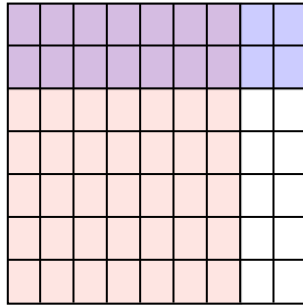
5) $\frac{1}{2} \times \frac{1}{2} =$



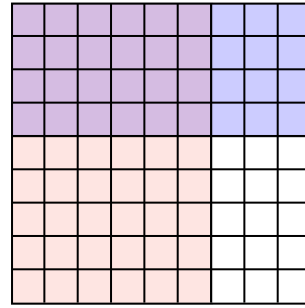
6) $\frac{3}{5} \times \frac{2}{3} =$



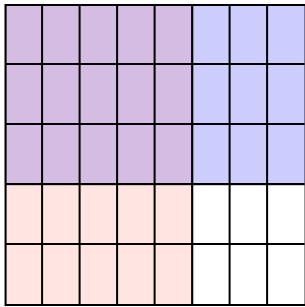
7) $\frac{7}{9} \times \frac{2}{7} =$



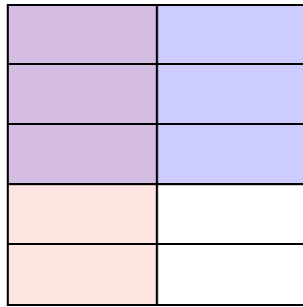
8) $\frac{6}{9} \times \frac{4}{9} =$



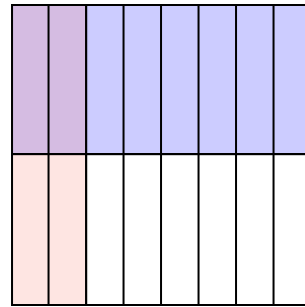
9) $\frac{5}{8} \times \frac{3}{5} =$



10) $\frac{1}{2} \times \frac{3}{5} =$



11) $\frac{2}{8} \times \frac{1}{2} =$



Answers

Ex. $\frac{5}{18}$

1. $\frac{1}{10}$

2. $\frac{24}{49}$

3. $\frac{1}{30}$

4. $\frac{2}{15}$

5. $\frac{1}{4}$

6. $\frac{6}{15}$

7. $\frac{14}{63}$

8. $\frac{24}{81}$

9. $\frac{15}{40}$

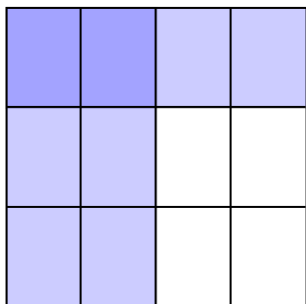
10. $\frac{3}{10}$

11. $\frac{2}{16}$

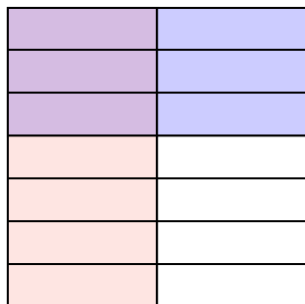


Use the box provided to show a visual example of how to multiply two fractions.

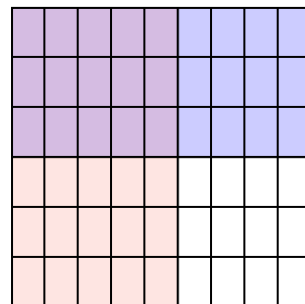
Ex) $\frac{2}{4} \times \frac{1}{3} =$



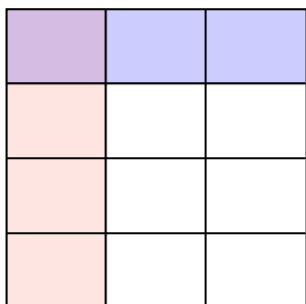
1) $\frac{1}{2} \times \frac{3}{7} =$



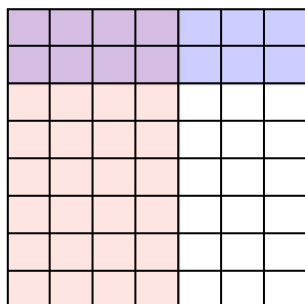
2) $\frac{5}{9} \times \frac{3}{6} =$



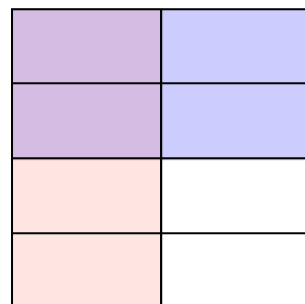
3) $\frac{1}{3} \times \frac{1}{4} =$



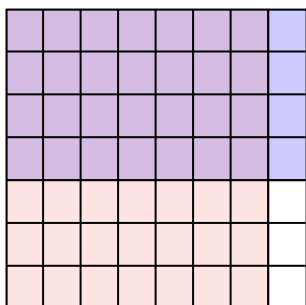
4) $\frac{4}{7} \times \frac{2}{8} =$



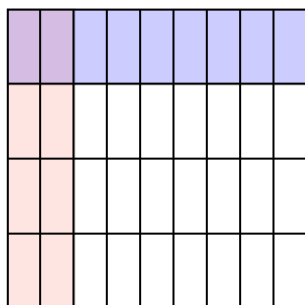
5) $\frac{1}{2} \times \frac{2}{4} =$




6) $\frac{7}{8} \times \frac{4}{7} =$



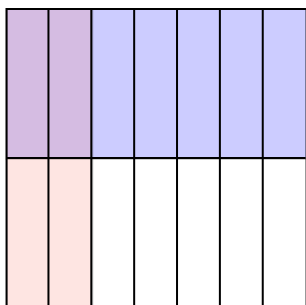
7) $\frac{2}{9} \times \frac{1}{4} =$



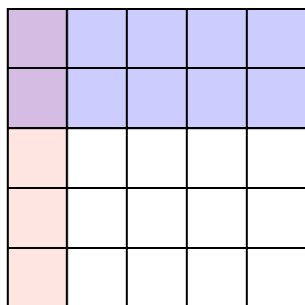
8) $\frac{3}{4} \times \frac{5}{8} =$



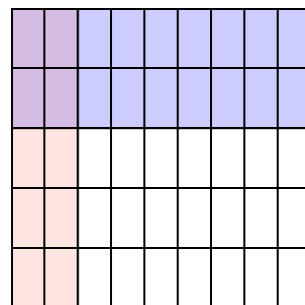
9) $\frac{2}{7} \times \frac{1}{2} =$



10) $\frac{1}{5} \times \frac{2}{5} =$



11) $\frac{2}{9} \times \frac{2}{5} =$



Answers

Ex. $\frac{2}{12}$

1. $\frac{3}{14}$

2. $\frac{15}{54}$

3. $\frac{1}{12}$

4. $\frac{8}{56}$

5. $\frac{2}{8}$

6. $\frac{28}{56}$

7. $\frac{2}{36}$

8. $\frac{15}{32}$

9. $\frac{2}{14}$

10. $\frac{2}{25}$

11. $\frac{4}{45}$



Use the box provided to show a visual example of how to multiply two fractions.

Ex) $\frac{3}{5} \times \frac{2}{3} =$

1) $\frac{4}{8} \times \frac{2}{3} =$

2) $\frac{5}{6} \times \frac{1}{3} =$

3) $\frac{2}{5} \times \frac{3}{8} =$

4) $\frac{3}{5} \times \frac{8}{9} =$

5) $\frac{1}{3} \times \frac{1}{2} =$

6) $\frac{3}{4} \times \frac{8}{9} =$

7) $\frac{1}{2} \times \frac{3}{6} =$

8) $\frac{4}{6} \times \frac{4}{6} =$

9) $\frac{2}{7} \times \frac{5}{6} =$

10) $\frac{4}{8} \times \frac{5}{8} =$

11) $\frac{1}{2} \times \frac{1}{3} =$

Answers

Ex. $\frac{6}{15}$

1. _____

2. _____

3. _____

4. _____

5. _____

6. _____

7. _____

8. _____

9. _____

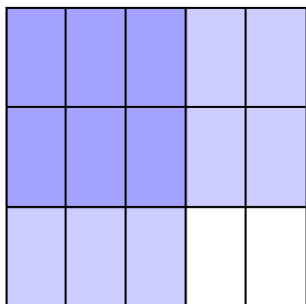
10. _____

11. _____

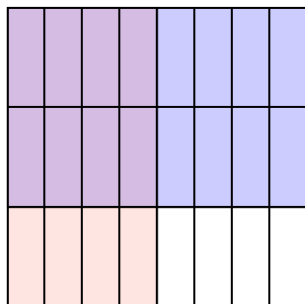


Use the box provided to show a visual example of how to multiply two fractions.

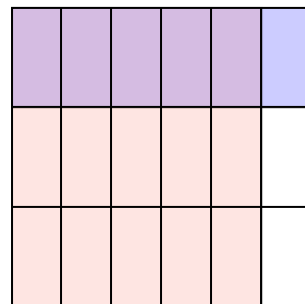
Ex) $\frac{3}{5} \times \frac{2}{3} =$



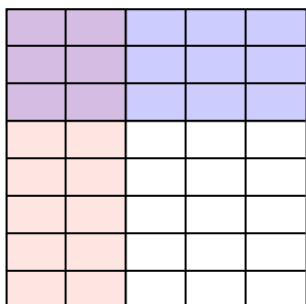
1) $\frac{4}{8} \times \frac{2}{3} =$




2) $\frac{5}{6} \times \frac{1}{3} =$




3) $\frac{2}{5} \times \frac{3}{8} =$



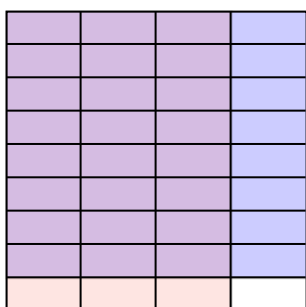
4) $\frac{3}{5} \times \frac{8}{9} =$



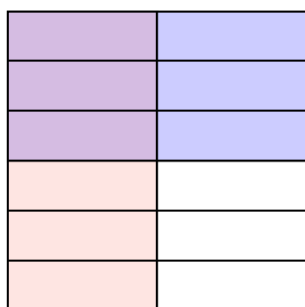
5) $\frac{1}{3} \times \frac{1}{2} =$



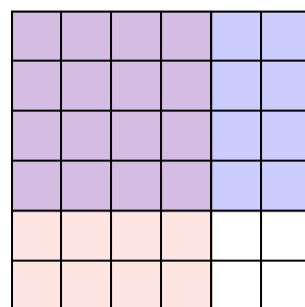
6) $\frac{3}{4} \times \frac{8}{9} =$



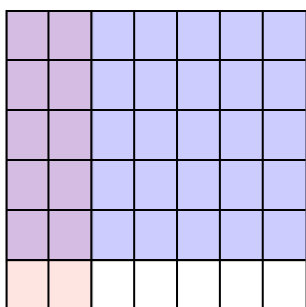
7) $\frac{1}{2} \times \frac{3}{6} =$




8) $\frac{4}{6} \times \frac{4}{6} =$




9) $\frac{2}{7} \times \frac{5}{6} =$



10) $\frac{4}{8} \times \frac{5}{8} =$



11) $\frac{1}{2} \times \frac{1}{3} =$



Answers

Ex. $\frac{6}{15}$

1. $\frac{8}{24}$

2. $\frac{5}{18}$

3. $\frac{6}{40}$

4. $\frac{24}{45}$

5. $\frac{1}{6}$

6. $\frac{24}{36}$

7. $\frac{3}{12}$

8. $\frac{16}{36}$

9. $\frac{10}{42}$

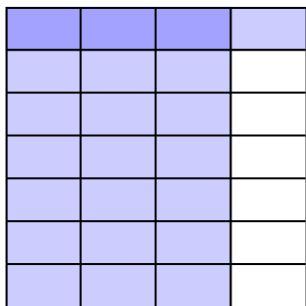
10. $\frac{20}{64}$

11. $\frac{1}{6}$

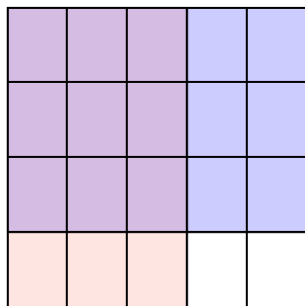


Use the box provided to show a visual example of how to multiply two fractions.

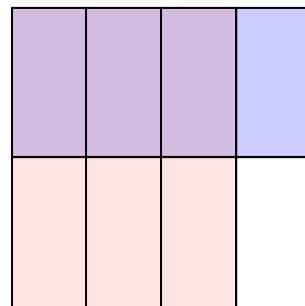
Ex) $\frac{3}{4} \times \frac{1}{7} =$




1) $\frac{3}{5} \times \frac{3}{4} =$



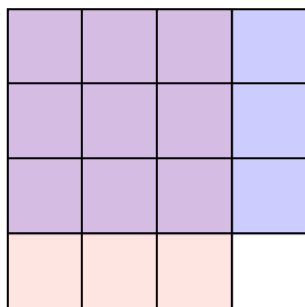
2) $\frac{3}{4} \times \frac{1}{2} =$



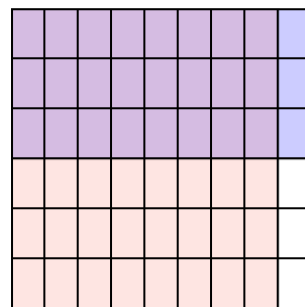
3) $\frac{1}{2} \times \frac{6}{8} =$



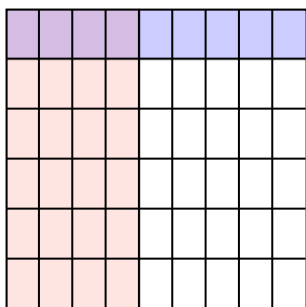
4) $\frac{3}{4} \times \frac{3}{4} =$



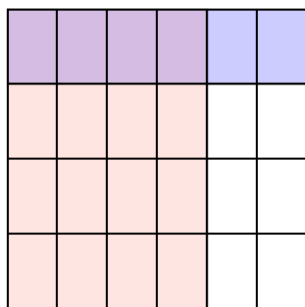
5) $\frac{8}{9} \times \frac{3}{6} =$



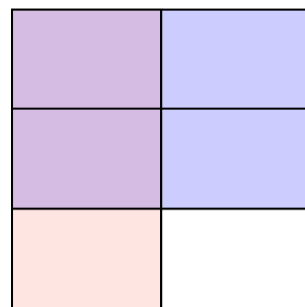
6) $\frac{4}{9} \times \frac{1}{6} =$




7) $\frac{4}{6} \times \frac{1}{4} =$



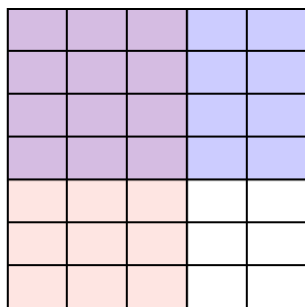
8) $\frac{1}{2} \times \frac{2}{3} =$




9) $\frac{7}{9} \times \frac{3}{8} =$



10) $\frac{3}{5} \times \frac{4}{7} =$



11) $\frac{2}{4} \times \frac{3}{5} =$



Answers

Ex. $\frac{3}{28}$

1. $\frac{9}{20}$

2. $\frac{3}{8}$

3. $\frac{6}{16}$

4. $\frac{9}{16}$

5. $\frac{24}{54}$

6. $\frac{4}{54}$

7. $\frac{4}{24}$

8. $\frac{2}{6}$

9. $\frac{21}{72}$

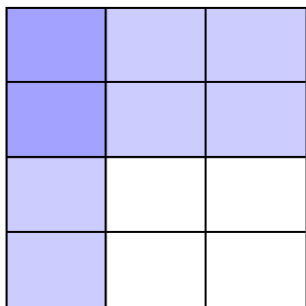
10. $\frac{12}{35}$

11. $\frac{6}{20}$

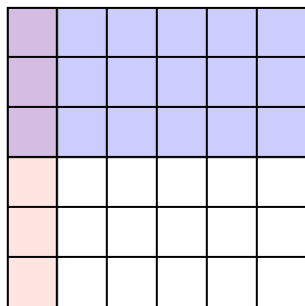


Use the box provided to show a visual example of how to multiply two fractions.

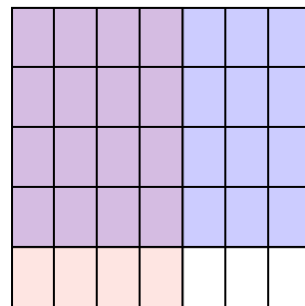
Ex) $\frac{1}{3} \times \frac{2}{4} =$



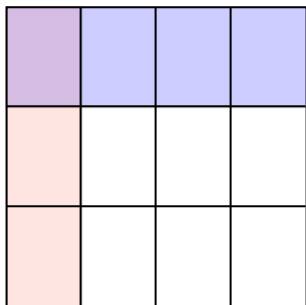
1) $\frac{1}{6} \times \frac{3}{6} =$



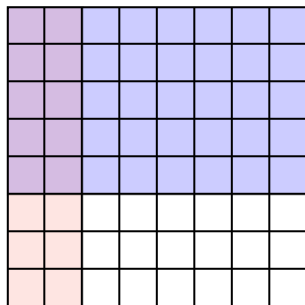
2) $\frac{4}{7} \times \frac{4}{5} =$



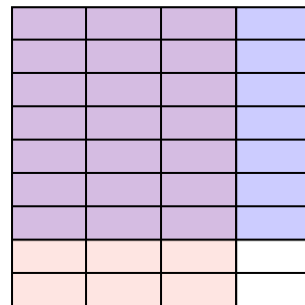
3) $\frac{1}{4} \times \frac{1}{3} =$



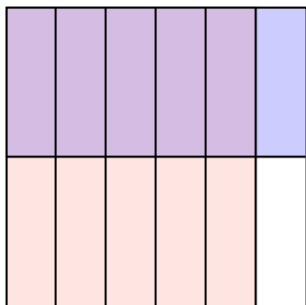
4) $\frac{2}{8} \times \frac{5}{8} =$



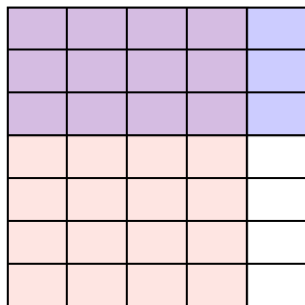
5) $\frac{3}{4} \times \frac{7}{9} =$



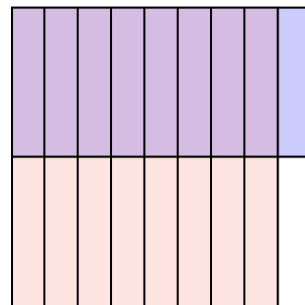
6) $\frac{5}{6} \times \frac{1}{2} =$




7) $\frac{4}{5} \times \frac{3}{7} =$



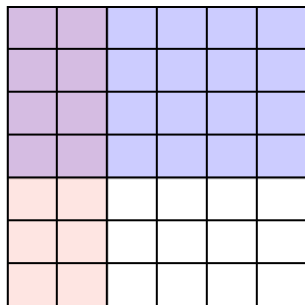
8) $\frac{8}{9} \times \frac{1}{2} =$




9) $\frac{7}{8} \times \frac{4}{8} =$



10) $\frac{2}{6} \times \frac{4}{7} =$



11) $\frac{1}{2} \times \frac{1}{2} =$



Answers

Ex. $\frac{2}{12}$

1. $\frac{3}{36}$

2. $\frac{16}{35}$

3. $\frac{1}{12}$

4. $\frac{10}{64}$

5. $\frac{21}{36}$

6. $\frac{5}{12}$

7. $\frac{12}{35}$

8. $\frac{8}{18}$

9. $\frac{28}{64}$

10. $\frac{8}{42}$

11. $\frac{1}{4}$