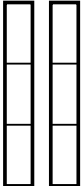


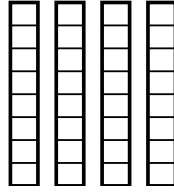


Use the visual models to solve.

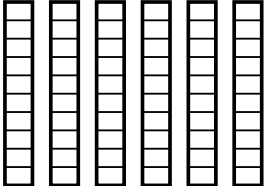
1) $\frac{1}{3} \times 2 =$



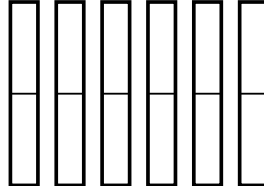
2) $\frac{6}{8} \times 4 =$



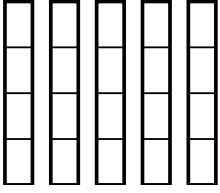
3) $\frac{4}{10} \times 6 =$



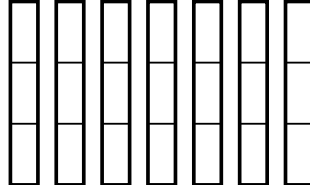
4) $\frac{1}{2} \times 6 =$



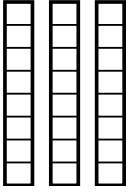
5) $\frac{3}{4} \times 5 =$



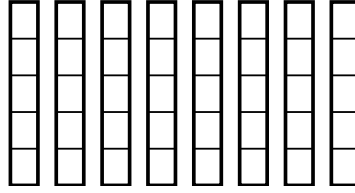
6) $\frac{2}{3} \times 7 =$



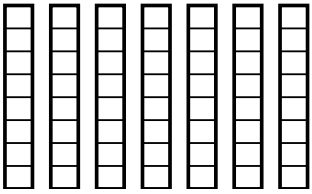
7) $\frac{3}{8} \times 3 =$



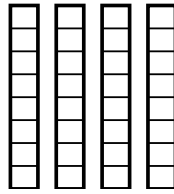
8) $\frac{4}{5} \times 8 =$



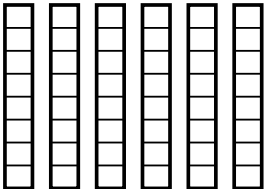
9) $\frac{4}{8} \times 7 =$



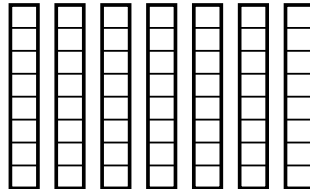
10) $\frac{5}{8} \times 4 =$



11) $\frac{3}{8} \times 6 =$



12) $\frac{1}{8} \times 7 =$



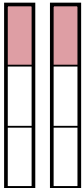
Answers

1. _____
2. _____
3. _____
4. _____
5. _____
6. _____
7. _____
8. _____
9. _____
10. _____
11. _____
12. _____

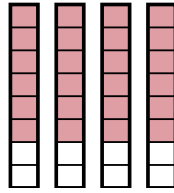


Use the visual models to solve.

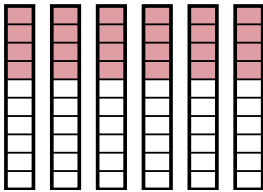
1) $\frac{1}{3} \times 2 =$



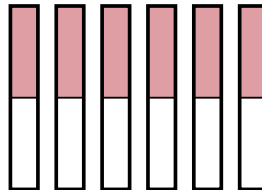
2) $\frac{6}{8} \times 4 =$



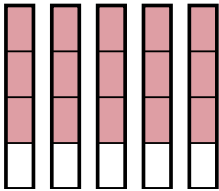
3) $\frac{4}{10} \times 6 =$



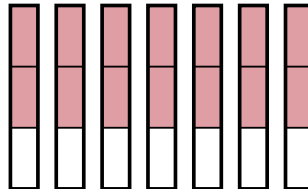
4) $\frac{1}{2} \times 6 =$



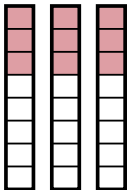
5) $\frac{3}{4} \times 5 =$



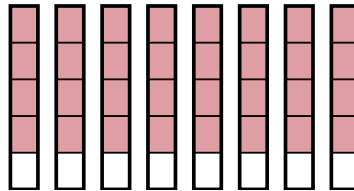
6) $\frac{2}{3} \times 7 =$



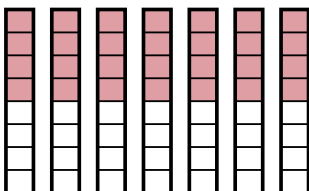
7) $\frac{3}{8} \times 3 =$



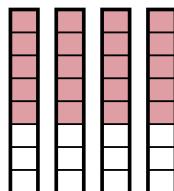
8) $\frac{4}{5} \times 8 =$



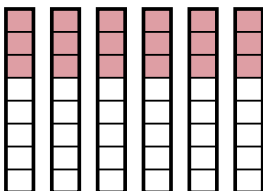
9) $\frac{4}{8} \times 7 =$



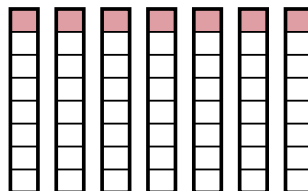
10) $\frac{5}{8} \times 4 =$



11) $\frac{3}{8} \times 6 =$



12) $\frac{1}{8} \times 7 =$



Answers

1. $\frac{2}{3}$

2. $\frac{24}{8}$

3. $\frac{24}{10}$

4. $\frac{6}{2}$

5. $\frac{15}{4}$

6. $\frac{14}{3}$

7. $\frac{9}{8}$

8. $\frac{32}{5}$

9. $\frac{28}{8}$

10. $\frac{20}{8}$

11. $\frac{18}{8}$

12. $\frac{7}{8}$