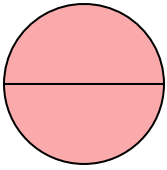




Determine which letter best describes the shaded portion.


Answers

1)



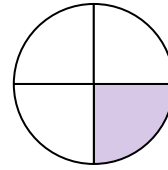
- A. one-half
- B. two-quarters
- C. two-halves

2)



- A. two-quarters
- B. four-fourths
- C. one-half

3)



- A. two-quarters
- B. one-quarter
- C. one-half

1. _____

2. _____

3. _____

4. _____

5. _____

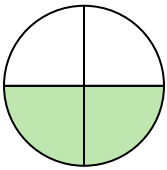
6. _____

7. _____

8. _____

9. _____

4)



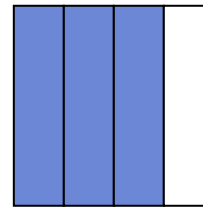
- A. four-fourths
- B. two-fourths
- C. one-half

5)



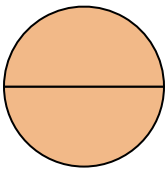
- A. one-half
- B. three-quarters
- C. one-fourth

6)



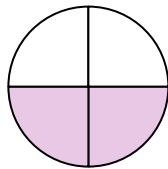
- A. one-half
- B. three-fourths
- C. four-quarters

7)



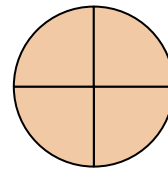
- A. two-quarters
- B. two-halves
- C. one-half

8)



- A. two-fourths
- B. one-half
- C. four-fourths

9)

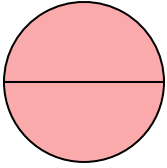


- A. three-quarters
- B. two-halves
- C. four-fourths




Determine which letter best describes the shaded portion.

1)



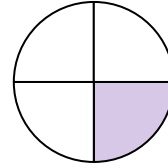
- A. one-half
- B. two-quarters
- C. two-halves

2)



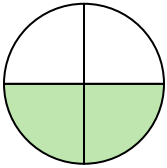
- A. two-quarters
- B. four-fourths
- C. one-half

3)




- A. two-quarters
- B. one-quarter
- C. one-half

4)



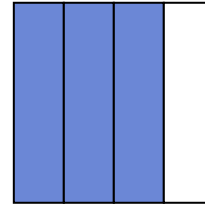
- A. four-fourths
- B. two-fourths
- C. one-half

5)



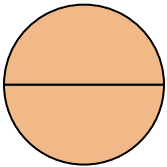
- A. one-half
- B. three-quarters
- C. one-fourth

6)



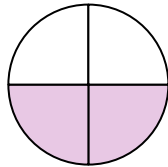
- A. one-half
- B. three-fourths
- C. four-quarters

7)



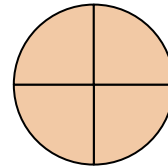
- A. two-quarters
- B. two-halves
- C. one-half

8)



- A. two-fourths
- B. one-half
- C. four-fourths

9)



- A. three-quarters
- B. two-halves
- C. four-fourths

Answers

1. **C**

2. **C**

3. **B**

4. **B**

5. **A**

6. **B**

7. **B**

8. **A**

9. **C**