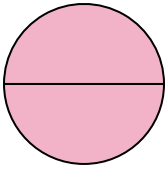




Determine which letter best describes the shaded portion.


Answers

1)



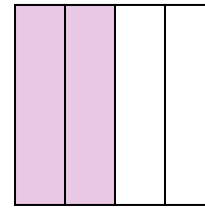
- A. two-halves
- B. one-quarter
- C. two-quarters

2)



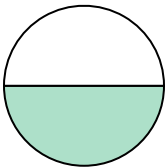
- A. one-half
- B. three-fourths
- C. two-halves

3)



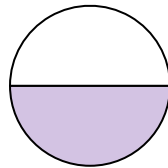
- A. two-fourths
- B. one-fourth
- C. three-fourths

4)



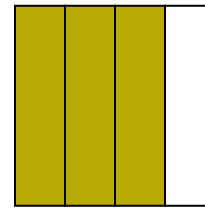
- A. two-fourths
- B. four-fourths
- C. one-half

5)



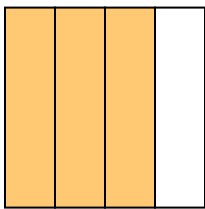
- A. four-fourths
- B. one-half
- C. two-quarters

6)



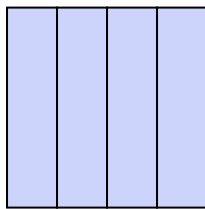
- A. one-fourth
- B. two-fourths
- C. three-fourths

7)



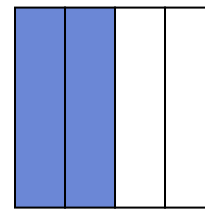
- A. two-fourths
- B. four-quarters
- C. three-quarters

8)



- A. two-quarters
- B. one-half
- C. four-quarters

9)

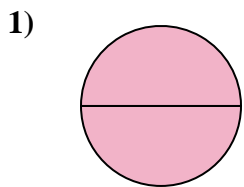


- A. two-halves
- B. two-fourths
- C. one-fourth


- 1. _____
- 2. _____
- 3. _____
- 4. _____
- 5. _____
- 6. _____
- 7. _____
- 8. _____
- 9. _____



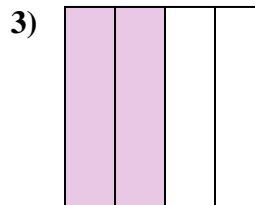
Determine which letter best describes the shaded portion.



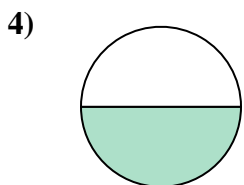
- A. two-halves
- B. one-quarter
- C. two-quarters



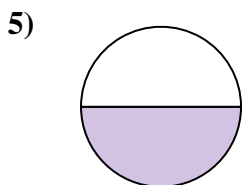
- A. one-half
- B. three-fourths
- C. two-halves



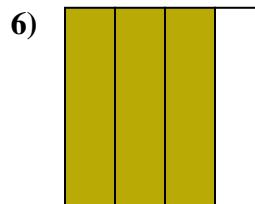
- A. two-fourths
- B. one-fourth
- C. three-fourths



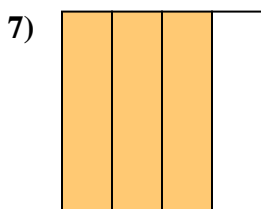
- A. two-fourths
- B. four-fourths
- C. one-half



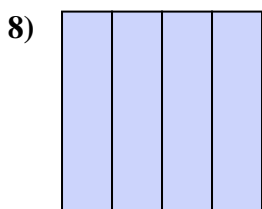
- A. four-fourths
- B. one-half
- C. two-quarters



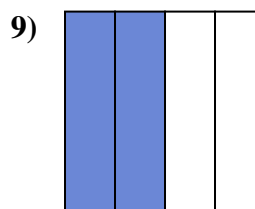
- A. one-fourth
- B. two-fourths
- C. three-fourths



- A. two-fourths
- B. four-quarters
- C. three-quarters



- A. two-quarters
- B. one-half
- C. four-quarters



- A. two-halves
- B. two-fourths
- C. one-fourth

Answers

1. **A**

2. **C**

3. **A**

4. **C**

5. **B**

6. **C**

7. **C**

8. **C**

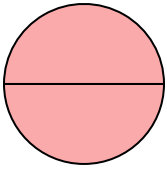
9. **B**



Determine which letter best describes the shaded portion.


Answers

1)



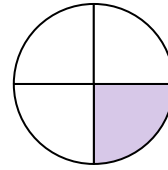
- A. one-half
- B. two-quarters
- C. two-halves

2)



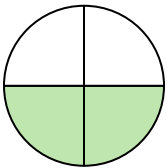
- A. two-quarters
- B. four-fourths
- C. one-half

3)




- A. two-quarters
- B. one-quarter
- C. one-half

4)



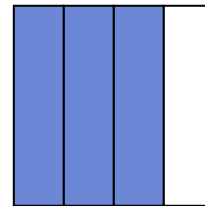
- A. four-fourths
- B. two-fourths
- C. one-half

5)



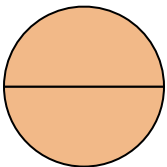
- A. one-half
- B. three-quarters
- C. one-fourth

6)



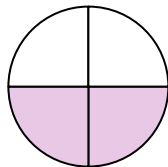
- A. one-half
- B. three-fourths
- C. four-quarters

7)



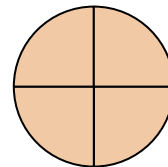
- A. two-quarters
- B. two-halves
- C. one-half

8)



- A. two-fourths
- B. one-half
- C. four-fourths

9)



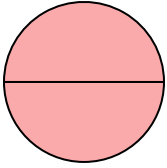
- A. three-quarters
- B. two-halves
- C. four-fourths

- 1. _____
- 2. _____
- 3. _____
- 4. _____
- 5. _____
- 6. _____
- 7. _____
- 8. _____
- 9. _____




Determine which letter best describes the shaded portion.

1)



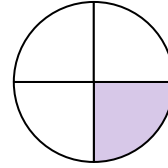
- A. one-half
- B. two-quarters
- C. two-halves

2)



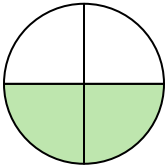
- A. two-quarters
- B. four-fourths
- C. one-half

3)




- A. two-quarters
- B. one-quarter
- C. one-half

4)



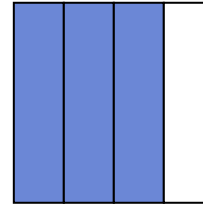
- A. four-fourths
- B. two-fourths
- C. one-half

5)



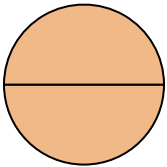
- A. one-half
- B. three-quarters
- C. one-fourth

6)



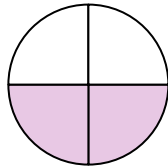
- A. one-half
- B. three-fourths
- C. four-quarters

7)



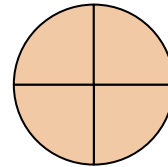
- A. two-quarters
- B. two-halves
- C. one-half

8)



- A. two-fourths
- B. one-half
- C. four-fourths

9)



- A. three-quarters
- B. two-halves
- C. four-fourths

Answers

1. **C**

2. **C**

3. **B**

4. **B**

5. **A**

6. **B**

7. **B**

8. **A**

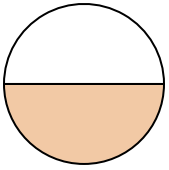
9. **C**



Determine which letter best describes the shaded portion.

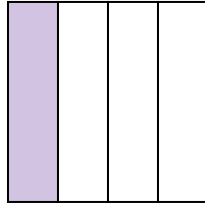
Answers

1)



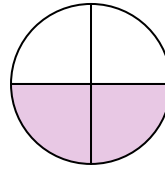
- A. three-fourths
- B. one-half
- C. two-fourths

2)



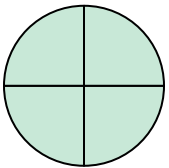
- A. one-quarter
- B. three-quarters
- C. two-halves

3)



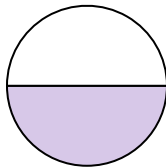
- A. one-fourth
- B. one-half
- C. two-quarters

4)




- A. two-halves
- B. four-fourths
- C. three-fourths

5)




- A. one-half
- B. two-quarters
- C. four-fourths

6)



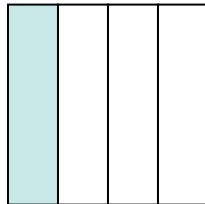
- A. two-halves
- B. one-fourth
- C. two-quarters

7)



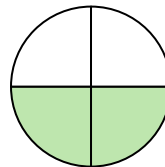
- A. one-half
- B. two-halves
- C. one-fourth

8)



- A. one-quarter
- B. three-quarters
- C. two-halves

9)



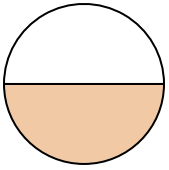
- A. two-fourths
- B. one-quarter
- C. one-half

- 1. _____
- 2. _____
- 3. _____
- 4. _____
- 5. _____
- 6. _____
- 7. _____
- 8. _____
- 9. _____



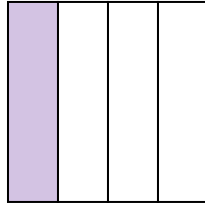
Determine which letter best describes the shaded portion.

1)



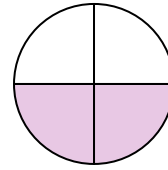
- A. three-fourths
- B. one-half
- C. two-fourths

2)



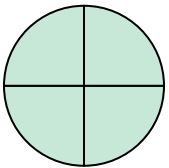
- A. one-quarter
- B. three-quarters
- C. two-halves

3)



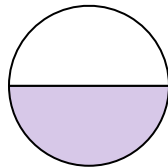
- A. one-fourth
- B. one-half
- C. two-quarters

4)




- A. two-halves
- B. four-fourths
- C. three-fourths

5)




- A. one-half
- B. two-quarters
- C. four-fourths

6)



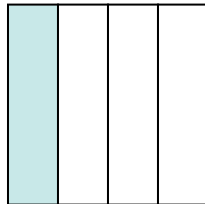
- A. two-halves
- B. one-fourth
- C. two-quarters

7)



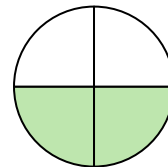
- A. one-half
- B. two-halves
- C. one-fourth

8)



- A. one-quarter
- B. three-quarters
- C. two-halves

9)



- A. two-fourths
- B. one-quarter
- C. one-half

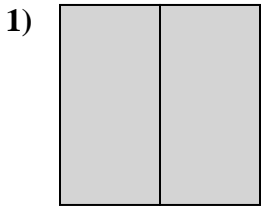
Answers

- 1. **B**
- 2. **A**
- 3. **C**
- 4. **B**
- 5. **A**
- 6. **A**
- 7. **B**
- 8. **A**
- 9. **A**

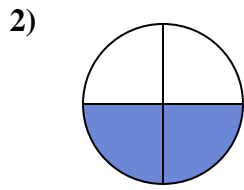


Determine which letter best describes the shaded portion.

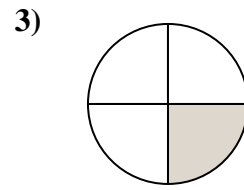
Answers



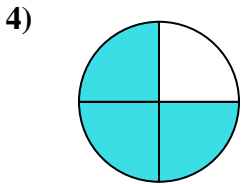
- A. two-quarters
- B. two-halves
- C. three-fourths



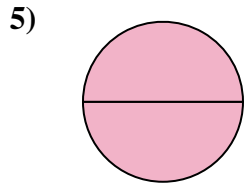
- A. four-fourths
- B. three-fourths
- C. two-fourths



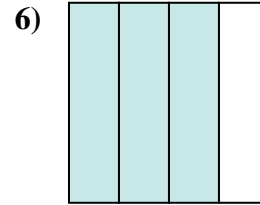
- A. two-quarters
- B. one-fourth
- C. two-halves



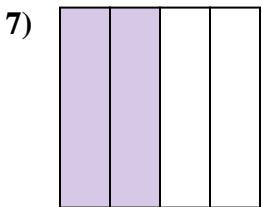
- A. two-fourths
- B. three-fourths
- C. two-halves



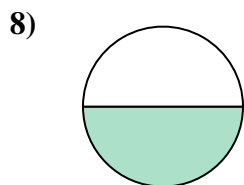
- A. one-fourth
- B. three-fourths
- C. two-halves



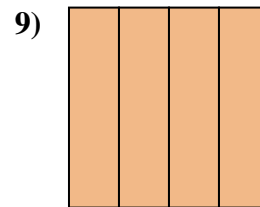
- A. one-fourth
- B. three-fourths
- C. two-halves



- A. one-quarter
- B. three-fourths
- C. two-quarters



- A. two-halves
- B. one-half
- C. two-fourths




- A. four-quarters
- B. three-quarters
- C. one-half

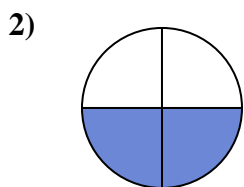
- 1. _____
- 2. _____
- 3. _____
- 4. _____
- 5. _____
- 6. _____
- 7. _____
- 8. _____
- 9. _____



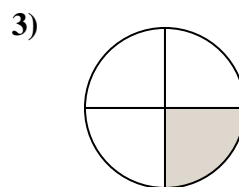
Determine which letter best describes the shaded portion.



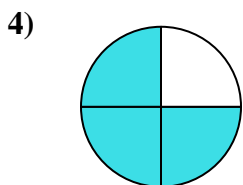
- A. two-quarters
- B. two-halves
- C. three-fourths



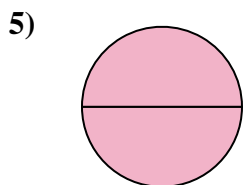
- A. four-fourths
- B. three-fourths
- C. two-fourths



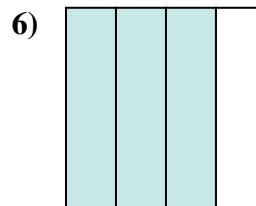
- A. two-quarters
- B. one-fourth
- C. two-halves



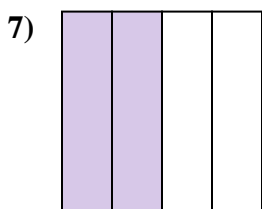
- A. two-fourths
- B. three-fourths
- C. two-halves



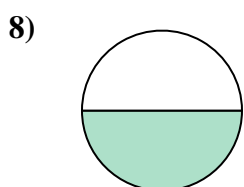
- A. one-fourth
- B. three-fourths
- C. two-halves



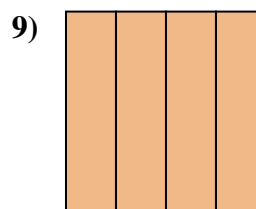
- A. one-fourth
- B. three-fourths
- C. two-halves



- A. one-quarter
- B. three-fourths
- C. two-quarters



- A. two-halves
- B. one-half
- C. two-fourths



- A. four-quarters
- B. three-quarters
- C. one-half

Answers

1. **B**

2. **C**

3. **B**

4. **B**

5. **C**

6. **B**

7. **C**

8. **B**

9. **A**



Determine which letter best describes the shaded portion.


Answers

1)



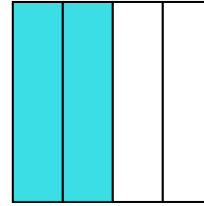
- A. one-half
- B. two-halves
- C. four-quarters

2)



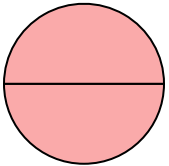
- A. two-halves
- B. one-half
- C. one-fourth

3)



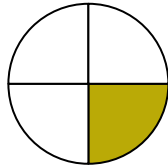
- A. three-quarters
- B. one-quarter
- C. two-quarters

4)



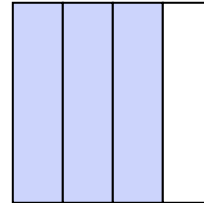
- A. two-halves
- B. three-fourths
- C. one-quarter

5)



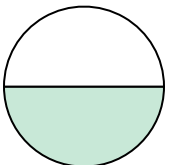
- A. four-fourths
- B. one-fourth
- C. two-quarters

6)



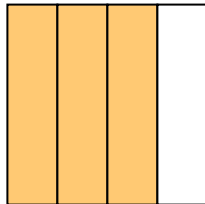
- A. three-fourths
- B. four-fourths
- C. one-half

7)



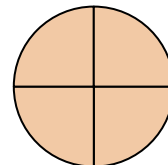
- A. two-quarters
- B. two-halves
- C. one-half

8)



- A. three-fourths
- B. one-quarter
- C. two-halves

9)



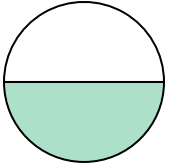
- A. two-halves
- B. three-fourths
- C. four-fourths

- 1. _____
- 2. _____
- 3. _____
- 4. _____
- 5. _____
- 6. _____
- 7. _____
- 8. _____
- 9. _____




Determine which letter best describes the shaded portion.

1)



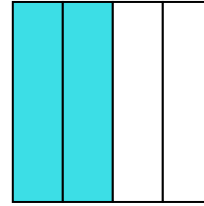
- A. one-half
- B. two-halves
- C. four-quarters

2)



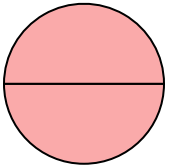
- A. two-halves
- B. one-half
- C. one-fourth

3)



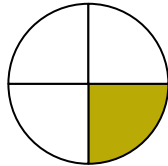
- A. three-quarters
- B. one-quarter
- C. two-quarters

4)



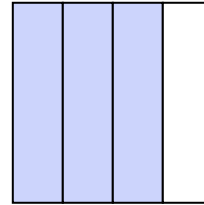
- A. two-halves
- B. three-fourths
- C. one-quarter

5)



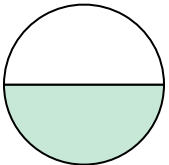
- A. four-fourths
- B. one-fourth
- C. two-quarters

6)



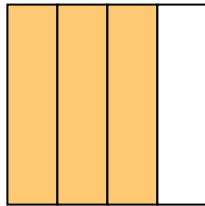
- A. three-fourths
- B. four-fourths
- C. one-half

7)



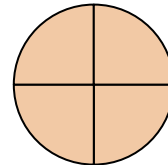
- A. two-quarters
- B. two-halves
- C. one-half

8)



- A. three-fourths
- B. one-quarter
- C. two-halves

9)



- A. two-halves
- B. three-fourths
- C. four-fourths

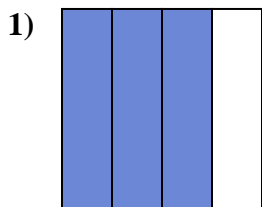
Answers

- 1. **A**
- 2. **A**
- 3. **C**
- 4. **A**
- 5. **B**
- 6. **A**
- 7. **C**
- 8. **A**
- 9. **C**

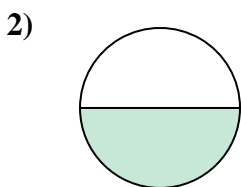


Determine which letter best describes the shaded portion.

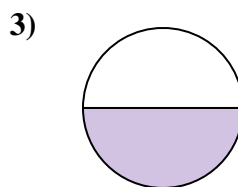
Answers



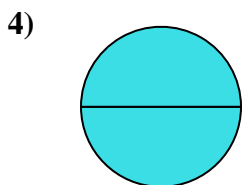
- A. four-fourths
- B. three-quarters
- C. one-quarter



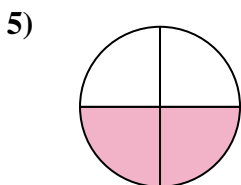
- A. one-half
- B. two-fourths
- C. one-fourth



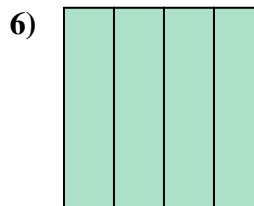
- A. four-fourths
- B. one-half
- C. two-halves



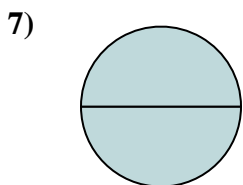
- A. one-quarter
- B. four-quarters
- C. two-halves



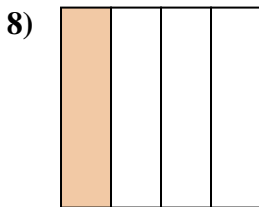
- A. two-quarters
- B. one-half
- C. four-quarters



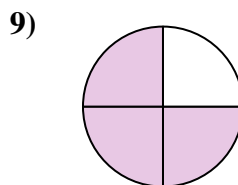
- A. four-quarters
- B. one-quarter
- C. one-half



- A. two-halves
- B. one-half
- C. three-quarters



- A. two-halves
- B. one-fourth
- C. two-quarters

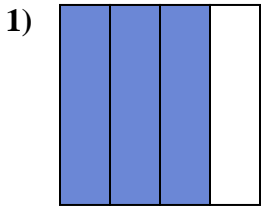


- A. four-fourths
- B. three-quarters
- C. two-halves

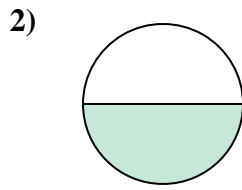
- 1. _____
- 2. _____
- 3. _____
- 4. _____
- 5. _____
- 6. _____
- 7. _____
- 8. _____
- 9. _____



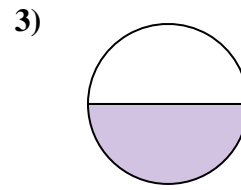
Determine which letter best describes the shaded portion.



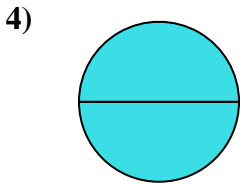
- A. four-fourths
- B. three-quarters
- C. one-quarter



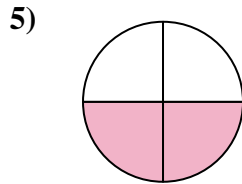
- A. one-half
- B. two-fourths
- C. one-fourth



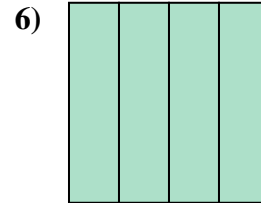
- A. four-fourths
- B. one-half
- C. two-halves



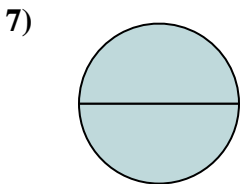
- A. one-quarter
- B. four-quarters
- C. two-halves



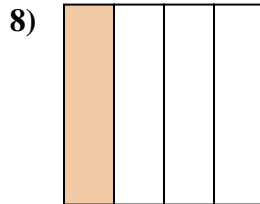
- A. two-quarters
- B. one-half
- C. four-quarters



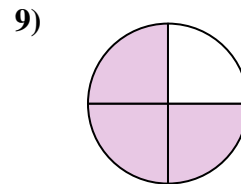
- A. four-quarters
- B. one-quarter
- C. one-half



- A. two-halves
- B. one-half
- C. three-quarters



- A. two-halves
- B. one-fourth
- C. two-quarters



- A. four-fourths
- B. three-quarters
- C. two-halves

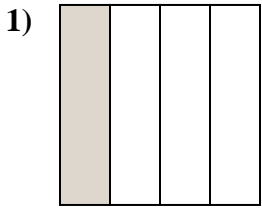
Answers

- 1. **B**
- 2. **A**
- 3. **B**
- 4. **C**
- 5. **A**
- 6. **A**
- 7. **A**
- 8. **B**
- 9. **B**

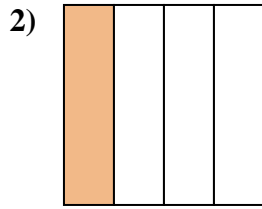


Determine which letter best describes the shaded portion.

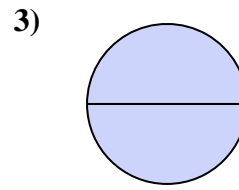
Answers



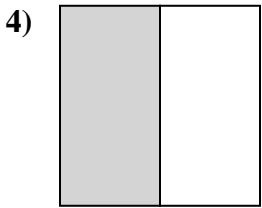
- A. one-fourth
- B. three-fourths
- C. one-half



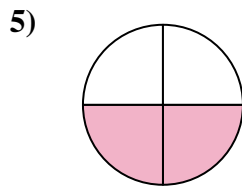
- A. one-half
- B. one-fourth
- C. two-halves



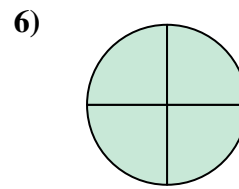
- A. one-half
- B. one-fourth
- C. two-halves



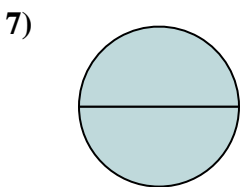
- A. two-halves
- B. four-fourths
- C. one-half



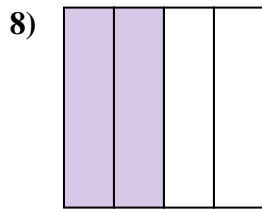
- A. two-quarters
- B. three-fourths
- C. two-halves



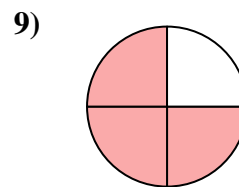
- A. two-quarters
- B. four-fourths
- C. one-half



- A. one-quarter
- B. two-halves
- C. three-fourths



- A. four-quarters
- B. two-quarters
- C. two-halves

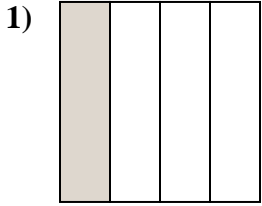


- A. two-halves
- B. three-fourths
- C. two-fourths

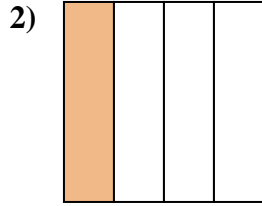
- 1. _____
- 2. _____
- 3. _____
- 4. _____
- 5. _____
- 6. _____
- 7. _____
- 8. _____
- 9. _____



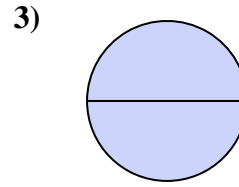
Determine which letter best describes the shaded portion.



- A. one-fourth
- B. three-fourths
- C. one-half



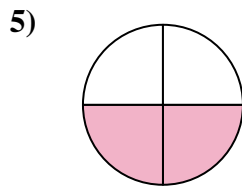
- A. one-half
- B. one-fourth
- C. two-halves



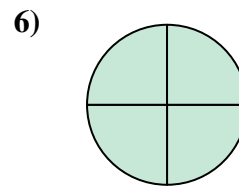
- A. one-half
- B. one-fourth
- C. two-halves



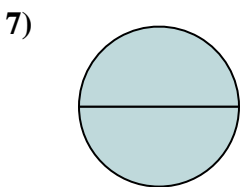
- A. two-halves
- B. four-fourths
- C. one-half



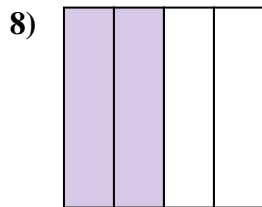
- A. two-quarters
- B. three-fourths
- C. two-halves



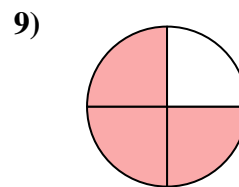
- A. two-quarters
- B. four-fourths
- C. one-half



- A. one-quarter
- B. two-halves
- C. three-fourths



- A. four-quarters
- B. two-quarters
- C. two-halves



- A. two-halves
- B. three-fourths
- C. two-fourths

Answers

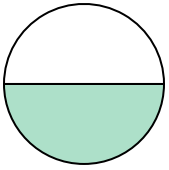
- 1. **A**
- 2. **B**
- 3. **C**
- 4. **C**
- 5. **A**
- 6. **B**
- 7. **B**
- 8. **B**
- 9. **B**



Determine which letter best describes the shaded portion.

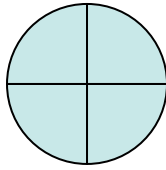
Answers

1)



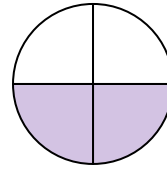
- A. two-fourths
- B. one-half
- C. one-fourth

2)



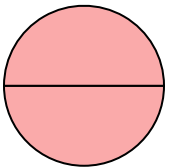
- A. two-halves
- B. four-fourths
- C. one-half

3)



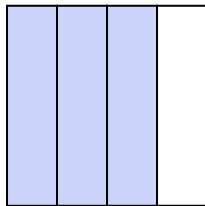
- A. two-fourths
- B. three-fourths
- C. one-quarter

4)




- A. four-quarters
- B. two-quarters
- C. two-halves

5)




- A. three-fourths
- B. two-fourths
- C. four-fourths

6)



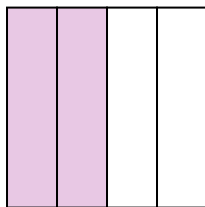
- A. one-fourth
- B. two-halves
- C. one-half

7)



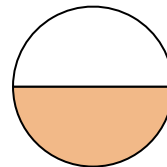
- A. two-fourths
- B. four-quarters
- C. three-quarters

8)



- A. one-half
- B. two-fourths
- C. three-quarters

9)



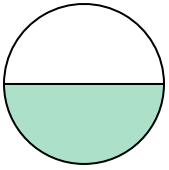
- A. two-halves
- B. two-fourths
- C. one-half

- 1. _____
- 2. _____
- 3. _____
- 4. _____
- 5. _____
- 6. _____
- 7. _____
- 8. _____
- 9. _____



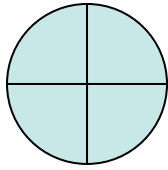
Determine which letter best describes the shaded portion.

1)



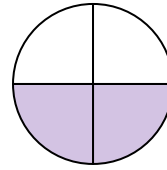
- A. two-fourths
- B. one-half
- C. one-fourth

2)



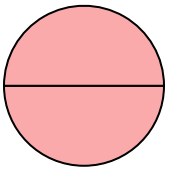
- A. two-halves
- B. four-fourths
- C. one-half

3)



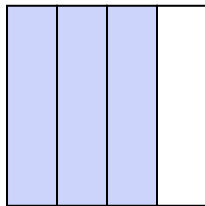
- A. two-fourths
- B. three-fourths
- C. one-quarter

4)




- A. four-quarters
- B. two-quarters
- C. two-halves

5)




- A. three-fourths
- B. two-fourths
- C. four-fourths

6)



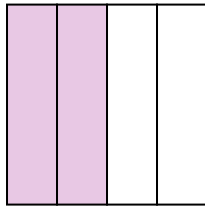
- A. one-fourth
- B. two-halves
- C. one-half

7)



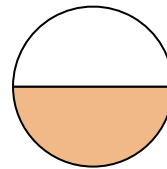
- A. two-fourths
- B. four-quarters
- C. three-quarters

8)



- A. one-half
- B. two-fourths
- C. three-quarters

9)



- A. two-halves
- B. two-fourths
- C. one-half

Answers

1. **B**

2. **B**

3. **A**

4. **C**

5. **A**

6. **B**


7. **B**

8. **B**

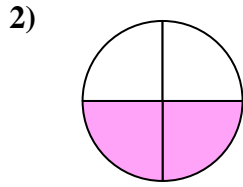
9. **C**



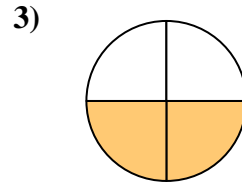
Determine which letter best describes the shaded portion.



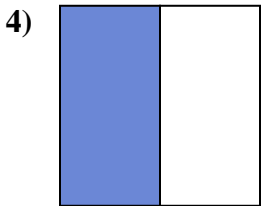
- A. two-halves
- B. one-fourth
- C. one-half



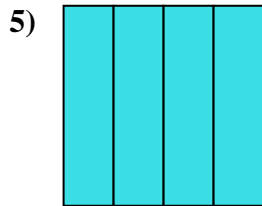
- A. two-fourths
- B. two-halves
- C. one-half



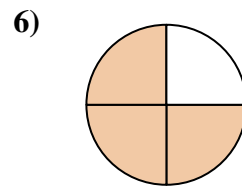
- A. two-quarters
- B. two-halves
- C. one-quarter



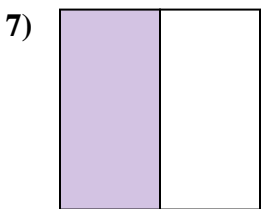
- A. three-quarters
- B. one-half
- C. four-fourths



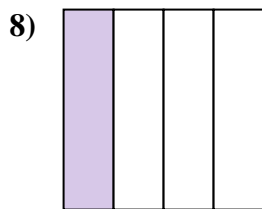
- A. two-quarters
- B. four-quarters
- C. two-halves



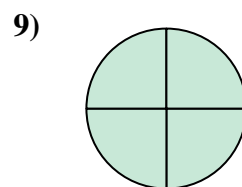
- A. three-quarters
- B. four-quarters
- C. one-quarter



- A. three-quarters
- B. four-fourths
- C. one-half



- A. two-fourths
- B. three-quarters
- C. one-fourth




- A. three-fourths
- B. two-halves
- C. four-fourths

Answers

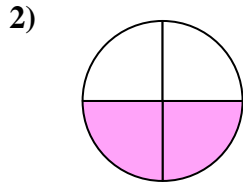
1. _____
2. _____
3. _____
4. _____
5. _____
6. _____
7. _____
8. _____
9. _____



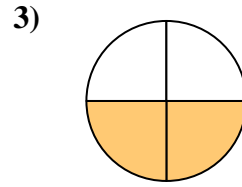
Determine which letter best describes the shaded portion.



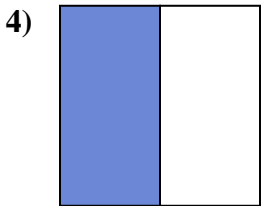
- A. two-halves
- B. one-fourth
- C. one-half



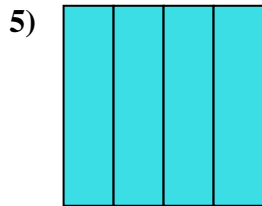
- A. two-fourths
- B. two-halves
- C. one-half



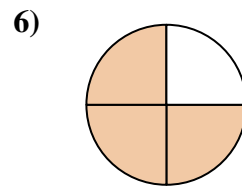
- A. two-quarters
- B. two-halves
- C. one-quarter



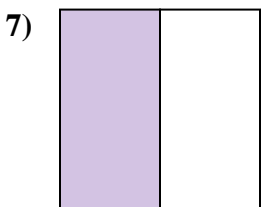
- A. three-quarters
- B. one-half
- C. four-fourths



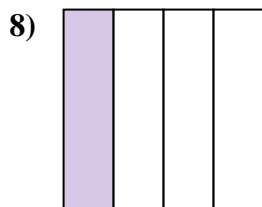
- A. two-quarters
- B. four-quarters
- C. two-halves



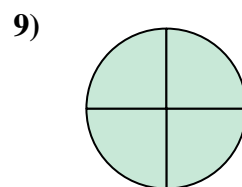
- A. three-quarters
- B. four-quarters
- C. one-quarter



- A. three-quarters
- B. four-fourths
- C. one-half



- A. two-fourths
- B. three-quarters
- C. one-fourth



- A. three-fourths
- B. two-halves
- C. four-fourths

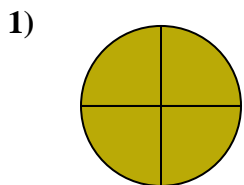
Answers

- 1. **A**
- 2. **A**
- 3. **A**
- 4. **B**
- 5. **B**
- 6. **A**
- 7. **C**
- 8. **C**
- 9. **C**

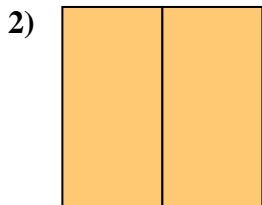


Determine which letter best describes the shaded portion.

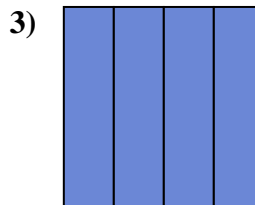
Answers



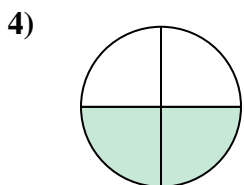
- A. two-halves
- B. four-fourths
- C. one-half



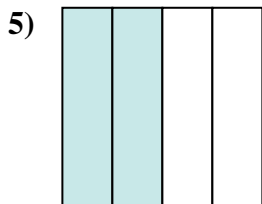
- A. one-quarter
- B. two-fourths
- C. two-halves



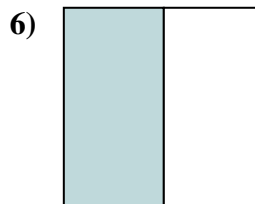
- A. two-halves
- B. two-quarters
- C. four-fourths



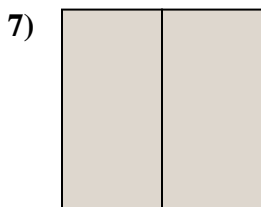
- A. two-fourths
- B. one-fourth
- C. one-half



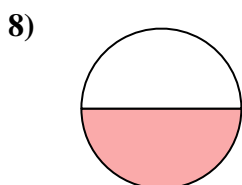
- A. four-quarters
- B. three-quarters
- C. two-fourths



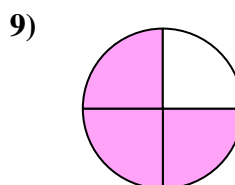
- A. one-half
- B. two-halves
- C. four-fourths



- A. one-half
- B. one-quarter
- C. two-halves



- A. one-half
- B. one-quarter
- C. two-fourths

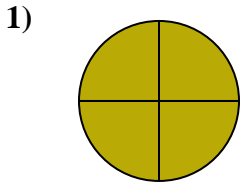


- A. three-quarters
- B. one-quarter
- C. four-quarters

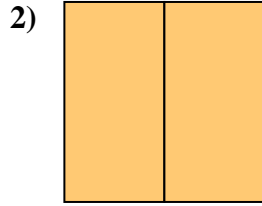
- 1. _____
- 2. _____
- 3. _____
- 4. _____
- 5. _____
- 6. _____
- 7. _____
- 8. _____
- 9. _____



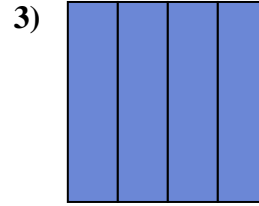
Determine which letter best describes the shaded portion.



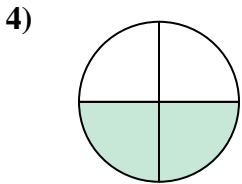
- A. two-halves
- B. four-fourths
- C. one-half



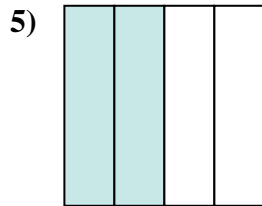
- A. one-quarter
- B. two-fourths
- C. two-halves



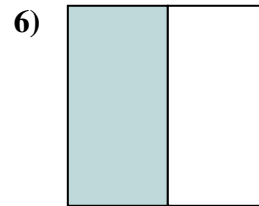
- A. two-halves
- B. two-quarters
- C. four-fourths



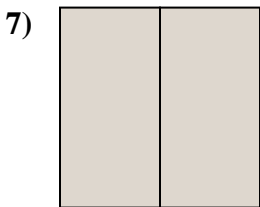
- A. two-fourths
- B. one-fourth
- C. one-half



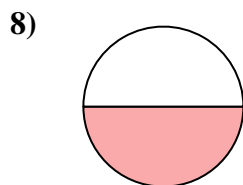
- A. four-quarters
- B. three-quarters
- C. two-fourths



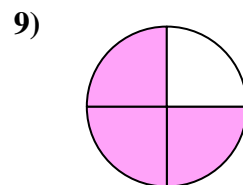
- A. one-half
- B. two-halves
- C. four-fourths



- A. one-half
- B. one-quarter
- C. two-halves



- A. one-half
- B. one-quarter
- C. two-fourths



- A. three-quarters
- B. one-quarter
- C. four-quarters

Answers

- 1. **B**
- 2. **C**
- 3. **C**
- 4. **A**
- 5. **C**
- 6. **A**
- 7. **C**
- 8. **A**
- 9. **A**