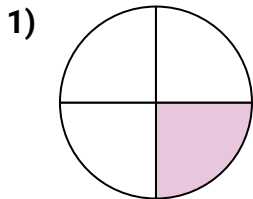
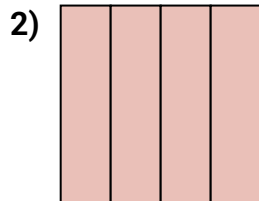
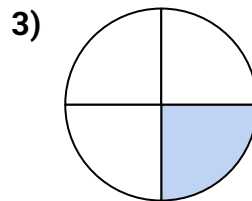


**Determine which letter best describes the shaded portion.****Answers**

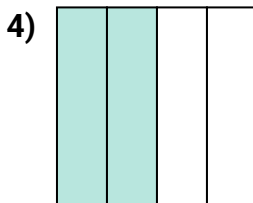
- A. one-quarter
B. two-quarters
C. two-halves



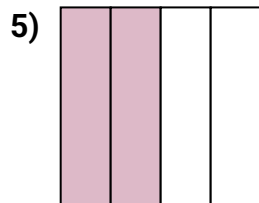
- A. two-quarters
B. one-half
C. four-fourths



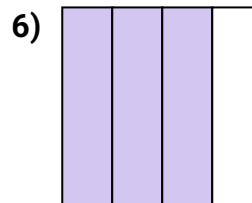
- A. four-quarters
B. two-halves
C. one-fourth



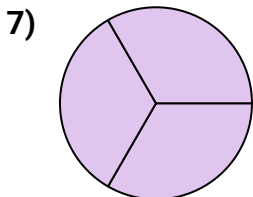
- A. four-fourths
B. two-quarters
C. three-quarters



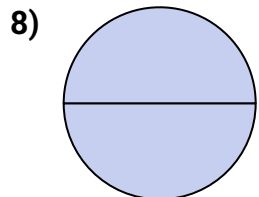
- A. two-quarters
B. one-quarter
C. two-halves



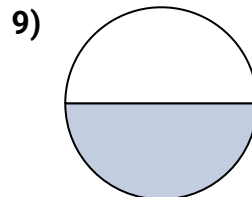
- A. four-quarters
B. three-fourths
C. one-half



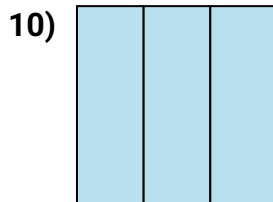
- A. four-fourths
B. one-fourth
C. three-thirds



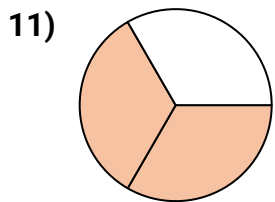
- A. one-half
B. two-halves
C. one-fourth



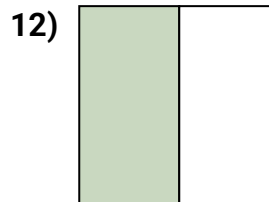
- A. one-half
B. one-quarter
C. two-halves



- A. two-halves
B. three-thirds
C. three-fourths



- A. four-fourths
B. two-thirds
C. two-halves



- A. two-fourths
B. one-fourth
C. one-half

1. _____

2. _____

3. _____

4. _____

5. _____

6. _____

7. _____

8. _____

9. _____

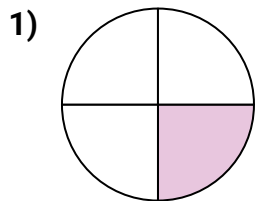
10. _____

11. _____

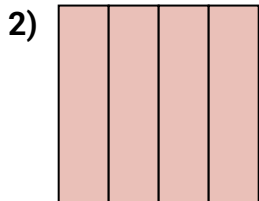
12. _____



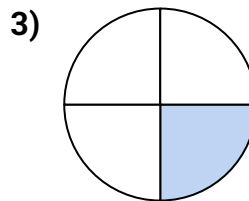
Determine which letter best describes the shaded portion.

Answers

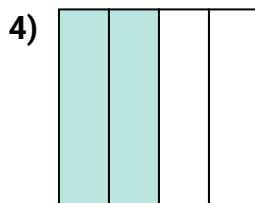
- A. one-quarter
B. two-quarters
C. two-halves



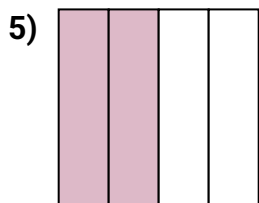
- A. two-quarters
B. one-half
C. four-fourths



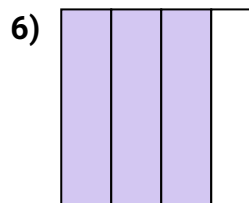
- A. four-quarters
B. two-halves
C. one-fourth



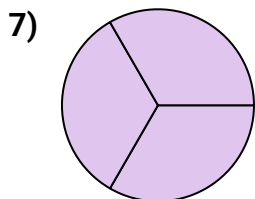
- A. four-fourths
B. two-quarters
C. three-quarters



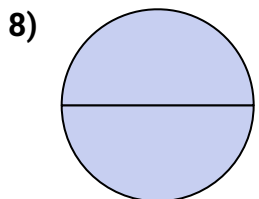
- A. two-quarters
B. one-quarter
C. two-halves



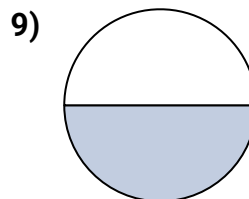
- A. four-quarters
B. three-fourths
C. one-half



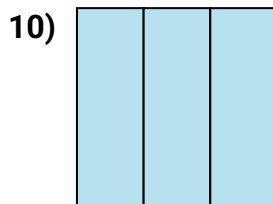
- A. four-fourths
B. one-fourth
C. three-thirds



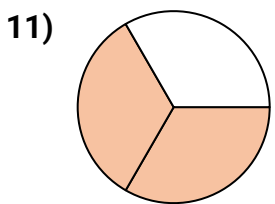
- A. one-half
B. two-halves
C. one-fourth



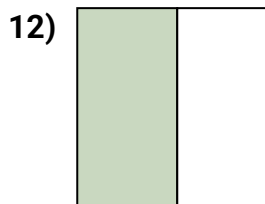
- A. one-half
B. one-quarter
C. two-halves



- A. two-halves
B. three-thirds
C. three-fourths



- A. four-fourths
B. two-thirds
C. two-halves



- A. two-fourths
B. one-fourth
C. one-half

1. **A**2. **C**3. **C**4. **B**5. **A**6. **B**7. **C**8. **B**9. **A**10. **B**11. **B**12. **C**