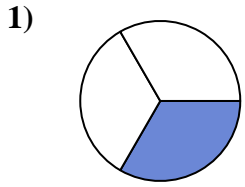


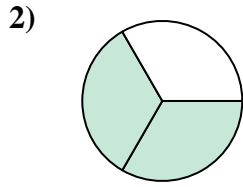


Determine which letter best describes the shaded portion.

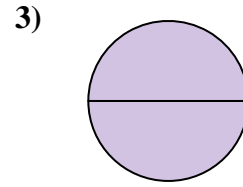
Answers



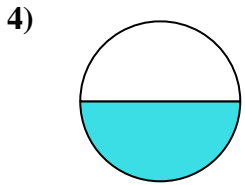
- A. four-quarters
- B. one-quarter
- C. one-third



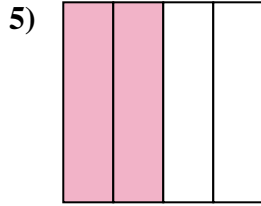
- A. two-thirds
- B. one-half
- C. one-quarter



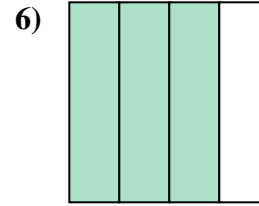
- A. one-fourth
- B. two-quarters
- C. two-halves



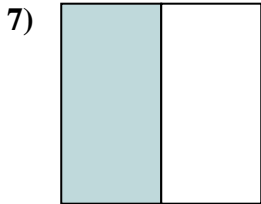
- A. one-half
- B. four-quarters
- C. three-fourths



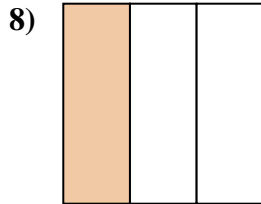
- A. four-quarters
- B. two-halves
- C. two-fourths



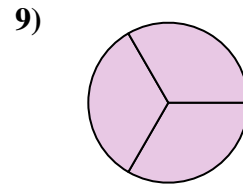
- A. one-fourth
- B. four-quarters
- C. three-quarters



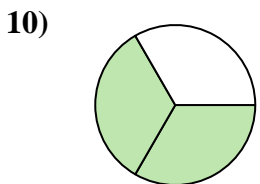
- A. two-fourths
- B. two-halves
- C. one-half



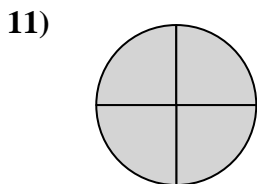
- A. two-fourths
- B. one-third
- C. three-fourths



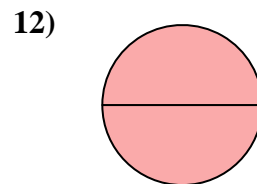
- A. three-thirds
- B. one-half
- C. three-quarters



- A. four-fourths
- B. two-thirds
- C. three-fourths



- A. one-fourth
- B. four-quarters
- C. one-half



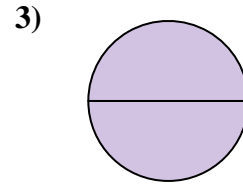
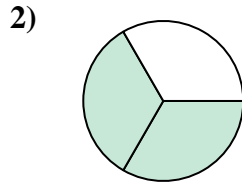
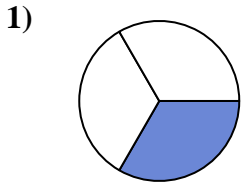
- A. two-halves
- B. two-fourths
- C. four-fourths

- 1. _____
- 2. _____
- 3. _____
- 4. _____
- 5. _____
- 6. _____
- 7. _____
- 8. _____
- 9. _____
- 10. _____
- 11. _____
- 12. _____



Determine which letter best describes the shaded portion.

Answers



1. **C**

- A. four-quarters
- B. one-quarter
- C. one-third

- A. two-thirds
- B. one-half
- C. one-quarter

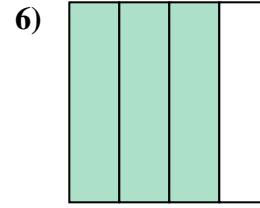
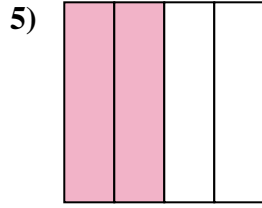
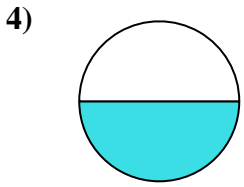
- A. one-fourth
- B. two-quarters
- C. two-halves

2. **A**

3. **C**

4. **A**

5. **C**



6. **C**

- A. one-half
- B. four-quarters
- C. three-fourths

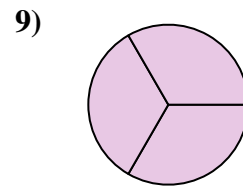
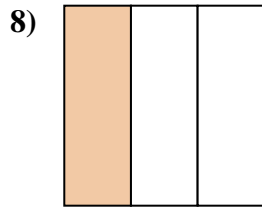
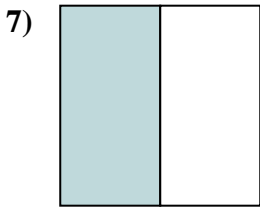
- A. four-quarters
- B. two-halves
- C. two-fourths

- A. one-fourth
- B. four-quarters
- C. three-quarters

7. **C**

8. **B**

9. **A**



- A. two-fourths
- B. two-halves
- C. one-half

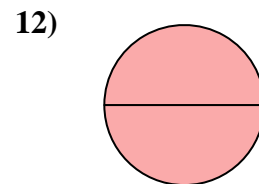
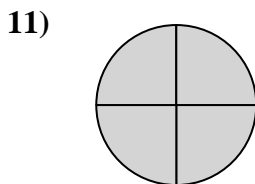
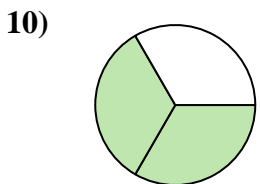
- A. two-fourths
- B. one-third
- C. three-fourths

- A. three-thirds
- B. one-half
- C. three-quarters

10. **B**

11. **B**

12. **A**



- A. four-fourths
- B. two-thirds
- C. three-fourths

- A. one-fourth
- B. four-quarters
- C. one-half

- A. two-halves
- B. two-fourths
- C. four-fourths