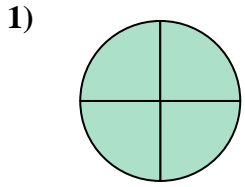


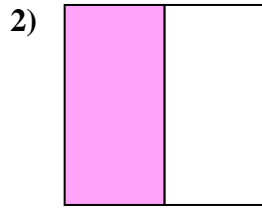


Determine which letter best describes the shaded portion.

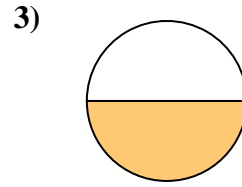
**Answers**



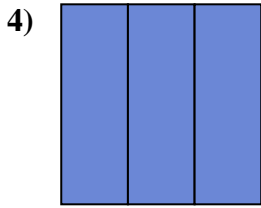
- A. one-fourth
- B. three-fourths
- C. four-fourths



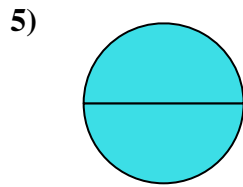
- A. three-quarters
- B. one-quarter
- C. one-half



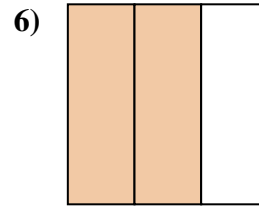
- A. two-quarters
- B. three-quarters
- C. one-half



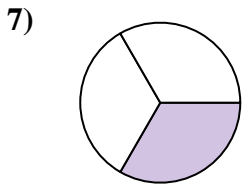
- A. two-halves
- B. one-half
- C. three-thirds



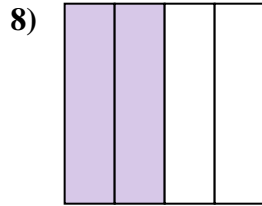
- A. two-halves
- B. one-quarter
- C. two-fourths



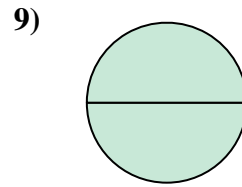
- A. two-thirds
- B. two-halves
- C. one-fourth



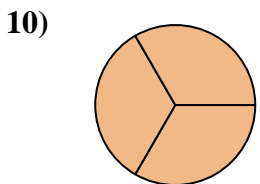
- A. four-fourths
- B. two-halves
- C. one-third



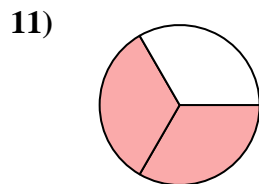
- A. one-half
- B. two-quarters
- C. three-quarters



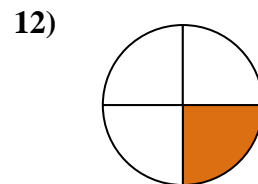
- A. two-quarters
- B. four-fourths
- C. two-halves



- A. three-thirds
- B. one-fourth
- C. two-halves



- A. one-quarter
- B. two-thirds
- C. four-quarters



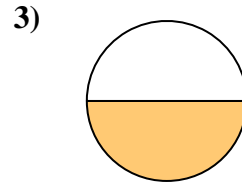
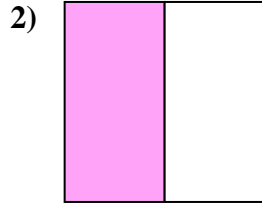
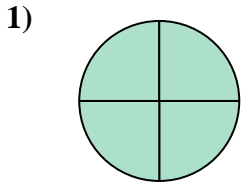
- A. one-fourth
- B. three-quarters
- C. two-halves

- 1. \_\_\_\_\_
- 2. \_\_\_\_\_
- 3. \_\_\_\_\_
- 4. \_\_\_\_\_
- 5. \_\_\_\_\_
- 6. \_\_\_\_\_
- 7. \_\_\_\_\_
- 8. \_\_\_\_\_
- 9. \_\_\_\_\_
- 10. \_\_\_\_\_
- 11. \_\_\_\_\_
- 12. \_\_\_\_\_



Determine which letter best describes the shaded portion.

**Answers**



1.   **C**  

- A. one-fourth
- B. three-fourths
- C. four-fourths

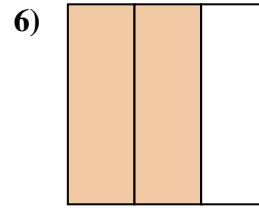
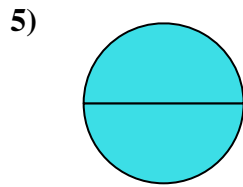
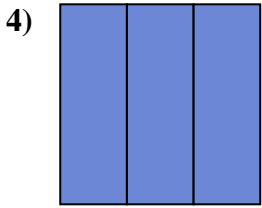
- A. three-quarters
- B. one-quarter
- C. one-half

- A. two-quarters
- B. three-quarters
- C. one-half

2.   **C**  

3.   **C**  

4.   **C**  



5.   **A**  

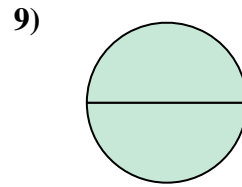
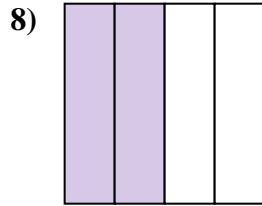
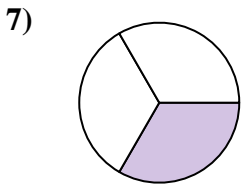
- A. two-halves
- B. one-half
- C. three-thirds

- A. two-halves
- B. one-quarter
- C. two-fourths

- A. two-thirds
- B. two-halves
- C. one-fourth

6.   **A**  

7.   **C**  



8.   **B**  

- A. four-fourths
- B. two-halves
- C. one-third

- A. one-half
- B. two-quarters
- C. three-quarters

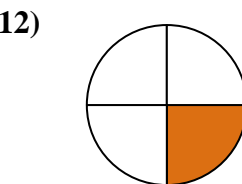
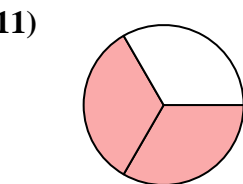
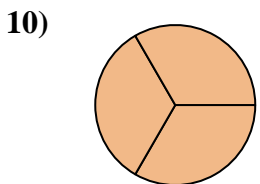
- A. two-quarters
- B. four-fourths
- C. two-halves

9.   **C**  

10.   **A**  

11.   **B**  

12.   **A**  



- A. three-thirds
- B. one-fourth
- C. two-halves

- A. one-quarter
- B. two-thirds
- C. four-quarters

- A. one-fourth
- B. three-quarters
- C. two-halves