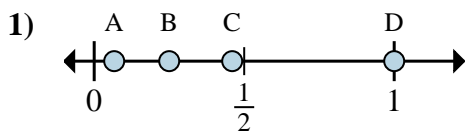




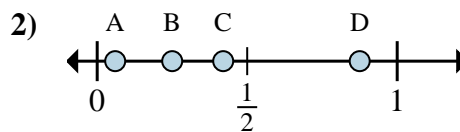
Determine which letter best shows the location of the fraction.

Answers



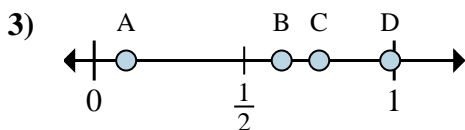
a. Which letter best shows $\frac{4}{4}$?

b. Which letter best shows $\frac{1}{4}$?



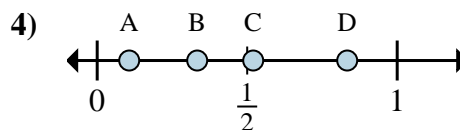
a. Which letter best shows $\frac{7}{8}$?

b. Which letter best shows $\frac{2}{8}$?



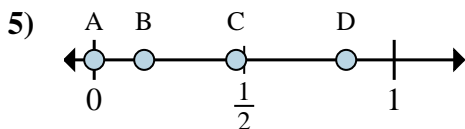
a. Which letter best shows $\frac{5}{8}$?

b. Which letter best shows $\frac{6}{8}$?



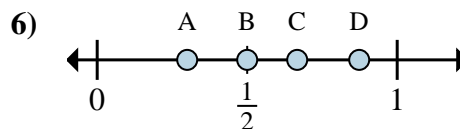
a. Which letter best shows $\frac{5}{6}$?

b. Which letter best shows $\frac{2}{6}$?



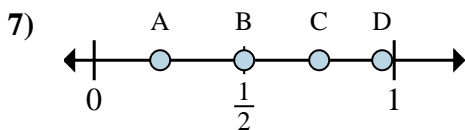
a. Which letter best shows $\frac{0}{6}$?

b. Which letter best shows $\frac{1}{6}$?



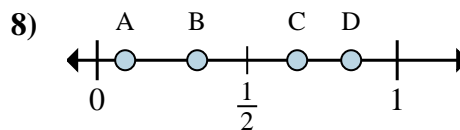
a. Which letter best shows $\frac{3}{6}$?

b. Which letter best shows $\frac{4}{6}$?



a. Which letter best shows $\frac{3}{4}$?

b. Which letter best shows $\frac{2}{4}$?



a. Which letter best shows $\frac{2}{3}$?

b. Which letter best shows $\frac{1}{3}$?

1. _____

2. _____

3. _____

4. _____

5. _____

6. _____

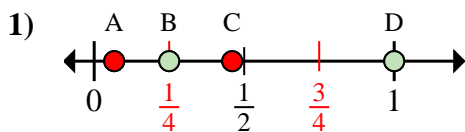
7. _____

8. _____

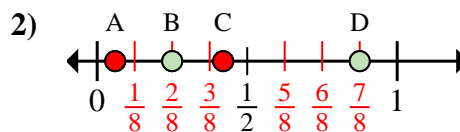


Determine which letter best shows the location of the fraction.

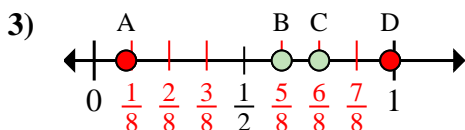
Answers



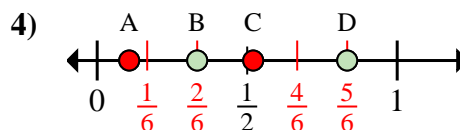
- a. Which letter best shows $\frac{4}{4}$?
 b. Which letter best shows $\frac{1}{4}$?



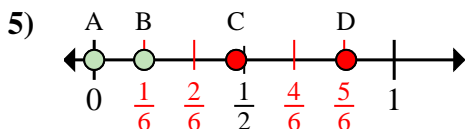
- a. Which letter best shows $\frac{7}{8}$?
 b. Which letter best shows $\frac{2}{8}$?



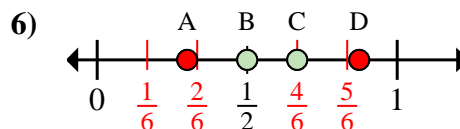
- a. Which letter best shows $\frac{5}{8}$?
 b. Which letter best shows $\frac{6}{8}$?



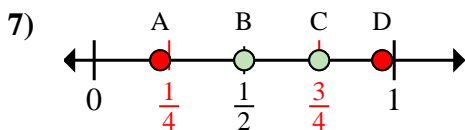
- a. Which letter best shows $\frac{5}{6}$?
 b. Which letter best shows $\frac{2}{6}$?



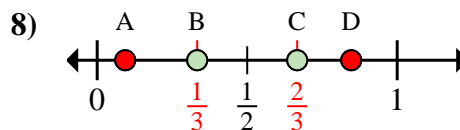
- a. Which letter best shows $\frac{0}{6}$?
 b. Which letter best shows $\frac{1}{6}$?



- a. Which letter best shows $\frac{3}{6}$?
 b. Which letter best shows $\frac{4}{6}$?



- a. Which letter best shows $\frac{3}{4}$?
 b. Which letter best shows $\frac{2}{4}$?



- a. Which letter best shows $\frac{2}{3}$?
 b. Which letter best shows $\frac{1}{3}$?

1. D B
 2. D B
 3. B C
 4. D B
 5. A B
 6. B C
 7. C B
 8. C B