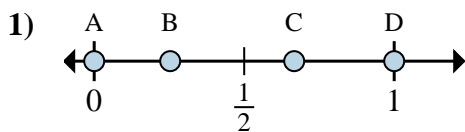




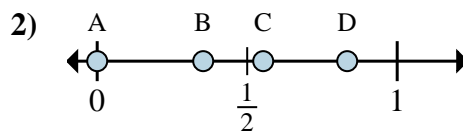
Determine which letter best shows the location of the fraction.

**Answers**



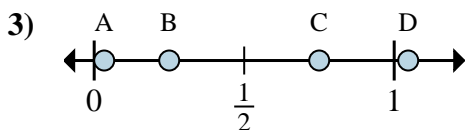
a. Which letter best shows  $\frac{0}{3}$ ?

b. Which letter best shows  $\frac{2}{3}$ ?



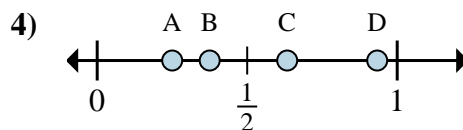
a. Which letter best shows  $\frac{0}{6}$ ?

b. Which letter best shows  $\frac{5}{6}$ ?



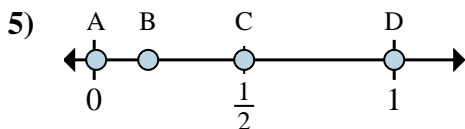
a. Which letter best shows  $\frac{3}{4}$ ?

b. Which letter best shows  $\frac{1}{4}$ ?



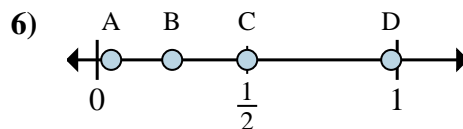
a. Which letter best shows  $\frac{2}{8}$ ?

b. Which letter best shows  $\frac{3}{8}$ ?



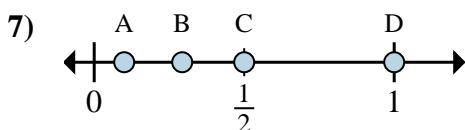
a. Which letter best shows  $\frac{2}{4}$ ?

b. Which letter best shows  $\frac{4}{4}$ ?



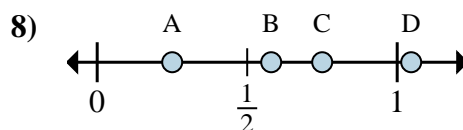
a. Which letter best shows  $\frac{1}{4}$ ?

b. Which letter best shows  $\frac{2}{4}$ ?



a. Which letter best shows  $\frac{1}{2}$ ?

b. Which letter best shows  $\frac{2}{2}$ ?



a. Which letter best shows  $\frac{1}{4}$ ?

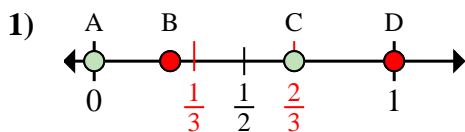
b. Which letter best shows  $\frac{3}{4}$ ?

1. \_\_\_\_\_
2. \_\_\_\_\_
3. \_\_\_\_\_
4. \_\_\_\_\_
5. \_\_\_\_\_
6. \_\_\_\_\_
7. \_\_\_\_\_
8. \_\_\_\_\_

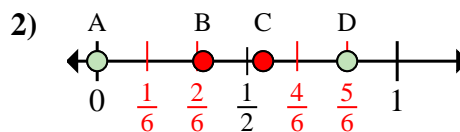


Determine which letter best shows the location of the fraction.

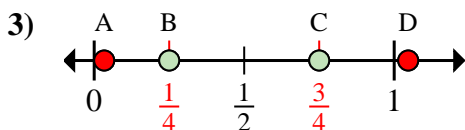
**Answers**



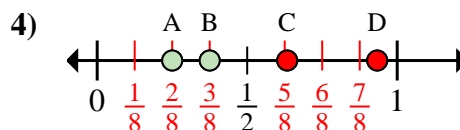
- a. Which letter best shows  $\frac{0}{3}$ ?  
 b. Which letter best shows  $\frac{2}{3}$ ?



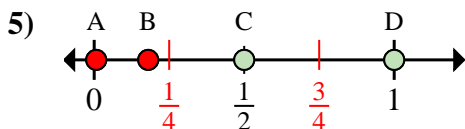
- a. Which letter best shows  $\frac{0}{6}$ ?  
 b. Which letter best shows  $\frac{5}{6}$ ?



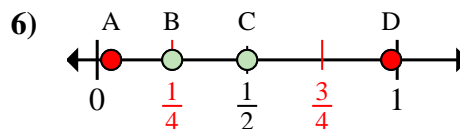
- a. Which letter best shows  $\frac{3}{4}$ ?  
 b. Which letter best shows  $\frac{1}{4}$ ?



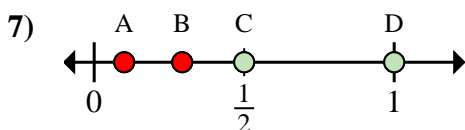
- a. Which letter best shows  $\frac{2}{8}$ ?  
 b. Which letter best shows  $\frac{3}{8}$ ?



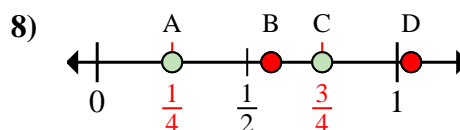
- a. Which letter best shows  $\frac{2}{4}$ ?  
 b. Which letter best shows  $\frac{4}{4}$ ?



- a. Which letter best shows  $\frac{1}{4}$ ?  
 b. Which letter best shows  $\frac{2}{4}$ ?



- a. Which letter best shows  $\frac{1}{2}$ ?  
 b. Which letter best shows  $\frac{2}{2}$ ?



- a. Which letter best shows  $\frac{1}{4}$ ?  
 b. Which letter best shows  $\frac{3}{4}$ ?

1. A C  
 2. A D  
 3. C B  
 4. A B  
 5. C D  
 6. B C  
 7. C D  
 8. A C