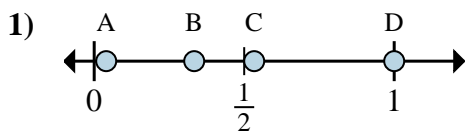


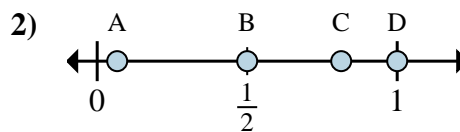


Determine which letter best shows the location of the fraction.

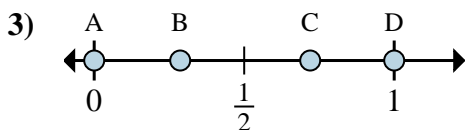
**Answers**



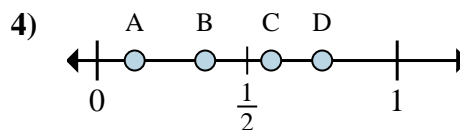
- a. Which letter best shows  $\frac{1}{3}$ ?
- b. Which letter best shows  $\frac{3}{3}$ ?



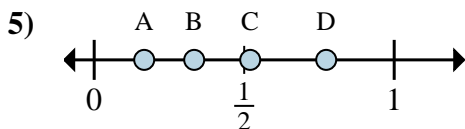
- a. Which letter best shows  $\frac{1}{2}$ ?
- b. Which letter best shows  $\frac{2}{2}$ ?



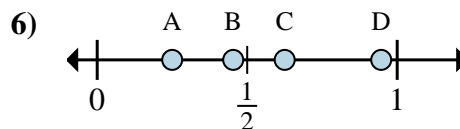
- a. Which letter best shows  $\frac{0}{6}$ ?
- b. Which letter best shows  $\frac{6}{6}$ ?



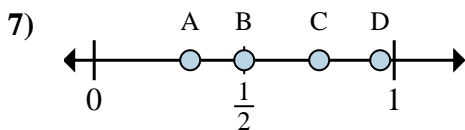
- a. Which letter best shows  $\frac{1}{8}$ ?
- b. Which letter best shows  $\frac{6}{8}$ ?



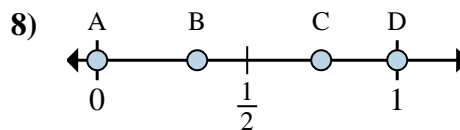
- a. Which letter best shows  $\frac{2}{6}$ ?
- b. Which letter best shows  $\frac{1}{6}$ ?



- a. Which letter best shows  $\frac{5}{8}$ ?
- b. Which letter best shows  $\frac{2}{8}$ ?



- a. Which letter best shows  $\frac{3}{4}$ ?
- b. Which letter best shows  $\frac{2}{4}$ ?



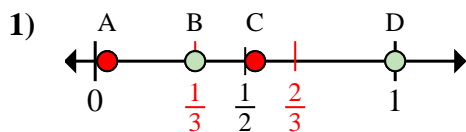
- a. Which letter best shows  $\frac{0}{6}$ ?
- b. Which letter best shows  $\frac{6}{6}$ ?

- 1. \_\_\_\_\_
- 2. \_\_\_\_\_
- 3. \_\_\_\_\_
- 4. \_\_\_\_\_
- 5. \_\_\_\_\_
- 6. \_\_\_\_\_
- 7. \_\_\_\_\_
- 8. \_\_\_\_\_

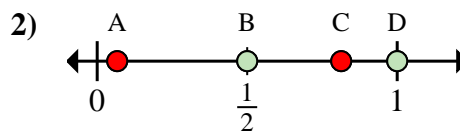


Determine which letter best shows the location of the fraction.

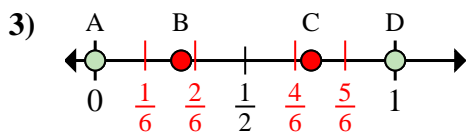
**Answers**



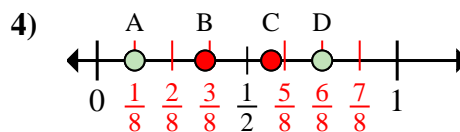
- a. Which letter best shows  $\frac{1}{3}$ ?
- b. Which letter best shows  $\frac{3}{3}$ ?



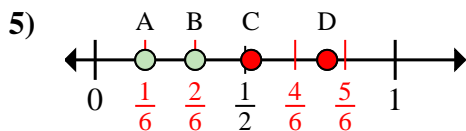
- a. Which letter best shows  $\frac{1}{2}$ ?
- b. Which letter best shows  $\frac{2}{2}$ ?



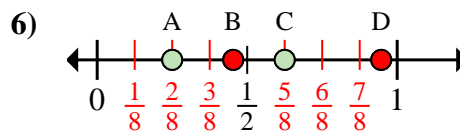
- a. Which letter best shows  $\frac{0}{6}$ ?
- b. Which letter best shows  $\frac{6}{6}$ ?



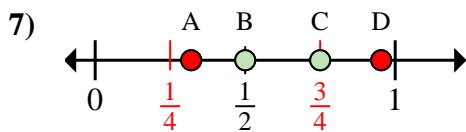
- a. Which letter best shows  $\frac{1}{8}$ ?
- b. Which letter best shows  $\frac{6}{8}$ ?



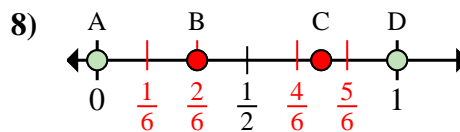
- a. Which letter best shows  $\frac{2}{6}$ ?
- b. Which letter best shows  $\frac{1}{6}$ ?



- a. Which letter best shows  $\frac{5}{8}$ ?
- b. Which letter best shows  $\frac{2}{8}$ ?



- a. Which letter best shows  $\frac{3}{4}$ ?
- b. Which letter best shows  $\frac{2}{4}$ ?



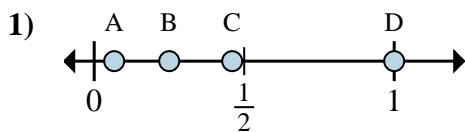
- a. Which letter best shows  $\frac{0}{6}$ ?
- b. Which letter best shows  $\frac{6}{6}$ ?

- 1.   B     D
- 2.   B     D
- 3.   A     D
- 4.   A     D
- 5.   B     A
- 6.   C     A
- 7.   C     B
- 8.   A     D



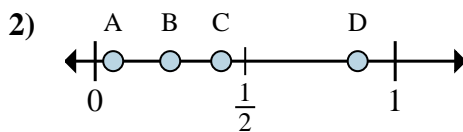
Determine which letter best shows the location of the fraction.

**Answers**



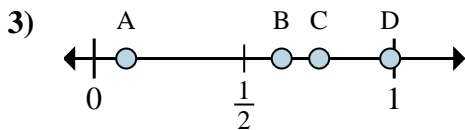
a. Which letter best shows  $\frac{4}{4}$ ?

b. Which letter best shows  $\frac{1}{4}$ ?



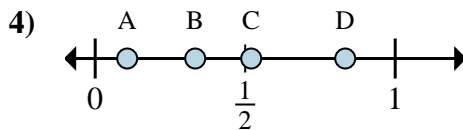
a. Which letter best shows  $\frac{7}{8}$ ?

b. Which letter best shows  $\frac{2}{8}$ ?



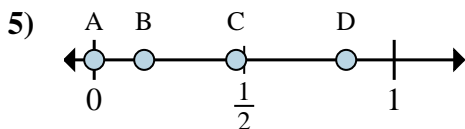
a. Which letter best shows  $\frac{5}{8}$ ?

b. Which letter best shows  $\frac{6}{8}$ ?



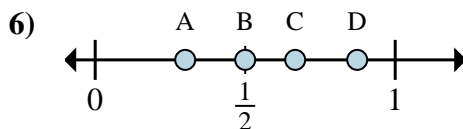
a. Which letter best shows  $\frac{5}{6}$ ?

b. Which letter best shows  $\frac{2}{6}$ ?



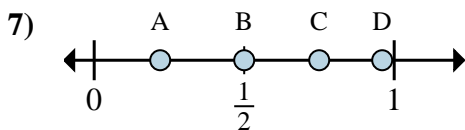
a. Which letter best shows  $\frac{0}{6}$ ?

b. Which letter best shows  $\frac{1}{6}$ ?



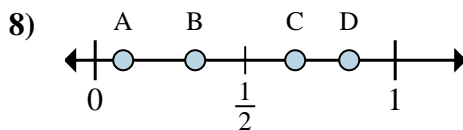
a. Which letter best shows  $\frac{3}{6}$ ?

b. Which letter best shows  $\frac{4}{6}$ ?



a. Which letter best shows  $\frac{3}{4}$ ?

b. Which letter best shows  $\frac{2}{4}$ ?



a. Which letter best shows  $\frac{2}{3}$ ?

b. Which letter best shows  $\frac{1}{3}$ ?

1. \_\_\_\_\_

2. \_\_\_\_\_

3. \_\_\_\_\_

4. \_\_\_\_\_

5. \_\_\_\_\_

6. \_\_\_\_\_

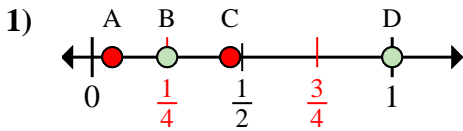
7. \_\_\_\_\_

8. \_\_\_\_\_

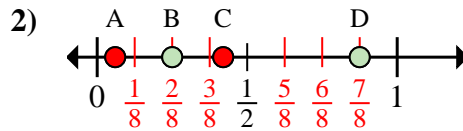


Determine which letter best shows the location of the fraction.

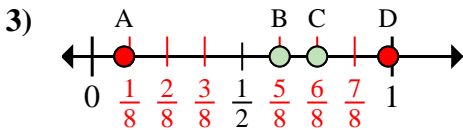
**Answers**



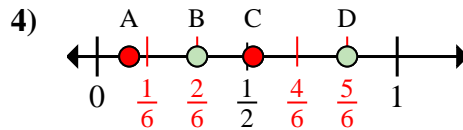
- a. Which letter best shows  $\frac{4}{4}$ ?  
 b. Which letter best shows  $\frac{1}{4}$ ?



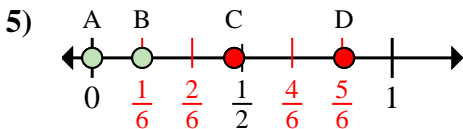
- a. Which letter best shows  $\frac{7}{8}$ ?  
 b. Which letter best shows  $\frac{2}{8}$ ?



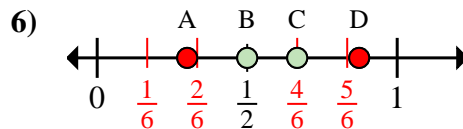
- a. Which letter best shows  $\frac{5}{8}$ ?  
 b. Which letter best shows  $\frac{6}{8}$ ?



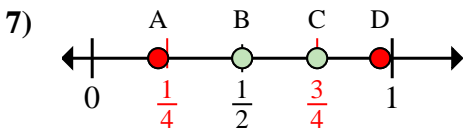
- a. Which letter best shows  $\frac{5}{6}$ ?  
 b. Which letter best shows  $\frac{2}{6}$ ?



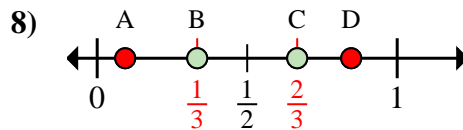
- a. Which letter best shows  $\frac{0}{6}$ ?  
 b. Which letter best shows  $\frac{1}{6}$ ?



- a. Which letter best shows  $\frac{3}{6}$ ?  
 b. Which letter best shows  $\frac{4}{6}$ ?



- a. Which letter best shows  $\frac{3}{4}$ ?  
 b. Which letter best shows  $\frac{2}{4}$ ?



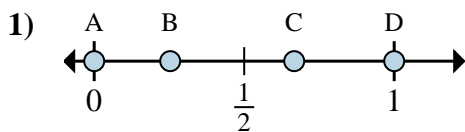
- a. Which letter best shows  $\frac{2}{3}$ ?  
 b. Which letter best shows  $\frac{1}{3}$ ?

1.   D     B    
 2.   D     B    
 3.   B     C    
 4.   D     B    
 5.   A     B    
 6.   B     C    
 7.   C     B    
 8.   C     B



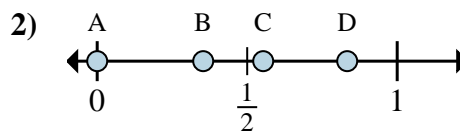
Determine which letter best shows the location of the fraction.

**Answers**



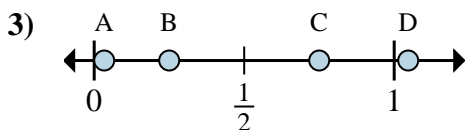
a. Which letter best shows  $\frac{0}{3}$ ?

b. Which letter best shows  $\frac{2}{3}$ ?



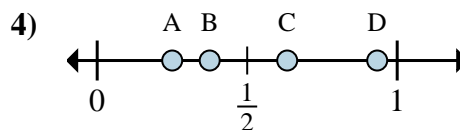
a. Which letter best shows  $\frac{0}{6}$ ?

b. Which letter best shows  $\frac{5}{6}$ ?



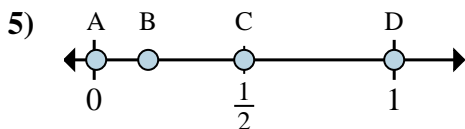
a. Which letter best shows  $\frac{3}{4}$ ?

b. Which letter best shows  $\frac{1}{4}$ ?



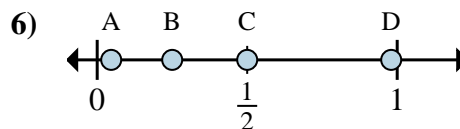
a. Which letter best shows  $\frac{2}{8}$ ?

b. Which letter best shows  $\frac{3}{8}$ ?



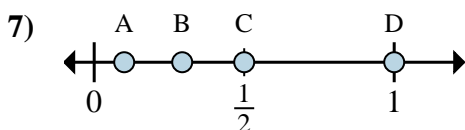
a. Which letter best shows  $\frac{2}{4}$ ?

b. Which letter best shows  $\frac{4}{4}$ ?



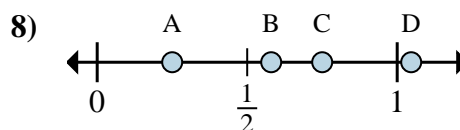
a. Which letter best shows  $\frac{1}{4}$ ?

b. Which letter best shows  $\frac{2}{4}$ ?



a. Which letter best shows  $\frac{1}{2}$ ?

b. Which letter best shows  $\frac{2}{2}$ ?



a. Which letter best shows  $\frac{1}{4}$ ?

b. Which letter best shows  $\frac{3}{4}$ ?

1. \_\_\_\_\_

2. \_\_\_\_\_

3. \_\_\_\_\_

4. \_\_\_\_\_

5. \_\_\_\_\_

6. \_\_\_\_\_

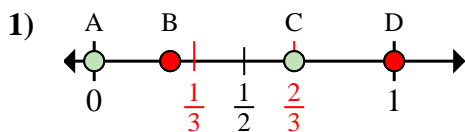
7. \_\_\_\_\_

8. \_\_\_\_\_

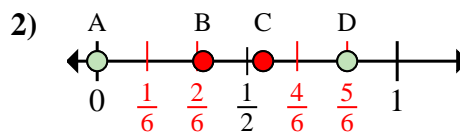


Determine which letter best shows the location of the fraction.

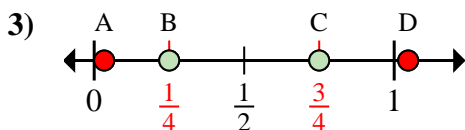
**Answers**



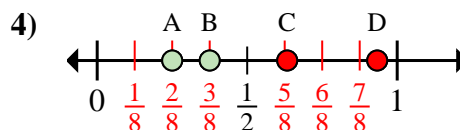
- a. Which letter best shows  $\frac{0}{3}$ ?  
 b. Which letter best shows  $\frac{2}{3}$ ?



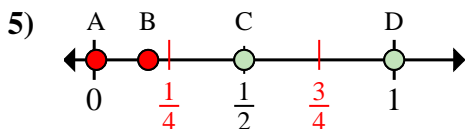
- a. Which letter best shows  $\frac{0}{6}$ ?  
 b. Which letter best shows  $\frac{5}{6}$ ?



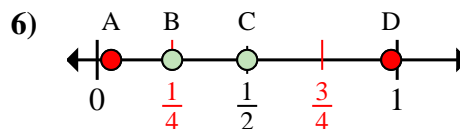
- a. Which letter best shows  $\frac{3}{4}$ ?  
 b. Which letter best shows  $\frac{1}{4}$ ?



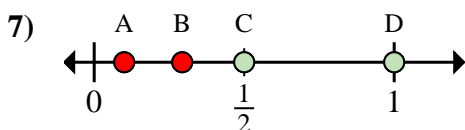
- a. Which letter best shows  $\frac{2}{8}$ ?  
 b. Which letter best shows  $\frac{3}{8}$ ?



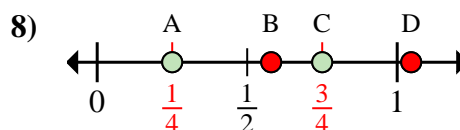
- a. Which letter best shows  $\frac{2}{4}$ ?  
 b. Which letter best shows  $\frac{4}{4}$ ?



- a. Which letter best shows  $\frac{1}{4}$ ?  
 b. Which letter best shows  $\frac{2}{4}$ ?



- a. Which letter best shows  $\frac{1}{2}$ ?  
 b. Which letter best shows  $\frac{2}{2}$ ?



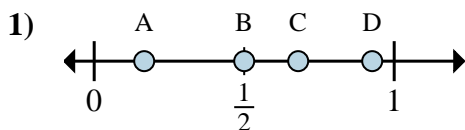
- a. Which letter best shows  $\frac{1}{4}$ ?  
 b. Which letter best shows  $\frac{3}{4}$ ?

1. A C  
 2. A D  
 3. C B  
 4. A B  
 5. C D  
 6. B C  
 7. C D  
 8. A C

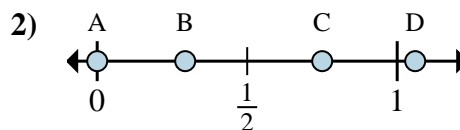


Determine which letter best shows the location of the fraction.

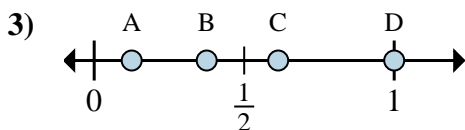
**Answers**



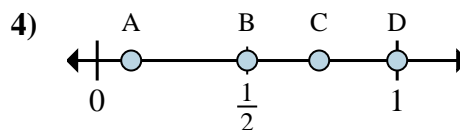
- a. Which letter best shows  $\frac{1}{6}$ ?
- b. Which letter best shows  $\frac{3}{6}$ ?



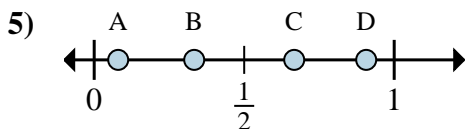
- a. Which letter best shows  $\frac{0}{4}$ ?
- b. Which letter best shows  $\frac{3}{4}$ ?



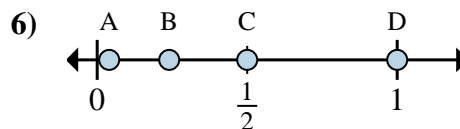
- a. Which letter best shows  $\frac{1}{8}$ ?
- b. Which letter best shows  $\frac{3}{8}$ ?



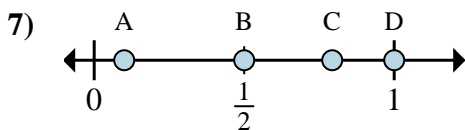
- a. Which letter best shows  $\frac{2}{2}$ ?
- b. Which letter best shows  $\frac{1}{2}$ ?



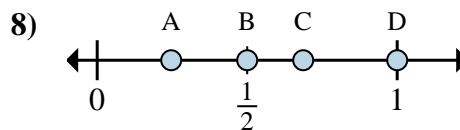
- a. Which letter best shows  $\frac{1}{3}$ ?
- b. Which letter best shows  $\frac{2}{3}$ ?



- a. Which letter best shows  $\frac{2}{2}$ ?
- b. Which letter best shows  $\frac{1}{2}$ ?



- a. Which letter best shows  $\frac{1}{2}$ ?
- b. Which letter best shows  $\frac{2}{2}$ ?



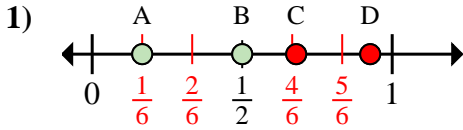
- a. Which letter best shows  $\frac{1}{2}$ ?
- b. Which letter best shows  $\frac{2}{2}$ ?

- 1. \_\_\_\_\_
- 2. \_\_\_\_\_
- 3. \_\_\_\_\_
- 4. \_\_\_\_\_
- 5. \_\_\_\_\_
- 6. \_\_\_\_\_
- 7. \_\_\_\_\_
- 8. \_\_\_\_\_

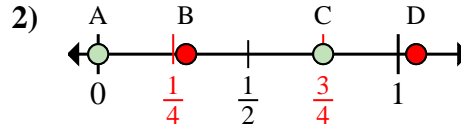


Determine which letter best shows the location of the fraction.

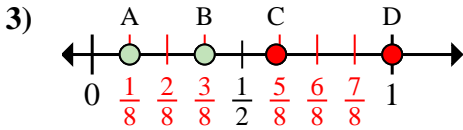
**Answers**



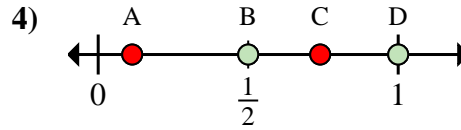
- a. Which letter best shows  $\frac{1}{6}$ ?
- b. Which letter best shows  $\frac{3}{6}$ ?



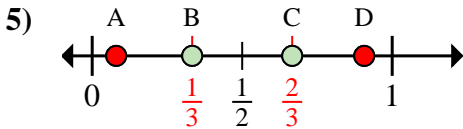
- a. Which letter best shows  $\frac{0}{4}$ ?
- b. Which letter best shows  $\frac{3}{4}$ ?



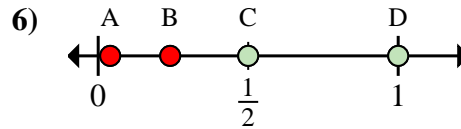
- a. Which letter best shows  $\frac{1}{8}$ ?
- b. Which letter best shows  $\frac{3}{8}$ ?



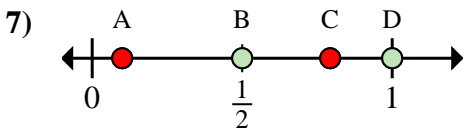
- a. Which letter best shows  $\frac{2}{2}$ ?
- b. Which letter best shows  $\frac{1}{2}$ ?



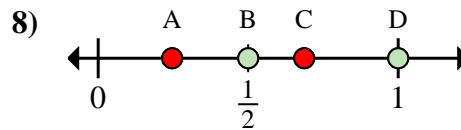
- a. Which letter best shows  $\frac{1}{3}$ ?
- b. Which letter best shows  $\frac{2}{3}$ ?



- a. Which letter best shows  $\frac{2}{2}$ ?
- b. Which letter best shows  $\frac{1}{2}$ ?



- a. Which letter best shows  $\frac{1}{2}$ ?
- b. Which letter best shows  $\frac{2}{2}$ ?



- a. Which letter best shows  $\frac{1}{2}$ ?
- b. Which letter best shows  $\frac{2}{2}$ ?

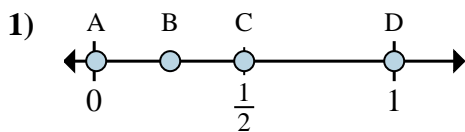
- 1. A B
- 2. A C
- 3. A B
- 4. D B
- 5. B C
- 6. D C
- 7. B D
- 8. B D



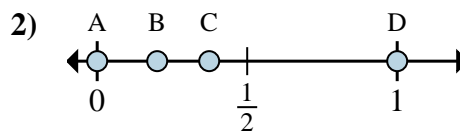


Determine which letter best shows the location of the fraction.

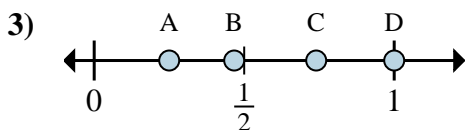
**Answers**



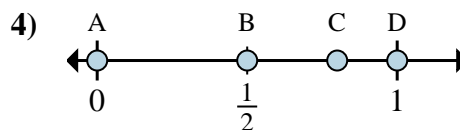
- a. Which letter best shows  $\frac{6}{6}$ ?
- b. Which letter best shows  $\frac{3}{6}$ ?



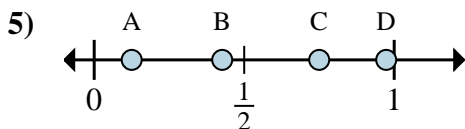
- a. Which letter best shows  $\frac{0}{2}$ ?
- b. Which letter best shows  $\frac{2}{2}$ ?



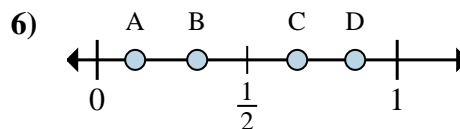
- a. Which letter best shows  $\frac{1}{4}$ ?
- b. Which letter best shows  $\frac{4}{4}$ ?



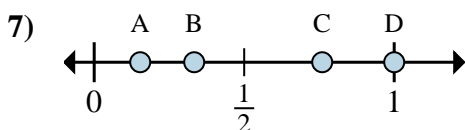
- a. Which letter best shows  $\frac{0}{3}$ ?
- b. Which letter best shows  $\frac{3}{3}$ ?



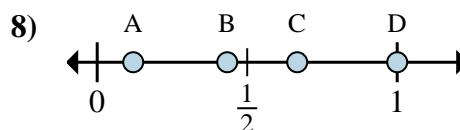
- a. Which letter best shows  $\frac{1}{8}$ ?
- b. Which letter best shows  $\frac{6}{8}$ ?



- a. Which letter best shows  $\frac{2}{3}$ ?
- b. Which letter best shows  $\frac{1}{3}$ ?



- a. Which letter best shows  $\frac{1}{3}$ ?
- b. Which letter best shows  $\frac{3}{3}$ ?



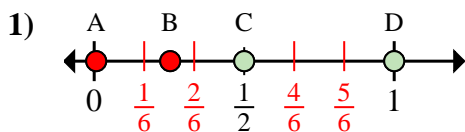
- a. Which letter best shows  $\frac{3}{3}$ ?
- b. Which letter best shows  $\frac{2}{3}$ ?

- 1. \_\_\_\_\_
- 2. \_\_\_\_\_
- 3. \_\_\_\_\_
- 4. \_\_\_\_\_
- 5. \_\_\_\_\_
- 6. \_\_\_\_\_
- 7. \_\_\_\_\_
- 8. \_\_\_\_\_

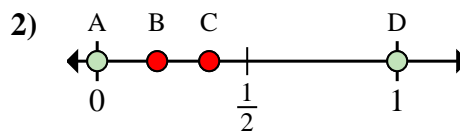


Determine which letter best shows the location of the fraction.

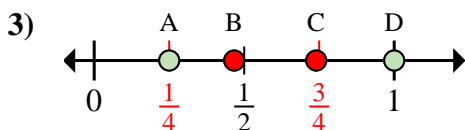
**Answers**



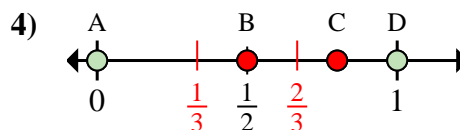
- a. Which letter best shows  $\frac{6}{6}$ ?
- b. Which letter best shows  $\frac{3}{6}$ ?



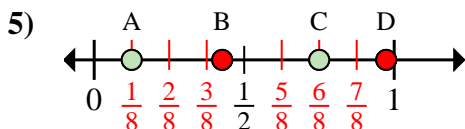
- a. Which letter best shows  $\frac{0}{2}$ ?
- b. Which letter best shows  $\frac{2}{2}$ ?



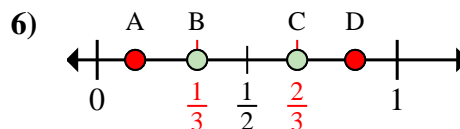
- a. Which letter best shows  $\frac{1}{4}$ ?
- b. Which letter best shows  $\frac{4}{4}$ ?



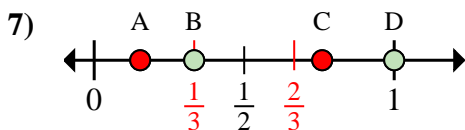
- a. Which letter best shows  $\frac{0}{3}$ ?
- b. Which letter best shows  $\frac{3}{3}$ ?



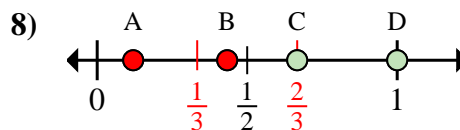
- a. Which letter best shows  $\frac{1}{8}$ ?
- b. Which letter best shows  $\frac{6}{8}$ ?



- a. Which letter best shows  $\frac{2}{3}$ ?
- b. Which letter best shows  $\frac{1}{3}$ ?



- a. Which letter best shows  $\frac{1}{3}$ ?
- b. Which letter best shows  $\frac{3}{3}$ ?



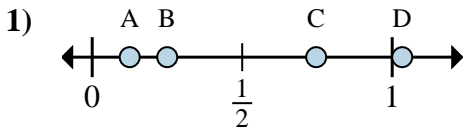
- a. Which letter best shows  $\frac{3}{3}$ ?
- b. Which letter best shows  $\frac{2}{3}$ ?

- 1.   D     C
- 2.   A     D
- 3.   A     D
- 4.   A     D
- 5.   A     C
- 6.   C     B
- 7.   B     D
- 8.   D     C

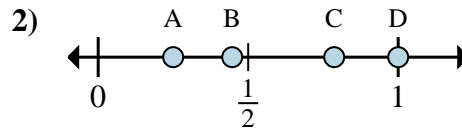


Determine which letter best shows the location of the fraction.

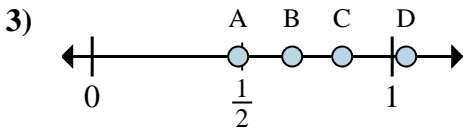
**Answers**



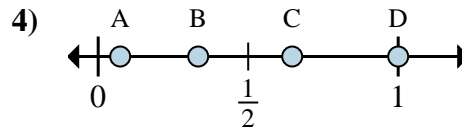
- a. Which letter best shows  $\frac{1}{8}$ ?
- b. Which letter best shows  $\frac{2}{8}$ ?



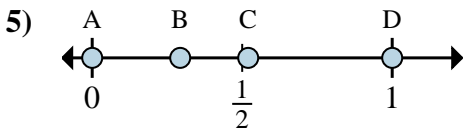
- a. Which letter best shows  $\frac{4}{4}$ ?
- b. Which letter best shows  $\frac{1}{4}$ ?



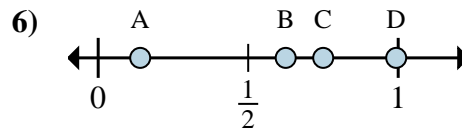
- a. Which letter best shows  $\frac{5}{6}$ ?
- b. Which letter best shows  $\frac{4}{6}$ ?



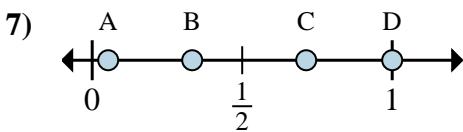
- a. Which letter best shows  $\frac{3}{3}$ ?
- b. Which letter best shows  $\frac{1}{3}$ ?



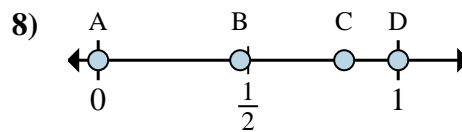
- a. Which letter best shows  $\frac{0}{2}$ ?
- b. Which letter best shows  $\frac{2}{2}$ ?



- a. Which letter best shows  $\frac{6}{8}$ ?
- b. Which letter best shows  $\frac{5}{8}$ ?



- a. Which letter best shows  $\frac{1}{3}$ ?
- b. Which letter best shows  $\frac{3}{3}$ ?



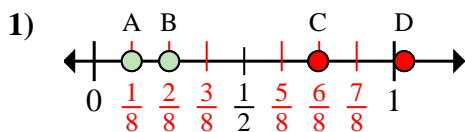
- a. Which letter best shows  $\frac{0}{2}$ ?
- b. Which letter best shows  $\frac{2}{2}$ ?

- 1. \_\_\_\_\_
- 2. \_\_\_\_\_
- 3. \_\_\_\_\_
- 4. \_\_\_\_\_
- 5. \_\_\_\_\_
- 6. \_\_\_\_\_
- 7. \_\_\_\_\_
- 8. \_\_\_\_\_

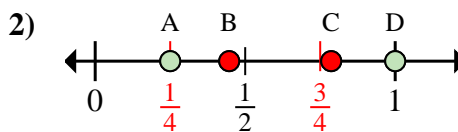


Determine which letter best shows the location of the fraction.

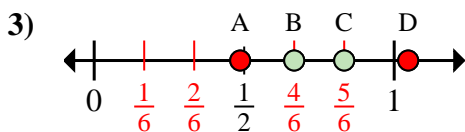
**Answers**



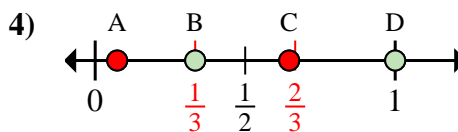
- a. Which letter best shows  $\frac{1}{8}$ ?
- b. Which letter best shows  $\frac{2}{8}$ ?



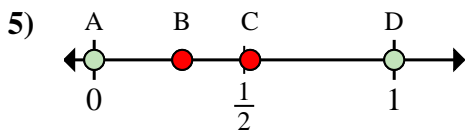
- a. Which letter best shows  $\frac{4}{4}$ ?
- b. Which letter best shows  $\frac{1}{4}$ ?



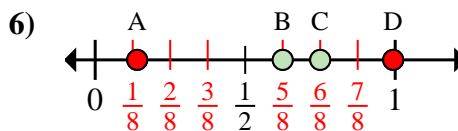
- a. Which letter best shows  $\frac{5}{6}$ ?
- b. Which letter best shows  $\frac{4}{6}$ ?



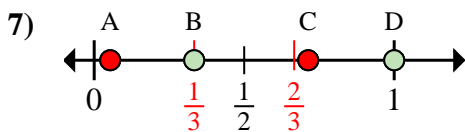
- a. Which letter best shows  $\frac{3}{3}$ ?
- b. Which letter best shows  $\frac{1}{3}$ ?



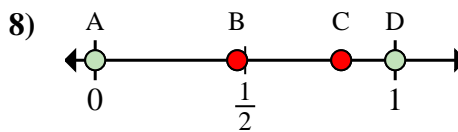
- a. Which letter best shows  $\frac{0}{2}$ ?
- b. Which letter best shows  $\frac{2}{2}$ ?



- a. Which letter best shows  $\frac{6}{8}$ ?
- b. Which letter best shows  $\frac{5}{8}$ ?



- a. Which letter best shows  $\frac{1}{3}$ ?
- b. Which letter best shows  $\frac{3}{3}$ ?



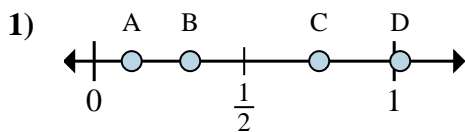
- a. Which letter best shows  $\frac{0}{2}$ ?
- b. Which letter best shows  $\frac{2}{2}$ ?

- 1.   A     B
- 2.   D     A
- 3.   C     B
- 4.   D     B
- 5.   A     D
- 6.   C     B
- 7.   B     D
- 8.   A     D

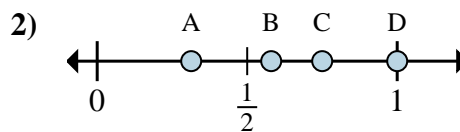


Determine which letter best shows the location of the fraction.

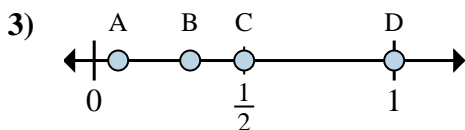
**Answers**



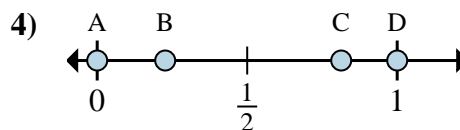
- a. Which letter best shows  $\frac{1}{8}$ ?
- b. Which letter best shows  $\frac{6}{8}$ ?



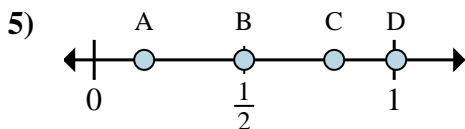
- a. Which letter best shows  $\frac{3}{4}$ ?
- b. Which letter best shows  $\frac{4}{4}$ ?



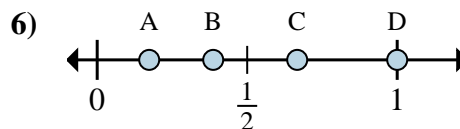
- a. Which letter best shows  $\frac{8}{8}$ ?
- b. Which letter best shows  $\frac{4}{8}$ ?



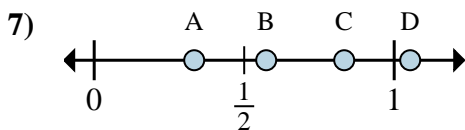
- a. Which letter best shows  $\frac{0}{2}$ ?
- b. Which letter best shows  $\frac{2}{2}$ ?



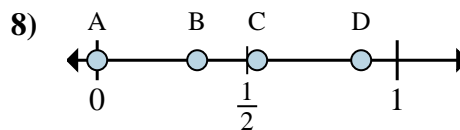
- a. Which letter best shows  $\frac{1}{6}$ ?
- b. Which letter best shows  $\frac{3}{6}$ ?



- a. Which letter best shows  $\frac{2}{3}$ ?
- b. Which letter best shows  $\frac{3}{3}$ ?



- a. Which letter best shows  $\frac{5}{6}$ ?
- b. Which letter best shows  $\frac{2}{6}$ ?



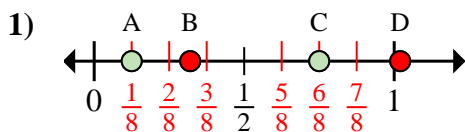
- a. Which letter best shows  $\frac{0}{3}$ ?
- b. Which letter best shows  $\frac{1}{3}$ ?

- 1. \_\_\_\_\_
- 2. \_\_\_\_\_
- 3. \_\_\_\_\_
- 4. \_\_\_\_\_
- 5. \_\_\_\_\_
- 6. \_\_\_\_\_
- 7. \_\_\_\_\_
- 8. \_\_\_\_\_

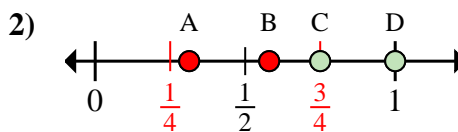


Determine which letter best shows the location of the fraction.

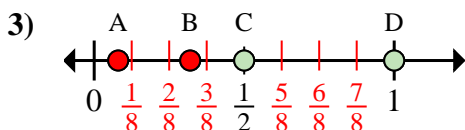
**Answers**



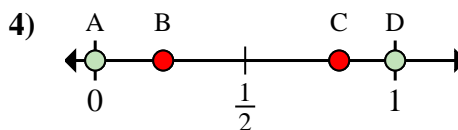
- a. Which letter best shows  $\frac{1}{8}$ ?  
 b. Which letter best shows  $\frac{6}{8}$ ?



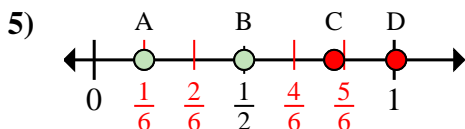
- a. Which letter best shows  $\frac{3}{4}$ ?  
 b. Which letter best shows  $\frac{4}{4}$ ?



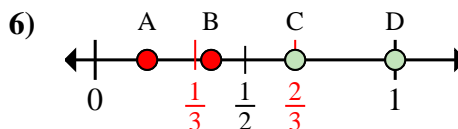
- a. Which letter best shows  $\frac{8}{8}$ ?  
 b. Which letter best shows  $\frac{4}{8}$ ?



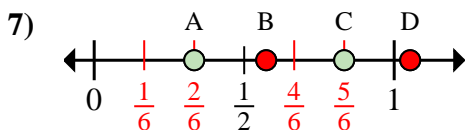
- a. Which letter best shows  $\frac{0}{2}$ ?  
 b. Which letter best shows  $\frac{2}{2}$ ?



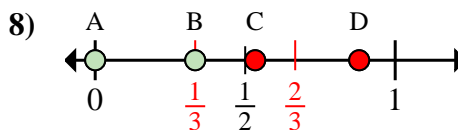
- a. Which letter best shows  $\frac{1}{6}$ ?  
 b. Which letter best shows  $\frac{3}{6}$ ?



- a. Which letter best shows  $\frac{2}{3}$ ?  
 b. Which letter best shows  $\frac{3}{3}$ ?



- a. Which letter best shows  $\frac{5}{6}$ ?  
 b. Which letter best shows  $\frac{2}{6}$ ?



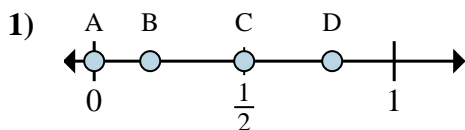
- a. Which letter best shows  $\frac{0}{3}$ ?  
 b. Which letter best shows  $\frac{1}{3}$ ?

1. A C  
 2. C D  
 3. D C  
 4. A D  
 5. A B  
 6. C D  
 7. C A  
 8. A B

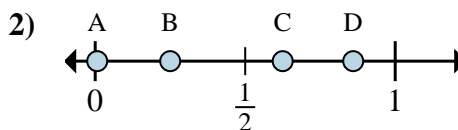


Determine which letter best shows the location of the fraction.

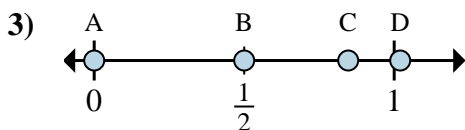
**Answers**



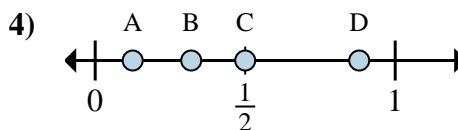
- a. Which letter best shows  $\frac{0}{2}$ ?
- b. Which letter best shows  $\frac{1}{2}$ ?



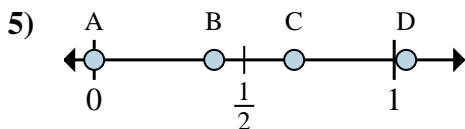
- a. Which letter best shows  $\frac{2}{8}$ ?
- b. Which letter best shows  $\frac{5}{8}$ ?



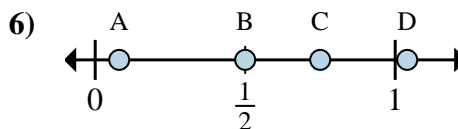
- a. Which letter best shows  $\frac{0}{6}$ ?
- b. Which letter best shows  $\frac{3}{6}$ ?



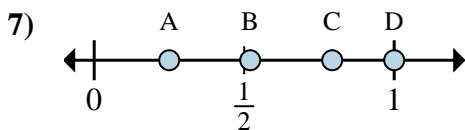
- a. Which letter best shows  $\frac{1}{8}$ ?
- b. Which letter best shows  $\frac{4}{8}$ ?



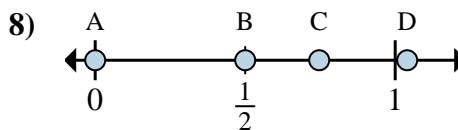
- a. Which letter best shows  $\frac{0}{3}$ ?
- b. Which letter best shows  $\frac{2}{3}$ ?



- a. Which letter best shows  $\frac{2}{4}$ ?
- b. Which letter best shows  $\frac{3}{4}$ ?



- a. Which letter best shows  $\frac{1}{4}$ ?
- b. Which letter best shows  $\frac{4}{4}$ ?



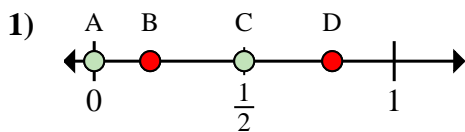
- a. Which letter best shows  $\frac{0}{2}$ ?
- b. Which letter best shows  $\frac{1}{2}$ ?

- 1. \_\_\_\_\_
- 2. \_\_\_\_\_
- 3. \_\_\_\_\_
- 4. \_\_\_\_\_
- 5. \_\_\_\_\_
- 6. \_\_\_\_\_
- 7. \_\_\_\_\_
- 8. \_\_\_\_\_

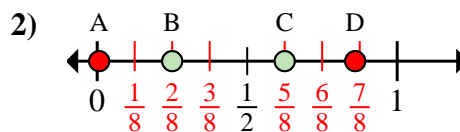


Determine which letter best shows the location of the fraction.

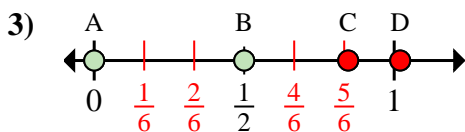
**Answers**



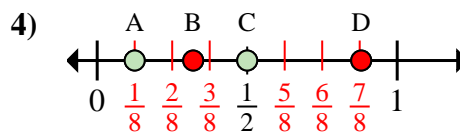
- a. Which letter best shows  $\frac{0}{2}$ ?  
 b. Which letter best shows  $\frac{1}{2}$ ?



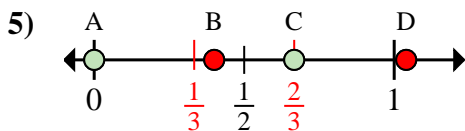
- a. Which letter best shows  $\frac{2}{8}$ ?  
 b. Which letter best shows  $\frac{5}{8}$ ?



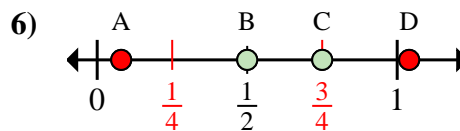
- a. Which letter best shows  $\frac{0}{6}$ ?  
 b. Which letter best shows  $\frac{3}{6}$ ?



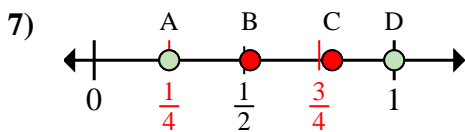
- a. Which letter best shows  $\frac{1}{8}$ ?  
 b. Which letter best shows  $\frac{4}{8}$ ?



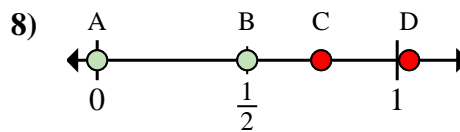
- a. Which letter best shows  $\frac{0}{3}$ ?  
 b. Which letter best shows  $\frac{2}{3}$ ?



- a. Which letter best shows  $\frac{2}{4}$ ?  
 b. Which letter best shows  $\frac{3}{4}$ ?



- a. Which letter best shows  $\frac{1}{4}$ ?  
 b. Which letter best shows  $\frac{4}{4}$ ?



- a. Which letter best shows  $\frac{0}{2}$ ?  
 b. Which letter best shows  $\frac{1}{2}$ ?

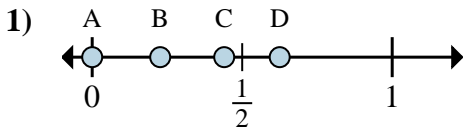
1. A C  
 2. B C  
 3. A B  
 4. A C  
 5. A C  
 6. B C  
 7. A D  
 8. A B



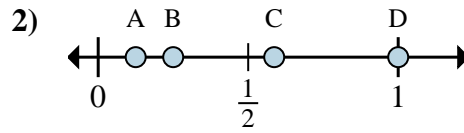


Determine which letter best shows the location of the fraction.

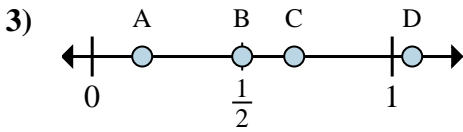
**Answers**



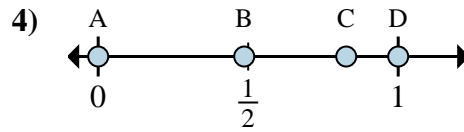
- a. Which letter best shows  $\frac{0}{8}$ ?  
 b. Which letter best shows  $\frac{5}{8}$ ?



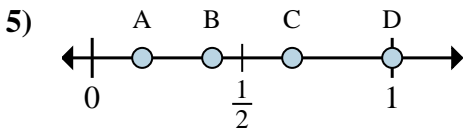
- a. Which letter best shows  $\frac{1}{8}$ ?  
 b. Which letter best shows  $\frac{2}{8}$ ?



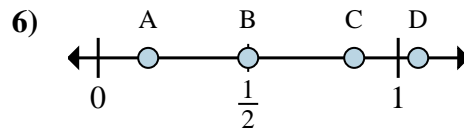
- a. Which letter best shows  $\frac{1}{6}$ ?  
 b. Which letter best shows  $\frac{3}{6}$ ?



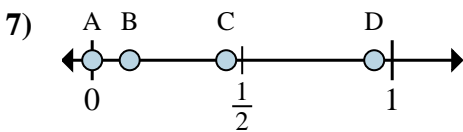
- a. Which letter best shows  $\frac{0}{2}$ ?  
 b. Which letter best shows  $\frac{2}{2}$ ?



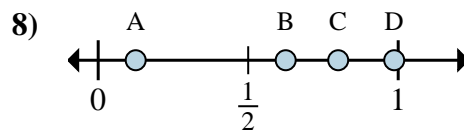
- a. Which letter best shows  $\frac{3}{3}$ ?  
 b. Which letter best shows  $\frac{2}{3}$ ?



- a. Which letter best shows  $\frac{3}{6}$ ?  
 b. Which letter best shows  $\frac{1}{6}$ ?



- a. Which letter best shows  $\frac{0}{8}$ ?  
 b. Which letter best shows  $\frac{1}{8}$ ?



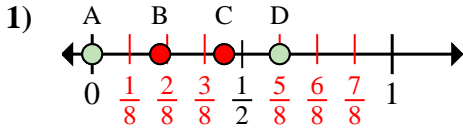
- a. Which letter best shows  $\frac{5}{8}$ ?  
 b. Which letter best shows  $\frac{1}{8}$ ?

1. \_\_\_\_\_  
 2. \_\_\_\_\_  
 3. \_\_\_\_\_  
 4. \_\_\_\_\_  
 5. \_\_\_\_\_  
 6. \_\_\_\_\_  
 7. \_\_\_\_\_  
 8. \_\_\_\_\_

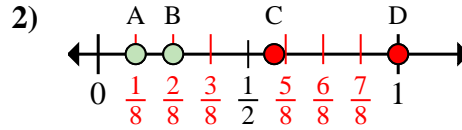


Determine which letter best shows the location of the fraction.

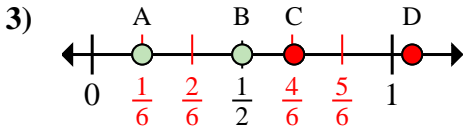
**Answers**



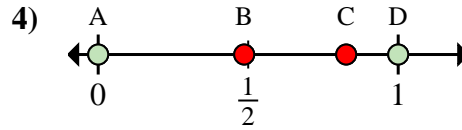
- a. Which letter best shows  $\frac{0}{8}$ ?  
 b. Which letter best shows  $\frac{5}{8}$ ?



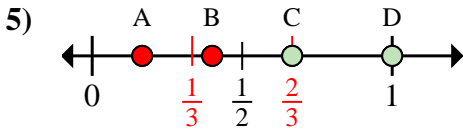
- a. Which letter best shows  $\frac{1}{8}$ ?  
 b. Which letter best shows  $\frac{2}{8}$ ?



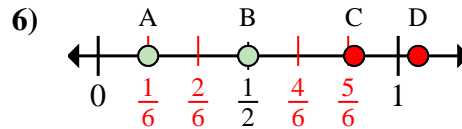
- a. Which letter best shows  $\frac{1}{6}$ ?  
 b. Which letter best shows  $\frac{3}{6}$ ?



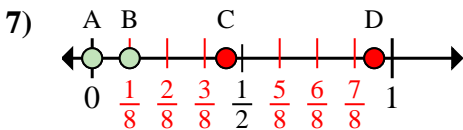
- a. Which letter best shows  $\frac{0}{2}$ ?  
 b. Which letter best shows  $\frac{2}{2}$ ?



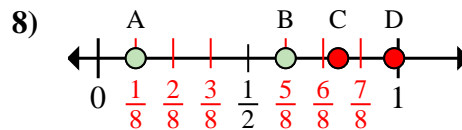
- a. Which letter best shows  $\frac{3}{3}$ ?  
 b. Which letter best shows  $\frac{2}{3}$ ?



- a. Which letter best shows  $\frac{3}{6}$ ?  
 b. Which letter best shows  $\frac{1}{6}$ ?



- a. Which letter best shows  $\frac{0}{8}$ ?  
 b. Which letter best shows  $\frac{1}{8}$ ?



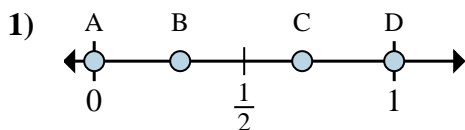
- a. Which letter best shows  $\frac{5}{8}$ ?  
 b. Which letter best shows  $\frac{1}{8}$ ?

1.   A     D    
 2.   A     B    
 3.   A     B    
 4.   A     D    
 5.   D     C    
 6.   B     A    
 7.   A     B    
 8.   B     A

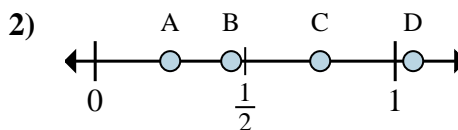


Determine which letter best shows the location of the fraction.

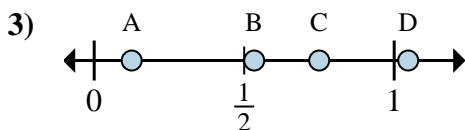
**Answers**



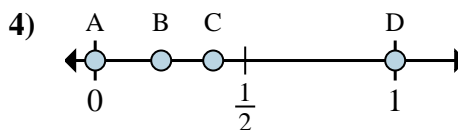
- a. Which letter best shows  $\frac{0}{2}$ ?  
 b. Which letter best shows  $\frac{2}{2}$ ?



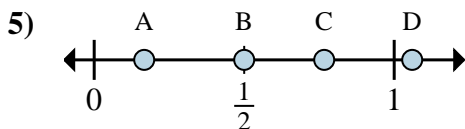
- a. Which letter best shows  $\frac{1}{4}$ ?  
 b. Which letter best shows  $\frac{3}{4}$ ?



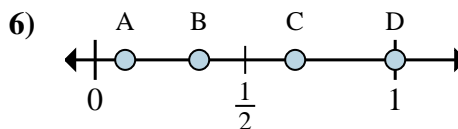
- a. Which letter best shows  $\frac{6}{8}$ ?  
 b. Which letter best shows  $\frac{1}{8}$ ?



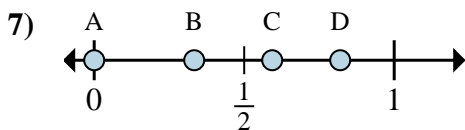
- a. Which letter best shows  $\frac{0}{2}$ ?  
 b. Which letter best shows  $\frac{2}{2}$ ?



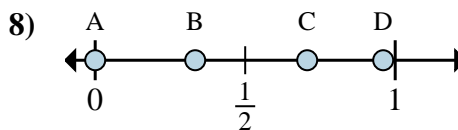
- a. Which letter best shows  $\frac{3}{6}$ ?  
 b. Which letter best shows  $\frac{1}{6}$ ?



- a. Which letter best shows  $\frac{2}{3}$ ?  
 b. Which letter best shows  $\frac{3}{3}$ ?



- a. Which letter best shows  $\frac{0}{3}$ ?  
 b. Which letter best shows  $\frac{1}{3}$ ?



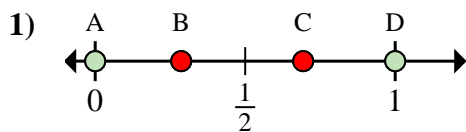
- a. Which letter best shows  $\frac{0}{6}$ ?  
 b. Which letter best shows  $\frac{2}{6}$ ?

1. \_\_\_\_\_  
 2. \_\_\_\_\_  
 3. \_\_\_\_\_  
 4. \_\_\_\_\_  
 5. \_\_\_\_\_  
 6. \_\_\_\_\_  
 7. \_\_\_\_\_  
 8. \_\_\_\_\_

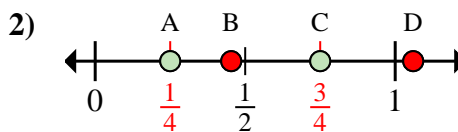


Determine which letter best shows the location of the fraction.

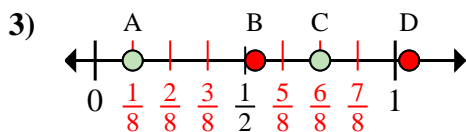
**Answers**



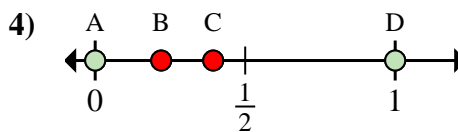
- a. Which letter best shows  $\frac{0}{2}$ ?  
 b. Which letter best shows  $\frac{2}{2}$ ?



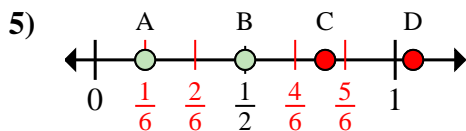
- a. Which letter best shows  $\frac{1}{4}$ ?  
 b. Which letter best shows  $\frac{3}{4}$ ?



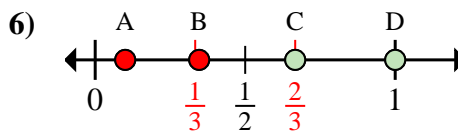
- a. Which letter best shows  $\frac{6}{8}$ ?  
 b. Which letter best shows  $\frac{1}{8}$ ?



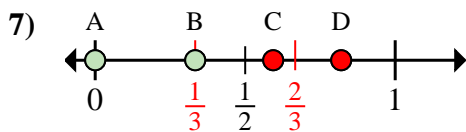
- a. Which letter best shows  $\frac{0}{2}$ ?  
 b. Which letter best shows  $\frac{2}{2}$ ?



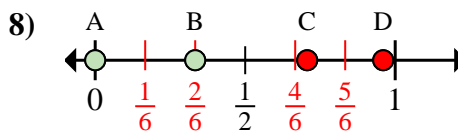
- a. Which letter best shows  $\frac{3}{6}$ ?  
 b. Which letter best shows  $\frac{1}{6}$ ?



- a. Which letter best shows  $\frac{2}{3}$ ?  
 b. Which letter best shows  $\frac{3}{3}$ ?



- a. Which letter best shows  $\frac{0}{3}$ ?  
 b. Which letter best shows  $\frac{1}{3}$ ?



- a. Which letter best shows  $\frac{0}{6}$ ?  
 b. Which letter best shows  $\frac{2}{6}$ ?

1. A D  
 2. A C  
 3. C A  
 4. A D  
 5. B A  
 6. C D  
 7. A B  
 8. A B