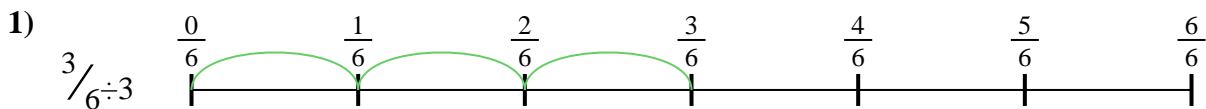




Use the numberline to solve each problem. The first is marked for you.

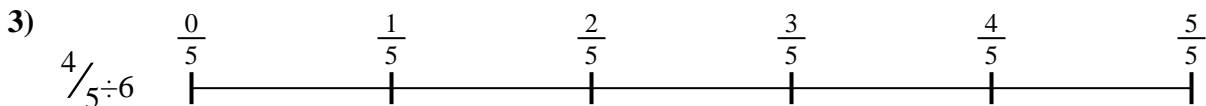
Answers



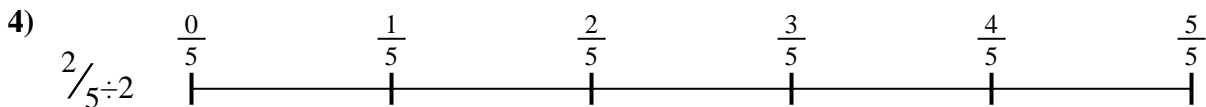
1. _____



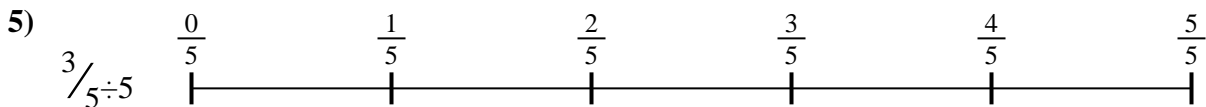
2. _____



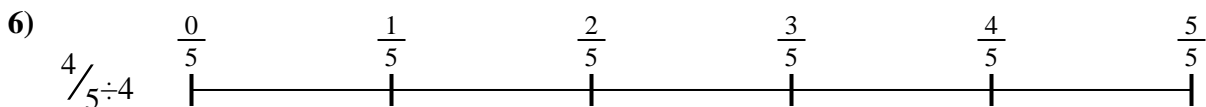
3. _____



4. _____



5. _____




6. _____



7. _____



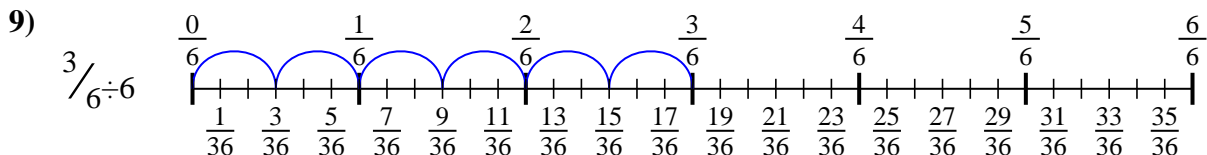
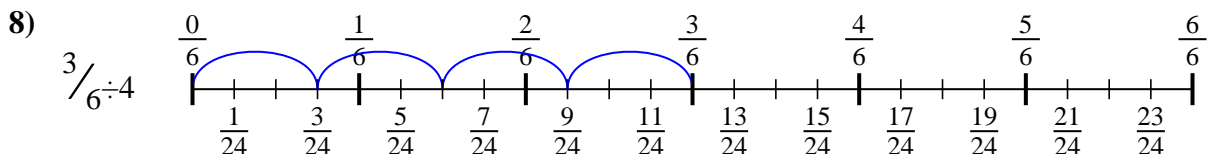
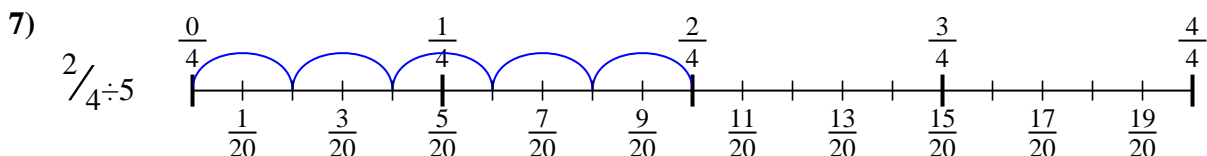
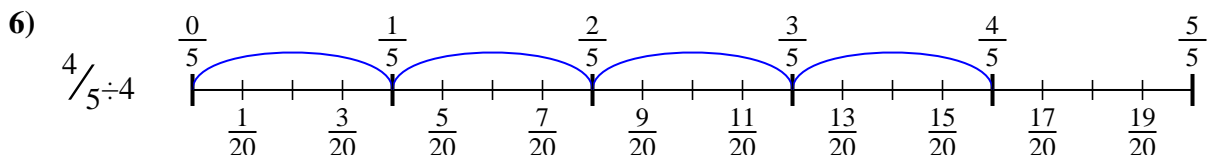
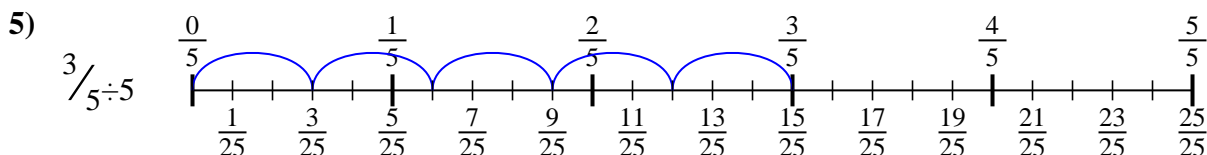
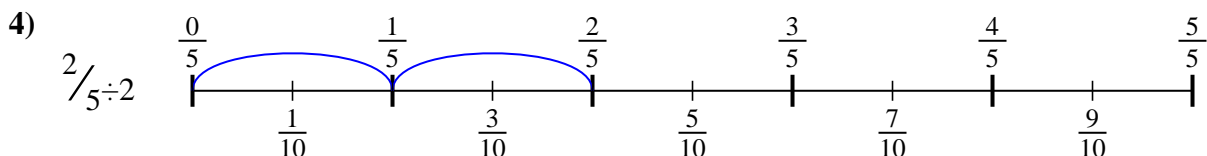
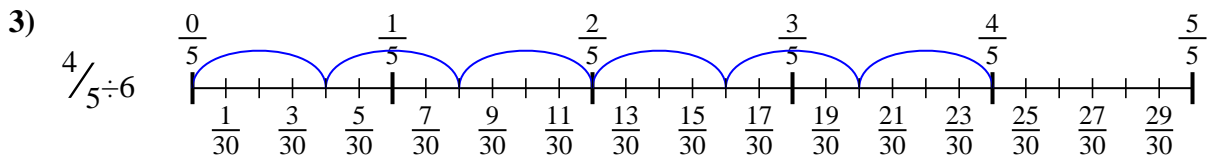
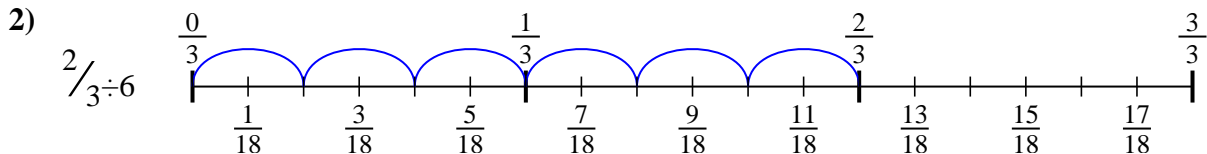
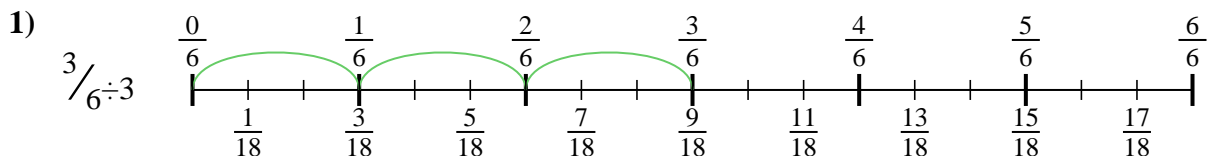
8. _____



9. _____



Use the numberline to solve each problem. The first is marked for you.



Answers

1. $\frac{3}{18}$

2. $\frac{2}{18}$

3. $\frac{4}{30}$

4. $\frac{2}{10}$

5. $\frac{3}{25}$

6. $\frac{4}{20}$

7. $\frac{2}{20}$

8. $\frac{3}{24}$

9. $\frac{3}{36}$



Use the numberline to solve each problem. The first is marked for you.

Answers

$\frac{3}{24}$

$\frac{2}{20}$

$\frac{4}{20}$

$\frac{2}{18}$

$\frac{2}{10}$

$\frac{3}{18}$

$\frac{4}{30}$

$\frac{3}{25}$

$\frac{3}{36}$

1. _____
2. _____
3. _____
4. _____
5. _____
6. _____
7. _____
8. _____
9. _____

